

TISMA EXAM SERIES 1 **GRADE 1 OPENER 2023**

2023 ACADEMIC YEAR

FOR MARKING SCHEMES:

CONTACT:

Mr Machuki – 0724333200

OR

ORDER ONLINE AT:

www.kenyaeducators.co.ke

KENYA EDUCATORS CONSULTANCY

TISMA 001

COMPETENCY BASED CURRICULUM GRADE 3 - TERM 1 OPENER (ENTRY) EXAM 2023 - CHRISTIAN RELIGIOUS ACTIVITIES

NAME: SCHOOL:

1. God is our _____(stranger, creator)
2. _____ is the son of God (Moses, Jesus)
3. A person we do not know is _____ (friend, stranger)
4. _____was the only person who was obedient and faithful to God (peter, Noah)
5. The Bible is a _____ book.(story, Holy)
6. _____ gives us light in the day.(moon, sun)
7. _____ created us in his own image.(Mary, satan, God)
8. Who was given us as a gift from God? _____(Joseph, Jesus)
9. Where was Jesus born ? _____(Nazareth, Bethlehem)
10. The day Jesus resurrected from the dead is called? _____(merry christmas, Easter Sunday)
11. Jesus changed water into wine at a wedding in _____(church, Cana)
12. In which form did the Holy Spirit came down? _____(water, fire)
13. We _____to God when we pray.(cry, talk)
14. _____ created the parts of our body.(teacher, God)
15. The Bible is _____as Christians.(guide, toy)
16. We use our _____to sing for God.(nose, mouth)

17. Who called Samuel when sleeping? _____ (Eli, God)
18. How many books does the Bible has in total? _____ (39, 27, 66)
19. We should share with the _____ (poor, rich)
20. God is happy when we _____ him. (disobey, obey)
21. I am fearfully and _____ made (honestly, wonderfully)
22. Who was carried by a chariot to Heaven? (Elisha, Elijah)
23. Which lake was Jesus and his disciples crossing on a boat? (Victoria, Galilee)
24. Jesus died on the cross because _____ (he was sick, he loves us)
25. God rested on the _____ day (6th, 5th, 7th)

TISMA 001

COMPETENCY BASED CURRICULUM

1. Dictation

- a) _____
- b) _____
- c) _____
- d) _____
- e) _____

2. Add 'd' at the end of the following words

Examples. Play - Played

- a) Love_____
- b) Use _____
- c) Live_____

3. Write the following sentences correctly

- a) Tree they trip a on
- b) Came father home by bus
- c) Sees a she lorry

4. Write the opposite

- a) Mother _____

GRADE 3 - TERM 1 OPENER (ENTRY) EXAM 2023 - ENGLISH ACTIVITIES

NAME:

..SCHOOL.....

b) Boy _____

c) Brother_____

(father, sister, girl)

5. Write doing words

a) Plant_____

b) Ride _____

c) Bake _____

d) Write _____

e) Walk_____

f) Jump_____

6. Draw the following items

a) Table

b) House

c) Ruler

d) Belt

e) Tree

7. Use was OR were

a) She _____ driving a car

b) They _____ writing

c) It _____ my pen

d) Silas and Peter _____ playing

e) The dog _____ barking

8. Write the words correctly

a) Regufi

b) Depara

c) Lateb

d) Eret

e) Weflor

9. Write five sentences about myself

a) _____

b) _____

c) _____

d) _____

e) _____

10. Read the following words and sentences

a) Kitchen

b) Grandparents

c) Bench

d) Quickly

e) Anthem

f) Branch

g) The boxes are torn

h) None

i) An angle can fly high

j) Where is the garage?

k) The monkey ate all bananas

l) My fingers are long

TISMA 001

COMPETENCY BASED CURRICULUM

1. _____ keeps on changing
from time to time (climate, weather)

Name the following symbols drawn
below

2. _____

3. _____

4. Our national flag has how many colours

5. Clean water should be stored in
_____ (Ponds, drums)

6. We wear _____ cloths when it is hot
(light, heavy, many)

7. _____ is the top colour in our flag (
white, red, black)

Name three types of soil

8. _____

9. _____

10. _____

Name three wild animals

11. _____

12. _____

13. _____

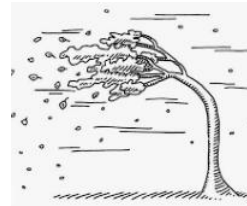
GRADE 3 - TERM 1 OPENER (ENTRY) EXAM 2023 ENVIRONMENTAL ACTIVITIES

NAME: _____ SCHOOL: _____

14. Which soil is used for building houses
_____ (clay, loam, sandy)

15. Animals kept at home are called
_____ (many, wild, domestic)

16. Name the weather symbol _____



17. Name three things that can be used to
model clouds in class

We can get attached by rainy weather
in many ways like

18. _____

19. _____

20. _____

21. List clothes that should be worn
according to this table

Clothes to wear when weather is hot	Clothes to wear when it is cold

Complete the sentences correctly

22. Harvest _____ during the rainy season

23. Always ensure that _____ are closed when it is windy

Give two reasons why we store water

24. _____

25. _____

TISMA 001

COMPETENCY BASED CURRICULUM

Name 3 parts of a plant that we eat as food

1. _____
2. _____
3. _____
4. A cow gives us _____ (pork, mutton, milk)
5. We eat _____ meals in a day (1, 3, 2)
6. The first help we give to an injured person is called _____(help, pricks, first aid)
7. Wounds are covered with a _____(paper, bandage, tissue)
8. The classroom dustbin should be emptied _____(every day, never, weekly)
9. We kill germs in water by _____ (filtering, cooling, boiling)
10. The first teeth to grow are called _____ (first teeth, good teeth, milk teeth)

GRADE 3 - TERM 1 OPENER (ENTRY) EXAM 2023 - HYGIENE AND NUTRITION ACTIVITIES

NAME: _____
SCHOOL _____

Write 3 things we should not share

11. _____
12. _____
13. _____
14. I use _____ to cut my finger nails (teeth, knife, nail cutter)
15. An _____ can be eaten raw (apple, beans, spinach)
16. A _____ treats our teeth. (optician, nurse, dentist)
17. Contaminated water can make us _____(healthy, cry, sick)
18. The main source of water is _____ (tank, tap, rain)

Name three main meals we eat in a day (lunch, snacks, breakfast, chips, super, soda)

19. _____
20. _____
21. _____
22. Green or red pepper tastes _____ (sour, sweet, bitter)

23. I am a place in the house. Food are prepared in me. I am a _____ (dining room, kitchen, sitting room)

24. A _____ cannot be used to clean the floor (broom, mop, panga)

Draw four fruits and write their name

25. _____

26. _____

27. _____

28. _____

Where are these items found in the rooms of a house?

29. Sofa set

30. Bed

31. Frying pan

32. Television

33. Knife

34. Pillow

Name three sources of water

35. _____

36. _____

37. _____

Name the parts of our body we use to clean with the following items

38. Comb

39. Toothbrush

40. Handkerchief

Name two bad oral habits

41. _____

42. _____

43. We use _____ and clean water to wash utensils (jug, soap, toothbrush)

44. _____ causes diseases (food, germs, oil)

45. Dirty utensils bring _____ in the house(mosquitoes, lice, cockroaches)

Which part of plant do we eat from these plants

46. Kales

47. orange

48. Carrots

49. Sugarcanes

50. Sweet potatoes

TISMA 001

COMPETENCY BASED CURRICULUM

IMLA

1. _____

2. _____

3. _____

4. _____

5. _____

Tumia 'hili' au ' haya' kujaza mapengo.

6. Macho

7. Maembe

8. Jiwe

9. Ua

Jaza pengo kwa kutumia ' vizuri" au vizuri

10. Mtoto anafaa kulelewa _____

11. Mwalimu anafaa afundishe _____

12. Gari letu ni -----

Piga mstari herufi kubwa kwenye sentesi
zifuatazo

13. Siku ya Jumapili sisi hupumzika

14. Mlima wa Kilimanjaro unavutia

15. Shule yetu inaitwa Kayole

16. Mjomba wangu anaishi Kabuku.

Tumia kitenzi sahihi kujaza pengo

GRADE 3 - TERM 1 OPENER (ENTRY) EXAM 2023 - KISWAHILI ACTIVITIES

NAME:

..SCHOOL.....

17. Mwalimu ali _____kiswahili (ruka, fundisha)

18. Ami ana _____shambani (lima, osha)

19. Binamu ali _____kucha (kata,kula)

Jaza herufi sahihi kwenye mapengo

20. M_tib_bu

21. H_k_

Tumia hao,au huyu, kujaza mapengo kwa
usahihi

22. Kijana _____ni mwerevu

23. Wanafunzi _____walichelewa

24. Mtoto _____analia

Tunga sentensi ukitumia maneno haya

25. Gari _____

26. Shangazi _____

—

27. Haki

28. Mavazi

Soma hadithi kisha ujibu maswali

Paka na Panya

Juma alipenda kucheza baada ya kula.

Asubuhi moja mama yake alikuwa akifanya

kazi nje ya nyumba. Muda mfupi baadaye panya alipita mbio. Paka alikuwa anamfukuza panya huyo. Juma aliogopa panya sana. Aliingiwa na woga akapanda juu ya sofa nakuanza kulia.

Maswali

29. Ni nani alipenda kucheza ? _____
30. Ni nani alikuwa akifanya kazi? _____
31. Juma alifanya nini kwasababu ya woga?

32. Kwa nini panya alipita mbio? _____

TISMA 001

COMPETENCY BASED CURRICULUM GRADE 3 - TERM 1 OPENER (ENTRY) EXAM 2023 - MATHS ACTIVITIES

NAME: SCHOOL

Strand/Sub strand	Questions	Total	Score	Performance Level
-------------------	-----------	-------	-------	-------------------

1. Write the next numbers

30, 40, _____, _____ 80

2. Circle the greater number

58 85

3. Order from the least to the greatest

15, 8, 18, 24 _____

4. $16 - 13 =$ _____

Write the missing number

5. $13 =$ _____ tens _____ ones

6. $24 =$ _____ tens _____ 4
ones

7. . 30

+ 30

8. $26 + 3 =$ _____

9. $6 + 10 =$ _____

		marks		
NUMBERS	1-15	15		
MEASUREMENT	16-22	7		
GEOMETRY	23-25	3		
TOTAL		25		

10. $4 +$ _____ $= 9$

11. _____ $+ 6 = 10$

12. $45 - 3 =$ _____

13. $12 - 6 =$ _____


14. $8 -$ _____ $= 5$

15. $50 - 30 =$

Complete

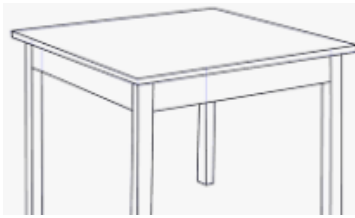
16. One week has how many days

17. Which one holds more



18. Which one is heavier?

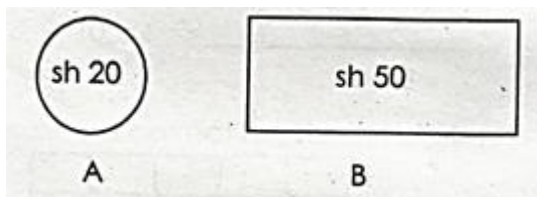




19. Which is the longest line

20. We come to school in the
(evening, morning, night)

21. Which one is a coin?



22. $16 = \underline{\hspace{2cm}} + 4$


23. A triangle has how many corners

24. Write the next pattern



—

25. There are how many circles in
the pictures



TISMA 001

COMPETENCY BASED CURRICULUM GRADE 3 - TERM 1 OPENER (ENTRY) EXAM 2023 - MOVEMENT ACTIVITIES

NAME: SCHOOL

PRACTICAL (20 marks)

1. With the help your teacher (s) you are required to demonstrate HOPPING ONE FOOT at different levels: high, low, medium.

Ensure your observe safety as you hop.

Scoresheet

Indicator	Marks	Score
Observes safety of self and others	5 marks	
Practice hoping at different levels	10 marks	
Sings while hoping/clap	2 marks	

Exhibit general sportsmanship	2 marks	
Hops with friends	1 mark	
TOTAL	20 MARKS	

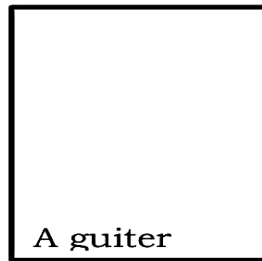
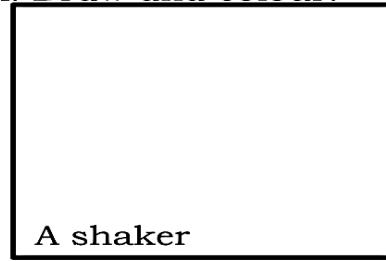
TISMA 001

COMPETENCY BASED CURRICULUM GRADE 3 - TERM 1 OPENER (ENTRY) EXAM 2023 - MUSIC ACTIVITIES

NAME:

..SCHOOL.....

A. Draw and colour.




B. Name four places where we sing.

1. _____
2. _____
3. _____
4. _____

C. The national anthem has _____

D. Draw and colour our Kenyan flag.



E. Circle happy songs.



(___/10marks)

F. Oral singing (practical) ie. (National Anthem)

- a. Rhythm. (5marks)
- b. Audibility. (5marks)
- c. Diction. (5marks)
- d. Voice variation. (5marks)

Assessment Rubric:

Exceeds Expectation	Meets Expectation	Approaching Expectation	Below Expectation
48-50	40-47	30-39	0-29

**COMPETENCY BASED
CURRICULUM**

**GRADE 3 - TERM 1 OPENER
(ENTRY) 2023 READING/KUSOMA**

NAME:

...SCHOOL.....

Read Aloud the following words fluently

1. Computer
2. Staffroom
3. Train
4. Bucket
5. Kitchen
6. Farming
7. Radio
8. String
9. Soup
10. Buffalo

11. Shelf
12. Movement
13. Counters
14. Environment
15. Player

Read the following sentences

1. The cow has drunk water
2. I live near a lake
3. My mother loves swimming
4. We take breakfast every morning
5. He likes reading books

SOMA UFAHAMU UFUATAO KWA

UFASAHA

Sara ni mwanafunzi katika gredi ya pili. Sara anapenda kucheza. Yeye hupenda kucheza mchezo wa Kamba. Wakati wa mapumziko yeye pamoja na marafiki zake huenda kwenye uwanja.

Sara husaidiwa na marafiki kushika
Kamba. Darasani Sara huwa na maadili
mema. Kila mara huwa nambari moja
darasani.