


TISMA 001 GRADE 4 TERM 1 OPENER
ART AND CRAFT & MUSIC


ART AND CRAFT

1. Draw the following items and create dark and light parts in them using the colours indicated. (4mks)

a) Pot (use black colour)



b) Bucket (use red colour)



- c) The technique of drawing that you have used in the diagrams drawn above is known as _____

(1mk)

- d) Write any **four** items you can use to shade the drawings in question 1 a and b above. (4mks)

a) _____

b) _____

c) _____

d) _____

2. Grade 4 learners at Kapedo primary were asked by their teacher to draw a human form. Which materials did they need to start drawing? (4mks)

- a) _____
- b) _____
- c) _____
- d) _____

3. What do you call a technique of picture making that involves cutting and pasting different pictures to make one pictorial composition? (1mk)

4. Write the materials you can use to do the following activities in question 3 above. (3mks)

- a) Cutting pictures

- b) Pasting pictures


- c) Sticking or pasting surface

5. Match the techniques with where they are used. (3mks)

<u>Technique</u>	<u>Where used</u>
a) Twining	Drawing
b) Cutting and pasting	Basketry
c) Smudge	Montage

MUSIC

Use the diagram below to answer questions 1a, b, c.




- 1. a) What do you call the musical instrument shown above?
_____ (1mk)
- b) How is the musical instrument shown above played? (1mk)

- c) The instrument shown above is a _____ instrument.
(wind, string, percussion) (1mk)

2. When a person is singing alone it is known as _____ singing while when you sing as a group it is known as _____ singing. **(2mks)**

3. In singing, when two or more voice parts are combined and they sound nice it is referred to as _____ **(1mk)**

4. Draw and colour a kayamba. **(2mks)**



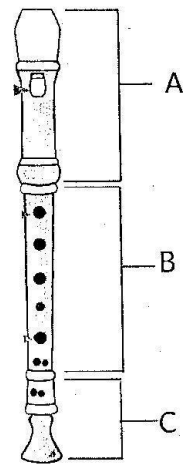
5. Kayamba is a _____ percussion instrument. **(1mk)**
(melodic, non-melodic)

6. A kayamba is played by _____ to produce sound. **(1mk)**

7. The songs that are sung to praise a country and show love to that country are called _____ songs. **(1mk)**

8. The Kenyan National Anthem has _____ verses. **(1mk)**

9. Name the following parts of a descant recorder. **(3mks)**



A _____
B _____
C _____

10. Use the parts of a drum in the box below to fill the gaps. (4mks)

sling, membrane, laces,
soundbox

- a) A _____ is used to carry the drum.
- b) A _____ is hit to produce sound.

c) The _____ attach the membrane onto the body of the drum.

d) A _____ makes the sound loud.

11. When a song is sung by adding a second part, this second part is known as _____ part. (1mk)