

TISMA EXAM SERIES 1
GRADE 5 OPENER 2023

2023 ACADEMIC YEAR

FOR MARKING SCHEMES:

CONTACT:

Mr Machuki – 0724333200

OR

ORDER ONLINE AT:

www.kenyaeducators.co.ke

KENYA EDUCATORS CONSULTANCY

TISMA 001
COMPETENCY BASED CURRICULUM
GRADE 5 TERM 1 OPENER (ENTRY) 2023 - AGRICULTURE
ACTIVITIES

NAME: _____

SCHOOL _____

.....

NAME _____ DATE _____

1. a. Name the three types of soil (3 marks)

.....
.....
.....

b. State two characteristics of clay soil (2 marks)

.....
.....
.....

c. Name the type of soil suitable for farming (1 mark)

.....
.....

d. Outline 3 uses of soil (3 marks)

.....
.....
.....

2. a. Give an example of a plant that can be grown in the following types of soil

i. Clay soil(1 mark)

ii. Sandy Soil(1 mark)

iii. Loam Soil.....(1 mark)

b. Describe any two methods used in watering seedlings (2 marks)

.....
.....
.....
.....

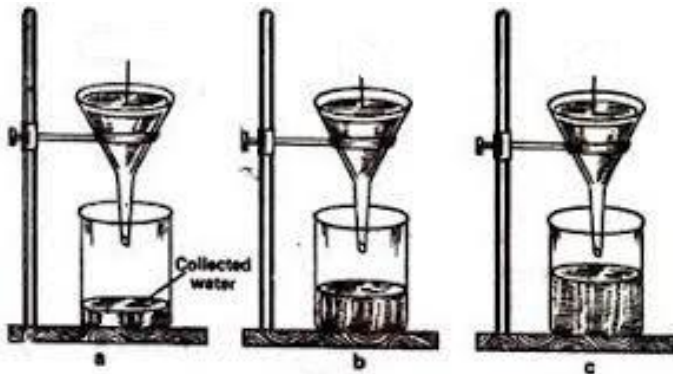
c. Explain the meaning of the term weed. (2 marks)

.....
.....
.....

d. Why is mulching Important? (1 mark)

.....
.....
.....

e. Below is demonstration of the ability of soil to hold water.



Name soil:

i. a(1 mark)

ii. b(1 mark)

iii. c(1mark)

3. a. You are provide with the following materials
- i. old sack
 - ii. sewing thread
 - iii. dry grass
 - iv. buttons
 - v. hanging pole

Use the above materials and construct a scarecrow or model the scarecrow.
(10 marks)

- b. Show three uses of water in farming (3 marks)

.....
.....
.....
.....

- c. Mention 3 tools that are used to prepare a seedbed (3 marks)

.....
.....
.....
.....

4. a. Differentiate between a seed and seedling (2 marks)

.....
.....
.....

- b. Explain the reason why we dry seeds before putting them in seedbed. (2 mark)

.....
.....

40 marks)

(TOTAL

TISMA 001

COMPETENCY BASED CURRICULUM

GRADE 5 TERM 1 OPENER(ENTRY) EXAM 2023 – C.R.E ACTIVITIES

NAME: **SCHOOL**

Strand/Sub strand	Questions	Total marks	Score	Performance Level
Creation	1,2,3,4,7,8,9	21		
The Holy Bible	10	4		
The Life of Jesus Christ	6	3		
Christian Values	5	6		
TOTAL		34		

PERFORMANCE LEVEL GUIDELINES

Strand 1

17-21 scores = level 4

13-16 scores = level 3

8-12 scores = level 2

0-7 score = level 1

Strand 2

4 scores = level 4

3 scores = level 3

2 scores = level 2

0-1 score = level 1

Strand 3

3 scores = level 4

2 scores = level 3

1 scores = level 2

Strand 4

6 scores = level 4

4-5 scores = level 3

2-3 scores = level 2

1. God Created us in his own and(2 marks)

2. State 4 things we do to cope with our emotions (4 marks)

.....
.....
.....
.....
.....

3. Veronica a grade 4 pupil decided to fight her friend Florence in school because Florence stole and ate her packed lunch. What kind of choice did Florence make?
..... (2marks)

b. state three things that happen when fight in school? (3 marks)

.....
.....
.....

c. What was the outcome of the Choice that our First Parents Adam and Eve made in the garden of Eden (2 marks)

.....
.....
.....

4. Name two members of the Nuclear Family (2 marks)

.....
.....
.....

5. What type of Values did the children show in the following situations?

a. Mutisia while passing through the streets of the town saw, a beggar who has stayed for two days without eating. Mutisia decided to buy for the beggar some food to eat.

.....
(2 marks)

b. Venesa sat in her chair in a bus, an old man gets in and Venesa decides to leave for him his chair to sit on..... 2 marks)

c. Musa was attacked by a stranger on his way to school and decided to report the matter to the police station for action..... (2 marks)

6. Mention any three miracles performed by Jesus Christ (3 marks)

.....
.....

.....
.....
7. Fill the missing letters

a. God has no sin. He is h____ ____y. (1 mark)

b. God is our Loving F____th____ r (1 mark)

8. We should say NO to before marriage. (1 mark)

9. Draw the family tree of your family and label accordingly. Circle your name on it.(3 marks)use the back space for drawing.....

10. Recall on any two uses of the bible (4 marks)

.....

TISMA 001
COMPETENCY BASED CURRICULUM
GRADE 5 TERM 1 OPENER (ENTRY) EXAM 2023 –
CREATIVE ART ACTIVITIES

NAME: **SCHOOL**

1. Draw Any two shapes of your choice. Using a pencil shade the shapes using smudge technique to show dark and light areas. (5 marks)

2. You are provided with the following materials
- i. Still life objects (Teacher to provide any)
 - ii. Paper for drawing
 - iii. Rubber
 - iv. Ruler
 - v. Pencil
 - vi. Razor or sharpener

Using still life technique draw a still life composition of a fruit basket. Ensure the arrangement is properly adhered to. (10 marks) use the back of paper for drawing....

Assessment area	Marks	Score
Arrangement of Objects	10 marks	
Shading light and dark areas	2 marks	
Right application of tonal gradation	2 marks	
Are their overlaps	1 mark	

TISMA 001
COMPETENCY BASED CURRICULUM
ENGLISH READING

GRADE 5 TERM 1 OPENER (ENTRY) EXAM 2023

NAME: _____

SCHOOL _____

SECTION 1: LISTENING AND SPEAKING

Your teacher will read for you the following story and you will answer the questions that follow.

One day Amina was walking towards home from the market. Along the way Amina met a stranger who offered her various gifts in exchange for sex. Amina refused to accept the gifts but the man the man insisted on sleeping with Amina. The man forced Amina to sleep with him. Amina cried aloud but no one came for help. Amina reported the matter to the nearest police station and the man was arrested.

- a. What did the stranger want from Amina?
- b. What happened when Amina refused to take the gifts?
- c. Where should we report to when raped like Amina apart from a police station?
- d. How can you avoid strangers when you meet them?

SECTION II: READING ALOUD

Read the following passage fluently

Covid-19 is a disease that has killed so many people. Young and old alike. It kills if you don't take care of yourself by washing your hands, keeping social distance and wearing a face mask. If you happen to be infected you should quarantine yourself for fourteen days. In school our teachers have put measures to ensure that we do not infect others. They have provided us with free facemasks and also by ensuring we keep social distance at all times.

TISMA 001
COMPETENCY BASED CURRICULUM
GRADE 5 TERM 1 OPENER (ENTRY) EXAM 2023
ENGLISH ACTIVITIES

NAME: _____

SCHOOL _____

ENGLISH SECTION B

SECTION III: GRAMMAR AND LANGUAGE STRUCTURE

Use the correct article to fill in the blanks. (4 marks)

1. Fatuma bought _____orange. from the market.
2. _____ umbrella is used to protect from sunshine.
3. _____ pen belongs to the teacher.
4. Grandmother bought _____ apple from the market

Identify and underline the regular and irregular nouns in the sentences below (4marks)

5. The songs were sung by our church
6. The women loved cooking.
7. He does not pay his taxes
8. The farmer is feeding his oxen.

Make sentences using the following pair of words.

e.g., The boy was bought for a beautiful toy (boy - toy)

9. noise - enjoy (2 marks)

.....
10. coin - point (2 marks)

.....
11. join - tie (2 marks)

.....
Complete the following similes.

12. As busy as(1 mark)

13. As easy as(1 mark)

Write the plural of the words below. (4 marks)

14. Invitation

15. Tax

16. Ribbon

17. Gift

Use the correct form of the word in bracket to complete the following sentence.

(4 marks)

18. My aunt cuts oranges with four
(knife)

19. My mother has a broken(tooth)
20. Two will go to the birthday party. (child)
21. Our friends own nine.....(goose)

Which words have the same sounds as underlined in the word below

Peg _____ (2 marks)

(Pen, main, bag, beg)

Use "a lot" or "a lot of" to fill the gaps appropriately

22. We respect our parents _____ (1 mark)
23. Children lie _____ to avoid being punished (1 mark)
24. _____ People use correct sentences in their speech. (1 mark)

Read the story below and answer the questions that follow.

Mother falls sick

Sandra was nine years old. She lived with her mother, father, sister and two brothers. It was his sister Tamara's birthday, so her mother was going to cook a nice meal for the family. Sandra was very happy.

However, late that day, Sandra's mother told the family that she was not feeling well. She needed to rest and would not be able to cook dinner. Father would cook instead. Sandra, with her brothers and sister felt sad and a little angry. They knew their father would not cook a delicious meal as their mother would. In fact, Tamara cried behind the house and refused to talk to anyone.

Sandra and her brother Naaman decided to do something that could make them and the rest of the family better. They made two cards: a get-well card for their mother and a birthday card for Tamara. This cheered everyone up. Later in the afternoon, Mother felt worse.

Father decided to take her to the hospital. The doctor did some blood tests in the laboratory and brought the results.

"What is the mother suffering from?" Sandra asked. "Your mother has been infected with a virus called HIV. She is required to take her medicine, eat a balanced diet and exercise sufficiently. She will be fine," Father explained.

25. Why did Sandra's father decide to take their mother to the hospital? (2 marks)_____

26. What kind of diseases was Sandra's mother infected with?
(1 mark)

.....

27. How did Sandra and her siblings felt when their father was
the one to cook? (1 mark)

28. How did the sickness affect the children in the story? (2
marks)

.....

WRITING

*Write a composition about the first celebration you have attended
(10 marks)*

.....
.....
.....
.....
.....
.....
.....
.....
.....
.....
.....

TISMA 001
COMPETENCY BASED CURRICULUM
GRADE 5 TERM 1 OPENER (ENTRY) EXAM 2023 -HOME
SCIENCE ACTIVITIES

NAME: _____

SCHOOL _____

1. Name two games played in the locality. (2 marks)

.....
.....
.....

2. Name any 3 locally available materials that can be used to improvise play items (3 marks)

.....
.....
.....
.....

3. List 3 qualities to consider when choosing play items for a child (3 marks)

.....
.....
.....
.....

4. Identify 3 common illness in your locality (3 marks)

.....
.....
.....
.....

5. Name 3 causes of illness of in the society (3 marks)

.....
.....
.....
.....

6. What is tippy tap used for? (1 mark)

.....
.....

a. Using the space provided, draw and colour a tippy tap. (4 marks)

b. Name two illnesses in the locality that can prevented by washing hands (2 marks)

.....
.....
.....

7. State whether the following situations are healthy or unhealthy practices.

a. Eating fruits before washing them (1 mark)

b. Washing vegetables before cooking.....(1 mark)

c. Drinking contaminated water (1 mark)

d. Eating soil or soft stones (1 mark)

e. Opening windows while sweeping the house..... (1 mark)

8. Mention 2 ways you can use to care for play items (2 marks)

.....
.....
.....

9. Discuss 2 safety measures to be observed while handling play items (2 marks)

.....
.....
.....

(TOTAL MARKS 30)

TISMA 001
COMPETENCY BASED CURRICULUM
GRADE 5 TERM 1 OPENER (ENTRY) EXAM 2023
KISWAHILI ACTIVITIES

NAME: _____

SCHOOL _____

SEHEMU YA III: MATUMIZI YA LUGHA

Tambua vitanzandimi katika sentensi zifuatazo (Ala 4)

1. Baba alivua papa katika bahari pana.

.....
.....

2. Kila chacha akila hali chakula kikichacha

.....
.....

3. Jana mama alichana nywele mapema.

.....
.....

4. Kuku anachakura chakula mchangani.

.....
.....

5. Nomino ni nini? (Ala 2)

.....

.....

Tumia Nomino zifuatazo katika kuunda sentensi (Ala 3)

(Magonjwa, viwanda, kiti)

6.

.....

7.

.....

8.

.....

9. Je ni maneno gani huwa tunatumia kurejelea sifa ya kitu? k.m safi huitwaje? (Al 1)

.....

.....

Matumizi ya "angu", "etu"

10. Huyu ni rafiki _____(yangu, zetu)

11. Hizi ni meza _____ (zetu, changu)

12. Hiki ni kitabu _____ (vyangu, changu)

Weka mstari chini ya kiwakilishi. (Al 3)

13. Yeye ni mwanafunzi katika shule yetu.

14. Mimi ni mwanafunzi bora katika darasa letu.

15. Mzazi yule anapendeza sana.

16. Eleza maana ya kitenzi na kutoa mfano. (Al 2)

.....

.....

.....

17. Piga mstari chini ya vitenzi katika sentensi zifuatazo (Al 5)

- a. Mwalimu anacheza kandanda kiwanjani.
- b. Mpishi amepika chakula kitamu sana.
- c. Gari letu linaendeshwa mbio sana.
- d. Kuku anachakura chakula topeni.
- e. Tunafaa kusoma kwa bidii ili kufaulu katika mtihani.

Taja salamu zinazotumika katika nyakati zifuatazo (Ala 4)

18. Wakati wa jioni

.....

...

19. Wakati wa asubuhi

.....

.....

20. Nyakati za usiku

.....

.....

21. Wakati wa mchana

SEHEMU YA IV: UFAHAMU

Soma kifungu kifuatacho kisha ujibu maswali yanayofuata

Ufisadi imekuwa jangaa kubwa katika nchi yetu ya Kenya. Katika miji mikubwa, madogo na vijijini ufisadi imekuwa jambo la kawaida. Watu hushiriki ufisadi kwa njia mbalimbali kama vile kupata huduma mbalimbali, kupata kazi, kuepuka kupelekwa korokoroni na vilevile kusafirisha bidhaa bandia kutoka sehemu moja hadi nyingine.

Nchi ya Kenya inapoteza takribani bilioni 20 kila mwaka katika ufisadi. Kwa sababu hii huduma zinazofaa kuwafikia wananchi haziwezi kama vile: barabara kujengwa, elimu bora, kujenga hospitali na kupata maji safi. Hivi karibuni tumeshuhudia pesa zinazofaa kuwa za kuwasaidia wananchi katika vita dhidi ya korona zikinyakuliwa hadharani kana kwamba vyongozi hawana utu huku wagonjwa wa Korona wakifa kila uchao.

Hili ni jambo ambalo kwa sasa limetufikia ukingoni na hatuwezi nyamaza kamwe. Ni lazima tusimame imara kupiga vita dhidi ya ufisadi. Hili ni jukumu langu na lako. Hatuwezi kuruhusu jamii ya kesho kuangamia kwa sababu ya makosa tunayofanya sasa. Mikakati mbalimbali yafaa kuwekwa

ili kuepuka jangaa hili kuhudhuru jamii yetu kama vile, kuweka hukumu ya Maisha kwa wale wanaopatika katika ufisadi, kufudisha wananchi kuhusu maadili, kurejesha masomo kuhusu maadili shuleni na iwe kama kozi maalum na pia kuwaelimisha wananchi kuhusu ufisadi.

22. Ni njia zipi tunazoweza kutumia kuzuia ufisadi (A1 3)

.....

.....

.....

.....

23. Eleza njia tatu ambazo ufisadi hutokea (A1 3)

.....

.....

.....

.....

SEHEMU YA V: KUANDIKA

Wewe ni Mkenya halisi anayejua viongozi wake. Andika insha ya Wasifu kuhusu kiongozi yeyote unayempeda.

.....

.....

.....

.....

.....
.....
.....

TISMA 001
COMPETENCY BASED CURRICULUM
GRADE 5 TERM 1 OPENER (ENTRY) EXAM 2023
KISWAHILI KUSOMA ACTIVITIES

NAME: _____

SCHOOL _____

SEHEMU I: KUSIKILIZA NA LUZUNGUMZA

Mwalimu atakuuliza maswali kisha utajibu

Mwalimu anamkua mwanafunzi

Je, umewahi uhudhuria sherehe yeyote tangu kuzaliwa? (2)

Mwanafunzi ajibu

Ni mambo yapi uliyaona katika sherehe? (8)

Mwanafunzi ajibu

Je, wakati huu wa janga la Korona tunafaa kuhudhuria sherehe yeyote?
(2)

Mwanafunzi ajibu

Taja mambo matatu ya kuzingatia ili kuzuia ugonjwa wa korona? (3)

SEHEMU II: KUSOMA (35)

Soma taarifa ifuatayo kwa ufasaha

Matumizi ya tarakilishi katika mafunzo imepewa kipao mbele katika mtalaa huu wa CBC. Matumizi ya teknolojia mpya inarahisisha sana mafunzo darasani na kusaidia kurahihisha mambo mengi. Wanafunzi shuleni mwetu hutumia vipakatalishi katika kusakura mambo mengi kwenye tovuti kama ilivyoratibiwa katika mafunzo yao. Wanafunzi hufurahia sana kusoma kupitia njia hii ya kisasa na pia huwapa motisha katika masomo yao ya kila siku.

TISMA 001
COMPETENCY BASED CURRICULUM

GRADE 5 TERM 1 OPENER (ENTRY) EXAM 2023- MATHEMATICS

ACTIVITIES

NAME: **SCHOOL**.....

1. Kamau is carrying three large fish. the mass of each fish is 5 kg , what is the total mass of fish -----(2mks)
2. Which unit do we use to measure capacity -----(1mk)
3. Two packets of milk is one litre. How many packets of milk are needed to make 1 litre -----(1mk)

What is the place of digit 6 in the following numbers (4mks)

4. 96 -----
5. 465 -----
6. 9406 -----
7. 60000 -----

What is the total value of the in brackets values (4mks)

8. 5021 (2) -----
9. 7689 (6) -----
10. 43016 (0) -----
11. 6569 (9) -----

Write the following numbers in words (3mks)

12. 599-----
13. 420-----
14. 755-----

15. Three symbols 3, 8, 9 were used to form some digits. write down the largest numbers formed in words -----

----- (1mk)

16. There are eight hundred and eighty eight. write in symbols ----- (1mk)

Arrange the following numbers from the largest to the smallest (2mks)

17. 30,56 , 76 , 9 ,88 ,72 -----

18. 624, 223,789,11,98 -----

Round of the following to the nearest 10 (4mks)

19. 49 -----

20.87 -----

21. 85 -----

22.90 -----

Round of the following to the nearest 100 (3mks)

23.654 -----

24.866 -----

25.708 -----

26. Which multiple of three comes just after 12 ----- (1mk)

Write the following in roman numbers (3mks)

27.3 -----

28.7-----

29.10 -----

Write the next 2 number in the pattern (2mks)

30.12 , 14 , 16 -----, -----

31. 11, 13 15 17 ----- , -----

32. There were 2600 pupils in Kitengela School in the year 2010, 1240 pupils

transferred to Muthurwa School in the year 2011. How many pupils remained

-----A(2mks)

Work out (3mks)

33.---- * 9 = 81

34.----- * ----- = 60

35.6 * 11 = -----


36. Circle the even numbers In the table below (4mks)

49	4	99	12	14	23
17	26	19	24	65	22
8	73	28	47	36	60
84	81	78	26	18	13

Work out

37. $\frac{1}{3}$ of 12 = ----- (1mk)

38. Divide and shade an eighth of this shape (2mks)



39. What is the sum of 78 and 87----- (2mks)

40. A teacher had 48 pencils, he divided them among the 8 pupils, how many

did each pupil get -----

(2mks)

41. Share 40 books among 4 boys. Each gets -----

(2mks)

42. How many 5 litres are in 35 litre container ----- (2mks)

43. Work out

$\frac{1}{4} + \frac{1}{4} =$ ----- (2mks)

TISMA 001
COMPETENCY BASED CURRICULUM
GRADE 5 TERM 1 OPENER (ENTRY) EXAM 2023 - MUSIC
ACTIVITIES

NAME: _____

SCHOOL _____

1. State 3 types of songs (3 marks)

.....
.....
.....
.....

2. Tuishangilie Kenya

Tuishangilie Kenya

Taifa letu tukufu

Kenya tunayoipenda,

Daima

Kenya nchi tunayoipenda,

Daima

Kenya nchi tunayoipenda,

Daima

- a. Name the type of song above (1 mark)

.....

- b. State the reason for your answer in (a) 2 marks

.....
.....
.....

c. What values does the song above promote? (3 marks)

.....

.....

.....

.....

d. Name two instruments that can be used to accompany the song while singing (2 marks)

.....

.....

.....

3. List any 3 instruments used in a folk song (3 marks)

.....

.....

.....

.....

4. Tick (✓) appropriately whether right or wrong.

Scenario	Wrong	Correct	
Singing while not pronouncing words			1 mark
Singing while paying attention to elements of music			1 mark
Clapping hands helps us to sing with the correct rhythm			1 mark

5. You're a required to sing stanza 1 of the Kenya National Anthem as your Teacher listens and assess as per the sheet below. Ensure you are able to sing stanza one of the National anthem in both English and Kiswahili.

Indicator	Marks	Score
Pay attention to pitch accuracy	4 marks	
Sings in the correct rhythm and accentuation	1 mark	
Sings with appropriate phrasings and articulation expressing the desired emotions, feelings and ideas	2 marks	
Improvises other dynamics not indicated	1 mark	

20-25 scores -level 4

15-19 scores - level 3

9-14 scores - level 2

0-8 scores level 1

(TOTAL MARKS

25)

TISMA 001
COMPETENCY BASED CURRICULUM

GRADE 5 TERM 1 OPENER (ENTRY) 2023 - MATHEMATICS
ACTIVITIES

NAME: **SCHOOL**

1. What is the name given to the place where athletes run? (2 mark)

.....
.....
.....

2. State 3 safety measures that you consider when running 100m and 200m (3 marks)

.....
.....
.....
.....

3. List 3 importance's of Team work during sports activity in school (3 marks)

.....
.....
.....
.....

4. Name 3 items you can use to improvise balls (3 marks)

.....

.....

.....


.....

5. What type of catching is shown in the picture below? (1 mark)




.....


6. Identify the types of passes shown in the pictures below.



.....(1 marks)



.....(2 marks)



..... (2 marks)

7. Give 1 reason why we should have commitment in sports. (1 mark)

8. Name the Name the type of game shown below.



TISMA 001
COMPETENCY BASED CURRICULUM
GRADE 5 - TERM 1 OPENER (ENTRY) EXAM 2023
SCIENCE AND TECHNOLOGY

NAME: **SCHOOL**

1. Farmers keeps cows for and(2mks)
2. The diagram below indicates Days (1mk)



3. We wear gumboots when the weather is (1mk)
4. Animals with backbones are called (1mk)
5. Name four characteristics of plants as a living thing (4mks}
 - a)
 - b)
 - c)
 - d)

6 we irrigate our crops during Seasons (1mk)

7 Name three uses of water at home (3mks)

a)

b)

c)

8 We clean our hands with And(2mks)

9 The soil that has large particles is called(loam ,
clay , sand) (1mk)

10 Where do plants grow(1mk)

11 State six types of domestic and wild animals
(Eagle, Elephant, Dog, Hen, Donkey, Hare)

Domestic animals	Wild animals

--	--

12 Loam soil is best suitable for (**Modeling , Farming ,building) (1mk)**

13 Name two cash crops grown at home (2mks)

a)

b)

14 Name the four colours of the national flag (4mks)

a)

- b)
- c)
- d)

15 Name four sources of water at home (4mks)

- a)
- b)
- c)
- d)

16 Name the type of area where cactus plant grows

.....(1mk)

17 We use what to sweep the house at home (1mk)

18 Moving air is called (1mk)


19 How many common senses do human being(1mk)

20 A person who treats human teeth is called (1mk)

21 The tool below is called (1mk)



22 . Which characteristic do this animal possess as a living organism.....(1mk)



23 . Define the term digestion

.....

.....(1mk)

24 . When we breathe in, the chest moves (1mk)

25 . Digestion begins in the And ends at

..... (2mks)

26 . Draw and label a digestive system (5mk)

TISMA 001
COMPETENCY BASED CURRICULUM
GRADE 5 TERM 1 OPENER (ENTRY) EXAM 2023 - SOCIAL STUDIES
ACTIVITIES

NAME: **SCHOOL**

1. Name the four cardinal points of a compass (4 marks)

.....
.....
.....
.....
.....

2. State 3 uses of a compass (3 marks)

.....
.....
.....
.....

3. What is the direction of Grade 4 class from the school gate? (1 mark)

.....
.....

4. a. what is the name of your county? (1 mark)

.....
.....

b.Name 3 other counties that border your county. (3 marks)

.....
.....
.....
.....

c. Name 3 rivers that are found in your county (3 marks)

.....
.....
.....
.....

d. How many seasons are there in a year? (1 mark)

.....
.....

e. Write down the names of the seasons (4 marks)

.....
.....
.....
.....
.....

5. How should we conserve physical features in the following situations?

a. A river full of waste products dumped inside.(2 marks)

.....
.....

b. A forest whose trees have been cut down (2 marks)

.....
.....
6. Discuss the activities that farmers do during the following seasons

a. Dry season
(1 mark)

b. Wet season
.....(1 mark)

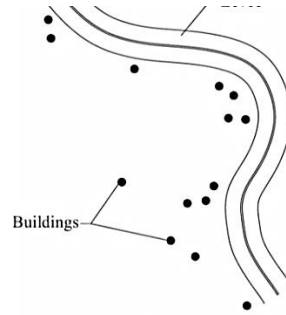
c. Rainy season
(1 mark)

7. Draw a compass point with the four cardinal points (3 marks)

8. We grow rice in our county. We (buy, sell) to other counties (1 mark)

9. Who do we depend on to make our school uniforms?
..... (1 mark)

10. Describe the population distribution as shown in the pictures (6 marks)



.....

.....



.....