

# KCPE NOVEMBER 2023 PREDICTION MASTER CYCLE 15

## 51600715

035713655



KENYA NATIONAL PREDICTION TESTS

# KCPE



516007

## SOCIAL STUDIES AND RELIGIOUS EDUCATION

Time: 2 hours 15 minutes

### INSTRUCTIONS TO CANDIDATES (Please read these instructions carefully)

1. You have been given this question booklet and a separate answer sheet. The question booklet contains 90 questions.
2. Do any necessary rough work in this booklet.
3. When you have chosen your answer, mark it on the **ANSWER SHEET**, not in this question booklet.

### HOW TO USE THE ANSWER SHEET

4. Use only an ordinary pencil.
5. Make sure that you have written on the answer sheet:

**YOUR INDEX NUMBER**

**YOUR NAME**

**NAME OF YOUR SCHOOL**

6. By drawing a **dark line** inside the correct numbered boxes mark your full Index Number (i.e. School Code Number and the three-figure Candidate's Number) in the grid near the top of the answer sheet.
7. Do not make any marks outside the boxes.
8. Keep the sheet as clean as possible and do not fold it.
9. For each of the questions 1-90 four answers are given. The answers are lettered A, B, C and D. In each case only **ONE** of the four answers is correct. Choose the correct answer.
10. On the answer sheet, show the correct answer by drawing a **dark line** inside the box in which the letter you have chosen is written.

### Example

#### In the Question Booklet:

44. The method used by the Portuguese to administer Mozambique was

- A. Assimilation
- B. Indirect rule
- C. Association policy
- D. Direct rule

The correct answer is "D".

#### On the answer sheet:

4. (A) (B) (C) (D) 14. (A) (B) (C) (D) 24. (A) (B) (C) (D) 34. (A) (B) (C) (D) 44. (A) (B) (C) (D)

In the set of boxes numbered 44, the box with the letter **D** printed in it is marked.

11. Your **dark line** **MUST** be within the box.
12. For each question **ONLY ONE** box is to be marked in each set of four boxes.



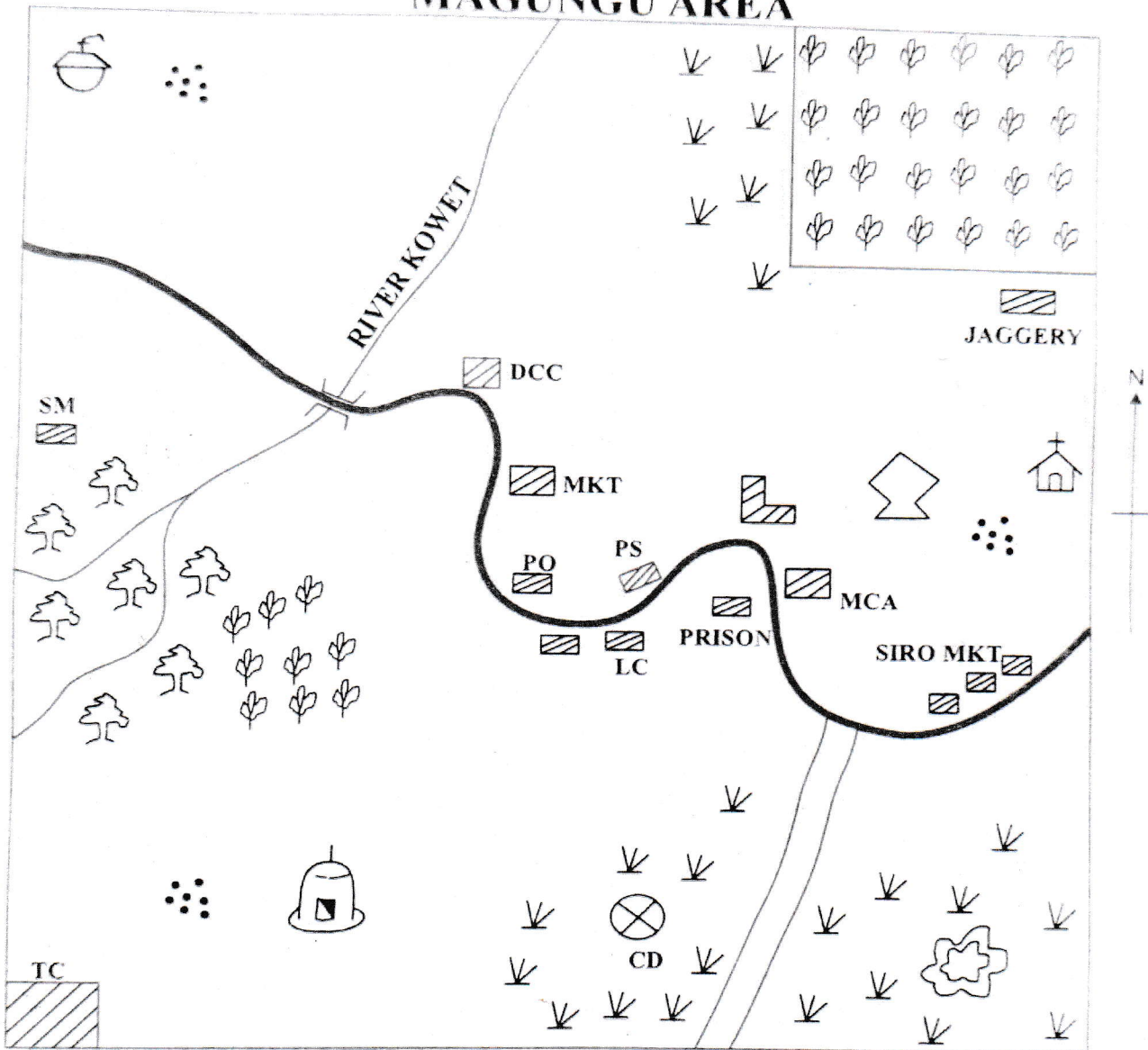
906506

This question paper consists of 12 printed pages.

© Mtihani Bora



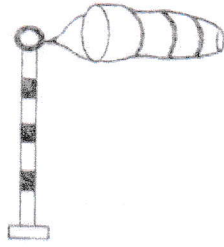
# MAGUNGU AREA



SCALE: 0 1 2 3 4 5 6 7 8 9 10 11 12 KM

KEY					
	Forest		Houses		Tarmac road
PS	Police station		Church		Murram road
	Scrubs	LC	Law court	MCA	Member of County Assembly office
	Museum		Mosque		Shrine
	Tea plantation	TC	Theological college	PO	Post office
MKT	Market	SM	Saw mill	DCC	Deputy county commissioner' office
	Quarry		School	CD	Cattle Dip

Study the map of Magungu Area above and answer questions 1 - 7.

1. What is the direction of the quarry from the shrine?
  - A. North west
  - B. South east
  - C. North east
  - D. South west
2. Which type of soil is likely to be found in the north western part of Magungu area?
  - A. Black cotton soil
  - B. Alluvial soil
  - C. Sandy soil
  - D. Red volcanic soil
3. Magungu area is likely to be headed by an elected
  - A. Deputy county commissioner
  - B. Senator
  - C. Governor
  - D. Member of county Assembly
4. Three of the following economic activities are carried out in Magungu area. Which one is **not**?
  - A. Trading activities
  - B. Cash crop farming
  - C. Fishing activities
  - D. Lumbering activities
5. The settlement pattern practised in Magungu area can be described as
  - A. dense
  - B. linear
  - C. clustered
  - D. nucleated
6. Which one of the following essential services is urgently needed in Magungu area?
  - A. Recreational services
  - B. Security services
  - C. Health services
  - D. Educational services
7. The following religions are practiced in Magungu area **except**
  - A. traditionalism
  - B. Christianity
  - C. Islamic
  - D. paganism
8. Which one of the following sets of communities belong to the Semites?
  - A. Lunda, Herero, Ovambo, Luba
  - B. Amharas, Tigreans, Falasha, Danakil
  - C. Afar, Issa, Falasha, Nubians
  - D. Orma, Tigreans, Nubians, Bagarra
9. Which of the following is the main factor to consider when establishing a jaggery in an area?
  - A. Availability of ready market
  - B. Availability of power supply
  - C. Availability of adequate labour
  - D. Availability of raw materials
10. Which one of the following **cannot** be classified as a traditional social institution?
  - A. Family
  - B. Age set
  - C. Clan
  - D. School
11. The diagram below shows a weather instrument  

  - A. It has two holes
  - B. It is painted black and white
  - C. It is used to measure two aspects of weather
  - D. It is used to measure strength and speed of wind



12. The following features are likely to be found at the youthful stage of river Zambezi **except**
- A. tributaries
  - B. V- shaped valleys
  - C. estuary
  - D. waterfalls and rapids

13. The time at Kiliti along longitude 15°E is 12.00am. What time would it be at Niamey along longitude 45°W?
- A. 4.00 am
  - B. 6.00 am
  - C. 4.00 pm
  - D. 6.00 pm

14. The problem facing the Jua kali industry in Kenya today is
- A. lack of adequate space
  - B. stiff competition from other players
  - C. poor transport network
  - D. inadequate finances to improve their production

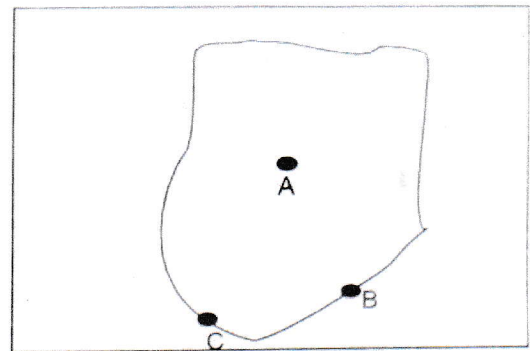
15. The following are pre-historical sites in Eastern Africa. Which one is wrongly matched with the country it is found?

	PRE- HISTORICAL SITE	COUNTRY
A.	Omo valley	Ethiopia
B.	Meroe	South Sudan
C.	Ntusi	Uganda
D.	Peninj	Tanzania

16. The secretary to the school management committee in a public primary school is also
- A. the head of disciplinary committee
  - B. the chairman of the school staff meeting
  - C. the person who prepares the school routine
  - D. the senior most teaching staff

17. The following communities are mainly found in West African countries. Which pair belong to the Kwa speakers as a language group?
- A. Ewe and Fa
  - B. Bambara and Susu
  - C. Mossi and Dagomba
  - D. Fulani and Wolof

Use the diagram below to answer the questions that follow




18. The letters represent the cocoa growing regions in Ghana. The regions A, B and C respectively represent
- A. Kumasi, Takoradi, Accra
  - B. Accra, Kumasi, Takoradi
  - C. Kumasi, Accra, Takoradi
  - D. Takoradi, Accra, Kumasi

19. What is the main reason for the high population density in the highlands of Eastern Africa?
- A. Adequate and reliable rainfall
  - B. Well drained and fertile black cotton soils
  - C. Cool and warm climate
  - D. Reliable and adequate trading activities

20. Which one of the following countries is wrongly matched with its capital city?
- A. Lesotho - Maseru
  - B. Togo - Porto Novo
  - C. Namibia - Windhoek
  - D. Equatorial Guinea- Malabo

21. The diagram below represents a road sign



The above road sign means that

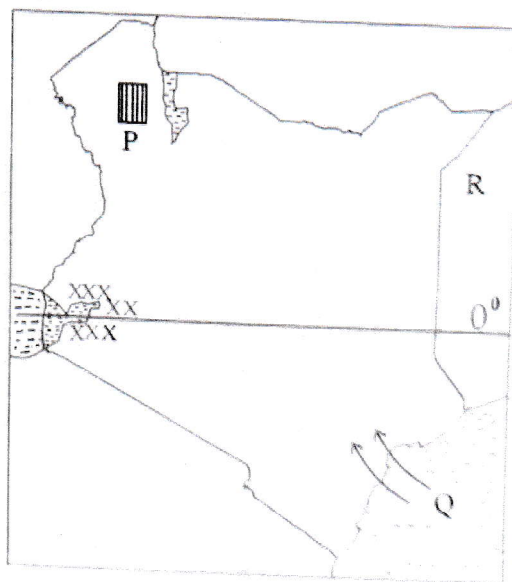
- A. there is a bump ahead  
B. only pedestrians are allowed to enter  
C. no motorist is allowed beyond this point  
D. no parking here
22. The Ntami of the Nyamwenzi was assisted by a council of elders known as  
A. Wanyamphala  
B. Wanyikulu  
C. Mugabe  
D. Liqoqo
23. Which set of items did the Maasai directly received from the Agikuyu for trade?  
A. Hides, meat, milk  
B. Soap, millet, tea leaves  
C. Beans, millet, maize  
D. Hides, skins, milk
24. Uganda is currently headed by  
A. an elected president  
B. Kabaka  
C. an elected prime minister  
D. an elected governor
25. In which month of the year do the people of southern hemisphere experience winters?  
A. March  
B. June  
C. September  
D. December
26. The following are descriptions of a certain African river,  
*i) it originates from a plateau*  
*ii) it forms an estuary at its mouth*  
*iii) it has the most number of tributaries*  
The above river is likely to be  
A. River Congo  
B. River Senegal  
C. River Niger  
D. River Zambezi
27. Which pair of forces were involved in the formation of Usambara mountains in Tanzania?  
A. Syncline and anticline  
B. Faulting and uplifting  
C. Tensional and upthrust  
D. Compressional and upthrust
28. Which statement is **not** true about the Tswana, Fulani and Maasai as pastoral communities?  
A. They occupy the savannah parts of Africa  
B. They practise transhumance  
C. They live in temporary shelters  
D. They keep large herds of cattle, goats and some horses
29. The act of writing a will before the head of the family dies is known as  
A. testate inheritance  
B. testate succession  
C. intestate succession  
D. intestate inheritance
30. Which one of the following is **not** a source of revenue for all the county governments of Kenya?  
A. Trading licences  
B. Grants from the national government  
C. Parking fee  
D. Court fines



31. The following statements are true about the senate **except**
- it has a total of 68 members
  - it has 16 women nominees by political parties
  - the speaker and the deputy are elected by senators
  - it debates on matters affecting the national assembly
32. Africa is located along the longitude
- 37°N and 35°S
  - 18°W and 54°E
  - 54°W and 18°E
  - 35°W and 42°E
33. The headquarters of the Economic Community of West African States are located at
- Gaborone in Botswana
  - Lusaka in Zambia
  - Arusha in Tanzania
  - Abuja in Nigeria
34. The following are uses of a certain crop
- used for making perfumes and spices*
  - it is also used in the manufacture of cigarettes*
  - It is used as a raw materials in confectionery industries*
- The above crop is likely to be
- sugarcane
  - cocoa
  - pyrethrum
  - cloves
35. The Piggs peak forest in the northern part of Swaziland is owned by
- the national government of Swaziland
  - the forestry department of Swaziland
  - the Swazi plantations
  - the government and peak timbers
36. Which one of the following statement is true about purse seining as a method of fishing?
- It is used to catch fish that live near the surface of water
  - It catches fish by their gills
  - It is used to catch fish that live near the seabed
  - It uses baited hooks to attract fish
37. Which one of the following is the main tourist attraction at the BOMAS of Kenya in Nairobi city county?
- Varied wildlife
  - Beautiful sceneries
  - Cultural heritage
  - Pre- historical site
38. The main type of fish caught in major swamps of Africa is
- tilapia
  - black bass
  - mud fish
  - catfish
39. The Great North Road connects southern and northern parts of Africa. Which one of the following towns is **not** connected?
- Nairobi
  - Dodoma
  - Kampala
  - Addis Ababa
40. The following prominent leaders took part in the formation of the Organisation of African Unity (OAU) **except**
- Sieka Stevens
  - Haile Selassie
  - Kwame Nkrumah
  - Jomo Kenyatta
41. Which one of the following is a use of diatomite?
- Coating chains, pens and watches
  - Manufacture of papers and detergents
  - Manufacture of paints and fertilizers
  - Making motor vehicles radiators and cables

42. The main reason why the policy of Assimilation failed in Senegal was
- the French were harsh and brutal
  - the Senegalese were not ready to leave their culture
  - the French language was not easy
  - the Senegalese resisted the French rule
43. Which one of the following is **not** a symbol of national unity?
- The National flag
  - The presidency
  - The National Anthem
  - The Coat of Arms
44. Which one of the following is the main threat facing forestry in the Democratic Republic of Congo?
- Overexploitation
  - Destruction by wild animals
  - Prolonged drought
  - Human encroachment
45. Who among the following IEBC officials announces the election results in the constituency level?
- The chairman of IEBC
  - The presiding officer
  - The polling officer
  - The returning officer
46. The parliamentary debates and resolutions are recorded in a document known as
- Manifesto
  - Kenya gazette
  - Hanzard
  - Order paper
47. Which one of the following arms of the government controls the way the taxes are spent in Kenya?
- The executive
  - The judiciary
  - The treasury
  - The legislature
48. The simple tools made in the late stone age were collectively known as
- Songoan
  - Microliths
  - Oldwan
  - Auchelian
49. Which one of the following is an example of a service industry?
- Mobile phone repair
  - Soap making
  - Leather making
  - Textile industry
50. The main reason why population of Kenya is growing rapidly compared to the one in Germany is due to
- low birth rate
  - high standards of living
  - high birth rate
  - good medical services

*Use the map of Kenya below to answer questions 51- 54*



51. The language group that migrated into Kenya using route Q were mainly
- crop farmers
  - fishermen
  - traders
  - pastoralists

52. Which pair of products are exported by the country marked R?
- Minerals and sugarcane
  - Petroleum and charcoal
  - Bananas and coffee
  - Livestock and bananas
53. The relief feature marked P represents
- Awara plain
  - Lotikipi plain
  - Nariokome plain
  - Loita plain
54. Which one of the following is the main economic activity for the residents who live in the region marked xxx?
- Crop farming
  - Livestock keeping
  - Fishing
  - Trading
55. The Volta River scheme was established for the following reasons **except**
- to control the water of river Volta at Akosombo
  - to generate electricity for use in the smelting industries
  - to reduce the cost of generating electricity from oil
  - to encourage perennial irrigation for food production
56. The people of Mozambique used force to gain their independence mainly because
- they had home-made weapons
  - they got assistance from other countries
  - the portuguese were harsh and cruel
  - the portuguese were not willing to negotiate with them
57. The following are importances of taking part in election in Kenya. Which one is **not**?
- Citizens are in a position to elect credible and popular leaders
  - Through election, citizens remove corrupt and bad leaders
  - Through election citizens take part in the formation of the government
  - Through election rich and educated leaders are elected
58. Kenya became a republic through
- formation of a coalition government
  - formation of a central government
  - formation of a regional government
  - creation of the post of a prime minister
59. Martha and Monica had an argument over the ownership of a face mask. Nevile their close friend helped them to agree. Which one of the following ways did Nevile use to resolve the conflict?
- Litigation
  - Negotiation
  - Mediation
  - Arbitration
60. The main function of the Kenya prison department in Kenya is to
- punish the convicted criminals
  - reform the law breakers
  - jail the convicted criminals
  - imprison and discipline the law breakers



**SECTION II: RELIGIOUS EDUCATION**  
**PART I: CHRISTIAN RELIGIOUS EDUCATION**

61. The main lesson we learn from the actions of Adam and Eve in (Genesis 3) is that
- human beings were created to multiply
  - human beings should obey God's commands
  - work is blessed by God
  - human beings were created to care for God's creation
62. Which one of the following was **not** a promise given to Abraham by God?
- "All the people on the earth will be blessed through you"
  - "Your descendants will be as many as the stars in the sky"
  - "Your kingdom will last forever"
  - "I will bless those who bless you and curse those who curse you"
63. The sons of Jacob recognized their brother Joseph in Egypt when
- they found the missing cup in their sacks
  - he shared a meal with them
  - he told them who he was
  - the whole family went to live in Egypt
64. During the call of Moses in Midian, he finally accepted to go back to Egypt only after God
- gave him Aaron to speak on his behalf
  - gave him power to perform miracles
  - promised to be with him
  - gave him a strong army
65. Which was the main reason for the covenant between God and the Israelites on Mt. Sinai?
- They would never return to Egypt
  - They would inherit the promised land
  - They would not live in the desert for long
  - They were God's chosen people
66. The two sons of Samuel who were judges in Israel were
- Hophni and Phinehas
  - Mahlon and Chilion
  - Eliab and David
  - Joel and Abijah
67. Who among the kings of Israel was rejected by God because of disobedience and another king chosen while he was still on the throne? King
- David
  - Saul
  - Ahab
  - Jeroboam
68. The main lesson that Christians learn from the story of Gideon fighting the Midianites is that
- they should forgive their enemies
  - they should ask God for their needs
  - they should repent their sins
  - they should put their trust in God
69. Which one of the following was **not** an event during the reign of Joshua?
- He led the Israelites to cross river Jordan
  - He defeated the Israelites' enemies
  - He conquered the walls of Jericho
  - He led the Israelites to cross Red Sea
70. According to the prophesy of Isaiah read by Jesus in the Synagogue in Nazareth the Messiah was supposed to
- conquer the Romans
  - establish a wealth kingdom
  - set the captives free
  - unite the Jews
71. What message did John the baptist have for the soldiers who came to him to be baptised?
- Do not collect more than is legal
  - Whoever has two shirts must give one
  - Do not take money from anyone by force
  - Love the Lord with all your soul, body and mind
72. The parable of Jesus about the lost coin teaches Christians,
- to welcome new members to the church
  - to keep their money in safe places
  - to do honest businesses
  - to use their money to help the needy
73. When the Lord saw her His heart was filled with pity for her and he said, "don't cry" (Luke 7:13). Jesus said these words when He
- healed Mary Magdalene
  - raised the son of the widow of Nain
  - met the woman who committed adultery
  - was anointed at Bethany
74. The prodigal son went back to his father because
- he had suffered enough
  - his father was rich
  - he loved his father
  - he knew his father would receive him back
75. Some Jews were **not** happy when Jesus healed a paralysed man because
- He had forgiven him his sins
  - The man was a sinner
  - It was on a Sabbath day
  - The man was not a Jew

76. Which one of the following statements from the new testament is a beatitude?  
 A. Happy are those who are merciful to others  
 God will be merciful to them  
 B. Happy are those who believe without seeing me  
 C. How happy are you to believe God's message  
 D. The Lord is with you and has greatly blessed you
77. Which one of the following events did **not** take place during the last supper?  
 A. Jesus identified his betrayer  
 B. Jesus introduced a new commandment  
 C. Jesus calms the storm  
 D. Jesus and his disciples took wine
78. "Why do you look at the speck in your brothers eye and pay no attention to the log in your eye?" This teaches Christians  
 A. not to be quick to judge others  
 B. to use kind words when talking to others  
 C. to take care of their neighbours needs  
 D. never to talk about others
79. On the day of the Pentecost the crowd of people was surprised because  
 A. the disciples spoke in foreign language  
 B. Peter healed a lame beggar  
 C. the disciples were not able to speak  
 D. Stephen preached with a lot of knowledge
80. Who among the following was appointed as an apostle to the Gentiles?  
 A. Timothy  
 B. Paul  
 C. Peter  
 D. Philip
81. Both Christianity and traditional Africa society  
 A. worshipped the same God  
 B. prayed to their God  
 C. offered sacrifices  
 D. poured libations
82. Which one of the following does **not** explain why sexual immorality was rare in traditional African society?  
 A. Proper education on sex -related issues was given to youth  
 B. Girls and boys were not allowed to interact  
 C. Strong taboos governed boy-girl relationship  
 D. Heavy punishment was given to those who engaged in sexual immorality
83. Which one of the following is a common belief about God in traditional African religion and Christianity?  
 A. God lives in heaven  
 B. God send his messengers to people  
 C. God lives with ancestors  
 D. God is three in one
84. Three of the following activities were done by early Christians **except**  
 A. meeting everyday to pray  
 B. sharing their possessions  
 C. discussing on ways to avoid persecution  
 D. caring for the needy among them
85. Christians take care of the environment mainly because  
 A. it provides us with food  
 B. it makes our country beautiful  
 C. it is a tourist attraction  
 D. it is a gift from God
86. In traditional African societies, people showed that God is holy by  
 A. punishing wrong doers  
 B. singing songs of praise  
 C. worshipping him  
 D. obeying the religious leaders
87. A friend of yours hides a frog in the teacher's cupboard. The teacher discovered and decided to punish the whole class. As a Christian, what is the best thing to do?  
 A. Tell the teacher who did it  
 B. Keep quiet and let the teacher punish all  
 C. Tell your friend to run away  
 D. Ask your friend to confess and apologize
88. The main reason why we should **not** get drunk with alcohol is that it  
 A. affects our health  
 B. may affect our studies  
 C. is against God's command  
 D. leads to wastage of money
89. Mwangi arrives at school and finds that the other pupils are at assembly. What is the right cause of action for him to take?  
 A. Go for assembly and explain to the teacher why he was late  
 B. Go home and come to school early the following day  
 C. Hide until the assembly is over and then go to class  
 D. Go to class and wait for the other pupils
90. The virtue of self control is best shown by Christians when they  
 A. honour those in authority  
 B. obey rules of the society  
 C. tolerate those who mistreat them  
 D. care for the sick



## PART II

## ISLAMIC RELIGIOUS EDUCATION

61. From surah Masad we learn that we should refrain from
- Istighfar
  - shirk
  - pride
  - arrogance
62. Which of the following verses comes from surah Kaafirun?
- "And He sent against them birds in flocks."
  - "To you be your religion and to me my religion."
  - "Woe to every slanderer and backbiter."
  - "Therefore turn in prayer to your Lord and sacrifice."
63. The correct order of the rites of the dead is
- Swalat, Ghusul, Kafan, Dafan
  - Ghusul, Swalat, Kafan, Dafan
  - Kafan, Swalat, Ghusul, Dafan
  - Ghusul, Kafan, Swalat, Dafan
64. Farid, a standard eight pupil is being forced to use drugs by his friends. As a Muslim, what should he do?
- Refuse and change his company
  - Take it and then repent later
  - Report the friends to the government army
  - Accept to use but in a small amount
65. The specific areas where pilgrims make intention and then change into Ihram is called
- Arafat
  - Tukaf
  - Miiqat
  - Maabad
66. The journey of the prophet(SAW) from Makkah to Madinah was known as
- Hijra
  - Isra
  - Miiraj
  - Ghazwa
67. Which one of the following activities best shows how a Muslim should spend his leisure time?
- Playing video games
  - Visiting friends
  - Reading storybooks
  - Visiting the sick
68. Which one of the following angels is correctly matched with the duty that he performs?
- Israfil - removing souls
  - Izrail - guardian of paradise
  - Malik - guardian of hell fire
  - Mikail - blower of the trumpet
69. Charging of interest is prohibited in Islam because
- it discourages competition in business
  - it is a form of exploitation
  - it may cause death of innocent people
  - it is an old fashion thing
70. The prophet's uncle who died in the battle of Uhud is
- Abu-Lahab
  - Abu-Talib
  - Hamza
  - Umar
71. Which one of the following attributes of Allah(SWT) is correctly matched with its meaning?
- Al-Muswawir - the designer
  - Al-Fatah-the creator
  - Al-Wahhab - the opener
  - Al-Qatihar-all seeing
72. Which one of the following is the meaning of tawakkul?
- Praising Allah(SWT)
  - Belief in Allah(SWT)
  - Fear of Allah(SWT)
  - Reliance of Allah(SWT)
73. A sunnah act recommended to be done before Friday prayers is
- going to the mosque late
  - listening to Qaswida
  - eating dates
  - performing ghust
74. The main reason why circumcision is recommended in Islam is
- it makes one a strong and respected man
  - it is a way of showing obedience
  - it is a sunnah of the prophets
  - it encourages righteousness



75. Your deskmate is suffering from HIV/AIDS and misses school because other learners discriminate against him. As a Muslim you should
- advise him to transfer to another school
  - tell him to continue staying at home
  - tell your parents about it
  - encourage him and talk to the other learners to stop discriminating him
76. During the pledge of Aqaba, the prophet (SAW) met people from the tribes of
- Aus and Khazraj
  - Khazraj and Quraish
  - Aus and Thaqif
  - Khazraj and Thaqif
77. Which one of the following practices would best show that one cares for the environment?
- Bathing daily
  - Planting trees
  - Burning bushes
  - Sweeping houses
78. While emphasizing on the importance of unity, the prophet(SAW) compared Muslims to
- a mosque
  - a single building
  - a family
  - an elephant
79. Which one of the following is done to a new born baby immediately after birth?
- Circumcision
  - Naming
  - Adhan
  - Shaving
80. Who among the following is a recipient of zakah?
- Widows
  - Orphans
  - Disabled
  - Debtors
81. Which miracle among the following was performed by prophet Issa(AS)?
- Raising the dead
  - Making a bird from clay
  - Speaking the language of the animals
  - Splitting the Red Sea into two
82. When does the Ibaadah of Hajj begin?
- 1<sup>st</sup> Dhul-Hijja
  - 8<sup>th</sup> Dhul-Hijja
  - 10<sup>th</sup> Muharram
  - 30<sup>th</sup> Ramadhan
83. Nabii Musa's mother was inspired to
- sell her new born child
  - take the child to Firaun's palace
  - suckle the child
  - pray near river Nile
84. According to the treaty of Hudaibiyyan, the Muslims stay in Makkah was to last for
- ten days
  - three years
  - ten years
  - three days
85. Which one among the following is considered a mile stone in the history of Islam?
- Hijra
  - Birth of prophet Muhammad(SAW)
  - Isra and Miiraj
  - Death of Khadijah
86. The correct order of the Holy Books is
- Injiil, Zabur, Quran, Taurat
  - Taurat, Zabur, Injiil, Quran
  - Quran, Taurat, Zabur, Injiil
  - Injiil, Quran, Taurat, Zabur
87. Sharing of stationery in school or madrasa is encouraged because it is a form of
- Iman
  - zakah
  - sadaqa
  - exercise
88. The main reason why Allah(SWT) cursed Abu-Lahab is that he
- dispersed a crowd that came to listen to the prophet
  - refused to bow down for the prophet
  - disagreed with his parents openly
  - refused to accept Islam
89. The first thing that the Muhajirun did after arriving in Madina was to
- marry Aisha(RA)
  - unite the Ausar and the Muhajirun
  - fight the non-Muslims
  - force everyone to accept Islam
90. The sunnah way of announcing marriage as per the teachings of the prophet(SAW) is by
- playing music
  - sending cards
  - making calls
  - beating dhaa