

# KCPE NOVEMBER 2023 PREDICTION MASTER CYCLE 6 5160076

035713655



KENYA NATIONAL PREDICTION TESTS  
**KCPE**



516007

## SOCIAL STUDIES AND RELIGIOUS EDUCATION

Time: 2 hours 15 minutes

### INSTRUCTIONS TO CANDIDATES (Please read these instructions carefully)

1. You have been given this question booklet and a separate answer sheet. The question booklet contains 90 questions.
2. Do any necessary rough work in this booklet.
3. When you have chosen your answer, mark it on the **ANSWER SHEET**, not in this question booklet.

### HOW TO USE THE ANSWER SHEET

4. Use only an ordinary pencil.
5. Make sure that you have written on the answer sheet:

**YOUR INDEX NUMBER**

**YOUR NAME**

**NAME OF YOUR SCHOOL**

6. By drawing a **dark line** inside the correct numbered boxes mark your full Index Number (i.e. School Code Number and the three-figure Candidate's Number) in the grid near the top of the answer sheet.
7. Do not make any marks outside the boxes.
8. Keep the sheet as clean as possible and do not fold it.
9. For each of the questions 1-90 four answers are given. The answers are lettered A, B, C and D. In each case only **ONE** of the four answers is correct. Choose the correct answer.
10. On the answer sheet, show the correct answer by drawing a **dark line** inside the box in which the letter you have chosen is written.

### Example

#### In the Question Booklet:

44. The method used by the Portuguese to administer Mozambique was

- A. Assimilation
- B. Indirect rule
- C. Association policy
- D. Direct rule

The correct answer is "D".

#### On the answer sheet:

4. (A) (B) (C) (D) 14. (A) (B) (C) (D) 24. (A) (B) (C) (D) 34. (A) (B) (C) (D) 44. (A) (B) (C) (D)

In the set of boxes numbered 44, the box with the letter **D** printed in it is marked.

11. Your **dark line** **MUST** be within the box.
12. For each question **ONLY ONE** box is to be marked in each set of four boxes.



906506

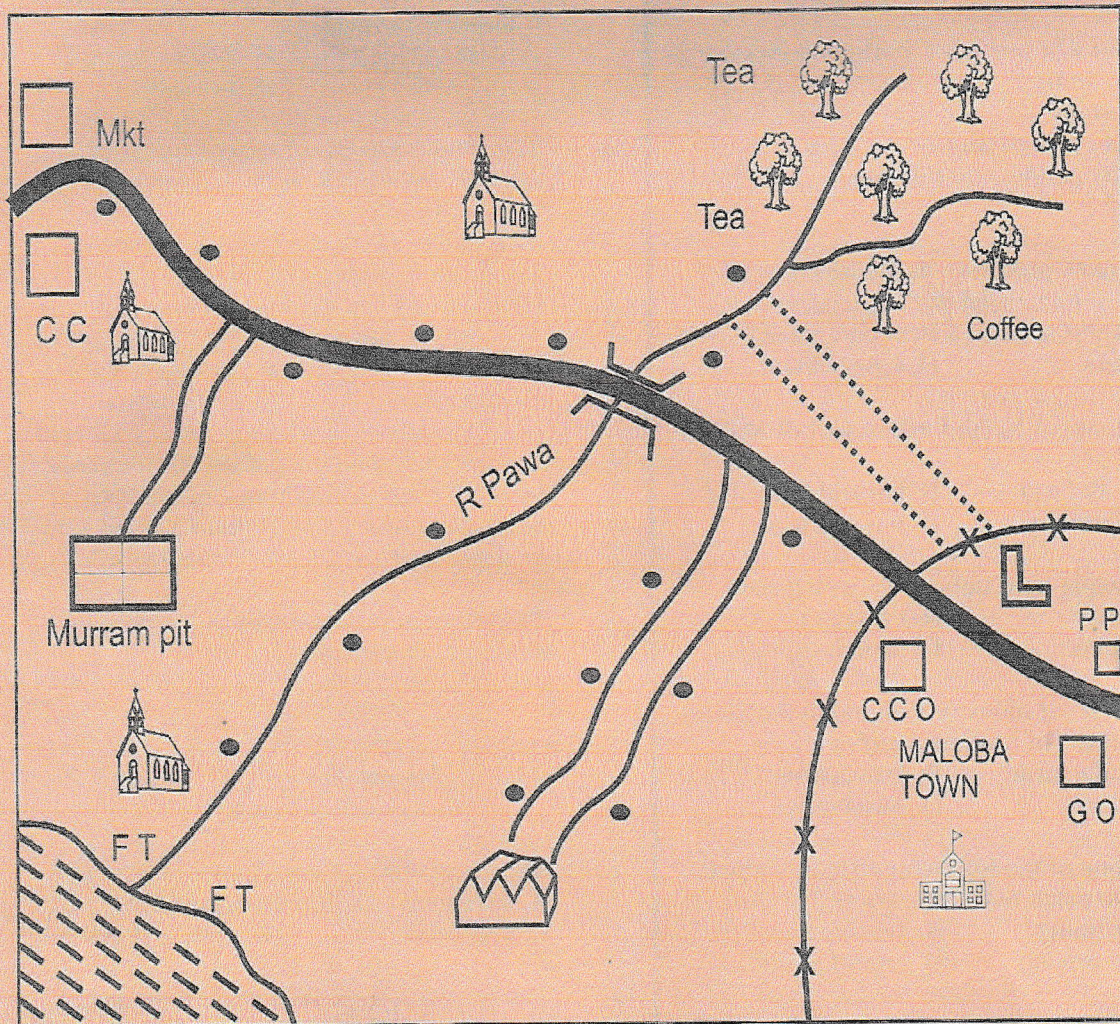
This question paper consists of 12 printed pages.

© Mtihani Bora




















# MALOBA AREA



SCALE: 0 1 2 3 4 5 6 7 8 9 10 KM

## KEY

- |   |                      |   |                                  |   |                 |
|---|----------------------|---|----------------------------------|---|-----------------|
|  | Tarmac road          |  | Forest                           |  | Church          |
|  | Murram road          |  | Fish factory                     |  | Mkt Market      |
|  | Mosque               |  | FT Fish trap                     |  | Water pipes     |
|  | GO Governor's office |  | Settlement                       |  | CC Chief's camp |
|  | PP Police post       |  | CCO County commissioner's office |  | School          |



1. River Pawa rises from;
 

A. North East	B. North West
C. South West	D. South East
2. What is the approximate length of the tarmac road found in Maloba area?
 

A. 18 km	B. 20 km
C. 10 km	D. 15 km
3. The chief administrator in Maloba area is LIKELY to be;
 

A. governor	B. county commissioner
C. deputy county commissioner	D. chief
4. The settlement pattern in Maloba area is MAINLY influenced by;
 

A. transport networks	B. economic activities
C. climate	D. types of soil
5. The climate of North Eastern part of Maloba area is;
 

A. cool and wet	B. hot and dry
C. cool and dry	D. hot and wet
6. Most people in Maloba town worship on;
 

A. Sunday	B. Friday
C. Saturday	D. Monday
7. Which type of industry is found to the South Western part of Maloba area?
 

A. Manufacturing	B. Processing
C. Service	D. Assembly
8. Which one of the following fishing methods is used to catch fish at the sea bed?
 

A. Long lining	B. Trawling
C. Purse seining	D. Use of basket
9. The basic unit of the society is the;
 

A. marriage	B. family
C. clan	D. age group
10. Which one of the following is NOT a social use of soil?
 

A. Decorating houses
B. Constructing houses
C. Burying the dead
D. Smearing on bodies during initiation
11. In Kenya, one may lose a civic seat if he/she
 

A. does not visit his/her ward
B. is jailed for five months
C. is elected leader of majority
D. is declared bankrupt by court of law
12. Who among the following school

administrators is in charge of school discipline?

- |                       |                   |
|-----------------------|-------------------|
| A. Headteacher        | B. School prefect |
| C. Deputy headteacher | D. Classteacher   |

13. In traditional African societies goods were transported using;
 

A. cars	B. trains
C. bicycles	D. animals

14. The statements below describe uses of a mineral mined in Kenya;

- i) To make sulphuric acid
- ii) To make toothpaste
- iii) To manufacture cement
- iv) To strengthen steel and aluminium

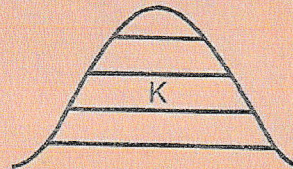
The mineral described above is;

- |           |              |
|-----------|--------------|
| A. gold   | B. diatomite |
| C. copper | D. flourspar |

15. The policy of administration that was used by the British in Northern Nigeria was;
 

A. association	B. indirect rule
C. direct rule	D. assimilation

16. The diagram below shows the vegetation zones on a mountain.



The vegetation zone marked K represents;

- |                |                       |
|----------------|-----------------------|
| A. savannah    | B. bamboo             |
| C. rain forest | D. heath and moorland |

17. The vegetation above is influenced by the;
 

A. types of soils	B. altitude
C. climate	D. topography

18. The country that borders Kenya to the North East is;

- |                |             |
|----------------|-------------|
| A. Somalia     | B. Ethiopia |
| C. South Sudan | D. Tanzania |

19. Lakes found in the Great Rift valley were formed as a result of;

- |                |                 |
|----------------|-----------------|
| A. downwarping | B. faulting     |
| C. glaciation  | D. depositional |

20. The MAIN problem facing wildlife in Kenya is;

- |               |                   |
|---------------|-------------------|
| A. insecurity | B. poaching       |
| C. poor roads | D. few game parks |

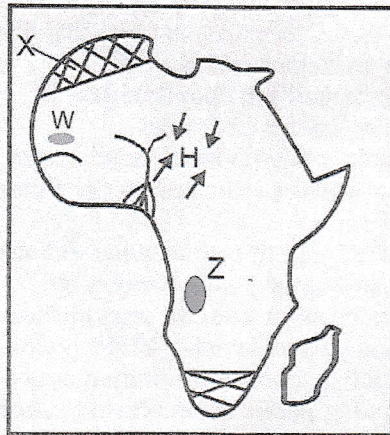


21. Which one of the following is a food processing industry?  
 A. Oil refining      B. Cotton processing  
 C. Pineapple canning      D. Tyre retreading
22. In which year did Tanganyika merge with Zanzibar to form the United Republic of Tanzania (URT)?  
 A. 1963      B. 1961  
 C. 1964      D. 1965
23. Which one of the following groups of people shows the River lake Nilotes of Sudan?  
 A. Bok, Suk, Sabaot  
 B. Acholi, Lango, Labwor  
 C. Jie, Karamajong, Iteso  
 D. Dinka, Shilluk, Anuak
24. Countries in North Africa experiences summer season during the months of;  
 A. June and August  
 B. December and February  
 C. September and November  
 D. March and May
25. Which one of the following is the ODD one out?  
 A. Chad      B. Elementaita  
 C. Kyoga      D. Victoria
26. Which of the following communities in West Africa belongs to Afro-Asiantic?  
 A. Ashanti      B. Wolof  
 C. Tuareg      D. Fulani
27. Which of the following cultural artefacts was used as a storage item?  
 A. Slings      B. Spears  
 C. Bows      D. Calabash
28. Which of the following lists below consist of block mountains?  
 A. Cape ranges, Drakensburg, Atlas  
 B. Usambara, Danakil Alps, Pare  
 C. Meru, Elgon, Kilimanjaro  
 D. Aberdare, Mau ranges, Menengai
29. The time in Kigali 24° E is 9.20 am what will be the time in Accra, Ghana?  
 A. 7.44 am      B. 10.56 am  
 C. 7.44 pm      D. 10.56 pm
30. The nomination of the twelve MPs in the National Assembly in Kenya was done by the;  
 A. speaker      B. president  
 C. political parties      D. IEBC
31. A person who loves his country is said to be;  
 A. loyal      B. faithful  
 C. responsible      D. patriotic
32. The statements below describe an early visitor to Eastern Africa. He;  
*i) arrived in the year 1846*  
*ii) helped in translating bible*  
*iii) he became blind*  
 The early visitor described above is;  
 A. Vasco da Gama      B. Ludwig Krapf  
 C. Johann Rebmann      D. David Livingstone
33. Three of the following are benefits of tourism in Kenya. Which one is NOT?  
 A. Creation of job opportunities  
 B. Earns foreign exchange  
 C. Promote international relationship  
 D. Bad western influence on our culture
34. The BEST way of curbing drugs and substance abuse among the youths today is by;  
 A. passing strict rules on drug traffickers  
 B. employing more anti-narcotic police officers  
 C. establish more rehabilitation centres  
 D. creating public awareness on dangers of drugs
35. Among the following officers in Nyamwezi chiefdom, who was the council of elders?  
 A. Wanyamphala      B. Ntemi  
 C. Ruga ruga      D. Kabaka
36. The following are conditions favouring the growth of a certain crop in Africa;  
*i) Grows within the tropics*  
*ii) Harvested during bud stage*  
*iii) Mainly used to spice food*  
*iv) Requires high humidity throughout*  
 The crop described above is;  
 A. cocoa      B. coffee  
 C. pyrethrum      D. cloves
37. The capital city of Chad is at;  
 A. N'Djamena      B. Gaborone  
 C. Tripoli      D. Lome
38. Who among the following early men discovered fire?  
 A. Homo erectus      B. Homo habilis  
 C. Zinjathropus      D. Homo sapiens
39. Among the following early visitors to Eastern Africa, who is the ODD one out?  
 A. Carl Peters  
 B. William Mackinon  
 C. Seyyid Said  
 D. Dr David Livingstone



40. Which of the following religious marriages allows polygamous?  
 A. Traditional B. Customary  
 C. Islamic D. Civil
41. Which arm of the government approves national budget?  
 A. Executive B. Cabinet  
 C. Parliament D. Judiciary

Use the map of Africa to answer questions 42 - 45



42. The winds marked H are known as;  
 A. North East monsoon  
 B. Harmattan  
 C. South West monsoon winds  
 D. Westerlies
43. The plateau marked Z is known as;  
 A. Andarawa B. Bie  
 C. Fouta Djallon D. Jos
44. Which was the MAIN reason that led to decline of the kingdom marked W?  
 A. Soldiers lacked food  
 B. Succession disputes  
 C. Attack by the strict muslims from North  
 D. Decline in long distance trade
45. Which of the following statements is NOT TRUE about the vegetation region marked X?  
 A. Trees have broad evergreen leaves  
 B. Trees are cone shaped  
 C. It is also known maquis  
 D. Trees have thick barks
46. Who among the following advises the government on legal matters?  
 A. Chief justice B. Cabinet secretaries  
 C. Attorney General D. Deputy president
47. The MOST commonly used means of transport in Eastern Africa is;  
 A. air B. water  
 C. railway D. road
48. Three of the following are pre-historical sites in Uganda. Which one is NOT?  
 A. Ntusi B. Mahosi  
 C. Dire Dawa D. Ishango
49. The Tropic of Capricorn passes through all the following countries EXCEPT;  
 A. Namibia B. Madagascar  
 C. Swaziland D. Mozambique
50. Cases involving militants is heard and determined by the;  
 A. Supreme court  
 B. Kadhi's court  
 C. Chief magistrate court  
 D. Martial court
51. Three of the following are relief features EXCEPT;  
 A. swamp B. plateau  
 C. plains D. valley
52. The colour of the national flag that symbolises blood shed during struggle for independence is;  
 A. red B. green  
 C. white D. black
53. Omollo, a trader in Kondele wants to communicate to her son in Meru. Which one of the following is the MOST effective means of communication for him to use?  
 A. Radio B. Newspaper  
 C. Television D. Mobile phone
54. The following are people arrested during the state of emergency in 1952 by Sir Evelyn Barring. Who was NOT?  
 A. Kung'u Karumba B. Jomo Kenyatta  
 C. Oginga Odinga D. Paul Ngei
55. Which of the following was NOT a way of interaction during the pre-colonial period?  
 A. Intermarriage B. Raids  
 C. Trade D. Media
56. Which one of the following is the MAIN fresh water fish in Kenya?  
 A. Nile perch B. Trout  
 C. Tilapia D. Mud fish
57. During the German colonial rule in Tanganyika the title of African headmen was;  
 A. governor B. Liwali  
 C. Jembes D. Akidas



58. Which one of the following countries is NOT a member of IGAD?

- A. Sudan  
B. Eritrea  
C. Tanzania  
D. South Sudan

59. Which one of the following is an economic right? Right to;

- A. life  
B. education  
C. work  
D. privacy

60. Three of the following are factors that promote peace in a society EXCEPT;

- A. nepotism  
B. transparency  
C. obeying the law  
D. respect of one another

### CHRISTIAN RELIGIOUS EDUCATION

61. According to Genesis story of creation, what did God create on the second day?

- A. Sky  
B. Animals  
C. Heavenly bodies  
D. Vegetation

62. During the time of Noah, how many people survived the floods?

- A. 120  
B. 3  
C. 4  
D. 8

63. Which one of the following is not a promise given to Abraham by God?

- A. Land  
B. Many descendants  
C. Curses  
D. Blessings

64. The following conditions were to be met by the Israelites during the passover. Which one was not a requirement?

- A. Eat bread without yeast  
B. Eat bitter herbs  
C. Eat roasted bread  
D. Keep some meat for the next day

65. Which of the following was a problem faced by the Israelites in the wilderness? Lack of;

- A. leaders  
B. weapons  
C. shelter  
D. water

66. The sign of the covenant between God and Israelites at Mt Sinai was;

- A. fire  
B. The ten commandments  
C. the blood from animals  
D. the smoking fire pot

67. Which one of the following statements is not true about the judges in Israel?

- A. Samuel was the last judge  
B. Judges were appointed by kings

C. Othniel was the first judge

D. Deborah was the only female judge

68. Who among the following kings of Israel brought the covenant box to Jerusalem?

- A. David  
B. Solomon  
C. Saul  
D. Jeroboam

69. Prophet Isaiah foretold that the Messiah would be called;

- A. the son of the most high  
B. the giver of life  
C. a wonderful counsellor  
D. the king of kings

70. When the wisemen visited baby Jesus they worshipped him by presenting to him;

- A. ornaments  
B. silver  
C. clothes  
D. gold

71. Who among the following people was in the temple when Jesus was being dedicated?

- A. Elizabeth  
B. Simeon  
C. Zechariah  
D. Peter

72. "Man cannot live on bread alone." (Luke 4:4). A lesson Christians learn from this response given by Jesus during his temptation is that they should;

- A. not put God to test  
B. not desire earthly riches  
C. work for their needs  
D. use the word of God in their daily lives

73. Jesus helped the disciples to have a great catch of fish to show that he had power;

- A. over the weather  
B. to forgive sins  
C. to give life  
D. to change any situation

74. During the baptism of Jesus, the following events took place. Arrange them in the right order in which they happened;

i) The spirit of God came down like a dove and alighted on him.

ii) The heaven opened

iii) A voice came down from heaven.

- A. iii, ii, i  
B. i, ii, iii  
C. ii, i, iii  
D. iii, i, ii

75. Which one of the following parables of Jesus shows that prayers should be said in humility?

- A. The persistent widow and the judge  
B. The Pharisee and the tax collector  
C. A friend at midnight  
D. The rich man and Lazarus



