

KCPE NOVEMBER 2023 PREDICTION MASTER CYCLE 9 5160079

035713655



KENYA NATIONAL PREDICTION TESTS

KCPE



516007

SOCIAL STUDIES AND RELIGIOUS EDUCATION

Time: 2 hours 15 minutes

INSTRUCTIONS TO CANDIDATES (Please read these instructions carefully)

1. You have been given this question booklet and a separate answer sheet. The question booklet contains 90 questions.
2. Do any necessary rough work in this booklet.
3. When you have chosen your answer, mark it on the **ANSWER SHEET**, not in this question booklet.

HOW TO USE THE ANSWER SHEET

4. Use only an ordinary pencil.
5. Make sure that you have written on the answer sheet:

YOUR INDEX NUMBER

YOUR NAME

NAME OF YOUR SCHOOL

6. By drawing a **dark line** inside the correct numbered boxes mark your full Index Number (i.e. School Code Number and the three-figure Candidate's Number) in the grid near the top of the answer sheet.
7. Do not make any marks outside the boxes.
8. Keep the sheet as clean as possible and do not fold it.
9. For each of the questions 1-90 four answers are given. The answers are lettered A, B, C and D. In each case only **ONE** of the four answers is correct. Choose the correct answer.
10. On the answer sheet, show the correct answer by drawing a **dark line** inside the box in which the letter you have chosen is written.

Example

In the Question Booklet:

44. The method used by the Portuguese to administer Mozambique was

- A. Assimilation
- B. Indirect rule
- C. Association policy
- D. Direct rule

The correct answer is "D".

On the answer sheet:

4. (A) (B) (C) (D) 14. (A) (B) (C) (D) 24. (A) (B) (C) (D) 34. (A) (B) (C) (D) 44. (A) (B) (C) (D)

In the set of boxes numbered 44, the box with the letter **D** printed in it is marked.

11. Your **dark line** **MUST** be within the box.
12. For each question **ONLY ONE** box is to be marked in each set of four boxes.



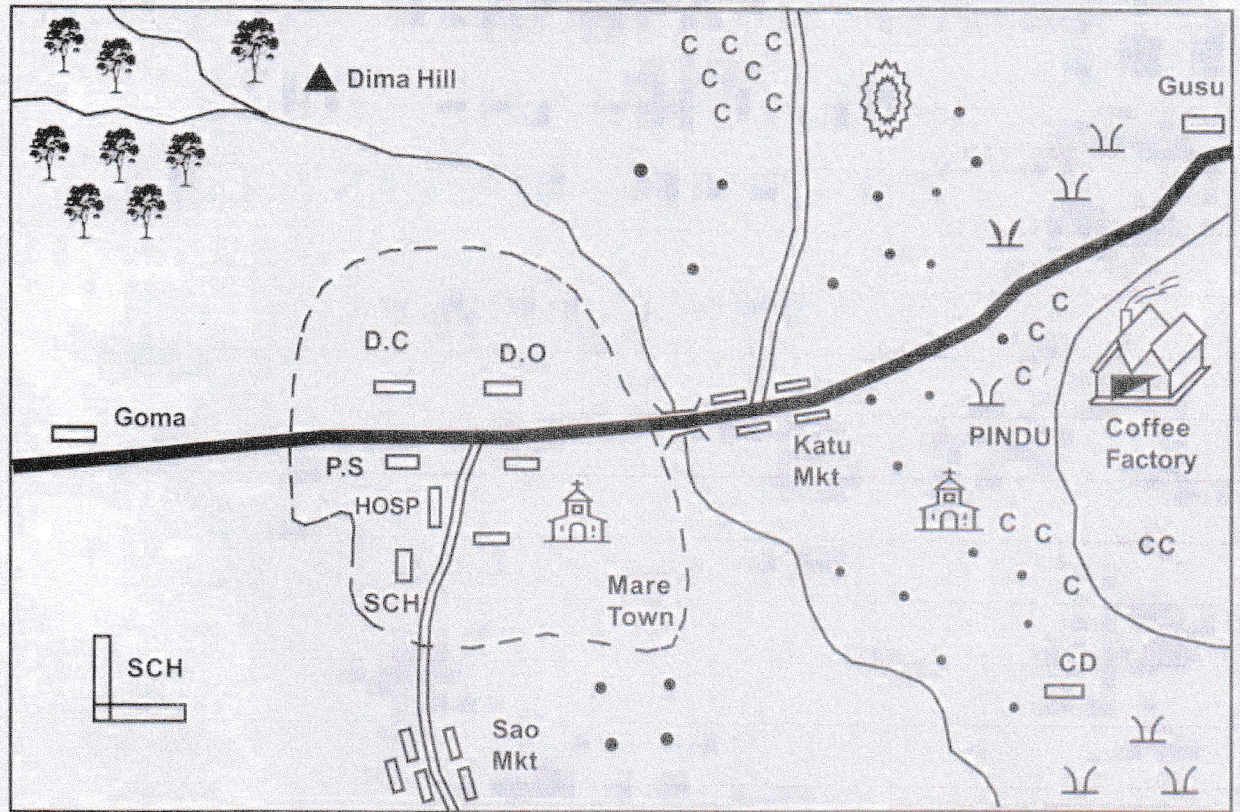
906506

This question paper consists of 12 printed pages.

© Mtihani Bora



MARE AREA



Scale: 0 1 2 3 4 5 6 7 8 9 10 11 12 Km

KEY

	Forest		School	D.C	District Commissioner
	Quarry		Hill	D.O	District Officer
	Coffee		Church		Tarmac Road
	Permanent Building		Cattle Dip		Murram Road
	Houses		Coffee Factory	P.S	Police Station

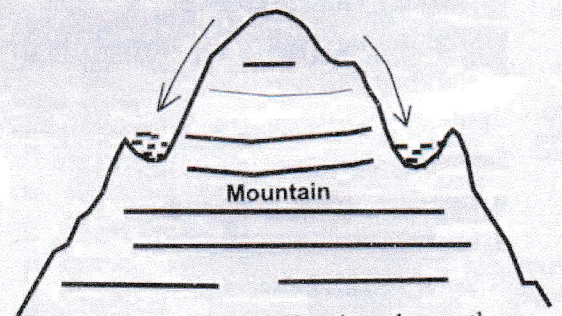
Study the map of Mare area and answer questions 1 – 7

- What is the direction of the church from the quarry?
 - North
 - South
 - West
 - East
- The approximate length of tarmac road from Gusu to Mare town is
 - 15 kilometres
 - 8 kilometres
 - 10 kilometres
 - 17 kilometres
- The highest point in Mare is LIKELY to be around
 - Sao Market
 - Goma
 - Katu Market
 - Dima
- The climate of Pindus area is
 - cool and wet
 - cool and dry
 - hot and wet
 - hot and dry
- The people of Mare area are LIKELY to be
 - Muslims
 - Christians
 - Pagans
 - Hindus
- Which one of the following is NOT an economic activity carried in Mare area?
 - Farming
 - Trading
 - Fishing
 - Mining
- Which service is NOT offered in Mare area?
 - Health
 - Education
 - Security
 - Administration
- Nabongo was a king of the Abawanga whose position was
 - elective
 - imposed

- C. hereditary D. selected
9. The following is a description of a certain leader:
- i) *He was a prophet*
ii) *He prophesied the construction of the Kenya Uganda railway*
iii) *He treated the sick using herbal medicine*
- The leader described above was
- A. Koitalel Arap Samoei
B. Masaku
C. Mekatilili wa Menza
D. Waiyaki wa Hinga
10. One of the following is NOT true about Kenyan citizenship. Which one?
- A. One can become a citizen by registration
B. One can become a citizen by birth
C. One can become a citizen by declaration
D. A citizen by birth cannot lose citizenship
11. A parent found a pupil who had been raped. What was he supposed to do first?
- A. Inform the police
B. Report to the headteacher
C. Take the child to hospital
D. Tell the pupil not to tell anybody to cover the shameful act
12. Three of the following are characteristics of the savannah climate in Kenya EXCEPT
- A. trees are umbrella shaped
B. short scattered bushes
C. thick evergreen forests
D. scattered trees and grass
13. Which one of the following is a drainage feature?
- A. Valleys B. Lakes
C. Plains D. Hills
14. The meaning of a clan is group of people
- A. related through marriage
B. born at the same time
C. related by blood
D. sharing a common ancestor
15. Which one of the following is the responsibility of children in the family?
- A. Establishing home for the family
B. Taking care of the family property
C. Looking for food for the family
D. Earning a living
16. Which one of the following is NOT a factor leading to rapid population growth?
- A. Favourable climate
B. Urbanisation
C. High mortality rate
D. Early marriages
17. Among the four benefit of tourism to our country, which one is the MOST important?
- A. Improving transport
B. Earn foreign exchange
C. Creation of jobs
D. Promotion of good relations
18. Which one of the following is the quickest method of sending a verbal message over a long distance?
- A. Email B. Internet
C. Messenger D. Telephone
19. The following are problems facing trade within the East African community members. Which is the major one?
- A. Inadequate goods
B. Production of similar goods
C. Poor transport
D. Insecurity
20. The town in South Africa which is associated with gold mining is
- A. Johannesburg
B. Durban
C. Pretoria
D. Cape town
21. (COMESA) has its headquarters based in
- A. Lagos – Nigeria
B. Gaborone – Botswana
C. Lusaka – Zambia
D. Arusha – Tanzania
22. The Nandi opposed the colonial rule led by
- A. Mukite wa Nameme
B. Waiyaki wa Hinga
C. Mekatilili wa Menza
D. Koitalel Arap Samoei
23. The reason for the coming of the explorers to Eastern Africa was to
- A. find the source of River Nile

- B. settle in Eastern Africa
C. find new market for their manufactured goods
D. spread Christianity
24. In which stage of evolution was fire invented?
A. Homo habilis
B. Homo erectus
C. Homo sapiens
D. Ramapithecus
25. The following crops were grown in traditional agriculture EXCEPT
A. tea
B. yams
C. cassava
D. millet
26. One of the following is NOT a problem facing poultry keeping. Which one is it?
A. Costly chicken feeds
B. Unstable market prices
C. Numerous chicken diseases
D. Inadequate processing facilities
27. The community which was displaced from Shungwaya by the Galla community is
A. Njemps
B. Nandi
C. Pokot
D. Pokomo
28. Among the following four uses of mineral, which one is for flourspar?
A. Making tooth pastes
B. Making glass
C. Making water filter
D. Making food flavour
29. Which of the following is the **correct** order in the process of soda ash?
A. Pumping → Drying → Heating
B. Dredging → Heating → Washing
C. Dredging → Washing → Grinding
D. Washing → Drying → Dredging
30. East African export MAINLY deals with
A. agricultural export
B. petroleum
C. wildlife
D. minerals
31. Which one of the following industries would paper industry be placed?
A. A service
B. An assembly
C. Processing
D. Manufacutring
32. The council of elder which assisted the Nyamwezi chief to perform religious duties was known as
A. Kabaka
B. Lukiko
C. Wanyamphala
D. Nabongo
33. The leader who worked with the colonizers is
A. Laibon Lenana
B. Mukite wa Nameme
C. Kabaka Mwanga
D. Chief Mkwawa

Study the diagram below and answer questions 34 and 35



34. Which one of the following shows the process taking place above?
A. Faulting
B. Folding
C. Glaciation
D. Volcanicity
35. The lake which formed through the above process is
A. Lake Malawi
B. Lake Teleki
C. Lake Shava
D. Lake Kivu
36. Three of the following factors influence


- population distribution. Which one does NOT?
- Ocean current
 - Vegetation
 - Drainage
 - Climate
- Which one of the following is NOT a language group in South Africa?
 - Khoisan
 - Afro-Asiatic
 - Bantu
 - Europeans
 - The following were methods used in the traditional education EXCEPT
 - story telling
 - reading
 - participation
 - observation
 - Peter lives with his father and sisters. This family is known as
 - nuclear family
 - extended family
 - monogamous family
 - big family
 - The town which started as a result of industrial development is
 - Kisumu
 - Mombasa
 - Thika
 - Nairobi
 - The Uganda chief food is
 - beans
 - bananas
 - rice
 - maize
 - Which one of the following is NOT a conservation measure?
 - De-forestation
 - Gazetting natural forests
 - Re-afforestation
 - Afforestation
 - Which one of the following towns in Eastern Africa is an inland port?
 - Kisumu
 - Kismayu

- Arusha
 - Mombasa
- The statement which is TRUE about the Tswana and the Fulani is
 - they migrated from a common origin
 - they are Bantu speakers
 - they are found in Southern Africa
 - they keep large herds of animals
 - The dam which is CORRECTLY matched with the river on which it is located is

A. Kariba	–	River Tana
B. Akosombo	–	River Volta
C. Masinga	–	River Nile
D. Aswan	–	River Zambezi
 - Nigeria's MAIN export mineral is

A. diamond	B. gold
C. petroleum	D. copper

Study the diagram below and use to to answer question 47



- The modern method of fishing shown in the diagram above is
 - trawling
 - purse seining
 - long lining
 - net drifting
- One of the following is NOT true about political changes that took place in Kenya in 1906. Which one is it?
 - The title of commissioner changed to that of a governor
 - Kenya was declared a colony
 - Colonel Sir Janes Hayes Sadders became the governor
 - Legco was established
- The following countries are members of IGAD EXCEPT
 - Arusha
 - Mombasa

- A. Djibouti
B. Kenya
C. Tanzania
D. Uganda
50. Which one of the following is NOT a way of demonstrating patriotism?
A. Paying taxes
B. Breaking peace
C. Voting in the general election
D. Being a person of integrity
51. Which one of the following factors does NOT promote peace?
A. Ensuring fair distribution of resources
B. Stealing other people's items
C. Respecting other people's rights
D. Obeying the law of the land
52. The MAIN reason for the construction of the dam along River Zambezi was to
A. produce hydroelectric power
B. control floods
C. store water for irrigation
D. improve tourism
53. The following are Mande speakers EXCEPT
A. Susu
B. Sonike
C. Yoruba
D. Mande
54. Which one of the following groups does NOT have its origin in the horn of Africa?
A. Somali, Borana, Rendile
B. Burji, Gabbra, Rendile
C. Gabbra, Somali, Oromo
D. Samburu, Rendile, Borana
55. In which of the following ways does the President exercise the prerogative of mercy?
A. Appointing Ministers
B. Helping the needy in society
C. Releasing convicted criminals
D. Visiting people in the country
56. Which one of the following is a form of lawlessness in the society?
A. Respecting other people's property
B. Beating up a suspected criminal
C. Settling disputes in a court of law
D. Taking a suspect to the police
57. Who chairs debates in the National Assembly?
A. Speaker
B. President
C. Attorney General
D. Woman Representative
58. The group which CORRECTLY shows members of the Senate is
A. President, Deputy President, Attorney General
B. 47 Senators, 16 nominated Women Representatives, Speaker
C. Speaker, Members of Parliament, Women Representatives
D. Women Representatives, Members of Parliament
59. The list below are functions of the electoral body in Kenya:
i) *Announcing elections results*
ii) *Registering voters*
iii) *Clearing candidates by the electoral body*
iv) *Identifying polling stations*
Arrange the events in order in which they take place
A. (ii), (iv), (iii), (i)
B. (iii), (ii), (iv), (i)
C. (i), (iv), (iii), (ii)
D. (ii), (iv), (iii), (ii)
60. Which body organises and supervise elections in Kenya?
A. Various Ministers
B. Registered voters
C. The Police
D. I.E.B.C

C.R.E

61. Which one of the following was the reason for God to put man in the garden of Eden?
A. He had made him in His image
B. He wanted him to be incharge
C. He wanted man to cultivate and guard it
D. He wanted to punish man

62. The BEST way through which Abraham showed his faith was by
- chasing Hagar away
 - accepting to sacrifice his son Isaac
 - inviting Lot to his home
 - accepting Ismael as his son
63. Who were the first Christian missionaries to come to Kenya in the mid 18th century?
- Dr. Krapf and Rebman
 - Dr. Krapf and Livingstone
 - Rebman and Livingstone
 - Rebman and John Hagee
64. Which one of the following is NOT a cause of child labour?
- Death of parents
 - Broken family
 - Passing exams
 - Irresponsible parenthood
65. "Whoever refuses to work, should not eat." Who said these words?
- John
 - David
 - Paul
 - James
66. How old was Noah when the floods came?
- 120 years
 - 75 years
 - 600 years
 - 835 years
67. To whom did God say, "I am whom I am." (Exodus 3:14)?
- Abraham
 - Moses
 - Isaac
 - Joshua
68. The Apostles' Creed contains Christian beliefs about all the following EXCEPT
- God
 - Jesus Christ
 - The Bible
 - Eternal life
69. Who among the following people tried Jesus and sentenced Him to be crucified?
- Herod
 - Caiaphas
 - Pilate
 - Judas
70. Life starts as a _____ in the mother's womb
- foetus
 - tiny cell
 - zygote
 - baby
71. The special meal Jesus shared with his disciples is called
- Holy Supper
 - Holy Communion
 - Holy Life
 - Last Supper
72. Which one of the following is the BEST way to use your talents?
- Improve your education
 - Earn a good salary
 - Helping those in need
 - Helping your family only
73. Two of the following people were given the abilities by God to work on silver and gold. Who are they?
- Moses and Araon
 - Bezalel and Ahab
 - Ohaliab and Asa
 - Bezalel and Ohaliab
74. Three of the following are abilities EXCEPT
- singing in the choir
 - performing well in Mathematics
 - making a public speech
 - listening to music
75. Lake Tiberias is also called lake
- Jericho
 - Moab
 - Galilee
 - Samaria
76. The first 4 disciples of Jesus worked as
- tax collectors
 - carpenters
 - fishermen
 - priests
77. Who among the following was MOSTLY loved by Jesus?

- A. Peter
B. Andrew
C. John
D. Mathias
78. For people to be healed by Jesus, they were required to have
A. peace
B. love
C. faith
D. strength
79. Which one of the following is NOT an S.T.I?
A. T.B
B. Syphilis
C. HIV/AIDS
D. Gonorrhoea
80. Three of the following were deacons. Who was NOT?
A. Philip
B. Procorus
C. Nicanor
D. Gamaliel
81. Before Matthew changed his name, he was initially called
A. Mark
B. Simon
C. Levi
D. Andrew
82. Three of the following are ways to improve your abilities EXCEPT
A. telling your friend about your abilities
B. constantly using your abilities
C. reading books about others who have used their abilities well
D. watching videos about people using their abilities constructively
83. During the ascension of Jesus, the disciples were told to wait for the coming of the Holy Spirit in
A. Bethany
B. Corinth
C. Jerusalem
D. Egypt
84. The fourth commandment says that we should
A. observe the sabbath and keep it holy
B. worship no other God
C. not covet other people's property
D. not steal
85. Who among the following people is NOT properly matched to his brother?
A. David – Eliab
B. Jacob – Isaac
C. Moses – Aaron
D. Abel – Seth
86. Which one of the following is CORRECT about Christian values?
A. They are ways of conduct that the world considers right
B. We are born with these values
C. They are forms of conduct Christians consider right
D. They do not help us to immitate Christ
87. Blessed are the PURE in heart for they shall
A. see God
B. recieve mercy
C. receive God's Kingdom
D. be merciful to them
88. Which one of the following is NOT a reason why Christians pray and fast?
A. To ask God for forgiveness
B. To condemn their enemies
C. To ask God for protection
D. To praise and thank God
89. When Kithi was going home, he saw two boys fighting. What was the BEST thing for him to do as a Christian?
A. Cheer them up
B. Join the fight
C. Tell them to stop fighting
D. Report the matter to the class teacher
90. Pendo's husband was detained only two months after their wedding. What is the BEST thing for her to do?
A. Marry another man immediately
B. Pray and wait for her husband
C. Divorce her husband since he is sinful
D. Forget about her husband and move on with her life