

KCPE PREDICTION SET **KCPE TRIAL ONE-21**

CLASS OF KCPE NOVEMBER 2023

FOR MARKING SCHEMES:

ORDER ONLINE AT:

www.kenyaeducators.co.ke

OR

CONTACT:

Mr Machuki – 0724333200

KENYA EDUCATORS CONSULTANCY

KCPE PREDICTION 001

ENGLISH

TERM 1-Aug/Sept-2021- Time: 1hr 40 mins

Read the passage below. It contains blank spaces numbered 1 to 15. For each blank space, select the best alternative from the choices given at the end of the passage.

Child labour is one of the most serious violation of __1__ rights in the world. These rights are clearly __2__ in international organisations. Children as young as five years old are working __3__ time and are involved in work that is dangerous and __4__ .
 __5__ most economically active children are in the 10-14 age __6__, the proportion under ten is quite large. __7__ they are physically immature, children are more __8__ to the effect of hard labour, exposure to dangerous chemicals __9__ in plantations or factories and accidents in kitchens of people's homes __10__ they are cheaply hired as house helps. Children are not __11__ physically __12__ long hours of strenuous work and suffer the __13__ of fatigue more than adults. Labour has an effect on their physical and intellectual __14__ . And __15__ many working children combine work and schools, most do not get educational opportunities later in life.

- | | | | |
|----------------|------------|--------------|---------------|
| A. | B. | C. | D. |
| 1 children's | childrens' | Children | child's |
| 2 set in | set to | set out | set about |
| 3 half | full | About | no |
| 4 creative | boring | Entertaining | exploitative |
| 5 While | As | But | Because |
| 6 gap | class | Set | bracket |
| 7 although | moreover | Because | however |
| 8 strong | firm | Vulnerable | strong-willed |
| 9 both | either | Neither | nor |
| 10 which | where | What | when |
| 11 caused | created | Made | prepared |
| 12 by | with | In | for |
| 13 infectious | affection | Advantages | effects |
| 14 development | ability | Capability | maturity |
| 15 but | although | However | so |

For question 16 and 18, choose the correct question tag.

16. She seldom misses classes, _____
 A. isn't it? B. doesn't she?
 C. is it? D. does she?
17. Please, give me a glass of fresh orange juice, _____
 A. shall you? B. will you?
 C. won't you D. shouldn't you
18. I am doing the work you gave me, _____
 A. Ain't I? B. Aren't I?
 C. is it? D. isn't it?
19. **For question 19, choose the odd one out.**

A. Crawl B. walk C. run D. jog

For question 20-21 replace the underlined word with a suitable phrasal verb

20. This windscreen **broke into pieces** last week.
 A. Came up B. came apart
 C. came across D. came back
21. Onyango **removed** his jacket since it was getting hot.
 A. Took over B. took to
 C. took up D. took off
22. For question 22, choose the correctly punctuated sentence

- A. 'Go home now," the teacher said.
"And bring your parent".
- B. "go home now," the teacher said, " and
bring parent"
- C. "Go home now," the teacher said, "and
bring your parent."
- D. "Go home now, the teacher said, and
bring your parent."

- 23. Do you prefer mango juice ____ pineapple
juice?
A. To B. than C. or D. from
- 24. Last week father ____ in bed because he
was sick.
A. Lied B. lay
C. lain D. laid
- 25. The accused was charged ____ murder
A. By B. for C. of D. with

**For question 23-25 choose the best
alternative to complete the sentences.**

Read the following passage and then use it to answer questions 26-38

The United Nations (U.N) officially came into existence on 24.10.1945. The purpose of the United Nations is to bring all nations of the world together to work for peace and development, based on the principles of justice, human dignity and the well being of all people.

The united Nations sprang from the need to have a post war organization to ensure world peace. Hence, intense pressure was mounted on Britain, China the U.S.A and the USSR to consider initiating a world organization as Second World War raged. Consequently a meeting was convened in Washington D.C in 1944, comprising representatives from the four nations. Towards the end of war, representatives from fifty countries met in San Francisco and hammered out a final text that would lay down foundations for international cooperation . The main goal of the new world organization was to maintain peace and promote social and economic progress.

In its role to prevent war and resolve conflicts peacefully, the UN formed a security council consisting of the five victors of war as the permanent members and representative of ten other countries serving two -year terms. The five countries – China, USSR, the United Kingdom, France and the USA were given veto power. The means that decision made by the U.N can be blocked by any of the principal UN organ for ensuring peace and secondly, because it is the only U.N body whose decision are binding to all member states.

The primary responsibility of the security council is to maintain international peace and security; and in so doing act on behalf of all the member states. In discharging its duties, the security council works in accordance with the purposes and principles of the UN as stipulated in the charter. It submits annual, and if need be special reports to the General Assembly for its considerations.

The UN embarks on conflict prevention and resolution through preventive diplomacy, peace -making, peace- keeping and peace -building. In recent years, however, peace keeping has gained more importance in situations where preventive diplomacy and peace making have failed.

Although critics might say that the UN has not achieved all its objectives, the organization has made the world a safe and better place.

- 26. Which one of the following is among the reasons behind the formation of the UN?
A. To prevent war and resolve conflict forcefully.
- B. Promotion of peace and development globally.
- C. Threatening justice and human dignity.

- D. Putting intense pressure on Britain, China, USSR, and the US after world war II
- 27. Which one of these countries is not among the pioneer of the United Nations
A. Britain B. U.S.A
C. Germany D. China

28. Why is the UN referred to as a “post war organization”? It was
- established to end war
 - formed by warring countries
 - started during World war II.
 - established after a global war
29. According to the passage, it is true to say that
- The security council is the principal UN body for ensuring that there is no conflict.
 - The UN permanent member have no right to cancel UN decisions
 - To security council works in accordance with the principle of individual countries
 - The UN hardly attempts to ensure peace and economic progress.
30. Which one of the following statements is **not true**?
- The UN aims at resolving conflicts peacefully
 - The security council decisions are binding to all UN member countries
 - The UN formally came into being in 1945
 - The UN officially came into existence in 1944
31. How many members state made up the security council when the UN was formed?
- Ten
 - fifteen
 - Five
 - All the nations
32. According to the passage, “veto power” are
- The primary responsibility of the security council to prevent war.
 - The military strength of the UN
 - The authority of certain UN members to block UN decisions
 - The ability of the UN security council to promote peace and development
33. Which one of the following is not among the principles upon which the UN was established?
- Human dignity
 - Inequality
 - Mankind’s welfare
 - Justice
34. The security council was formed in order to
- Bring war to an end and solve conflicts peacefully
 - Disciple errant members of the UN
 - Give the war victors veto power
 - Establish the truth behind the cause of the second world war
35. The guiding rules of the UN security council are spelt out in
- The UN headquarters
 - The UN charter
 - The permanent representative of the UN
 - The constitution of member state
36. The UN attempts to prevent war through the following ways **except**
- Preventive diplomacy
 - Peace – building
 - Terrorism
 - Peace - keeping
37. The security council gives its report to a gathering of members state
- Every month
 - When there is a conflict
 - When peace – making has failed
 - Every year
38. From the passage, we can conclude that the UN peace- keeping has gained prominence
- In the United State of America
 - All over the world
 - In places where other means have not succeeded.
 - In Africa

Read the passage below and answer questions 41-50

“Hurray! I did it! Thanks to God Almighty,” shouted Maloka. Maloka was a village girl who was very passionate about her school work. She hoped to pursue engineering one day. She was determined to do well in life. The unexpected news of the results for the Kenya Certificate of Secondary Education (KCSE) had been announced the day before by the cabinet secretary of education. That very day she heard her name being mentioned over the local radio station. She was the top girl in her county having scored grade A (plain) Tears of joy welled up. In her eyes as

she dashed back home to inform her family members of the good news. Makola found her mother unaware and as she broke the news to her, she almost fainted with stock.

They hugged and rejoiced together. The rest of the family joined the celebration. Little did they know that her father had been called to meet the media crew who were on the way to her small village to feature her story. The arrival of her father with a battery of journalists was yet another surprise to her. Maloka was given a few minutes to tidy up since she had just been from the shamba when she heard the announcement on radio. Maloka though camera shy, braced herself for the unexpected interview. She exhaustively narrated how hard and smart she had worked though not sure of emerging the best in the county. She also advised that anyone desiring to do well like her must be highly disciplined, self driven and have self sacrifice. The media interviewer told her that her university education would be sponsored by the local media. She did not altogether believe this she could not hold back her tears as she thanked them for their kind gesture and promised to deliver.

- | | |
|--|---|
| <p>39. According to paragraph one, Maloka exclaimed “ Hurray! I did it! Thanks to God Almighty.”This statement shows that:-</p> <ul style="list-style-type: none">A. Maloka was extremely happyB. Malokawa extremely sadC. Maloka did not know what had happenedD. Maloka was a little happy <p>40. How did Maloka come to know of her KCSE results? Through</p> <ul style="list-style-type: none">A. a county radio stationB. a local radio stationC. her mother and relativesD. a local news paper <p>41. What was Maloka’s dream career?</p> <ul style="list-style-type: none">A. doctorB. lawyerC. engineerD. news caster <p>42. “Tears welled up in her eyes” this means that Maloka was:-</p> <ul style="list-style-type: none">A. Extremely sadB. ShockedC. In agonyD. Very excited <p>43. According to the story, who had gone to receive the media crew?</p> <ul style="list-style-type: none">A. Maloka went to receive themB. The interviewer went to receive themC. Her father went to receive themD. The mother went to receive them <p>44. “ She almost fainted with shock” This means that:-</p> <ul style="list-style-type: none">A. She hardly faintsB. She nearly faintedC. She always faintedD. She has never fainted | <p>45. How long did Maloka need to clean up?</p> <ul style="list-style-type: none">A. a few hoursB. a little timeC. a fortnightD. many minutes <p>46. Which one of the following statement is not true about how Maloka carried out herself during the interview? She</p> <ul style="list-style-type: none">A. had courageB. was camera shyC. narrated the whole story behind her excellenceD. did not completely talk to the media crew <p>47. Maloka’s advice to anyone aspiring to do well are all the following EXCEPT have</p> <ul style="list-style-type: none">A. selfishnessB. high discipleC. self sacrificeD. self drive <p>48. Which one of the following statements is true according to the passage ?</p> <ul style="list-style-type: none">A. Maloka gave irrelevant advice during the interviewB. Maloka did not struggle for her university fees.C. Maloka was shown on television and radioD. Maloka gave up her university dream <p>49. Promising to deliver according to the passage means that:- She will</p> <ul style="list-style-type: none">A. give birth to a baby.B. take a letter to her schoolC. do her very best at the universityD. become the proudest girl in the village <p>50. Maloka can be well described by all the following Except</p> <ul style="list-style-type: none">A. disciplined |
|--|---|

- B.determined
- C. hardworking
- D. naughty

KCPE PREDICTION 001

COMPOSITION

TERM 1-Aug/Sept-2021-Time: 40 mins

YOUR INDEX NUMBER	
YOUR NAME	
NAME OF YOUR SCHOOL	

Below is the beginning of a composition, complete the story making it as interesting as possible.

We were quietly reading our books in class when suddenly.....

This image shows a single sheet of white paper with horizontal blue or grey ruling lines. The lines are evenly spaced and run across the width of the page. There are no margins, text, or other markings on the paper.

This image shows a single sheet of white paper with horizontal ruling lines. The lines are evenly spaced and run across the width of the page. There are no margins, text, or other markings on the paper.

This image shows a single sheet of white paper with horizontal ruling lines. The lines are evenly spaced and run across the width of the page. There are no margins, text, or other markings on the paper.

This image shows a single sheet of white paper with horizontal ruling lines. The lines are evenly spaced and run across the width of the page. There are no margins, text, or other markings on the paper.

NAMBARI YAKO YA MTHANI	
JINA LAKO	
JINA LA SHULE YAKO	

Ilikuwa siku ya furaha tele. Sote tuliamka kabla ya jua kuchomoza.....

[illegible]

[illegible]

[illegible]

[illegible]

KCPE PREDICTION 001

KISWAHILI

MUHULA WA KWANZA-2021- SAA 1 DAKIKA 40

Soma vifungu vifuatavyo. Vina nafasi 1-15. Kwa kila nafasi umepewa majibu manne. Chagua jibu lifaalo kati ya yale uliyopewa.

Mara mwalimu Osiche ____1____ darasani, wanafunzi ____2____ walisimama ____3____. Mwalimu alianza ____4____ ____5____ wanafunzi, “sabalheri !” Wanafunzi nao ____6____ “Aheri mwalimu!” Mwalimu ____7____ “ketini.” “Asante mwalimu,” wanafunzi ____8____ na kukaa nyuma ya ____9____. Ndipo mwalimu akajiandaa ____10____ somo.

- | | | | |
|-------------------|--------------|-----------------|-------------------|
| 1. A. Aliingia | B. akaingia | C. alipoingia | D. aliyeingia |
| 2. A. nyote | B. wote | C. yake | D. wadogo |
| 3. A. wima | B. juu | C. pamoja | D. sawia |
| 4. A. kwa | B. za | C. wa | D. kwenye |
| 5. A. kuwamkuia | B. kuwaamkia | C. kuwasalamia | D. kuwasalamu |
| 6. A. wakarudisha | B. wakasema | C. wakajibu | D. wakakubali |
| 7. A. akaambia | B. akasema | C. akawasemea | D. akawaambia |
| 8. A. waliitikia | B. waliitika | C. walikubali | D. walimsalimu |
| 9. A. dawati zao | B. viti vyao | C. madawati yao | D. madawatini yao |
| 10. A. kuanza | B. kuanzia | C. kumalizia | D. Kumaliza |

Taasisi ____11____ uchunguzi wa Kiswahili (TUKI) ____12____ imezindua mbinu nzuri zaidi ya ____13____ watu ____14____ Kiiswahili ____15____. Nchini Kenya kuliko wasomo wengi.

- | | | | |
|--------------------|---------------|--------------|-------------|
| 11. A. la | B. ya | C. wa | D. na |
| 12. A. ndio | B. ndiyo | C. ndilo | D. ndicho |
| 13. A. kuhamasisha | B. kuamasisha | C. kuhamasia | D. kuhamasa |
| 14. A. kwa | B. na | C. kuhusu | D. ya |
| 15. A. pote | B. mote | C. kote | D. yote |

Kutoka swali la 16-30 chagua jibu lililo sahihi

16. Tambua kiunganishi kati ya maneno uliyopewa

- A. Masalaale !
- B. Mighairi ya
- C. Baada ya
- D. Ng'ang'ania kukutu!

17. Andika wingi wa sentensi hii.

Mkunga alienda sokoni akanunua mkunga.


- A. Mikunga walienda masokoni wakanunua wakunga

B. Wakunga walienda sokoni wakanunua mikunga

C. Mikunga ilienda sokoni ikanunua mikunga

D. Wakuonga walienda masokoni wakanunua mikunga

18. Haya ni maumbo gani?



- A. Kopa, wimbi, kuru, msambamba
 B. Moyo, zigizagi, mche, msambamba mraba
 C. Kopa zigizagi mche, msambamba
 D. Moyo wimbi, kuru, msambamba mraba
19. Tegua kitendawili kifuatacho
 Popoo wawili wavuka mto.
 A. Jahazi B. Nyambizi
 C. Macho D. Miguu
20. Jibu swali lifuatalo:
 Nikisimama kuelekea kaskazini mkono wangu
 wa kulia utakuwa upande gani?
 A. Shimali B. Magharibi
 C. Kusini D. Matlai
21. Chagua usemi halisi uifaa
 Bahati alisema kuwa angeenda nyumbani
 kupumzika
 A. “Nimeenda nyumbani kupumzika” Bahati
 alisema.
 B. “Niende nyumbani kupumzika” Bahati
 alisema
 C. “Nitaenda nyumbani kupumzika,” Bahati
 alisema.
 D. “Nilienda nyumbani kupumzika,” Bahati
 alisema
22. Kanusha sentensi ifuatayo
 Ningewasaidia maskini ningepata baraka
 A. Nisingalisaidia maskini nisingalipata
 baraka
 B. Nisingewasaidia maskini nisingepata
 baraka
 C. Sikusaidi maskini nisingepata baraka
 D. Wasingewasaidia maskini wasongepata
 baraka
23. Milioni arubaini na tisa huandikwa vipi kwa
 tarakimu?

- A. 49,000,000 B. 400,009
 C. 49,000 D. 40,000,009
24. Chagua kivumishi cha sifa katika sentensi hii
 Mwanafunzi mviivu hufanya kazi yake
 kivivu.
 A. Kivivu B. Yake
 C. Mvivu D. Kazi
25. Kikembe cha nyoka ni kinyemere,. Je kikembe
 cha papa ni
 A. Chengo B. Kinyangunya
 C. Kinyaunyau D. kinengwe
26. Neno “chai” liko katika ngeli ipi?
 A. I-ZI B. I-I
 C. KI-VI D. U-I
27. Wanaume waliooa wasichana wa nyumba
 moja huitwa
 A. Mwamu B. mkazamwana
 C. Mwanyumba D. Bavyaa
28. Tumia kirejeshi tamati katika sentensi hii
 Mgeni anayekuja ni mjomba.
 A. Mgeni ajaye ni mjomba
 B. Mgeni akujaye ni mjomba
 C. Mgeni atakayekuja ni mjomba
 D. Mjomba akujaye ni mgeni
29. Sehemu kwenye mahakama ambapo mshtaki
 husimama wakati wa kutoa ushahidi huitwa
 A. Korokoro B. seli
 C. Rummande D. kizimbani
30. Andika sentensi hii kwa ukubwa
 Mguu wa ndovu si wa kawaida
 A. Guu la ndovu si la kawaida
 B. Guu la dovu si la kawaida
 C. Jiguu la ndovu si la kawaida
 D. Maguu ya ndovu si ya kawaida

Soma shairi lifuatalo kasha ujibu maswali kutoka 31-40.

Kiswahili tudumishe, maneno tusichanganye,
 Na mbali tukifikishe, dunia tukitawanye,
 Wazungu tuelimishe, kudharau tuwakanye,
 Tukikuze Kiswahili, dunia kie nee.

Ukabila chaondoa, nchi haina tabaka,
 Migogoro yapotea, vita haviwezi zuka,

Watu wote waongea, Kiswahili fahamika,
Tukikuze Kiswahili, dunia kienee.

Umoja waimarika, watanzania jamii,
Sifa lugha iliyotukuka, ubaguzi sisikii,
Tukikuze Kiswahili, dunia kienee,

Lugha yenye madido, kutamka mdomoni
Kuafiki mimi bado, Kiswahili cha nini,
Ndugu tusilete nyodo, lugha yetu tuthamini,
Tukikuze Kiswahili, dunia kienee.

Kwa nini tukiwa nje, lugha zao watumia,
Yabidi tuhanjehanje, pale mtu kulimia,
Yakwetu tusiipunje, popote kuiitumia,
Tukikuze Kiswahili, dunia kienee.

Vipi mzungu mmoja, wakati twahutubiwa,
Mimi huona vioja, lugha twabadilishiwa,
Kiingiza twabwabwaja, yeye apate elewa,
Tukikuze Kiswahili, dunia kienee.

31. Shairi hili liko katika bahari gani?

- A. Takhmisa B. Tarbia
C. Tathlitha D. Tathnia

32. Jumla ya idadi ya mizani katika ubeti wa tatu ni

- A. 20 B. 2 C. 4 D. 64

33. Vina vya kati vya ubeti wa tano ni

- A. Nje B. Ne C. a D. li

34. Maudhui ya shairi hili ni

- A. Kiswahili lugha ya wajinga
B. Maombi ya kuimarisha lugha ya Kiswahili
C. Jinsi ya kutafsiri Kiswahili
D. Tusikikuze Kiswahili, duniani kisienee

35. Mshororo wa pili katika kila ubeti huitwa

- A. Mleo B. mwandamizi
C. Utao D. mloto

36. Stadi wa kutunga mashairi na nyimbo ni

- A. Manju B. mghani

- C. Malenga D. sogora

37. Nenokulimia limetumika kishairi katika ubeti wa tano. Maana yake ni

- A. kutafsiri B. kulima
C. kulilia D. kusafisha

38. Kipande cha kwanza cha mshororo huitwa

- A. Mwanzo B. ukwapi
C. Mloto D. utao

39. ____ ni shairi la mmajibizano

- A. Utenzi B. ngonjera
C. Tasdisa D. mdahalo

40. Mshororo wa mwisho katika kila ubeti wa shairi hili ni

- A. Kimalizio B. mwandamizi
C. Arudhi D. mkarara

Soma ufahamu kisha ujibu maswali ya 41-50

Ulikuwa ni mkeshwa wa sikukuu ya Krismasi. Nilikuwa nimealikwa na marafiki zangu kwenda kusherehekea kule janibu za mlima Elgon.

Furaha ilinivaa kama lebasi kwa kuwa ilikuwa siku yangu ya kwanza kwenda huko. Njiani nilijionea mengi. Tulisafiri kwa muda mrefu tukavuka milima na mabonde. Tulipofika tuliandaliwa wali wa

biriani, si pilau, si mahamri. Tulikula shibe yetu. Ukawaida wakati wa kuusiwa na wazee kama ilikuwa desturi ya kule.

Wanawali walikusanyika na nyanya zao ili kuelezwa kunga za nyumbani. Walipewa usia mbalimbali kuhusiana na mambo yanayowahusu. Walielezwa kuhusu mavavi, nikasikia wana wakionywa dhidi ya kuvaa mavazi nusu uchi. Kana kwamba vitambaa vimeisha madukani. Pia walielezwa kuhusu kudunisha heshimma kwa wakubwa na wadogo, kuepuka mienendo ya ubiritingoma pamoja na kuwa na busara ya kutenda mambo polepole pasi na papara vijana wa kiume nao waliungana na babu zao karibu, na moto na kuusiwa dhidi wa ulevi chakari. Waliambiwa “wajukumike kuzilinda” familia zao na kuzikidhia mahitaji kama mwanaume hudharauliwa butwezwa na kupoteza nafasi yya kuwa kiongozi wa jamii.

Baada ya hayo wote walikusanyika pamojana kuwapongeza wazee waliobugia chumvi. Ni kweli walielezwa penye wazee hapaharibiki neon. Jambo lile nililiona tofauti sana na kule kwetu ambapo watu huchukulia kuwa Krismasi ni wakati wa watu kula na kushiba ndii! Na baadaye wayu hufika kwenye vyumba vya starehe na kujiburudisha kwa mivinyo mikalimikali.

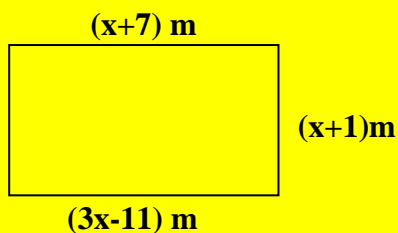
Kutembea kwingi kweli ni kuona mengi. Krismasi ijayo inshallah! Nitawakusanya walio wetu tuzungumze mawili matatu ili tujengane. Je wewe wafanya nini kuondoa uozo katika jamii? Sote tuungane pamoja, tunapokutana katika sherehe tuwafunze wana wetu maadili ili watakapokua wawe ngozi ya mwili. Mwenye tabia nzuri hataiacha, naye mwana mui huenda asibadilike kamwe

- | | |
|--|---|
| <p>41. Kulingana na ibara ya kwanza, mwandishi</p> <ul style="list-style-type: none">A. Walienda kwao na rafiki yakeB. Alienda kwao kusherehekeaC. Alialiokwa na rafiki yake kwenda kwaoD. Walienda mjini <p>42. Ni kauli ipi iliyo ya kweli kulingana na ufahamu?</p> <ul style="list-style-type: none">A. Alikoenda hakukuwa kariku.B. Sherehe ya krismasi ilikuwa sawa na kwaoC. Krimmasi ile ilimkosesha furahaD. Aliburudishwa kwa mvinyo mkali <p>43. Ni sifa gani tunaweza kumpa mwandishi?</p> <ul style="list-style-type: none">A. LaghaiB. MstaarabuC. MnyongeD. Maskini <p>44. Wanawali walikusanyika na nyanya zao. Kinyume cha mwanamwali ni</p> <ul style="list-style-type: none">A. Kizuka B. MkiwaC. Mseja D. mgumba <p>45. Hatari gani inaweza kumpata mtu anayevaa nusu uchi</p> <ul style="list-style-type: none">A. Wizi B. vitaC. Laana D. Ubakaji | <p>46. Ni semi ipi yenye maana sawa na “<u>kulewa chakari</u>”?</p> <ul style="list-style-type: none">A. Kupiga mtindiB. Kunywa majiC. Kula mwataD. Kuwa waya <p>47. Mwanamume asiye kidhi mahitaji ya jamii hufanyiwa haya yote isipokuwa</p> <ul style="list-style-type: none">A. KutwezwaB. KuheshimiwaC. KudharauliwaD. Kupoteza nafasi katika jamii <p>48. Mwandishi asema “krimasi ijayo inshallah” hii ina maana ____</p> <ul style="list-style-type: none">A. Watu wakikusanyikaB. Krismasi ikiwa ya shereheC. Krismasi ikiwadiaD. Mungu akipenda <p>49. Penye wazee hapaharibiki neno yaweza kulinganishwa na</p> <ul style="list-style-type: none">A. Jungu kuu halikosoi ukokoB. Tikiti ni moto wa kwanzaC. Kinolewacho hupataD. Tabia ni ngozi ya mwili <p>50. Kichwa mwafaka cha makala haya ni ____</p> |
|--|---|

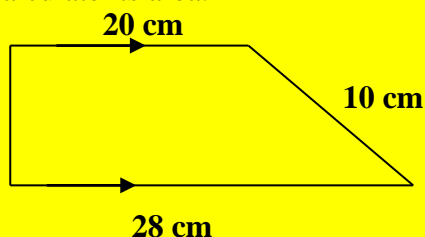
- A. Kuishi kwingi kuona mengi
- B. Nia zikiwa pamoja kilicho mbali huja
- C. Kutembea kwingi kuona mengi
- D. Subira huvuta heri

KCPE PREDICTION 001
MATHEMATICS
TERM 1-Aug/Sept- 2021 – Time: 2hours

- Which one of the following is eight million eight hundred and eighty eight thousand eight hundred and eight less eighty eight.
 A. 8888088 B. 8888808
 C. 8888896 D. 8888896
- By how many times is the value of digit 4 more than the value of digit 5 in the number 643251
 A. 800 B. 39950
 C. 40050 D. 45000
- What is the value of $\sqrt{6^2} \times 4 - 12 + 8$
 A. 4 B. 20 C. 140 D. 124
- The figure below represents Mr. Anyangu's piece of land. Calculate its area if is rectangular in shape.



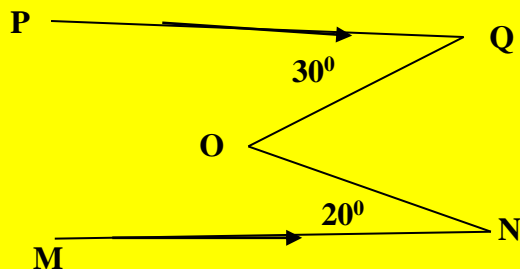
- A. 42 m^2 B. 160 m^2
 C. 80 m^2 D. 320 m^2
- What is 46161 divided by 23?
 A. 27 B. 207
 C. 20007 D. 2007
- What is the least number that can divide 36, 48 and 24 without a remainder.
 A. 12 B. 144 C. 108 D. 72
- What is the value of ; $\frac{0.49 \times 0.35 \times 8.4}{0.007 \times 5 \times 1.2}$
 A. 343 B. 0.343
 C. 34.3 D. 3.43
- What is the next number in the pattern;
 1, 1, 2, 3, 5, 8, 13, _____.
 A. 20 B. 21 C. 15 D. 18
- The figure below A, B, C, D is a trapezium. Calculate its area.



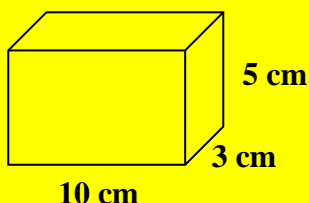
- A. 240 cm^2 B. 144 cm^2
 C. 120 cm^2 D. 288 cm^2

- Six workers are required to finish the work in 24 days, how many more workers are required to complete the work in six days?
 A. 18 B. 24 C. 30 D. 6
- The mean mass of 6 std eight pupils is 45 kg. When the mass of their teacher and another pupil is added their mean mass becomes 48 kg. If the teacher is 14 kg heavier than the other pupil, find the mass of the teacher.
 A. 50 kg B. 72 kg
 C. 57 kg D. 64 kg
- Alumasi borrowed 10,000 in the bank in a period of $2\frac{1}{2}$ years. At which rate was the interest calculated if the bank received 1250 shillings as the interest?
 A. $6\frac{1}{2}$ B. 6 C. 8 D. 5
- What is the value of ; $\frac{2x^2 - y + z}{z - y}$
 When $x = 4$, $z = y + 2$ and $y = x - 1$
 A. 9 B. 12 C. 17 D. 37
- A newspaper vendor sold $\frac{2}{5}$ of the newspapers to motorists and $\frac{1}{4}$ of remainder to students. He also sold $\frac{3}{7}$ of the remaining to teachers. If he was left with 168 news papers how many were sold to students.
 A. 210 B. 126
 C. 840 D. 336
- A river 82 km is represented on a map using a line 4.2 cm. Find the scale used.
 A. 1:200000 B. 1:2000000
 C. 1:100000 D. 1:1000000
- Akumu bought a dress at 950 after getting a discount. What was her percentage discount if the marked price of the dress was 1250?
 A. 50 B. 24 C. 25 D. 30
- A farmer collects 207 eggs daily. How many trays does he need to collect all the egg laid on his farm in one week?
 A. 48 B. 35 C. 34 D. 49
- Using a pair of compasses and a ruler, construct a triangle xyz such that lines $YZ = 7 \text{ cm}$ $xy = 8 \text{ cm}$ and $xz = 6 \text{ cm}$. Draw a circle that passes through pointsxy and z. What is the length of the radius of the circle.
 A. 4.2 cm B. 3.9 cm
 C. 2.0 cm D. 8.3 cm

19. In the figure below line PQ is parallel to line MN angle PQO = 30° and MNO = 20° . Calculate the value of the reflex angle NOQ.




- A. 310° B. 50°
C. 130° D. 270°
20. The figure below shows a rectangular container.



Onesimus filled the container upto 3 cm depth. Calculate the amount water in the container in litres

- A. 900L B. 0.009L
C. 0.9L D. 9000L
21. The stack below was dipped in paint. How many cubes had three faces painted only.



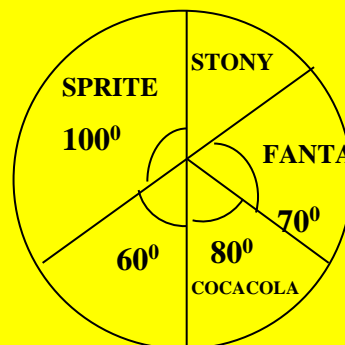
- A. 24 B. 60 C. 8 D. 4
22. 20th January 2016 was on a Monday. Which day of the week was 19th May the same year?
- A. Wednesday
B. Monday
C. Tuesday
D. Thursday
23. The ratio of ratio of girls to boys in Clever bee Academy is 3:5 respectively. If there are 60 more boys girls, how money girls were present the day $\frac{1}{9}$ of them were absent.
- A. 90 B. 80 C. 150 D. 240

24. The table below shows the number of pupils absent from a class of 42 pupils.

	Mon	Tue	Wed	Thur	Frid
Girls	4	3	2	3	5
Boys	2	3	3	2	3

What was the total class attendant for that week?

- A. 210 B. 180 C. 30 D. 12
25. Construct triangle ABC in which line AB is 5:3 cm, $\angle BAC$ is 100° and line AC is 4.2 cm. Draw the circle to touch line AB, BC and CA. What is the diameter of the circle?
- A. 7.4 cm B. 2.8 cm
C. 3.7 cm D. 1.4 cm
26. What is $\frac{1}{3}(12x + 27y) + \frac{1}{4}(36x - 16y)$ in its simplest form.
- A. $13x + 13y$ B. $13x - 5y$
C. $13x + 5y$ D. $13x - 13y$
27. A sales lady is given a 3% commission on all goods sold in one month she sold 15 plots at 200,000/= each. How much did the owner of the plots remain with?
- A. 2,910, 000/= B. 90,000/=
C. 3000000/= D. 60,000/=
28. The pie chart below represents the brands of soda taken by visitors during the swearing in ceremony of our present. If 40,000 people took stony, how many people took cocacola?



- A. 200,000 B. 500000
C. 80000 D. 288000
29. Matendechere woke up at 5.15 a.m. after sleeping for 6 hrs and 45 minutes. At what time did she go bed?
- A. 11.30 p.m. B. 11.25 p.m.
C. 10.25 p.m. D. 10.30 p.m.
30. A tank was $\frac{3}{4}$ full of water. After drawing 60 litres of water, it became $\frac{1}{3}$ full. Calculate the capacity of the tank.
- A. 144 litres B. 180 litres
C. 80litres D. 100 litres

31. Which one of the following is not True of a square.

- A. Diagonals are congruent
- B. all sides are equal and parallel
- C. it is a rectangle
- D. diagonals are perpendicular bisector of each other

32. Samson bought the following items from a shop;

2 kg of sugar @ 112.00

4 – $\frac{1}{2}$ litres packets of milk @ 40.00

$1\frac{1}{4}$ kg of salt @ 20/= per $\frac{1}{4}$ kg

2 kg of wheat flour for 210.00

If he tendered 7 one hundred shilling notes how much was he supposed to add the shopkeeper in order to get 100/= note as balance.

- A. 94/= B. 694/= C. 39/= D. 639/=

33. Paul's watch is losing 5 seconds after every hour. It was set right on Wednesday at 9.30 p.m. What time will it show the following Wednesday at 9.30 p.m?

- A. 9.17 p.m. B. 9.43 a.m.
- C. 9.43 a.m. D. 9.17 a.m.

34. A man was 32 years older than his son ten years ago. His wife is 8 years younger than he is. If their total age is 92 years how old is the son now?

- A. 36 B. 44 C. 24 D. 12 years

35. A shopkeeper had the following denomination in his cash box

8 – one thousand shilling notes

9 – five hundred shilling notes

11 – two hundred shilling notes

14 – one hundred shilling notes

200 – twenty shilling coins. He changed all the cash into 100/= notes. How many notes did he get?

- A. 2010 B. 20100
- C. 201 D. 21

36. What is half the value of x in the equation $\frac{x}{4} +$

$$\frac{x-3}{2} = 3?$$

- A. 6 B. 3 C. 4 D. 2

37. Philimon wanted to fence his rectangular piece of land measuring 60 m long and 50 m wide. Posts were placed 5 m apart leaving 5m for the gate. If each post cost 600 shillings, how much did he spend in buying posts?

- A. 26400 B. 25800
- C. 27000 D. 26800

38. An artisan used a sheet of metal to make an open cylindrical tank whose radius is 14 m and height is 50m. Calculate the area of the material required to make the tank.

- A. 5632 m^2 B. 44000 m^2
- C. 5016 m^2 D. 2816 m^2

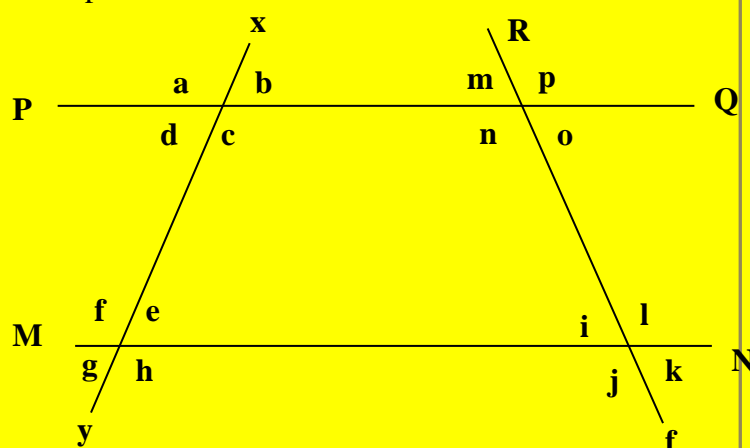
39. In an election, three candidates took part. The winning candidate got 0.429 of the votes cast while the other two got 0.386 and 0.184 respectively. If there were 84 spoilt votes, how many votes did the winner get.

- A. 36036 B. 32424
- C. 84000 D. 15456

40. An empty lorry weights 4.7 tonnes. When loaded with 50 kg bags of cement its weight becomes 8.3 tonnes. How many 50 kg bags are loaded in the lorry?

- A. 72 bags B. 86 bags
- C. 166 bags D. 80 bags

41. In the figure below lines PQ and MN are parallel. Lines XY and RS are transversal.



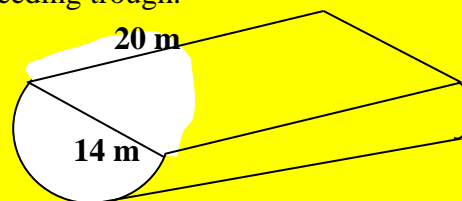
Which statements is true?

- A. angle c and angle h are co-interior
- B. angle d = angle h
- C. angle b = angle p
- D. angle d = angle e

42. The prices of an item in a shop increased by 20%. What was the new price if it was originally 10,000/=.

- A. 9600/= B. 10,000/=
- C. 12000/= D. 8,000/=

43. The figure below shows Okwayo's animal feeding trough.



What is the volume of the feeding trough in m^3 ?

- A. 3080 B. 43120

C. 1540 D. 21560

44. Catherine bought x pencils at 27 shillings each, 5 exercise books, nine rubbers for y shillings. Which one of the following expression represents the total amount of money Catherine used that day if an exercise book had the same price as the pencil?

- A. $27x + 9y + 135$
 B. $27x + y - 135$
 C. $27x + y + 135$
 D. $27x + y + 27$

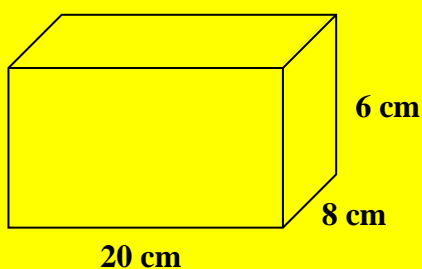
45. The table below shows a bus time table from town A to F.

Town	Arrival time	Dep. time
A		6.25 a.m.
B	8.05 a.m.	8.30 a.m.
C	9.50 a.m.	10.10 a.m.
D	11.25 a.m.	11.40 a.m.
E	1.10 p.m.	1.40 p.m.
F	2.20 p.m.	3.00 p.m.

How long does the bus take to travel from town B to E?

- A. 5 hrs 05 mins
 B. 4 hrs 40 mins
 C. 5 hrs 35 mins
 D. 5 hrs 10 mins

46. Nafula rolled a piece of wire to form a sketch of a cuboid below. Calculate the total length of wire used.



- A. 960 cm B. 136 cm
 C. 34 cm D. 656 cm

47. The table below shows the bus fare tables for Nyaugenia bus serving from Ugenya to Kakamega.

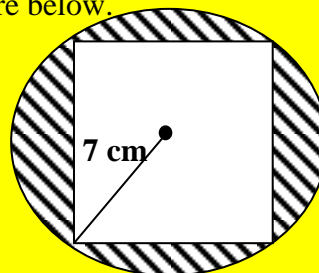
Ugenya					
40	Sitindi				
70	50	Musanda			
110	90	70	Mumias		
150	120	110	50	Makunga	
270	200	150	100	50	Kak.

Amor travelled from ugenya to Musanda via Makunga. How much did she pay?

- A. 180 B. 150

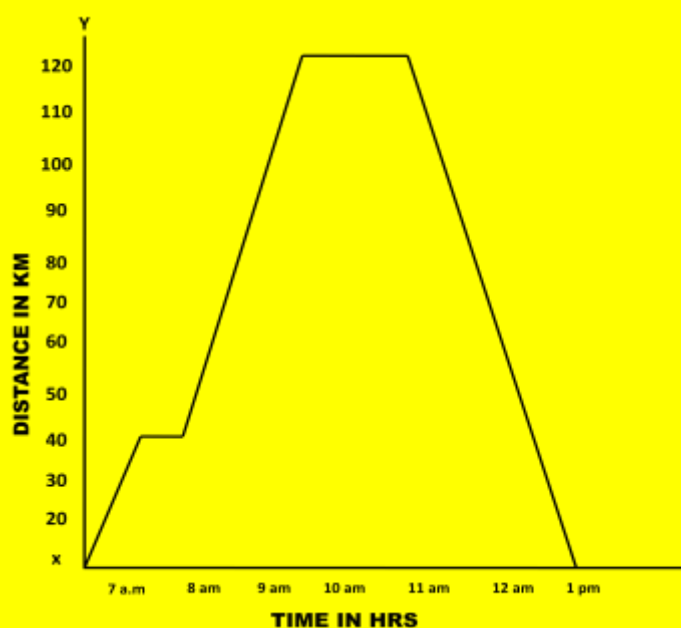
C. 270 D. 260

48. Calculate the area of the shaded part in the figure below.



- A. 56 cm^2 B. 98 cm^2
 C. 42 cm^2 D. 154 cm^2

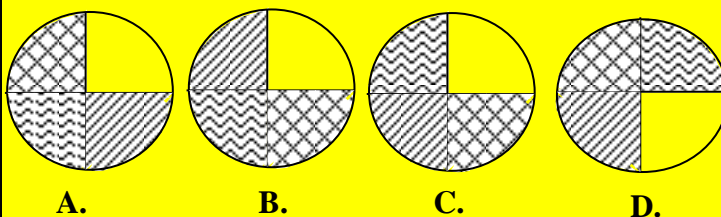
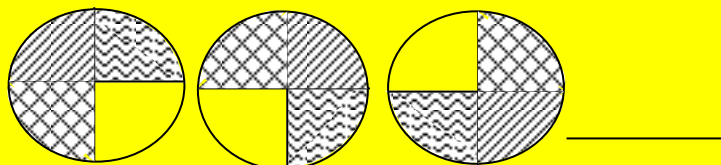
49. The table below shows how a motorist travelled from town x to town Y and back.



Calculate his average speed for the whole journey in km/hr.

- A. 20km/hr B. 60 km/hr
 C. 48 km/hr D. 40 km/hr

50. What is the next pattern?



KCSE PREDICTION 001

SCIENCE

TERM 1-Aug/Sept-2021-Time: 1hr 40 mins

1. Below is a description of a certain tooth.

- i) Flat and chisel shaped
- ii) Has one root
- iii) It is sharp

The type of the tooth described above is ____

- A. Canines B. Pre-molar
- B. Incisor D. Molar

2. Which one of the following immunizable disease is its vaccine administered in the arm the same day the baby is born?

- A. Tetanus B. Tuberculosis
- B. Measles D. Polio

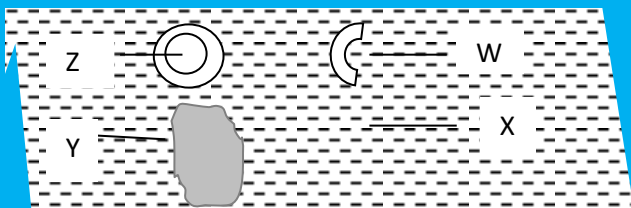
3. Which one of the statements about HIV and AIDS is TRUE.

- A. People living with AIDS are thin
- B. HIV and AIDS is a curse
- C. Premarital sex is the only mode of transmission
- D. People living with HIV and AIDS are advised to eat small amount of food at a time

4. Which one of the following pairs consists of health and social effects of drugs abuse respectively

- A. Impaired judgment and loss of consciousness
- B. Rape and withdrawal
- C. Addition and truancy
- D. Lack of concentration and memory loss

5. The diagram below shows the components of blood.



Carbon dioxide gas is transported by the part marked

A. W B. X C. Y D. Z

6. During breathing in

- A. Lungs deflate
- B. Pressure in the chest cavity increases
- C. Ribcage expand
- D. Diaphragm becomes dome shaped

7. Which one of the following shows the correct path taken by the urine.

- A. Urethra → bladder → ureter
- B. Urethra → urethra → bladder
- C. Urethra → ureter → bladder
- D. Ureter → bladder → urethra

8. Which lever has load between fulcrum and effort

- A. Crowbar B. claw hammer
- C. Wheel barrow D. spade

9. For the tools to last long and work properly the following should be done **EXCEPT**?

- A. Sharpening cutting edge
- B. Oiling the moveable parts
- C. Using them regularly
- D. Proper usage of the tools

10. Friction is measured in

- A. Meters B. Newton
- C. Kilograms D. Grams

11. The following are steps used in making a beam balance but not in order

- i) Fix the stand and the arm to the base
- ii) Make the base stand and the arm
- iii) Suspend weight on both sides of the arm
- iv) Suspend the arm to find balancing point mark

Arrange from first step to the last

- A. II, IV, I, III B. I, II, IV, III
- C. I, III, II, IV D. II, I, III, IV

12. The main reason why mulching is practiced on the farm is to?

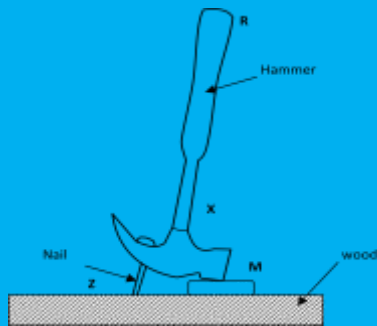
- A. Control soil erosion

- B. Prevent weeds
- C. Add humus to the soil
- D. Conserve soil moisture

13. Which one of the following is NOT a recreational use of water?

- A. Making fountains
- B. Surfing
- C. Skiing
- D. Swimming

14. The diagram below represents a simple machine in use



Which part represents the pivot

- A. M B. R C. Z D. X

15. Which of the following statements is TRUE about clouds that appears low in the sky

- A. They are irregular in shape and indicates fine weather
- B. They have flat base
- C. Are mountainous in shape
- D. Appear like bundles of cotton

16. Which one of the following weather instruments measures two aspects of weather

- A. Wind vane
- B. Rain gauge
- C. Wind sock
- D. Thermometer

17. The soil that drains water LEAST _____.

- A. Has rough texture
- B. Can be obtained from the garden
- C. Has rough particles
- D. is found at river bank

18. The following are characteristics of plants suitable for making green manure. Except

- A. Leafy

- B. Faster growth
- C. Nitrogen content
- D. Slow in rotting

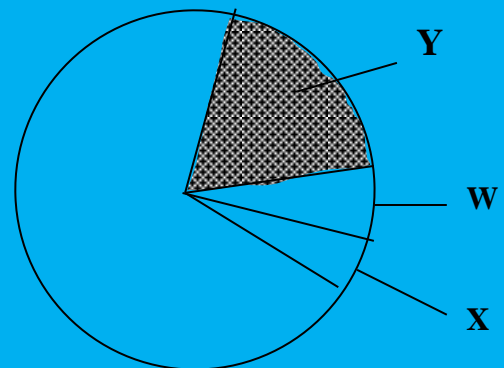
19. The quantity of matter in an object is measured in

- A. Meters B. kilometers
- C. Grams D. centimeters

20. Which of the following mixture can be separated by decanting

- A. Flour and tea leaves
- B. Ink and milk
- C. Cooking oil and spirit
- D. Petrol and kerosene

21. The diagram below shows parts of gases in the atmosphere.



Which part is used by leguminous plant to make proteins

- A. W B. X C. Y D. Z

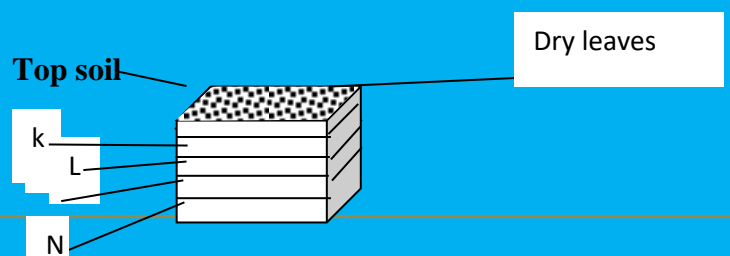
22. Which of the following is an example of magnetic material

- A. Nail B. Plastic
- C. Wood D. Copper

23. When heat is increased on matter they behave in all the following ways EXCEPT

- A. Expand B. Freeze
- C. Evaporate D. melt

24. The diagram below represent an arrangement of material in a compost heap.



In the diagram which letter represent ash

- A. K B. L
C. M D. N

25. Which of the following process involves absorption of heat from the surrounding

- A. Melting B. Freeze
C. Cooling D. Condensation

26. Which one of the following method of separating mixtures will only one substance be recovered from a mixture of two substance.

- A. Filtering B. Evaporation
C. Decanting D. sieving

27. Which one of the following materials will sink in water

- A. Bottle top B. stone
C. Wood D. wax

28. Which one of the following is a disadvantage of friction.

- A. Walking
B. Sharpening
C. Rubbing the board
D. Causes wear and tear

29. Two pupils dropped objects of different masses from the same height which observation did they make.

- A. The heavier one fell fast
B. The lighter one fell fast
C. They fell at the same time
D. They collided

30. Which component of environment is found in all other component.

- A. Oxygen B. Animal
C. Plant D. water

31. Which statements is TRUE about insect pollinated flowers

- A. Are small in size
B. Are dull in colour
C. Have scent
D. Are feathering stigma

32. During germination of a seed the following are necessary **except**

- A. Soil B. Warmth
C. Water D. Oxygen

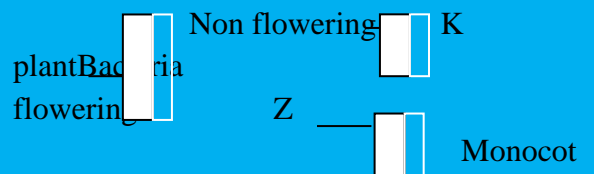
33. Which of the following is a function of leaves

- A. Absorption of water
B. Make food
C. Support plant
D. Transportation of water

34. Which one of the following pairs of a parts of a seed grows into shoot and roots respectively ?

- A. Micropile and radical
B. Plumule and radical
C. Radical and helium
D. Micropile and testa

35. The chart below shows classification of plant



Which one of the following plants are the correct example of the group represent by letter Z and K

	Z	K
A.	Maize	Grass
B.	Peas	maize
C.	Beans	Mushroom
D.	peas	Maize

36. Which one of the following animal moves by **crawling**

- A. Snake B. frog
C. Horse D. Ant

37. Which one of the following method of grazing can be practiced on a small piece of land.

- A. Paddock
B. Stall feeding
C. Tethering
D. Strip grazing

38. Which one of the following animals belong to same group as a tick

- A. Spider B. crab

C. Termite D. weevil

39. Which one of the following is a harmful animal

- A. Dog B. white ants
C. Turkey D. Donkey

40. What happens to a lizard when it bask in the sun? its body temperature

- A. Fall
B. rises
C. Remain the same
D. Rises then fall

41. Which one of the following pest is correctly matched with part of crop it attacks

	Pest	Part of crop attacked
A.	Aphids	Stem
B.	Stalk borer	Leave
C.	Cutworm	Stem
D.	weevil	leaves

42. Which animal has a different type of movement from the others?

- A. Ostrich B. bat
B. Butterfly D. Mosquito

43. Which one of the following is both a modern and a traditional method of food preservation?

- A. Canning B. Drying
C. Use of ash D. smoking

44. Which group of foodstuffs constitutes a balanced diet?

- A. Maize, wheat, rice
B. Sorghum, bread, bean
C. Bread, eggs, kale
D. Beans, peas, avocado

45. Which one of the following is **not** a natural source of light?

- A. Glow worms
B. The sun

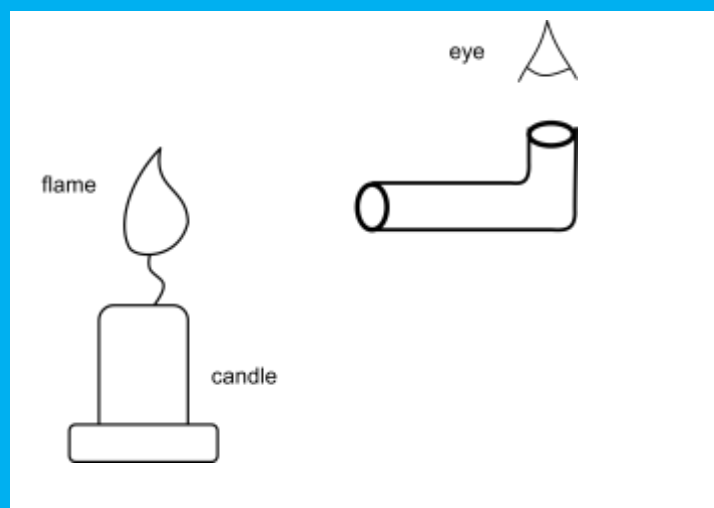
C. The stars

D. Torch

46. The rainbow is formed when there is:-

- A. Mirror and water only
B. Sunlight only
C. Sunshine and water droplets
D. Water and air

47. Std 6 pupils were conducting the experiment as shown below.



From the experiment, the pupils must have concluded that light _____.

- A. travels on a straight line
B. can be refracted
C. cannot travel at a angle
D. travels to all direction

48. Which one of the following is NOT a safety measure when dealing with electricity?

- A. Never touch switches with wet hand
B. Never throw objects on wire carrying electricity
C. Always wear a red T shirt when operating electric gadgets
D. Never insert objects in electric sockets

49. Which one of the following is a use of light?

- A. Ironing clothes
B. Photosynthesis
C. Warming

D. Germination of seeds

50. Which one of the following is an opaque material?

A. Sky light

B. Mirror

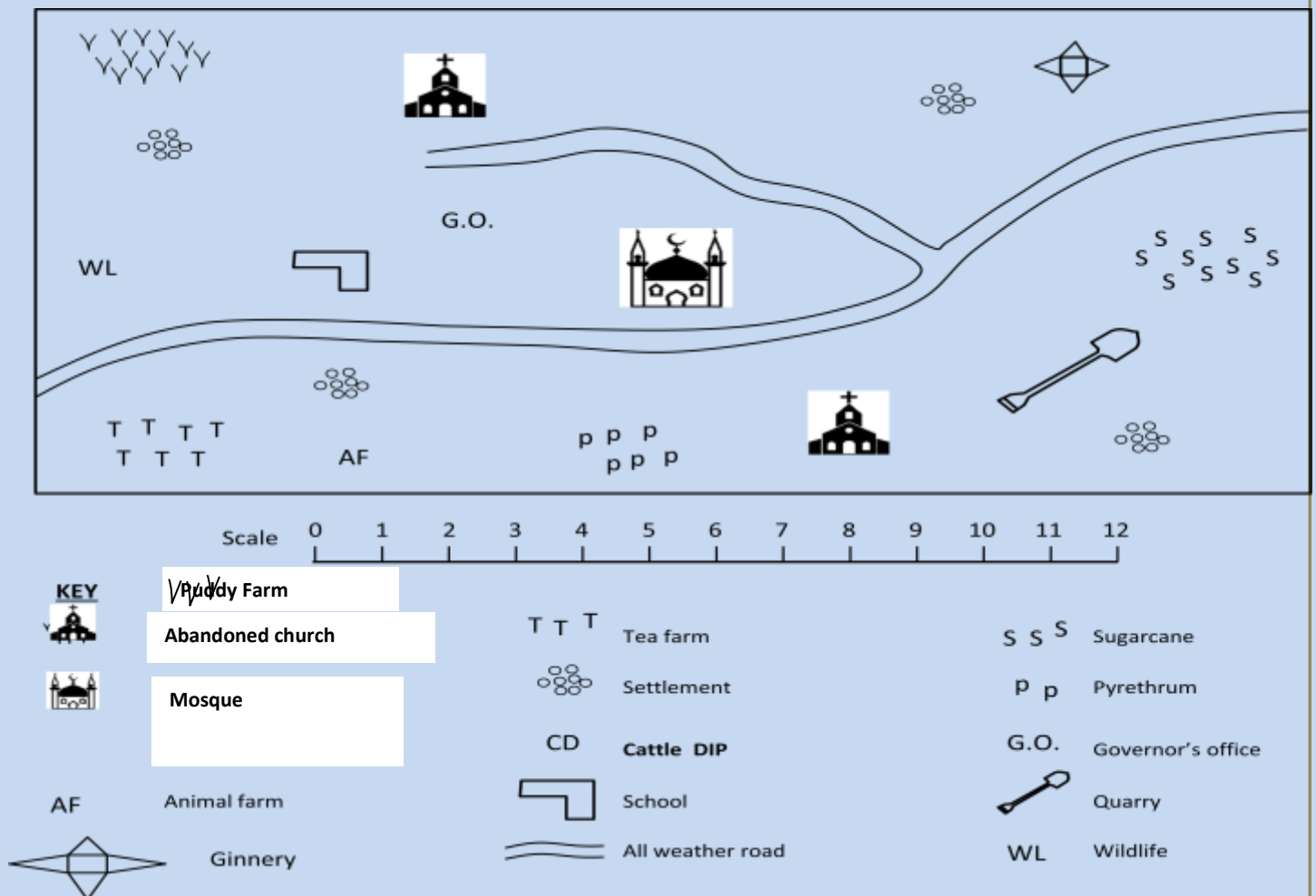
C. Tracing paper

D. Clear glass

KCPE PREDICTION 001

SOCIAL STUDIES \$ RELIGION

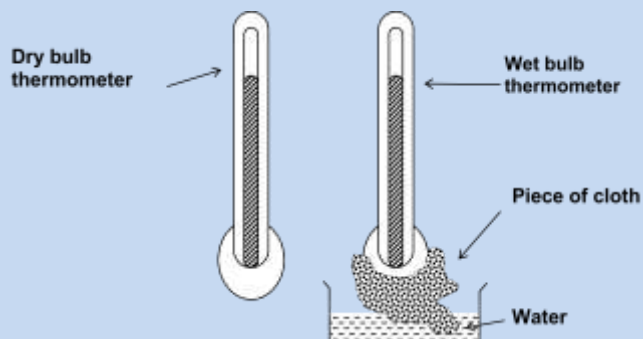
TERM 1-Aug/Sept-2021-Time: 2hrs 15mins



- The land in Kioo slopes to the
 - East
 - North east
 - North
 - South
- The people of Kioo area are?
 - Christian and Muslims
 - Christians
 - Muslims
 - Pagans
- Which type of animals are kept in the South west of Kioo area
 - Diary animal
 - beef animal
 - African Zebu
 - camel
- What is the climatic condition of the Eastern side of Kioo area
 - Cool and dry
 - Hot and wet
 - Cool and wet
 - Wet and dry
- who is the overall administrator of Kioo area.
 - County commissioner
 - Area commissioner
 - Governor
 - Assistant county commissioner
- What is the direction of the ginnery from school
 - North east
 - South west
 - North west
 - South east
- Which one is the main economic activity in Kioo area
 - Crop farming
 - Animal keeping
 - Tourism
 - Mining

8. What does the appearance of full moon indicate in traditional prediction of weather
 - A. On set of rain
 - B. No rain
 - C. Heavy cloudy season
 - D. Low air pressure
9. Which of the following is NOT an effect of human factor that influence climate
 - A. Warming due to green house effect
 - B. Interference with the water cycle
 - C. Increase in carbon dioxide level
 - D. Burning of charcoal
10. Which of the following lakes is NOT a lava dammed Lake
 - A. Lake Michelson
 - B. Lake Ruhondo
 - C. Lake Mutanda
 - D. Lake Tana
11. The following statements describes a relief region in East Africa
 - i) Lies between 400m and 200m above sea level
 - ii) Covers most of Kenya, Tanzania and Ethiopia
 - iii) Experience a long dry season
 The described region is likely to be
 - A. Rift valley
 - B. Coastal plains
 - C. Plateau region
 - D. Lake Victoria Basin
12. Who issues writs in the national assembly
 - A. President
 - B. Senator
 - B. Speaker
 - D. Vice president
13. Which of the following is NOT a proposal that can approve to amend the Kenyan constitution
 - A. A referendum through simple majority votes
 - B. Directive by judicial service commission
 - C. A popular initiative signed by at least one million registered voters
 - D. Through introduction of a bill in parliament
14. Three of the following are chapters of the Kenya constitution which one is NOT?
 - A. The national security
 - B. Devolved government
 - C. Misuse of income and government money
 - D. General guidelines
15. The following are economic organizations among the Khoikhoi. Which one is not?
 - A. Trading
 - B. Hunting
 - C. Gathering
 - D. Keeping of livestock
16. Which artifact among the following was used for both hunting and fishing in the traditional communities
 - A. Hooks
 - B. Fishing baskets
 - B. Bows and arrows
 - D. Spears
17. Evergreen forests have the following characteristics **except**
 - A. Shed leaves in turns
 - B. Grow in area that experience high rainfall
 - C. Shed leaves during dry seasons
 - D. Contain mainly hard wood
18. Mountains that are formed due to the compression of sedimentary rocks are known as
 - A. Residual mountains
 - B. Fold mountains
 - C. Volcanic mountains
 - D. Horst mountain
19. Which one of the following towns in Ghana does not form the cocoa triangle
 - A. Tamale
 - B. Kumasi
 - C. Takoradi
 - D. Accra
20. Which one of the following early visitors moved his capital to Zanzibar.
 - A. Carl Petero
 - B. William Mackinon
 - C. Johann Rebman
 - D. Seyyid Said
21. The following are river lake Nilotes found in Uganda. Which one is not
 - A. Anuak
 - B. Acholi
 - B. Langi
 - D. Alur
22. The time at Rome 15°W is 7:00am. What will be the time in Lilongwe 35° E?
 - A. 3:40am
 - B. 10:20am
 - B. 3:40pm
 - D. 10:20 am
23. Which one of the following political parties led Ghana to independence
 - A. NPP
 - B. UGCC
 - C. NLM
 - D. CPP
24. The type of soil found near the mouths of rivers is known as?
 - A. Clay soil
 - B. Alluvial soil
 - B. Red soil
 - D. Loam soil
25. What was the title given to the army of the king of the Abawanga kingdom
 - A. Olukuyaba
 - B. Tsindang'unyi
 - B. Abamani
 - D. Abangala
26. The std 8 pupils of Mapema primary were shown the diagram below by their social

studies teacher. Which is the correct name of the weather instrument



- A. Maximum and minimum
- B. Hygrometer
- C. Six's thermometer
- D. Simple thermometer

27. People's way of life is referred to as
A. Clan B. culture C. Tribe D. Artifact
28. Which one of the following statement is true about the Nyamwezi chiefs during the pre – colonial period
A. They were appointed by council of elders
B. They were elected by people
C. They inherited the leadership
D. They were chosen by magicians
29. Which one of the following multipurpose river project in Africa cause earth tremors because of its weight
A. The seven forks scheme
B. The Kariba dam
C. The Aswan High dam
D. The Volta river scheme
30. The old Ghana kingdom was located between river____ and River____
A. Gambia and Volta
B. Niger and Senegal
C. Volta and Niger
D. Volta and Senegal
31. The main reason why people migrate from rural areas to urban centre in Kenya is to
A. Look for better land to form
B. Look for employment
C. Enjoy social amenities in urban areas
D. Avoid congestion in rural areas
32. Which of the following effects of soil erosion would affect the growth of industries in Kenya most?

- A. Displacement of people
- B. Flooding in river valleys
- C. Siltation of dams
- D. Reduced pasture

33. Which one of following is not a positive effect of the European settlers
A. Introduction of exotic animals
B. Introduction of commercial farming
C. Development of urban centers
D. Creation of African reserves

34. The following describe a certain type of vegetation
i) Has natural vegetation made of twigs grass
ii) A few trees found along rivers
iii) Green short grass that turns yellowish – brown during the dry season

Which vegetation is this

- A. Mediterranean vegetation
- B. Tropical grassland
- C. Temperate grassland
- D. Semi- desert vegetation

Use the map below to answer questions 35 to 38



35. What is the name of the ocean current marked P
A. Canary current
B. Guinea current
C. Benguela current
D. Cold canary current

36. In which way was the mountain marked W was formed

- A. Folding
- B. Volcanicity
- B. Faulting and uplifting
- C. Down warping

37. Name the man made lake marked L

- A. Lake Kainji
- B. Lake Kindaruma
- C. Lake Volta
- D. Lake Kariba

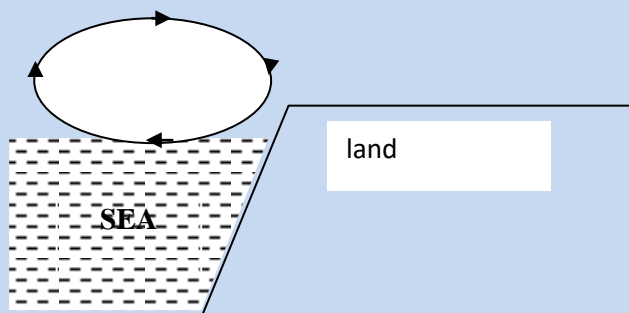
38. Which of the following winds influence rainfall at the place marked Z

- A. South-East winds
- B. Westerlies
- C. South-Westerlies
- D. Mediterranean

39. The diagram below shows a factor that influence climate. Identify the factor



sun



- A. Sea breeze
- B. Land breeze
- C. Wind
- D. Distance from a large water body

40. Which one of the following countries in Eastern Africa has the shortest coastline

- A. Djibouti
- B. Tanzania
- C. Kenya
- D. Sudan

41. One of the following is not a processing industries. Which one

- A. Hides and skin industries
- B. Tobacco industries
- C. Shoe making industries
- D. Sawing of timber

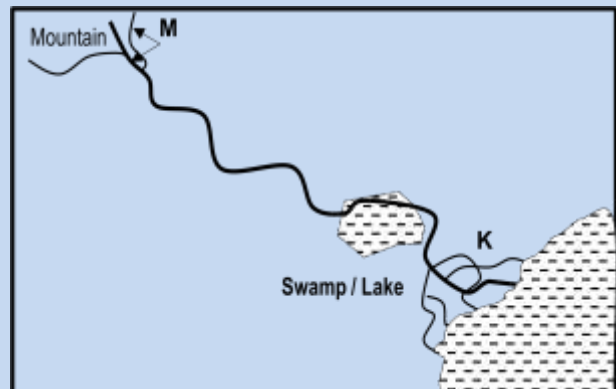
42. Which of the following is not an importance of wildlife in Kenya

- A. Create employment to Kenyans
- B. Promote agricultural sector
- C. Provide game meat
- D. It expansion grab peoples land

43. The following are problems facing tourism in Kenya. Which one is NOT

- A. Lack of money to advertise game parks and poor transport and areas of interest abroad
- B. Poor transport and communication
- C. Insecurity due to terrorist threats
- D. Poaching

Use the diagram of a river profile below to answer question 44-46



44. Name the stage of the river occupied by the swamp/lake

- A. Young stage
- B. Old stage
- B. Mature stage
- D. medium stage

45. State the features marked K at the mouth of the river

- A. Estuary
- B. levees
- C. Delta
- D. Mouth

46. What is the name given to the part marked M

- A. Source
- B. Tributaries
- C. Mountain
- D. Distributaries

47. Which of the following countries is not a member state of S.A.D.C

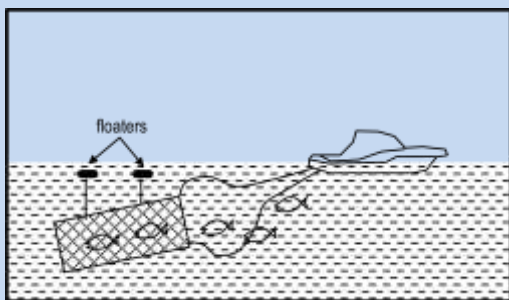
- A. Kenya
- B. Malawi
- C. Botswana
- D. South Africa

48. Which one of the following is not a special court

- A. Children's court
- B. Courts martial
- C. Kadhis court
- D. Supreme court

49. Ghana was colonized by

- A. British
- B. French
- C. German
- D. Belgium



50. which fishing method is shown above?
 A. long lining B. Trawling
 B. Net drifting D. Purse seining
51. Which pair of weather instruments below are kept on a Stevenson screen. Those that measure _____.
 A. rainfall, and temperature
 B. wind and air pressure
 C. temperature and humidity
 D. measure humidity and air pressure
52. Air pressure is measured in _____.
 A. Mercury B. Barometer
 C. Millibars D. Aneroid
53. The Best way of controlling gulley erosion is by
 A. Contour ploughing
 B. Cut-off drains
 C. Construction of check –dams
 D. Terracing
54. Which one of the following is not the purpose for first aid
 A. To save life
 B. To heal the injury
 C. Enable the injured person get to a doctor
 D. Promote recovery
55. The following are national symbols. Which one is not
 A. Public seal B. Court of arms
 C. National flag D. National currency
56. Which of the following does not determine a method of fishing
 A. Availability of capital
 B. Types of fish
 C. Area where fish are found
 D. Purpose of fishing
57. Which of the following is NOT the contribution of Nelson Mandela
 A. Provided leadership to liberation movement.
 B. Demanded for redistribution of land and free primary education.
 C. Unite all races of South Africa.
 D. He took over South Africa from whites without fighting.
58. In Kenya National Census was carried out in 2009. When will it take place again.
 A. 2020 B. 2019 C. 2021 D. 2024
59. When is equinox experienced?
 A. March
 B. June

- C. March and September
 D. December and September
60. Which stage of human evolution is referred to as handy human being.
 A. Homo erectus
 B. Homo habilis
 C. Home Sapiens
 D. Ramapithecus

C.R.E

61. Which one of the following is the **BEST** explains why human beings are the greatest of God's creation?
 A. Human beings share a moral nature with God
 B. Human beings crowned God's hard work.
 C. Human beings can communicate with God unconditionally.
 D. Human beings were made in the likeness of God.
62. "you must have many children so that your descendants will live all over the earth."(Genesis9:7)The above promise were given by God to _____.
 A. Noah B. Moses
 C. Abraham D. Joseph
63. Moses was reluctant to go back to Egypt when he was sent by God mainly because _____.
 A. He felt he was nobody before Pharaoh
 B. His family was still in Midian.
 C. He was afraid of the Egyptians.
 D. He was a sharp stammer.
64. Who among these people was appointed as the first priest during the exodus?
 A. Moses B. Eliezer
 C. Joshua D. Aaron
65. The following statement are true about Joshua except. He _____.
 A. led Israelites to cross the Jordan
 B. led Israelites to cross the Red sea
 C. commanded the sun to stop in the sky
 D. led the Israelite into the promised land
66. Who among the following judges of Israel was sent by God to priest Eli for failing to discipline his sons?
 A. Samuel B. Gideon
 C. Nathan C. Abimelech
67. The division of Israel kingdom during king Solomon's reign was the fulfillment of the prophecy of _____.
 A. Nathan B. Micah
 C. Ahijah D. Isaiah
68. From the story of king Ahab and Naboth we learn that Christians should
 A. Obey those in authority
 B. Be fair in their dealings
 C. Condemn idol worship

- D. Suffer with a purpose.
69. Who among the following prophet foretold that Jesus would be a suffering servant
A. Micah B. Jeremiah
B. Isaiah D. John the Baptist
70. "I baptize you with water, but someone is coming who is much greater than I am"(Luke3:16). These words were said by
A. Jesus B. Isaiah
B. Angel Gabriel D. John the Baptist
71. When baby Jesus was presented in the temple Simeon referred to him as:
A. Salvation for the people
B. Holy spirit
C. John the Baptist
D. Fisher of men
72. One of the following is True about the temptation of Jesus in the wilderness. Which one?
A. Worshipped God
B. Satan tempted him twice
C. Experienced sweat that was like drops of blood
D. Changed stones into bread
73. The parable of Jesus that teaches Christian to be ready for the second coming of Jesus is
A. The yeast
B. The net
C. The Pharisee and tax collector
D. The watchful servant
74. A lesson Christians learn from the miracle of Jesus healing the paralyzed man is
A. Jesus is a universal savior
B. Jesus has power to forgive sins
C. Jesus obeyed the law of Moses
D. The paralyzed are sinners
75. Who among the following people condemned Jesus to death
A. Pontius Pilate
B. Joseph of Arimathea
C. Caiaphas
D. The Pharisees
76. "God bless the King who comes in the name of Lord peace in heaven and glory to Good (Luke 19:38) These words were said to Jesus during
A. Triumphat entry
B. Transfiguration
C. Temptation
D. Arrest an trial
77. What lesson do Christian learn from suffering, death and resurrection of Jesus
A. Hate those who make us suffer
B. We should isolate those who suffer
C. Those who suffer are sinners
D. Jesus gives us salvation
78. Which one of the following events took place on Pentecost day
A. Prophet Joel preached
B. Mathias replaced Judas Iscariot
- C. There was noise from the sky
D. Jesus ascended in heaven
79. The seven helpers in the early church were chosen to
A. Perform miracles
B. Handle finances
C. Baptize the widows
D. Increase the number of Apostles
80. Simon the magician who wanted to buy the power of Holy spirit from Peter and John came from the city of
A. Samaria B. Joppa
C. Lydda D. Jerusalem
81. Peter prayed for Tabitha the kind woman who came back to life. The gift of the Holy spirit demonstrated by Peter was
A. Faith B. working miracles
C. Charity D. Healing
82. One of the following is a part of the stream of life in traditional African communities .which one?
A. Initiation B. death
C. ancestors D. birth
83. Which one of the following beliefs about eternal life is common in both Christianity and traditional African religion?
A. The dead communicate with living through dreams
B. Libations are poured and prayers recited to appease the dead.
C. Sacrifices are offered to the dead to keep them happy
D. There is life after death
84. The initiate in some traditional African communities lived in seclusion in order to
A. Fight community enemies
B. Construct community houses
C. Marry
D. Learn their duties
85. Your classmate Agnes has a habit of reporting late to school. As a Christian the BEST action for you to take is to
A. Report Agnes to her parents
B. Keep it to yourself
C. Inform the class teacher about Agnes habit
D. Talk to Agnes about the important of punctuality.
86. HIV/AIDS can best be controlled through
A. Behaviour change
B. Circumcision
C. Early marriage
D. Use of contraceptives
87. Your classmate John is planning to drop out of school because of his poor performance. As a Christian what is the best advice you can give him
A. Support his idea of dropping out of school
B. Encourage him to be in school and work hard
C. Report to his parents

- D. Report to his class teacher
- 88. Christians are against pre-marital sex because
 - A. It may lead to school drop out.
 - B. It leads to sexually transmitted diseases
 - C. Sex is sacred
 - D. It leads to early marriage
- 89. Jane a std 8 pupil finds out that her classmate is taking alcohol. What is the best action for her to take?
 - A. Tell the other members of the class
 - B. Advice Jane to see a counselor
 - C. Report the matter to the police
 - D. Avoid talking to Jane
- 90. David used his leisure time in one of the following ways. Which one ?
 - A. Playing a harp
 - B. Burying incense
 - C. Making tents
 - D. Collecting tax