

JESMA SET EXAM-22
GRADE 6 TRIAL FIVE

2023 ACADEMIC YEAR

FOR MARKING SCHEMES:

ORDER ONLINE AT:

www.kenyaeducators.co.ke

OR

CONTACT:

Mr Machuki – 0724333200

KENYA EDUCATORS CONSULTANCY

K.P.S.E.A. FIFTH TRIAL
GRADE 6

Kenya Primary School Education Assessment

- ENGLISH -

1 hour 20 Minutes

INSTRUCTIONS TO CANDIDATES (Please read these instructions carefully)

1. You have been given this question booklet and a separate answer sheet. The question booklet contains 30 questions.
2. Do any necessary rough work in this booklet.
3. When you have chosen your answer, mark it on the ANSWER SHEET, not in this question booklet.
4. Use an ordinary pencil.
5. Confirm that the answer sheet that you have been provided with has the following:
YOUR ASSESSMENT NUMBER
YOUR NAME
NAME OF YOUR SCHOOL
NAME OF SUBJECT
6. Do not make any marks outside the boxes.
7. Keep the sheet as clean as possible and do not fold it.
8. For each of the questions 1 – 30, four choices are given. The choices are lettered A, B, C and D. In each case, only ONE of the four choices is correct. Choose the correct answer from the choices.
9. On the answer sheet, the correct answer is to be shown by drawing a dark line inside the box in which the letter you have chosen is written.

Example

In the Question Booklet:

For question 15, choose the best alternative to complete the given sentences.

15. The prefect asked the pupils to keep _____ in class.

- A. quit
- B. quite
- C. quiet
- D. silent

The correct answer is B (quiet)

On the Answer Sheet:


In the set of boxes numbered 15, draw a dark line inside the box with the letter B printed in it as indicated below.

15 [A] [B] [C] [D]

10. Your dark line MUST be within the box.
11. For each question, ONLY ONE box is to be marked in each set of four boxes.

This question paper consists of 7 printed pages

Read the following conversation and then answer questions 1 to 5.



Omondi: How are you John?

John: I am fine, thank you.

Omondi: I see you are in your P.H.E kit. Which game do you play?

John: I play volleyball. What about you?

Omondi: I love table tennis.

John: Great. Why have you not changed into your P.H.E kit, then?

Omondi: I got an injury last week. I will continue playing when I get better.

John: Oh! Sorry, get well soon.

1. John's popular sport was
 - A. tennis
 - B. football
 - C. volleyball
 - D. cricket

2. The following are polite words as used in the dialogue **except**
 - A. thank you
 - B. sorry
 - C. get well soon
 - D. great.

3. Omondi could not play table tennis due to
 - A. casualness
 - B. ignorance
 - C. pretence
 - D. injury.

4. According to you, P.H.E stands for _____.

- A. Physical Education
- B. Physical Energy Education
- C. Physical Health Education
- D. Physical Healthy Education.

5. Omondi would resume sports if

- A. he gets a chance
- B. he gets better
- C. he gets convinced to play
- D. Carol persuades him.

Read the passage below and answer questions 6 to 9.



In the small town of Jikaze, there lived a woman called Wambo. She had a daughter called Sophia. Wambo was married and lived with Sophia in a small house. Sophia was clever and beautiful. From an early age, she worked in her mother's kiosk during weekends and holidays. When she was thirteen, boys started noticing her for her **dazzling** beauty.

6. Which adjectives can you use to describe Sophia?

- A. Ugly and industrious.
- B. Beautiful and clever.
- C. Short and beautiful.
- D. Handsome and clever.

7. Sophia worked in her mother's kiosk during


- A. the day
- B. the night
- C. weekends
- D. evening hours.

8. Boys noticed Sophia at an early age because she was
- A. beautiful and social
 - B. industrious and respectful
 - C. young and responsible
 - D. an extra ordinary girl and clever.
9. The word 'dazzling' has been used in the passage. It means
- A. shining
 - B. gorgeous
 - C. tempting
 - D. attractive.

Read the passage below and answer questions 10 to 12.

The mind of the boy in the street is as focused as that of any other being. This focus is however both short and negative. The main need is hunger satisfaction. If the source to satisfy such a need were sure, it would discourage street life.

Since nobody chooses death willingly, such a child has the option of stealing or robbing to earn a living and avoid death. Such a person grows with a sense of helplessness. Other than his material deprivation, the street boy is aware that the security system can limit his freedom or take away his life.



10. The mind of a street boy is
- A. concerned with immediate need
 - B. as determined as that of any other human being
 - C. troubled and wasted
 - D. both negative and short term.
11. Why do they have such a negative focus? They
- A. want to rob and steal
 - B. are born negative
 - C. choose death
 - D. do not have certain sources of satisfaction.
12. Which freedom is taken away by the security system?
- A. Right to enjoy street life.
 - B. Supply of material.
 - C. Robbing and stealing.
 - D. All forms of life.


Read the passage below and answer questions 13 to 15.

A person without goals is like a dead fish floating down the river at the mercy of currents. One should set personal financial goals to make success a foregone conclusion. One important thing about personal financial goals is that they must be specific and realistic. Amorphous goals are difficult to achieve because they demand extra commitment hence the tendency to postpone due to lack of action. Our goal must have a monetary value and time frame.

When setting our goals, we should be guided by our values, real needs and resources. If for sure we become frank, needs are numerous some of which have great **significance**.

13. What is one ought to do to make success a foregone conclusion?

- A. Float like a dead fish.
- B. Avoid amorphous goals.
- C. Set personal financial goals.
- D. Avoid tendency to postpone.



14. According to the information given

- A. needs are numerous and significant
- B. short-term goals are obvious
- C. goals must be specific and realistic
- D. entertainment is one of short term goals.


15. Which word **cannot** replace the word '**significance**' as used in the passage?

- A. Essential
- B. Nuisance
- C. Need
- D. Importance

Read the passage below. It contains blank spaces numbered 16 to 20. For each blank space, select the best alternative from the choices given

Many 16 times, school pupils compete 17 themselves. Even the fairly weak pupils knows the slogan; 'Where there is a 18 there is a way' as they put 19 more effort in all subjects. Our school is well known for good performance in examinations. Last year we were runners 20 in the county.

16. A. with B. at C. an D. a
17. A. between B. among C. by D. for
18. A. will B. way C. hope D. something
19. A. out B. away C. in D. up
20. A. up B. off C. by D. with



For questions 21 to 23, fill in the blank space with the correct alternatives.

21. Lift the stone _____ than that.
- A. high
- B. higher
- C. highest
- D. more higher
22. There were _____ ribbons on the car.
- A. lovely, new, red
- B. red, new, lovely
- C. new, red, lovely
- D. lovely, red, new
23. We are late. Please walk _____.
- A. faster
- B. fast
- C. more fast
- D. fastest

For questions 24 to 26, choose a word similar to the underlined.

24. The meeting was called off due to insecurity.

- A. cancelled
- B. postponed
- C. lifted
- D. stopped

25. He was advised to cut down on sugar.

- A. improve
- B. reduce
- C. trim
- D. increase


26. Susan, takes after her father in appearance.

- A. imitates
- B. resembles
- C. copy
- D. admires

For questions 27 to 30, choose the correct preposition to fill in.

27. Write the following points

- A. with
- B. in
- C. on
- D. for



28. My fathers deals _____ crab metal.

- A. with
- B. in
- C. at
- D. for

29. Mary is married _____ the old man.

- A. by
- B. to
- C. with
- D. too

30. The lady was robbed _____ her purse.

- A. off
- B. of
- C. for
- D. at

**JESMA
005**

**K.P.S.E.A. FIFTH TRIAL
GRADE 6**

Kenya Primary School Education Assessment

- COMPOSITION -

40 Minutes

253501

| | |
|-----------------|--|
| LEARNER'S NAME: | |
| ASSESSMENT NO: | |
| GRADE: | |
| DATE: | |

KENYA PRIMARY SCHOOL EDUCATION ASSESSMENT
YEAR 2022

READ THESE INSTRUCTIONS CAREFULLY

1. In the spaces provided above, write your name, assessment number, grade and date.
2. Now open this paper, read the composition subject carefully and write your composition on the lines provided.



This question paper consists of 2 printed pages

**JESMA
005**

**K.P.S.E.A. FIFTH TRIAL
GRADE 6**

Kenya Primary School Education Assessment

- COMPOSITION -

40 Minutes

253501

| | |
|-----------------|--|
| LEARNER'S NAME: | |
| ASSESSMENT NO: | |
| GRADE: | |
| DATE: | |

KENYA PRIMARY SCHOOL EDUCATION ASSESSMENT
YEAR 2022

READ THESE INSTRUCTIONS CAREFULLY

1. In the spaces provided above, write your name, assessment number, grade and date.
2. Now open this paper, read the composition subject carefully and write your composition on the lines provided.



This question paper consists of 2 printed pages

You have 40 minutes to write your composition.

Below is the beginning of a story. Complete it in your own words making it as interesting as possible.

The learners were eager for the English lesson to start

A series of horizontal lines for writing the composition.

JESMA
005

K.P.S.E.A. JARIBIO LA TANO GREDI YA SITA

Kenya Primary School Education Assessment

- INSHA -

Muda: Dakika 40

253501

| | |
|------------------------|-----------|
| JINA LA MWANAFUNZI | |
| NAMBARI YA TATHMINI | |
| GREDI | YEAR 2022 |
| TAREHE | |

SOMA MAAGIZO HAYA KWA MAKINI

1. Kwenye nafasi zilizoachwa hapo juu andika jina lako, nambari ya tathmini na tarehe ya mihani.
2. Sasa fungua karatasi hii, soma kichwa cha insha kwa makini na uandike insha yako kwenye nafasi uliyoachiwa.

Kijitabu hiki kina kurasa 2 zilizopigwa chapa.

Tovuti: www.jesmapublishersltd.com

Barua pepe: info@jesmapublishers.com

Andika insha ya kuisimua ukitumia kichwa kinaocho. (Maneno 150-200)

SIKU YA KUTUNZAMAZINGIRA

Blank lined paper for writing the response.

1 hour 40 Minutes

INSTRUCTIONS TO CANDIDATES (Please read these instructions carefully)

1. You have been given this question booklet and a separate answer sheet. The question booklet contains 50 questions.
2. Do any necessary rough work in this booklet.
3. When you have chosen your answer, mark it on the ANSWER SHEET, not in this question booklet.

HOW TO USE THE ANSWER SHEET

4. Use an ordinary pencil.
5. Confirm that the answer sheet that you have been provided with has the following:

YOUR ASSESSMENT NUMBER

YOUR NAME

NAME OF YOUR SCHOOL

NAME OF SUBJECT

6. Do not make any marks outside the boxes.
7. Keep the sheet as clean as possible and do not fold it.
8. For each of the questions 1 – 50, four choices are given. The choices are lettered A, B, C and D. In each case, only ONE of the four choices is correct. Choose the correct answer from the choices.
9. On the answer sheet, the correct answer is to be shown by drawing a dark line inside the box in which the letter you have chosen is written.

Example

In the Question Booklet:

24. The sense of sight helps us to

- A. touch
- B. hear
- C. see
- D. smell

The correct answer is C. (see)

On the Answer Sheet:

In the set of boxes numbered 15, draw a dark line inside the box with the letter B printed in it as indicated below.

24. [A] [B] [C] [D]

10. Your dark line MUST be within the box.
11. For each question, ONLY ONE box is to be marked in each set of four boxes.

This question paper consists of 8 printed pages

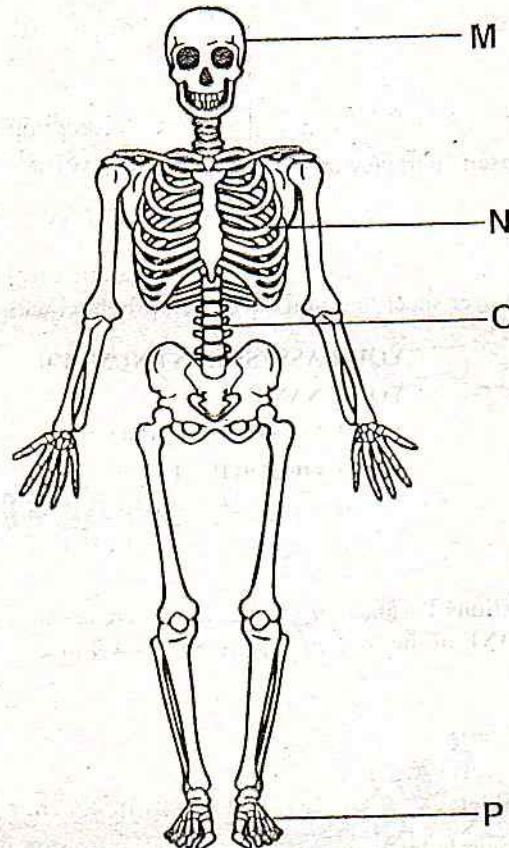
1. Which of the following plants is non-flowering?
- A. Mango
 - B. Cypress
 - C. Beans
 - D. Peas.

2. Grade 5 learners observed a group of animals with the following characteristics.
- (i) They lay eggs.
 - (ii) They breathe through lungs.
 - (iii) Their body is covered with feathers.
 - (iv) Constant body temperature
 - (v) Have scales on their legs

Which group of animals did they see?

- A. Reptiles
- B. Birds
- C. Amphibians
- D. Mammals.

3.



Which of the following is **correctly** matched with the part it represents?

| M | N | O | P |
|-------------|----------|------------|------------|
| A. Ribcage | Skull | Limb Bones | Backbone |
| B. Skull | Rib Cage | Backbone | Limb Bones |
| C. Backbone | Rib Cage | Skull | Limb Bones |
| D. Ribcage | Backbone | Limb Bones | Skull |

4. Waterborne diseases can be prevented in the following ways **except**
- A. eating well cooked food.
 - B. draining stagnant water.
 - C. drinking boiled water
 - D. avoid sharing clothes.

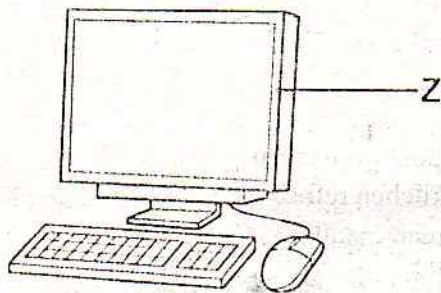
5. Fridah and her classmates observed the sky during the day. What couldn't they see?
- A. Sun
 - B. Sky
 - C. Stars
 - D. Clouds.

6. Digestion of food starts in the _____ and ends in the _____ respectively.
- Stomach and large intestines
 - Gullet and rectum
 - Stomach and anus
 - Mouth and small intestines.
7. During a class discussion four learners gave examples of harmful invertebrates who did not give the **correct** answer?
- John - Butterfly
 - Mary - Mosquito
 - Peter - Lice
 - Ann - Ticks
8. The following are description of a certain types of teeth
- They are sharp and blade-like,
 - they have the shape of a chisel.
 - they are used for biting and cutting food.

Which group of animals did they see?

- Canines
- Incisors
- Pre-molars
- Molar


9.



Name the following part of a desktop computer marked Z.

- Monitor
- Central Processing Unit.
- Mouse
- Keyboard

10. Grade 5 learners observed that electric wires were tight during morning hours but in the afternoon they were loose. what would be the cause of this?
- Condensation and freezing
 - Convection and contraction
 - Expansion and contraction
 - Freezing and convection
11. Which of these ways of waste management is **correctly** matched with its meaning.
- Reusing - Minimising waste.
 - Reducing - Using the waste in another useful way.
 - Recycling - Treating waste and making another production.
 - None of the above
12. Transpiration in plants take place in the
- leaves
 - roots
 - stem
 - flowers.
13. Which part of the female reproductive system acts as a pathway from the ovaries to the uterus?
- Vagina
 - Oviduct
 - Uterus
 - Cervix
14. Some learners collected and mounted the following pictures in their plant album.



Which type of roots do they all have?

- Aerial
- Fibrous
- Adventitious
- Tap

15. A document that is typed can be saved in all the following places **except**

- A. downloads
- B. monitor
- C. documents
- D. desktop

16. A farmer at Mbengo area was seen removing the shade from a nursery bed. What was the **main** reason for the action?

- A. Thinning
- B. Irrigation
- C. Hardening off
- D. Cover cropping.

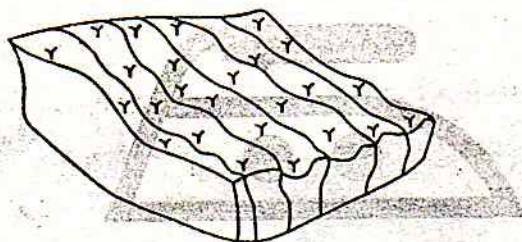
17. Wanyama transplanted his seedlings. He noticed that he still had some seedling remaining; what is the **best** advice you can give him?

- A. Leave the surplus seedlings in the nursery bed.
- B. Plant all the seedlings.
- C. Throw away the excess seedlings.
- D. Sell out the surplus seedlings.

18. Which one among the following is **not** a method of controlling soil erosion?

- A. Cultivating along the slopes.
- B. Making terraces across the slopes.
- C. Planting cover crops.
- D. Avoiding overgrazing.

19. Grade 6 pupils in Mkulima village discovered this type of soil erosion in their farm. Which type of erosion was it?



- A. Splash erosion
- B. Rill erosion
- C. Sheet erosion
- D. Gully erosion.

20. What is the **main** work of mulching?

- A. Add humus
- B. Conserving soil moisture
- C. Control splash erosion
- D. Control rodents.

21. Mwashu put a wiremesh around his farm. What was he **not likely** to control?

- A. Birds
- B. Rodents
- C. Baboons
- D. Monkeys.

22. The **main** purpose of turning materials in a compost pit occasionally is to

- A. make it damp.
- B. activate the decomposers.
- C. allow the circulation of air.
- D. make the pit moist but not wet.

23. The following are examples of creeping crops **except**

- A. pumpkins
- B. melon
- C. pawpaw
- D. cucumbers.

24. The type of soils with smallest particles

- A. holds more water.
- B. has a rough texture.
- C. used for construction.
- D. is the best for farming

25. The following are needed to make a compost pit **except**

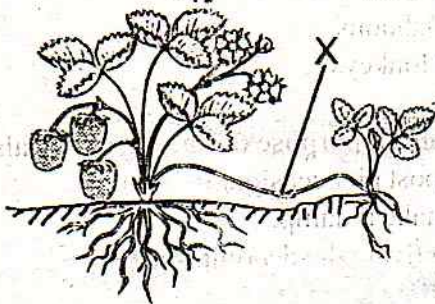
- A. kitchen refuse
- B. maize stalks
- C. ash
- D. sand.

26. Which is the first step when preparing fruit seeds?

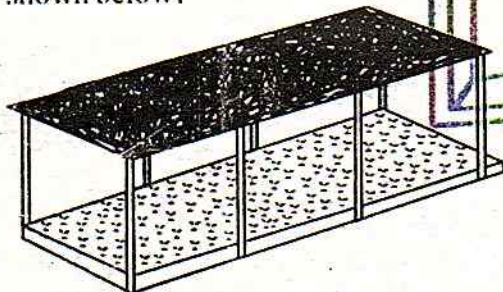
- A. Collection
- B. Sun drying
- C. Washing
- D. Sorting

27. The **main** reason for soaking water melon seeds in warm water is to
- speed up maturity rate.
 - remove the slimy substance around the seeds.
 - make them edible.
 - dry them faster.

28. Name the part of the strawberry plant marked **X** from the figure below.

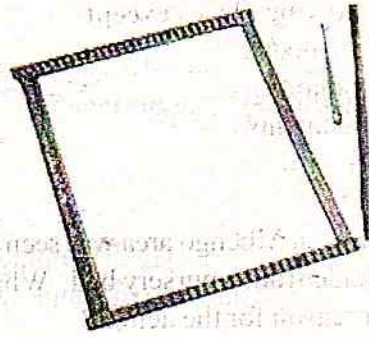


- Node
 - Runner
 - Roots
 - Seed
29. Which method of water conservation is shown below?




- Cover cropping
 - Mulching
 - Nursery bed
 - Shading
30. The people who treat animals are called
- animal doctor.
 - farm officers.
 - veterinary doctors
 - psychologist
31. Which among the following is **not** an aspect of good grooming?
- Physical Exercises
 - Dressing
 - Personal Hygiene
 - Friendships.

32. Identify the equipment below used in weaving.



- Yarn
 - Loom
 - Knitting rod
 - Crochet.
33. Which mineral is required for digestion and absorption of food in our bodies?
- Iodine
 - Phosphorous
 - Calcium
 - Iron.
34. Some grade six pupils were discussing on healthy measures in prevention of common communicable diseases. Which among the following is **not correct**?
- Observing health hygiene.
 - Using the toilet regularly.
 - Using handkerchiefs.
 - Washing hands regularly.
35. Karisa went shopping and bought a shirt with the label below. Identify and name the label.




- Iron, steam or dry with low heat.
- Iron, steam or dry with medium heat.
- Iron, steam or dry with high heat.
- Do not iron.

36. Amani, Korir, Said and Lisa were discussing the importance of having a shopping list. Who among them gave the **best** answer?

- A. Amani - Write your shopping list starting with the most important items.
- B. Korir - Write your shopping list starting with your favourite items.
- C. Said - Write your shopping list starting with the bulky items.
- D. Lisa - Write your shopping list starting with the least expensive items.

37. Grade six pupils from Chuka primary school were carrying out some cooking activities. Identify the cooking method shown below.



- A. Shallow frying
- B. Deep frying
- C. Pan frying
- D. Dry-fat frying.

38. Lulu missed school for one week. Her classmates visited her and found her with the following signs and symptoms.

- (i) Red inflamed patches of the skin
- (ii) Loss of weight
- (iii) Discoloured-brown hair
- (iv) An enlarged stomach

Which of the following diseases was Lulu **likely** to be suffering from?

- A. Measles
- B. Typhoid
- C. Tuberculosis
- D. Kwashiorkor.

39. Which of the following statements is **true** about safety precautions to be observed when cooking?

- A. Never cook in loose clothes.
- B. Plait your hair always.
- C. Always open the windows when cooking.
- D. Store all the knives in a drawer.

40. Kilai made several scarves during his school holidays. He sold them and made some money. Which is the **best** advice you would give him on how to spend the money?

- A. Buy sweets and sugarcane for his peers.
- B. Buy some story books.
- C. Share the money with his class mates.
- D. Buy some drugs and sell to his peers.


41. A grade four boy was asked to define a push pass in soccer. Which of the following sentences **best** describes a push pass?

- A. A pass where one player passes the ball to another as he sprints forward to receive the same ball.
- B. A pass which pushes the ball so as to move it.
- C. A pass where a ball is deflected.
- D. Passing a ball using inside of the foot.

42. Joseph was asked by his PHE instructor to explain what shoulder shrug technique means in athletics. Which of the following answers was he **likely** to give?

- A. An athlete in his last stride bends one shoulder as the chest turns sideways while crossing the finishing line.
- B. An athlete pushes both arms backwards while finishing the race.
- C. The athlete lower his shoulders to touch the tape.
- D. An athlete pushes the trunk forward to touch the tape at the finishing line.

43. After playing rounder game, Brian was asked to identify a term used to refer to the picking up a ball which has been hit by a batsman so as to prevent him from scoring. What was he supposed to give?
- Throwing
 - Catching
 - fielding
 - Stamping.
44. The figure below shows a defensive skill in Kabaddi game.



The defensive skills shown above is known as

- ankle catch
 - chain catch
 - crocodile catch
 - ankle hold.
45. Paul was asked by his teacher to improvise a relay button. Which of the following group of materials was he **likely** to use?
- Manilla papers, timber, nails, glue
 - Manilla papers, nails, timber, sticks
 - Manilla papers, timber, glue, aluminum
 - Manilla papers, nails, timber, aluminum
46. Which of the following reasons given why sliding is important in softball is wrong?
- Sliding helps a player to avoid a tag.
 - It helps a player to be tagged easily.
 - Helps a player to access the post easily.
 - Sliding helps one to avoid collisions with a player.

47. The following are key points that should be observed while performing a discus **except** the
- disc should be thrown from a circle.
 - thrower should leave the circle immediately he throws it.
 - thrower should not touch the top of the rim of the circle.
 - thrower should not touch the ground beyond the circle.
48. A technique of skipping a rope with the toes touching while the heels apart, then heels touching as the toe are apart is called
- wounded duck
 - skier technique
 - heel taps
 - swing kicks
49. After performing a game activity, John felt tired, worn out and bruised. Which of the following was **not likely** to have caused the above?
- He didn't perform cool down activities after playing.
 - He failed to warm his body before playing.
 - He played for a long period of time in a rough area.
 - He did not use the right games attire.
50. Which one of the following is the **correct** order of sequence for a swing kick technique in ropeworks? Swing the leg
- forward then sideways.
 - to the left then to the right.
 - forward then backwards.
 - backwards and then sideways.

THIS IS THE LAST PRINTED PAGE

JESMA
005

K.P.S.E.A. JARIBIO LA TANO
GREDI YA SITA

Kenya Primary School Education Assessment

- KISWAHILI -

Muda: Saa 1

MAAGIZO KWA WATAHINIWA (Soma maagizo yafuatayo kwa makini)

1. Umepewa kijitabu hiki cha Kiswahili na karatasi ya kujibia. Kijitabu hiki kina maswali 30.
2. Ukiisha kuchagua jibu lako, lionyeshe katika **KARATASI YA MAJIBU** na wala sio katika kijitabu hiki cha maswali.

3. Tumia penseli ya kawaida.

4. Hakikisha ya kwamba karatasi ya majibu uliyopewa imejumuisha yafuatayo.

NAMBA YAKO YA TATHMINI

JINA LAKO

JINA LA SHULE YAKO

JINA LA SOMO

5. Usitie alama zozote nje ya visanduku.

6. Iweke safi karatasi yako ya majibu na usiikunje.

7. Kwa kila swali 1-50 umepewa majibu manne. Majibu hayo yameonyeshwa kwa herufi A, B, C, D. Ni jibu **MOJA** (kati ya hayo manne ambalo ni sahihi. Chagua jibu sahihi.

8. Kwenye karatasi ya majibu, jibu sahihi lionyeshe kwa kuchora kistari katika kisanduku chenye herufi uliyochagua kuwa ndilo jibu.

Mfano

Katika kijitabu cha maswali:

28. Neno miwani hupatikana katika ngeli ipi?

- A U - I
- B I - ZI
- C U - YA
- D I - I

Jibu sahihi ni D.

Katika karatasi ya majibu:

28. [A] [B] [C] [D]

9. Chora kistari chako vizuri. Kistari chako kiwe cheusi na kisijitokeze nje ya kisanduku.

10. Kwa kila swali, chora kistari katika kisanduku kimoja tu kati ya visanduku vinne ulivyopewa.

Kijitabu hiki cha maswali kina kurasa 7 zilizopigwa chapa.



(Kanji na Mwende wameketi pamoja darasani)

Mwende: Ndugu Kanji, nasikia hatutakuja shuleni siku ya Jumatatu.

Kanji: (Akimwambia mwenzake) Naam, Jumatatu ni sikukuu ya Madaraka. Sikukuu hizi za kitaiifa zina umuhimu mkubwa nchini.

Mwende: Ahaa! Nilikuwa nimesahau. Kumbé ndiposa nilimwona mama na kundi la kina mama wengine wakijiandaa kwa mavazi ya kitamaduni. Wamekuwa wakikutana jioni kwa maandalizi ya nyimbo za kitamaduni na mitindo ya kucheza.

Kanji: Mama yangu pia yumo katika kundi hilo. Alinidokezea kwamba wanajitayarisha kumtumbuiza mtukufu Rais ambaye atakuwa mgeni rasmi katika gatuzi letu siku hiyo.

Mwende: Hata makundi mbalimbali ya vijana yanajiandaa. Siku hii ni muhimu sana kwani hutuleta pamoja; wake kwa waume, wazee kwa vijana, walalahoi kwa walalaheri.

Kanji: (Akitikisa kichwa kuitikia) Mbali na hayo, sikukuu hizi hutupa nafsi ya kujiunia na kujifunza mengi kutokana na utamaduni wetu. Bila shaka, mapenzi yetu kwa taifa huongezeka.

Mwende: Haikosi mgeni wetu atatumia nafasi hiyo kulishauri taifa liwajibike, liishi kwa udugu na kuitetea nchi dhidi ya wale wanaokwamisha juhudi za maendeleo.

Kanji: Mbona nasi tusiandae mehezo wa kuigiza tuombe nafasi siku hiyo?

Mwende: Hilo ni wazo zuri. Tutawajulisha wenzetu baadaye.

(Mwalimu anaingia darasani)

1. Neno 'Ahaa!' ni mfano wa

- A. kielezi
- B. kivumishi
- C. kiingizi
- D. kihusishi.

2. Ni kweli kusema kuwa,

- A. watu wengi hawakujua kuhusu sikukuu ya Mashujaa
- B. wapo watu waliokuwa wakijiandaa kwa sikukuu ya Mashujaa
- C. wazazi wote wa Mwende walijiandaa kwa sikukuu ya Mashujaa
- D. Rais alikuwa mgeni peke yake wakati wa sherehe.

3. Ni neno lipi la heshima lililotumika kwenye mazungumzo?
 - A. Naam
 - B. Mamangu
 - C. Mgeni
 - D. Mtukufu
4. Sikukuu za kitai fa ni muhimu kwa sababu
 - A. huandaliwa kote nchini
 - B. huwaunganisha wananchi
 - C. huhudhuriwa na viongozi
 - D. hufanyika kila mwaka.
5. Hatimaye, Mwende na Kanji walikubaliana
 - A. kuandaa mchezo ili watumbuize katika sikukuu ya Mashujaa
 - B. wautazame mchezo utakaoigizwa siku ya Mashujaa
 - C. wanyamaze ili mwalimu aendeshe somo lake
 - D. wajiunge na akina mama katika nyimbo za kitamaduni.

Soma kifungu kifuatacho kisha ujibu maswali 6 - 8.

MZEE BUSARA NA WANAWE

Katika kijiji kimoja, aliishi mzee aliyetitwa Busara. Mzee huyu aliishi na wanawe wawili, wa kike aliyetitwa Asha na kakaye mdogo ambaye alitwa Joshua. Mama wa watoto hawa aliaga dunia walipokuwa wadogo sana. Mzee Busara mwenyewe alijifunga kibwebwe akawalea wanawe huku akiwakidhia mahitaji yao yote. Vijana hawa walikuwa watifu, wakakamavu na wanyenyekevu wakati wote.

Wanakijiji walimstahi mzee kwa busara yake kila lilipozuka tatizo kijijini, hawakuchelea kumkimbilia ili awape rai ya kuwasaidia. Naye hakusita kutoa suluhu. Kwa hivyo, hata viongozi wa eneo lile walimthamini sana.

Siku moja, Mzee Busara aliwaita Asha na Joshua chini ya Mwembe alipozoea kuketi. Alisafisha koo akawaambia, "Wanangu, sina mashamba makubwa ya kuwarithisha. Hata hivyo, kile kinachonua kuwapa kina thamani kubwa kuliko mashamba, dhahabu na hata almasi." Vijana wale walitega sikio kumsikiliza baba yao.

Mzee aliwaambia wanawe kwamba alikusudia kuwasomesha katika viwango vyote almradi nao wawe tayari kusoma. Waepuke uzembe kwani ajizi ni nyumba ya njaa. Kupitia elimu wangeweza kuwa katika nafasi yoyote waliyotamani maishani. Watoto walimshukuru baba yao kwa nasaha yake. Wakamwahidi kuwa wangejitahidi kadri ya uwezo wao.

6. Ni jibu lipi sahihi kulingana na aya ya kwanza?
 - A. Familia ya mzee Busara ilikuwa na watu wanne.
 - B. Msichana aliyetitwa Asha alikuwa kifunguamimba.
 - C. Mzee Busara alimpenda Joshua zaidi.
 - D. Mamaye Mzee Busara aliaga dunia alipokuwa mdogo.

7. Msemo alijiunga kibwebwe unamaanisha kuwa,
 A. alifikiria sana
 B. alivaa nguo ya kiunoni
 C. alifanya bidii
 D. alivumilia sana.
8. Wakaazi wa kijiji cha mzee Busara walifaidika vipi?
 A. Walipewa ushauri kuhusu mambo mbalimbali.
 B. Mzee aliwaelimisha ili wajitegemee.
 C. Walipata urithi wa mali na mashamba.
 D. Walimtembelca mzee Busara mara kwa mara.

Soma mazungumzo yafuatayo kisha ujibu maswali 9 - 12
 (Zena alitumwa nyumbani kwa akina Yombo)

Zena: Sabalkheri Yombo?

Yombo: Akheri dada Zena, karibu.

Zena: Asante Yombo. Naona umeamka mapema leo. Je, kuna nini?

Yombo: **(Akicheka)** Wewe pia umejihimu leo. Basi tuseme sisi sote tumerauka. Ninataka kuvifagia vuzimba hivi vya kuku wangu.

Zena: Hongera sana! Naona umeitilia maneno yale tuliyojifunza kuhusu jinsi ya kukabiliana na umaskini. Ama kweli elimu ni taa gizani hung'aa

Yombo: Hayo ni kweli. Elimu tujifunzayo haifar kubaki vitabuni tu. Tunapaswa kuitumia maisha yetu ya kila siku.

Zena: Hebu nieleze unavyofaidika kutokana na ufugaji wa kuku.

Yombo: **(Akisita kidogo)** Manufaa ni chungu nzima, hata sijui nianze wapi. Kwanza jamaa yangu hainunui nyama na mayai, vyote hivi ninawapa bila kuwatoza hata senti. Huo ni mchango wangu katika kuiendesha familia.

Zena: Enhee! Lazima wazazi wako wanaona fahari kwa kuwa na mwana kama wewe. Hebu nieleze mengine.

Yombo: **(Akiashiria nyuma ya nyumba)** Unaziona mboga zilizonawiri pale? Nimezikuza kwa mbolca inayotokana na kinyesi cha kuku wawa hawa. Isitoshe, uuzaji wa kuku na mayai umeniwezesha kujinunulia mavazi na nyenzo za kutumia shuleni.

Zena: Hakika wewe ni kielelezo bora kwa vijana wengi. Nami sasa nitaanza kilimo biashara ili nitoe mchango wangu kwa familia.

Yombo: Hilo ni wazo zuri.

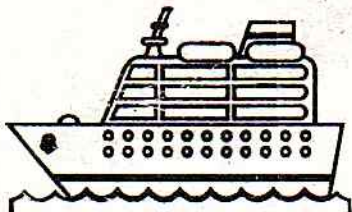
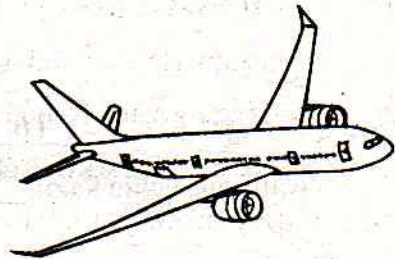


Zena: Nimetumwa na mama nimkumbushe mama yako kuhusu mkutano wao wa leo. Naomba nikamwone sasa.

Yambo: Sawa. Yumo jikoni anaandaa staftahi.

(Zena anaelekea upande wa jikoni)

9. Kwa nini Yombo alikuwa ameamka mapema?
 A. Alitarajia kutembelewa na Zena.
 B. Mamaye angeenda mkutanoni siku hiyo.
 C. Alikuwa akijiandaa kuenda shuleni.
 D. Alitaka kuendesha shughuli zake za siku.
10. Yombo anasema kwamba elimu
 A. hupatikana tu katika vitabu
 B. hutunufaisha katika maisha ya kila siku
 C. huhitajika mtu anapofanya mtihani
 D. si muhimu kama shughuli ziletazo pesa.
11. Yombo alisita kabla ya kujibu swali la Zena kwa kuwa,
 A. hakuyajua manufaa ya kufuga kuku
 B. hakutaka Zena ajue ukweli
 C. manufaa ya ufugaji wa kuku ni mengi
 D. ufugaji wa kuku hauna manufaa.
12. Neno lingine lenye **maana sawa** na kielelezo ni
 A. mfano
 B. maelezo
 C. kiongozi
 D. kiumbe

Soma kifungu kifuatacho kisha uyajibu maswali 13 - 15



Uchukuzi ni shughuli ya kusafirisha shehena kutoka sehemu moja hadi nyingine. Usafiri nao unahusu watu na mizigo. Kila nchi hung'ang'ana kuimarisha miundomsingi ili kurahisisha shughuli za usafirishaji. Aghalabu nchi zilizoendelea sana ndizo huwa na miundomsingi bora zaidi.

Utuzi wa njia ya usafiri huzingatia mambo kadhaa. Kwanza ni masafa kati ya kule anakotoka msafiri au bidhaa na kule zinakowasilishwa. Ikiwa ni karibu, mtu anaweza kutumia miguu, wanyama, baiskeli na pikipiki. Katika masafa ya kati, pikipiki pia huweza kutumika. Ikiwa unakoenda ni mbali, utatumia gari, ndege, garimoshi au mle. Aina ya bidhaa zinazochukuliwa pia kutiliwa maanani. Bidhaa nzitonzito huhitaji meli, garimoshi na malori. Zile zinazoharibika haraka huwasilishwa kwa magari, ndege na treni ziendazo kwa kasi zaidi. Ucheleweshaji wa bidhaa kama hizi huweza kuleta hasara.

Shughuli hizi za uchukuzi ni muhimu sana katika nchi. Hata hivyo, ni vyema sisi sote tuwajibike ili tuzuie ajali zinazosababishwa na ukiukaji wa sheria za uchukuzi. Mapuuzo haya ni kama vile uendesaji wa kasi sana, kusomba mizigo mingi kupindukia na kukosa kukarabati vyombo vya usafiri vinapoharibika.

13. Uchukuzi kulingana na kifungu ni.
- usafirishaji wa vyombo vya kusafiri
 - kusafirisha mizigo kutoka sehemu hadi nyingine
 - usafirishaji wa miundomsingi
 - kusafirisha watu na wanyama katika sehemu mbalimbali.
14. Mtu anapolikiria kuhusu aina ya usafiri hazingatii
- umbali wa kule anakoenda
 - aina ya bidhaa zinazosafirishwa
 - kasi ya chombo kinachotumiwa
 - Usafiri wanaopenda wengine.
15. Ajali katika sekta ya uchukuzi zitaisha ikiwa.
- kila mmoja wetu atawajibika
 - madereva wataondolewa barabarani
 - polisi peke yao watawajibika
 - tutaacha kutumia vyombo vyenye kasi.

Soma kifungu kifuatacho. Kwa kila swali umepewa majibu manne. Chagua jibu lifaalo zaidi kati ya yale uliyopewa.

Jona na ndugu zake 16 sana. Walisaidiana 17 njia 18.
Wazazi wao walipowaachia kazi, 19 pamoja. Walielewa kuwa 20 ndipo
moto uwakapo.

16. A. walipendea B. walipendewa C. walipenda D. walipendana
17. A. na B. kwa C. ya D. za
18. A. mengi B. mingi C. nyingi D. vingi
19. A. walizifanya B. waliyafanya C. waliufanya D. walikifanya
20. A. kuni na kuni B. jifya moja C. kinga na kinga D. moja kwa moja

Kuanzia nambari 21 - 30, jibu kila swali kulingana na maagizo uliyopewa.

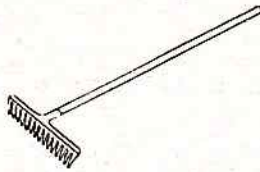
21. Vifuatavyo ni viungo vya ndani ya mwili. Neno lipi halifai kuwepo?

- A. Wengu
- B. Figo
- C. Kongosho
- D. Shavu

22. Hili ni jedwali la maneno. Chagua iibu linaloonyesha vivumishi vya sifa pekee.


| | | | |
|----|--------|-------|------|
| A. | changu | lake | zenu |
| B. | safi | kubwa | tamu |
| C. | mmoja | vinne | tisa |
| D. | huyu | zile | hayo |

23.



Kifaa hiki hutumika kudumisha usafi wa nje. Je, kifaa chenyewe huitwaje?

- A. Beleshi
- B. Ufagio
- C. Reki
- D. Jembe



24. Chagua wingi wa sentensi.

Jungu hilo lina chakula kitamu.

- A. Majungu hayo yana vyakula vitamu.
- B. Nyungu hizo zina vyakula vitamu.
- C. Jungu hizo zina chakula kitamu.
- D. Majungu hizo zina vyakula vitamu.

25. Ni jibu lipi lililo na maneno yenye maana sawa?

- A. Njia - Tariki
- B. Ukuta - Kiambo
- C. Kiti - Takia
- D. Mgeni - Mwenyaji

26. Andika ukubwa wa sentensi ifuatayo.

Ngoma hiyo ilipigwa usiku kucha.

- A. Kigoma hicho kilipigwa usiku kucha.
- B. Ngoma hilo lilipigwa usiku kucha.
- C. Goma hilo lilipigwa usiku kucha.
- D. Ngoma hizo zilipigwa usiku kucha.

27. Chagua jibu linalounganisha sentensi hizi.
Fatu alifua nguo. Milka alisaidia Fatu.
A. Fatu alimfulia Milka nguo.
B. Nguo za Milka zilifuliwa kwa Fatu.
C. Nguo zilifulishwa akina Fatu kwa Milka.
D. Milka alimfulisha Fatu nguo.
28. Nomino zipi zinapatikana katika ngeli ya YA-YA?
A. Maskani, maradhi, mazingira.
B. Magari, mawe, makabati.
C. Magonjwa, mapishi, mabele.
D. Machozi, magunia, meno
29. Methali zifuatazo zinahusu bidii. Ipi haifai kuwepo?
A. Mgaagaa na upwa hali wali mkavu.
B. Umoja ni nguvu utengano ni udhaifu.
C. Ukiona vyaelea jua vimeundwa.
D. Mtaka cha mvunguni sharti ainame.
30. Chagua jibu ambalo ni ukanusha wa sentensi zifuatazo.
Wewe ulishiriki michezo mingi.
A. Wewe hujashiriki michezo mingi.
B. Wewe hukushiriki michezo mingi.
C. Wewe hutashiriki michezo mingi.
D. Wewe huwa hushiriki michezo mingi.



JESMA
005

K.P.S.E.A. FIFTH TRIAL GRADE 6

Kenya Primary School Education Assessment

- MATHEMATICS -

1 hour 20 Minutes

INSTRUCTIONS TO CANDIDATES (Please read these instructions carefully)

1. You have been given this question booklet and a separate answer sheet. The question booklet contains 30 questions.
2. Do any necessary rough work in this booklet.
3. When you have chosen your answer, mark it on the ANSWER SHEET, not in this question booklet.
4. Use an ordinary pencil.
5. Confirm that the answer sheet that you have been provided with has the following:
YOUR ASSESSMENT NUMBER
YOUR NAME
NAME OF YOUR SCHOOL
NAME OF SUBJECT
6. Do not make any marks outside the boxes.
7. Keep the sheet as clean as possible and do not fold it.
8. For each of the questions 1 – 30, four choices are given. The choices are lettered A, B, C and D. In each case, only ONE of the four choices is correct. Choose the correct answer from the choices.
9. On the answer sheet, the correct answer is to be shown by drawing a dark line inside the box in which the letter you have chosen is written.

Example

In the Question Booklet

15. What is the square root of 1 296?

- A. 28
- B. 36
- C. 24
- D. 46

The correct answer is B (36)

On the Answer Sheet:

In the set of boxes numbered 15, draw a dark line inside the box with the letter B printed in it as indicated below.

[A] [B] [C] [D]

10. Your dark line MUST be within the box.
11. For each question, ONLY ONE box is to be marked in each set of four boxes.

This question paper consists of 7 printed pages

253501




1. The population of animals in national park was six hundred and eight thousand, one hundred and two. What was the size of population in symbols?
A. 608 102
B. 600 120
C. 600 812
D. 600 102
2. Grade 5 farm has 85 rows of cabbages. If there are 58 cabbages in each row, how many cabbages are there in the farm to the nearest thousand?
A. 4 930
B. 4 000
C. 5 000
D. 4 930
3. A teacher displayed the following flash cards with the following number.

| | | | |
|------|------|-----|-------|
| 25.2 | 2.52 | 252 | 0.252 |
|------|------|-----|-------|

What was the largest number?

A. 2.52
B. 252
C. 0.252
D. 25.2
4. What is the smallest number which is divisible by 15, 24 and 30.
A. 5
B. 60
C. 24
D. 120
5. A lorry was loaded with 200 cartoons of milk. Each carton contained 56 packets of milk. How many packets are in the lorry?
A. 11 200
B. 1 120
C. 11 000
D. 256

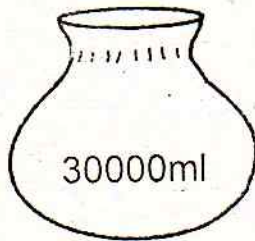


6. Complete the statement below

$\frac{3}{100}$ is _____ 30%

- A. equal
- B. greater than
- C. less than
- D. same as

7. How many litres are there in the container below?



- A. 30 ml
- B. 3 000 ml
- C. 300 ml
- D. 300 000ml

8. A poultry farmer collect 9 900 eggs in 30 days. How many eggs does he collect in a day?

- A. 330
- B. 30
- C. 300
- D. 3000

9. What is the sum of $6\frac{4}{5}$ and $4\frac{1}{4}$?

- A. $10\frac{1}{20}$
- B. $11\frac{1}{20}$
- C. $10\frac{11}{20}$
- D. $10\frac{5}{9}$

10. A square has an area of 256 cm^2 . What is its perimeter?

- A. 16 cm
- B. 34 cm
- C. 24 cm
- D. 64 cm

11. Okoth does swimming exercises in the morning for 13 minutes 45 seconds. In the afternoon he takes 8 minutes 50 seconds to do the swimming. How much time does he take in swimming in a day?

- A. 21 minutes 35 seconds
- B. 5 minutes 15 seconds
- C. 22 minutes 35 seconds
- D. 21 minutes 15 seconds

12. A box is in the shape of a cube. Each side is 8cm. What is its volume in cm^3 ?

- A. 64 cm
- B. 32 cm
- C. 512 cm
- D. 256 cm


13. Which of the following fraction is

equivalent to $\frac{3}{4}$?

- A. $\frac{10}{25}$
- B. $\frac{15}{25}$
- C. $\frac{15}{50}$
- D. $\frac{18}{24}$

14. The mass of a cow is 98.897 kilograms. What is the mass of the cow rounded off to two decimal places?


- A. 98.90
- B. 98.89
- C. 99.00
- D. 98.80



15. Joan covered 65% of his journey by bus and cycled the rest of the journey. Express the distance cycled as a decimal.
- A. 0.45
 - B. 0.35
 - C. 0.65
 - D. 0.25

16. Estimate the difference of 742 204 and 413 881 by rounding off each number to the nearest 1000.
- A. 328 000
 - B. 328 423
 - C. 329 000
 - D. 328 583

17. Which one of the following is **not** an importance of a budget?
- A. It encourage saving.
 - B. It helps to plan how to spend money.
 - C. It helps to spend money on wants before needs.
 - D. It helps to avoid spending money that you do not have.



18. Work out:
 $150 \div 6 \times 5 + 12$
- A. 4 512
 - B. 185
 - C. 425
 - D. 137

19. Which one of the following objects is a 3-D object?
- A. Square
 - B. Pyramid
 - C. Rectangle
 - D. Triangle

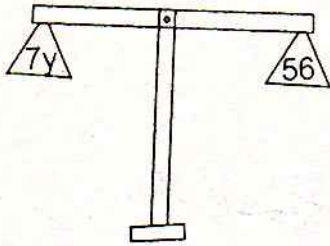
20. What is the measure of the line drawn below?



- A. 5 cm
- B. 4 cm
- C. 6 cm
- D. 7 cm

21. A school uses 35 litres 434ml of milk daily. How much milk does the school uses in 6 days?
- A. 2604 ml
 - B. 37 litres 604ml
 - C. 35 litres 2604 ml
 - D. 212 litres 604 ml

22. What is the value of y in the following;



- A. $y = 49$
 - B. $y = 8$
 - C. $y = 63$
 - D. $y = 7$
23. Ochalo deposited Sh.M in the bank. After three years he withdrew Sh.2000. How much was in his account at the end of three years?
- A. Sh.(M - 2000)
 - B. Sh.(M + 3 + 2000)
 - C. Sh.(M + 2000)
 - D. Sh.(M - 3 - 2000)



24. How many minutes are there in 8 hours and 40 minutes?
- A. 480 minutes
 - B. 840 minutes
 - C. 520 minutes
 - D. 500 minutes

25. A bag of beans has a mass of 4 500 g. What is the mass of twenty such bags in kilograms?
- A. 45 000 kg
 - B. 90 kg
 - C. 90 000 kg
 - D. 900 kg

26. John bought the following items in a shop.
 2 blouses for Sh. 400
 3kg of carrots at Sh. 120 per kg
 2 packets of maize flour for Sh. 250
 $\frac{1}{2}$ kg of onions at Sh. 60 per kg.
 How much did he spend?
 A. Sh. 1 040
 B. Sh. 820
 C. Sh. 1 070
 D. Sh. 920

27. Convert $\frac{2}{5}$ into a percentage?
 A. 50%
 B. 65%
 C. 80%
 D. 40%

28. How many Sh. 200 notes are there in four Sh. 500 notes?
 A. 4
 B. 10
 C. 8
 D. 5

The table below represents the age of learners in a class. Use it to answer questions 29 to 30.

| Age | Number of the pupils |
|-----|----------------------|
| 8 | 10 |
| 9 | 6 |
| 10 | 11 |
| 11 | 9 |
| 12 | 4 |

29. How many pupils are youngest?
 A. 11
 B. 6
 C. 10
 D. 4
30. What is the total number of pupils between age 9 and 11?
 A. 26
 B. 9
 C. 11
 D. 20

**JESMA
005**

K.P.S.E.A. FIFTH TRIAL GRADE 6

Kenya Primary School Education Assessment

CREATIVE ARTS AND SOCIAL STUDIES

1 hour 40 Minutes

INSTRUCTIONS TO CANDIDATES (Please read these instructions carefully)

1. You have been given this question booklet and a separate answer sheet. The question booklet contains 50 questions.
2. Do any necessary rough work in this booklet.
3. When you have chosen your answer, mark it on the ANSWER SHEET, not in this question booklet.

HOW TO USE THE ANSWER SHEET

4. Use an ordinary pencil.
5. Confirm that the answer sheet that you have been provided with has the following:

YOUR ASSESSMENT NUMBER

YOUR NAME

NAME OF YOUR SCHOOL

NAME OF SUBJECT

6. Do not make any marks outside the boxes.
7. Keep the sheet as clean as possible and do not fold it.
8. For each of the questions 1 – 50, four choices are given. The choices are lettered A, B, C and D. In each case, only ONE of the four choices is correct. Choose the correct answer from the choices.
9. On the answer sheet, the correct answer is to be shown by drawing a dark line inside the box in which the letter you have chosen is written.

Example

In the Question Booklet:

15. A revolving punch is a tool used in
- A. drawing
 - B. leather work
 - C. painting
 - D. basketry

The correct answer is B (leather work)

On the Answer Sheet:

In the set of boxes numbered 15, draw a dark line inside the box with the letter B printed in it as indicated below.

[A] [B] [C] [D]

10. Your dark line MUST be within the box.
11. For each question, ONLY ONE box is to be marked in each set of four boxes.

This question paper consists of 8 printed pages

Website: www.jesmapublishers.com

E-mail: jesmapublishers@yahoo.com

© Jesma Publishers & Education Boosters Ltd. T: 0791677718 / 0701515759 / 0734207811

TURN OVER

253501



005

1. Dots have been used to create tonal value and make the picture of the cup below look solid.



Identify the technique used.

- A. Stippling
 B. Cross hatching
 C. Smudge
 D. Painting
2. Who is a puppeteer? A person who
- A. acts like an animal
 B. imitates an animal
 C. manipulates puppets
 D. makes puppets
3. Study the item below. It was made by Charity during an art-craft lesson.



The item was made using


- A. leather.
 B. metal.
 C. cloth.
 D. clay.
4. What is bird's eye view as used in photography? The camera is
- A. below what is being photographed.
 B. at the same level with what is being photographed.
 C. very far from what is being photographed.
 D. above what is being photographed.
5. During weaving, the materials used are interlaced vertically and horizontally on a device called a
- A. loom.
 B. sewing machine.
 C. base.
 D. fabric.

6. Which one of the following statement explains the reason kneaded clay is covered with a wet cloth?
- A. Keep it moist.
 B. Make it smooth.
 C. To remove lump.
 D. For decoration.

7. The area around, above and within an object in drawing is called
- A. balance.
 B. proportion
 C. compound.
 D. space.

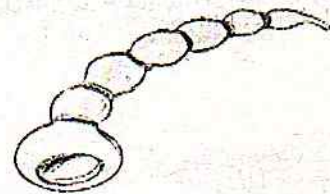
8. Which one is not part of a marionette?
- A. Model.
 B. Handle.
 C. Strings.
 D. Puppeteer

9. Crayons are made using
- A. clay.
 B. chalk
 C. glue.
 D. paraffin wax.



10. The surface quality of an object refers to how an object feels when touched. Surface quality is therefore known as
- A. texture. B. shape.
 C. colour. D. touch.

11. The diagram below shows a musical instrument that is played by a certain community. What is the name of the instrument?



- A. Nzumari B. Abu
 C. Chivoti D. Mulele

12. Which of the following wind instruments is correctly matched with its community?

- A. Luhya - Abu
 B. Kuria - Emborogo
 C. Luo - Mulele
 D. Mijikenda - Soo

13. A grade 6 learner was asked to state things that we should observe so as to make the performance effective. Which one is **not**?

- A. Instruments.
- B. Diction.
- C. Facial expressions.
- D. Gestures

14. Mood can be expressed by certain feelings and emotions. Which of the following words **cannot** be used to show mood?

- A. Happy
- B. Sad
- C. Cheerful
- D. Hatred

15. The musical note below is called



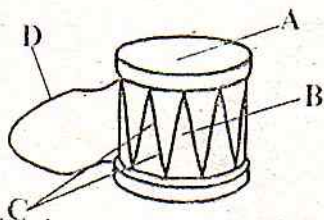
- A. minim.
- B. crotchet.
- C. semibreve.
- D. quaver.

16. Which of the following French rhythm names are represented by the note symbols below respectively?



- A. taa, taa-aa, ta-te
- B. taa-aa, ta-te, taa-
- C. ta-te, taa-aa-aa-aa, taa
- D. taa-aa, taa, ta-te

17. The diagram below shows parts of a percussion instrument.



Which letter represents the part that makes the sound louder?

- A. C
- B. D
- C. B
- D. A

18. The following instruments can be used to accompany a folk song **except**


- A. drum.
- B. guitar.
- C. flute.
- D. horn.

19. The descant recorder is played by

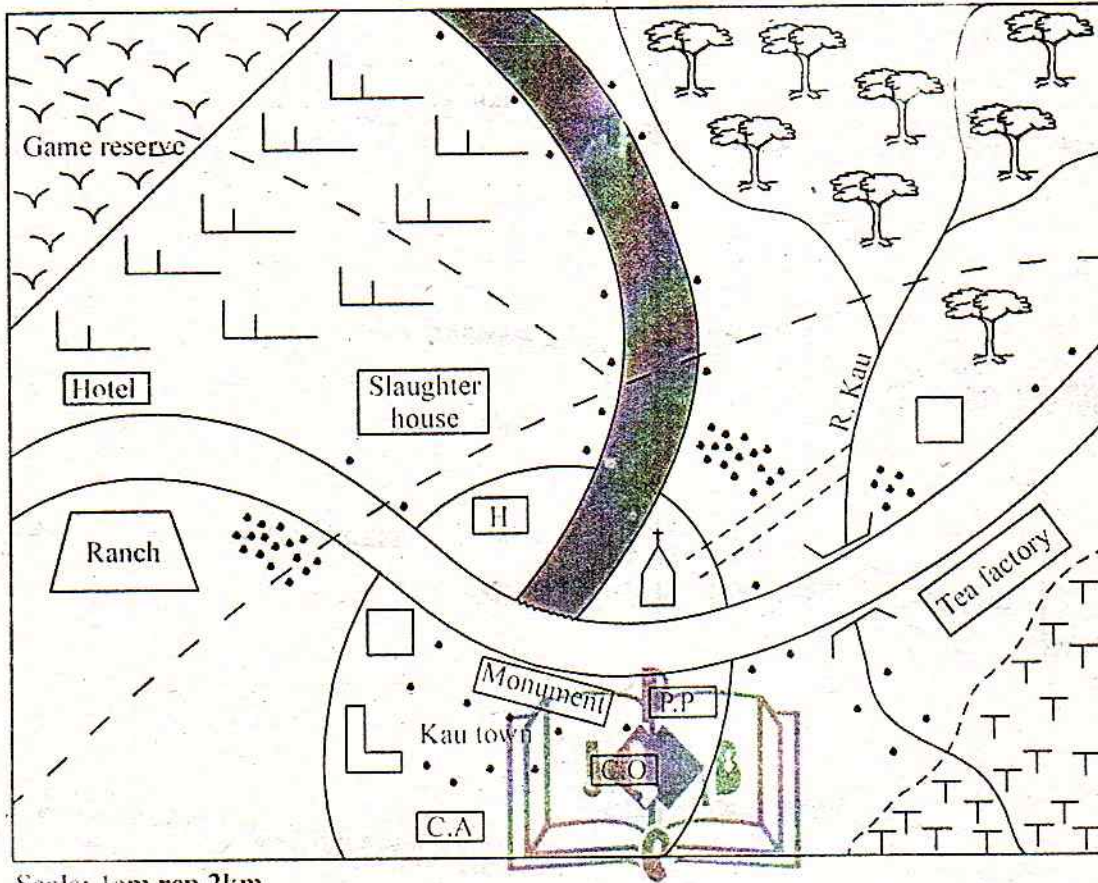
- A. plucking.
- B. hitting.
- C. blowing.
- D. beating.

20. At what tempo is a lullaby performed?

- A. Fast and smooth.
- B. Soft and slow.
- C. Fast and loud.
- D. Loud and slow.



KAU AREA



Scale: 1cm rep 2km

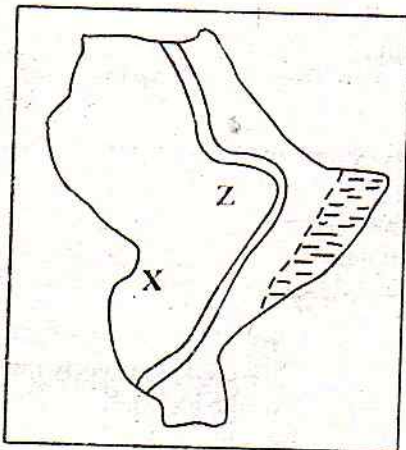
KEY

| | | | |
|------------|---------------------|-----|-----------------|
| | Tarmac road | C.A | County Assembly |
| | Murrum road | | School |
| | Sub-county boundary | | Shrubs |
| | Forest | | Water pipe |
| | Tea | | Church |
| H | Hospital | | Buildings |
| P.P | Police Post | | Settlement |
| C.O | County Offices | | |

Study the map of KAU area and use it to answer questions 21 - 25

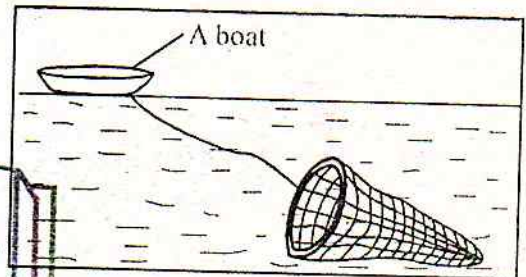
21. One of the uses of River Kau is that it is
 A. a tourist attraction.
 B. used to produce electricity.
 C. a source of fish.
 D. used for domestic purposes in the town.
22. Kau area is likely to be a
 A. county. B. country.
 C. sub-county D. location.
23. Mr. Joel was driving along the Murram road. Which one of the following tourist attractions is he likely to see?
 A. Tea factory. B. Police post.
 C. Monument. D. Ranch.
24. The climate to the North Western part of Kau area is
 A. hot and wet. B. cool and wet.
 C. hot and dry. D. cool and dry.
25. The slaughter house have been situated in the area because of availability of
 A. a ranch. B. hotel.
 C. good roads. D. a town.
26. Below are ways in which the community can collaborate with the school **except**
 A. inviting a resource person in school.
 B. participating in school projects.
 C. providing of learners to the school.
 D. transferring of teachers to other schools.

Use the map below to answer questions 27 to 29




27. The name of the road marked Z is
 A. Trans-African highway.
 B. Great North road.
 C. Trans Northern highway.
 D. Super highway.

28. Which one of the following is a historic built environment found in the country marked X?
 A. Namugongo shrine.
 B. The people's palace.
 C. Askari monument.
 D. Victory.
29. The shaded area in the map have low population density **mainly** because of
 A. insecurity.
 B. pests and diseases.
 C. harsh climate
 D. poor transport.
30. During a field study, Grade Six learners visited a marine fishing ground along the coast. They saw Mr. Mazuri a fisherman using the method drawn below.



Who among the following learners gave the **correct** name of the fishing method?

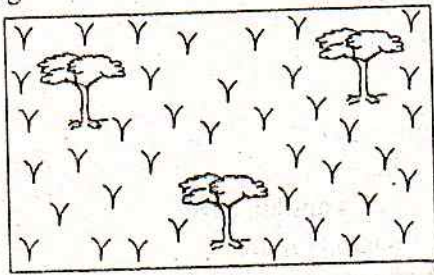
- A. Suleiman - Drifting method.
 B. Njau - Trawling method.
 C. Kigen - Long line fishing.
 D. Halima - Purse seining.
31. Mr. John made the following posters about problems facing tourism in Eastern Africa.



Which one of the following was a recent global problem?

- A. 1 B. 2
 C. 3 D. 4

32. Janet was given a home activity by her social studies teacher to draw the type of trees found in her neighbour. She drew the diagram below



Name the type of vegetation drawn by Janet.

- A. Semi desert B. Mountain
C. Savannah D. Swamp

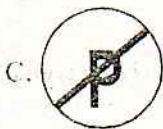

33. Below is a description of a traditional leader in Kenya.

- i) *Opposed forced labour.*
ii) *Opposed destruction of shrines.*
iii) *Foretold future events.*
iv) *Was deported to Kisii.*

The leader described above is

- A. Mekatilili wa Menza.
B. Kiroi wa Mwendwa.
C. Koitalel arap Samoei.
D. Jomo Kenyatta.

34. Grade 5 learners were asked by their teacher to read signs that regulate the behaviour of road users: Which one of the following signs below **did not** belong to this category?



35. Below is a poem composed by a group of learners in Bahati primary school.

All people are equal
Our society is well represented
Our voices are heard
We choose our own leaders
We make rules that help us

The poem above is **more likely** to talk about

- A. patriotism. B. human rights.
C. general elections. D. democracy.

SECTION A: CHRISTIAN RELIGIOUS EDUCATION

36. When Adam was created by God, he was given the following responsibilities except one. Which one?

- A. Name all the animals.
B. Taking care of birds.
C. Cultivating the land.
D. Disobeying God.

37. Which of the following tables show the books of the Bible found in the new testament **only**?

A.

| |
|--------|
| Mathew |
| Exodus |
| Luke |

B.

| |
|-------------|
| Mark |
| Deuteronomy |
| Numbers |

C.

| |
|-----------|
| Ephesians |
| John |
| Luke |

D.

| |
|---------|
| Genesis |
| Numbers |
| Exodus |

38. Noah had three sons. One of his sons saw him naked and went to call the others to see. Who was he?

- A. Ham B. Shem
C. Japheth D. Cain

39. Which of the statements below is **not true** about Prophet Elijah? He

- A. held a contest with the prophets of Baal.
B. prayed to God the Yahweh.
C. worshipped Baal.
D. held a contest on Mount Carmel.

40. Jesus was baptised in River Jordan by John the Baptist. Which of the following **did not** take place during the event?

- A. The Holy spirit in form of dove came down from heaven.
B. Jesus cried in a loud voice.
C. Heaven opened.
D. A voice was heard saying "You are my own dear son. I am pleased with you".

41. **Luke 3:9-14** John the Baptist gave instructions to different groups of people. Which of the following is **correctly** matched to the people given the instructions?

- A. Tax collectors - Do not collect more than is legal.
B. Soldiers - Whoever has food to share.
C. Tax collectors - Be content with you pay.
D. Tax collectors - Don't take money from anyone forcefully.

42. The following events took place during the last supper.

- i) Jesus took a cup and gave thanks to God.
- ii) Jesus took a piece of bread, gave thanks to God and broke it.
- iii) Jesus took his place at the table.
- iv) Jesus gave the cup to his disciples to show amongst themselves.

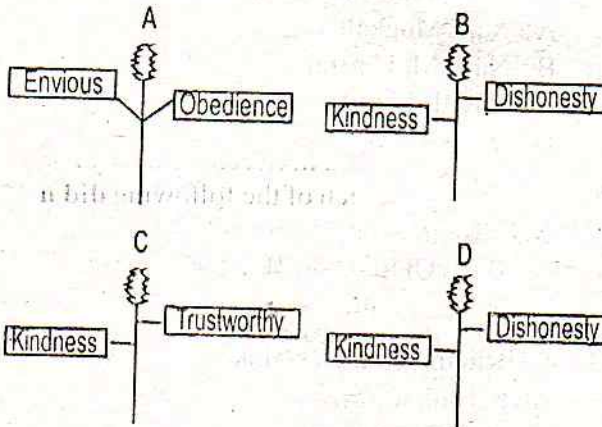
Arrange them in the correct order.

- A. (i), (ii), (iii), (iv)
- B. (iii), (ii), (i), (iv)
- C. (iii), (i), (iv), (ii)
- D. (iii), (iv), (i), (ii)

43. Which of the baskets below contains gifts of the Holy Spirit **only**?



44. Mark is a good friend to Peter. Which of the trees below contain the values that he has?



45. Boys and girls in adolescence undergo many physical changes. Which of the changes below is found in boys alone?

- A. Broadening of hips.
- B. Start of menstruation periods.
- C. Body grows masculine.
- D. Hair grows under the armpits.

46. **Mathew 5:7-9** Blessed are the pure in heart for they.....

- A. be comforted.
- B. will inherit the kingdom of God.
- C. see God.
- D. be humbled.

47. Abed a grade five learner in Aipkoi primary school takes alcohol. He waits for his parents to leave home then opens the fridge and serves himself alcohol. Which of the following is **not likely** to happen to him?

- A. Poor health.
- B. Diseases.
- C. good performance in school.
- D. Be indisciplined in school.

48. "Jesus wept" In which of the following occasions did Jesus weep?

- A. Healing the Roman officers servant.
- B. Raising Lazarus.
- C. Healing the bleeding woman.
- D. When he calmed the storm.

49. Which of the following is the tenth commandment? Do not

- A. commit murder.
- B. covet
- C. commit adultery.
- D. worship any other God.

50. Moses saw a burning bush. A voice from the bush told him to remove his sandals for he was standing on a holy ground. The voice identified itself as the God of

- A. Meshack, Shadrack and Abednego.
- B. Daniel, Moses and Jacob.
- C. Abraham, Isaac and Jacob.
- D. David, Solomon and Isaac.

SECTION B: ISLAMIC ACTIVITIES

36. Kalaa Layumba dhanna fil huthwama .Wamaa adraaka mal huthwama. The next verse is
 A. Innahaa aleihim mu'uswada.
 B. Fil a'madin mumaddada.
 C. Allatii tathwali-u alal af'ida.
 D. Naarullahi muukada.
37. Which surah was revealed to warn mankind not to waste time?
 A. Surah Al-Kauthar.
 B. Surah Al-Quraish.
 C. Surah Al-Asr.
 D. Surah Al-Maun.
38. What is the correct translation of the verse "Fahuwa Fii ii'shata Raadhwiya"?
 A. What will make you know what it is.
 B. He will live a pleasant life in paradise.
 C. People will be scattered like moths.
 D. He will have his home in hell fire.
39. The first chapter in the holy Qur'an is surah Al-Fatiha whereas the last chapter is _____
 A. Surah An-Nas.
 B. Surah al-Ikhlās.
 C. Surah Al-Kafirun.
 D. Surah An-Nasr.
40. Complete this Hadithi. The Prophet(p.b.u.h) said, "Fear Allah wherever you are. follow up a bad deed with a good deed and _____"
 A. welcome your guests.
 B. keep away peoples' affairs.
 C. follow the commands of Allah.
 D. behave well towards people.
41. Which one of the following benefits of knowledge is a reward in the hereafter?
 A. Makes us build our character and behaviour.
 B. Make it easier for one to enter paradise.
 C. Helps us to meet our basic needs.
 D. Helps us to perform our Ibaada.
42. Who among these people who wear clothes, is cursed by Allah? Who wears cloth _____
 A. of the opposite sex.
 B. that does not cover the whole body.
 C. that are transparent.
 D. without saying dua.
43. Muslims are taught, Take advantage of five things before five other matters. which one is not among them? Your
 A. health before you become sick.
 B. free time before you become busy.
 C. powers before you become powerless.
 D. youth before you become old.
44. Which Attribute of Allah(s.w) means that Allah(s.w) is "The Forgiver"?
 A. Al-Ghaffaar. B. Al-Ilafeedh
 C. Al-Waahid D. Al-Ilaakaam
45. Muslims who have the true fear of Allah are called
 A. Al-Mutawakkiliin.
 B. Al-Ilafeedh.
 C. Al-Waahid.
 D. Al-Ilaakaam.
46. Some idol worshippers found that somebody had cut and destroyed their idols. when they asked one Prophet, "who destroyed the idols?" The Prophet answered them, "You ask the biggest idol that has an axe". Which Prophet was this?
 A. Prophet Yusuf
 B. Prophet Ibrahim
 C. Prophet Nuh (A.S)
 D. Prophet Musa (A.S)
47. Heidh and Nifas blood are examples of
 A. Najis Mughalladha.
 B. Najis Mukhaffafa.
 C. Hadith Akbar.
 D. Banu Qinana.
48. Which sub-tribe attacked Prophet Muhammad were youth from
 A. Banu Quraidhwa. B. Banu Khuzaa.
 C. Banu Tha'qif. D. Banu Qinana
49. "Allahumma Innii as-aluka ilman naafi'a"
 In this dua we ask Allah for
 A. beneficial knowledge.
 B. wisdom.
 C. peace.
 D. guidance.
50. Which one of the following items is not payable for Zakkat?
 A. Agricultural products.
 B. Furniture.
 C. Livestock
 D. Minerals.