

# **GRADE 4 ENDTERM 1 2023**


---

## **HOLIDAY ASSIGNMENT**

---

### **SERIES 1**

---



---

**FOR MARKING SCHEMES AND  
MORE PLAYGROUP TO CLASS 8  
HOLIDAY ASSIGNMENTS :**

**CONTACT:**

**MR MACHUKI – 0724333200**

**OR**

**ORDER ONLINE AT:**

**[www.kenyaeducators.co.ke](http://www.kenyaeducators.co.ke)**

**KENYA EDUCATORS CONSULTANCY**

# GRADE 4 ENDTERM 1 HOLIDAY ASSIGNMENT

## ART AND CRAFT ACTIVITIES

### QUESTIONS

#### SECTION A: ART & CRAFT (20mks)

1. List three materials required in crayon etching (3mks)
2. The lightness or darkness of a colour is known as \_\_\_\_\_(2mks)
3. List three media used for shading values. (3mks)
4. Drawing an arrangement of non-living things is known as \_\_\_\_\_ (1mk)
5. \_\_\_\_\_ is the art of cutting pictures from old magazines and newspapers and pasting them to form a new image. (1mk)
6. List any three uses of baskets.(3mks)
7. Thin strips of leather that are used for threading through punched holes are known as \_\_\_\_\_(1mk)
8. List three methods that are used for decorating pots. (3mks)
9. Capital letters are also known as \_\_\_\_\_ in graphic design. (1mk)
10. A person who makes pots is called a \_\_\_\_\_(1mk)
11. List two materials used in painting (2mks)

# GRADE 3 ENDTERM 1 HOLIDAY ASSIGNMENT

## ENGLISH ACTIVITIES GRADE 3 TERM 1 2023

### SECTION A

#### TASK 1 LISTENING AND SPEAKING (5 MARKS)

The teacher asks the learner the following questions. The learner responds.

1. What is your name?
2. Where do you buy fruits and vegetables?
3. Who do you go with to buy the fruits and vegetables?
4. Name two fruits and two vegetables that you buy.
5. Why is it important to eat fruits and vegetables?

#### TASK 2 READ ALOUD (10 MARKS)

Read the story below aloud.

There are many people at the market. The market is usually a very busy place. Many people come to buy and sell different vegetables and fruits. They sell fruits like watermelon, pineapples, apples and mangoes. They also sell vegetables like onions, tomatoes, potatoes and carrots.

#### Read the words

bread idea community  
gloss crawl

### SECTION B TASK 3: COMPREHENSION (5 MARKS)

Read the passage below and answer the questions that follow.

Mary is a doctor. She is a very hard-working doctor. She goes to work every day. She has very many patients. In the morning, she starts working at seven o'clock. She treats around fifty patients every day. She likes treating children more than adults. The children like her because she does not give injections. She goes home by bus.

1. What is the name of the doctor?
2. When does the doctor go to work?
3. What time does the doctor start working?
4. How many patients does she treat every day?
5. Why do the children like her?

#### TASK 4: GRAMMAR (20 MARKS)

Fill in the missing sounds.

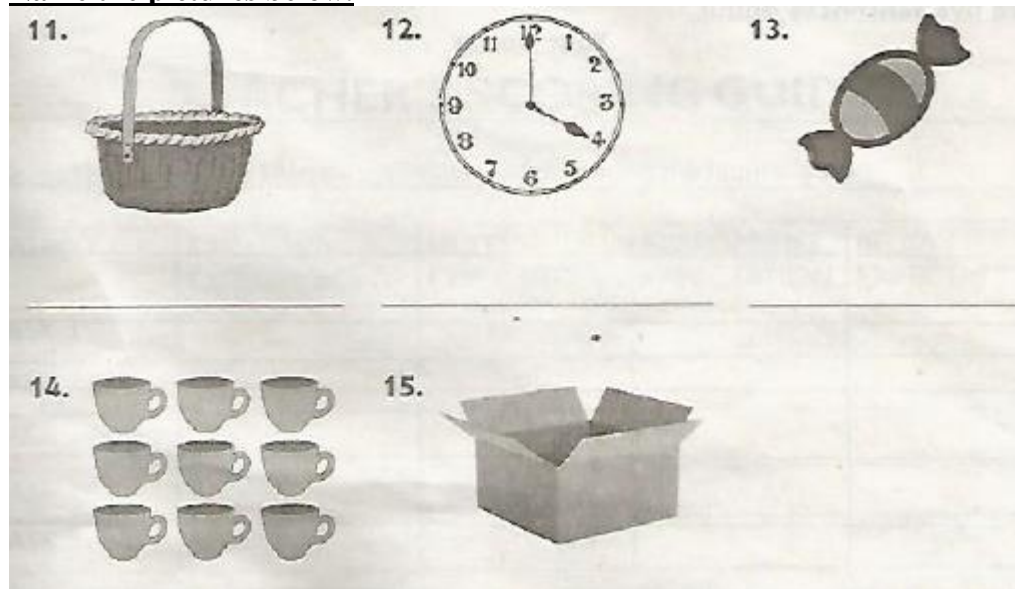
1. The st\_d\_nts are playing.
2. I eat h\_ lth\_ foods every day.
3. My r\_l\_r is broken.
4. Pl\_\_se help me with your rubber

5. My c\_mpt\_r is new.

**Write the opposite of the underlined word.**

6. Moses is present to day.
7. The cow is grazing.
8. This tree is short. That one
9. I am sitting on my chair.
10. The window is clean but the class is

**Name the pictures below.**



**Write the plural.**

16. loaf -
17. lady -
18. baby -
19. class -
20. door -

**SECTION C TASK 5: WRITING (10 MARKS)**

**Dictation**

1. \_\_\_\_\_
2. \_\_\_\_\_
3. \_\_\_\_\_
4. \_\_\_\_\_

5. \_\_\_\_\_

**Write five sentences about**

**Your home**

# GRADE 4 ENDTERM 1 HOLIDAY ASSIGNMENT


## Home Science /Physical Education - Grade 4 Term 1 2023

### QUESTIONS


1. Name the food we eat to make our body healthy (3mks)

- a. ....
- b. ....
- c. ....
- d. ....


2. Draw and name three personal items (3mks)



a.



b.



c.

3. Name three basic needs (3mks)

- a. ....
- b. ....
- c. ....

4. Name the items used to clean the house (3mks)



a. ....

**PHYSICAL EDUCATION**

1. Draw an athletic track showing the starting point of 100m and 200m race (5mks)

2. Name two commands in athletic? (2mks)

- a. ....
- b. ....

3. List four materials used to improve a ball (4mks)

- a. ....
- b. ....
- c. ....
- d. ....

4. Write down two safety measures when improvising a ball

- a. ....
- b. ....

5. Name three games played in your locality

- a. ....
- b. ....

6. We throw the ball using the .....

# GRADE 4 ENDTERM 1 HOLIDAY ASSIGNMENT

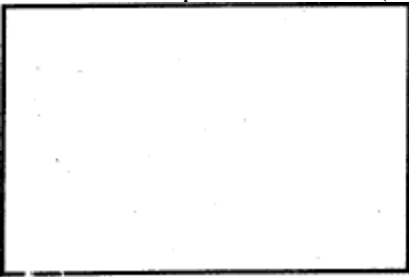
## Home Science /Physical Education - Grade 4 Term 1 2023


### QUESTIONS


1. Name the food we eat to make our body healthy (3mks)

- a. ....
- b. ....
- c. ....
- d. ....

2. Draw and name three personal items (3mks)

a. 

b. 

c. 

3. Name three basic needs (3mks)

- a. ....
- b. ....
- c. ....

4. Name the items used to clean the house (3mks)






a. ....

**PHYSICAL EDUCATION**

1. Draw an athletic track showing the starting point of 100m and 200m race (5mks)



2. Name two commands in athletic? (2mks)

a. ....

b. ....

3. List four materials used to improve a ball (4mks)

a. ....

b. ....

c. ....

d. ....

4. Write down two safety measures when improvising a ball

a. ....

b. ....

5. Name three games played in your locality

a. ....

b. ....

6. We throw the ball using the .....

# GRADE 4 ENDTERM 1 HOLIDAY ASSIGNMENT


## Mathematics - Grade 4 Term 1 2023

### QUESTIONS

- What is the place value of the underlined figure (5mks)
  - 663.....
  - 7405 .....
  - 8726 .....
- Arrange the numbers from the largest to the smallest
  - 90, 190, 290, 394  
.....
  - 313, 303, 103, 113  
.....
  - 19,18, 29, 38, 49  
.....
- Work out:
  - $$\begin{array}{r} 304 \\ +430 \\ \hline \end{array}$$
  - $$\begin{array}{r} 928 \\ + 12 \\ \hline \end{array}$$
  - $$\begin{array}{r} 297 \\ +97 \\ \hline \end{array}$$
  - $$\begin{array}{r} 968 \\ +45 \\ \hline \end{array}$$
- Round off the figure to the nearest 10
  - 67 .....
  - 92 .....
  - 25 .....
- Name the shapes below



- .....



b.

.....



c.

.....

6. What is the next number in the series
  - a. 90, 100, 110,.....,130
  - b. 13,15,.....,19,21
  - c. 25,20, 15,.....,5
7. Mr. Kamau had 799 marbles. He bought other 29 marbles. How many marbles did he have altogether?
8. Work out:
  - a. 
$$\begin{array}{r} 897 \\ - 29 \\ \hline \end{array}$$
  - b. 
$$\begin{array}{r} 963 \\ - 17 \\ \hline \end{array}$$
9. A year has ..... months
10. What is  $\frac{1}{2}$  of 24 = .....

# GRADE 4 ENDTERM 1 HOLIDAY ASSIGNMENT

## Science / Technology & Agriculture - Grade 4 of Term 1

### QUESTIONS

#### SCIENCE

1. Name three living things
  - a. ....
  - b. ....
  - c. ....
2. List three characteristics of living things
  - a. ....
  - b. ....
  - c. ....
3. Animals with backbone are called  
.....
4. Name four types of teeth
  - a. ....
  - b. ....
  - c. ....
  - d. ....
5. Write living things or non living in the pictures (4mks)



a.  
.....



b.  
.....



c. ....



d. ....


- 6. Name two food crops you know
  - a. ....
  - b. ....
- 7. Name three ways on how to care for animals
  - a. ....
  - b. ....
  - c. ....
- 8. We use ..... and ..... to clean our teeth

**AGRICULTURE**

- 1. The best soil for cultivation is ..... soil
- 2. The compost manure is prepared using
  - a. ....
  - b. ....
  - c. ....
- 3. Name three uses of water at home?
  - a. ....
  - b. ....
  - c. ....
- 4. What is weeding?.....
- 5. Name three types of soil
  - a. ....
  - b. ....
  - c. ....
- 6. Write three small animals rised to destroy crops

- a. ....
- b. ....
- c. ....

7. Draw the fruits we eat



8. Name two animals that gives us milk

- a. ....
- b. ....

# GRADE 4 ENDTERM 1 HOLIDAY ASSIGNMENT

## Shuguli za Kiswahili - Grade 4 Term 1 2023

### MASWALI

1. **Soma kwa sauti (alama 10)**

Mazingira safi ni muhimu kwa afya ya kila kiumbe. Maradhi mengi hutokana na uchafu katika mazingira tunamoishi. Ugonjwa wa Malaria husababishwa na uchafu katika mazingira. Mbu wanaoambukiza malaria huishi kwenye mikebe yenye maji iliyotupwa ovyoovyo.

Tunapaswa kuyalinda ili yawe safi. Na pia tulale ndani ya chandarua kilichotibiwa.

2. **KUONGEANA KUSIKILIZA**

**Tamka maneno yenye silabi tatanishi (alama 5)**

piga

pika

tamu

damu

jaja

chacha

bata

pata

chaliwali

3. **Soma hadithi kisha ujibu maswali yafuatayo**

Mwalimu wetu alituambia kwamba ni vyema mtoto awe na nidhamu.

Alisema huwa si vyema mtoto. kuwa, mkatili, mlafi na mchokozi. Mtoto mwenye tabia hizi mbaya huchukiwa na watu wote kijijini. Siku moja jirani yetu alitutembelea nyumbani kwetu. Jina lake alitwa Furaha. Furaha alipenda kucheza sana na kubeba vitu chumbani badala ya kuomba mama yake ruhusa kabla ya kubeba.

Ilipofika jioni Furaha aliambia mama kuwa anahisi njaa na angetaka ale chakula au anywe uji.. Mama yake alimwambia asubiri ampikie uji. Baada ya muda mfupi Furaha hakusubiri awekewe uji kwa kikombe. Alisimama na akajiwekea uji moto. Alijaribu kuunywa akashindwa. Kwa bahati mbaya uji moto ulimumwagikia nguoni. Alikimbia mbio huku akilia kwa uchungu mwingi.

a. Taja mambo matatu ambayo mtoto hapaswi kuwa nayo

.....

b. Mwalimu aliwafunza wanafunzi ni vyema kuwa na?

.....

c. Nani aliyempikia furaha uji? .....

d. Mtoto mwenye tabia mbaya ..... na watu wote.

e. Nani aliyependa kucheza? .....

f. Nani hakuomba ruhusa? .....

4. Jaza pengo

- a. Rafiki yako darasani anaitwaje?  
.....
  - b. Mwalimu mkuu wa shule anaitwaje?  
.....
5. Andika majina ya mavazi ya wanaume pekee
- a. ....
  - b. ....
  - c. ....
  - d. ....

**Andika Insha Kuhusu**

**SHULE YETU**

- Saule huitwaje?
- Mwalimu mkuu anaitwaje?
- Imejengwa na nini?
- Madarasa ni mangapi?
- Inwaldau wangapi?

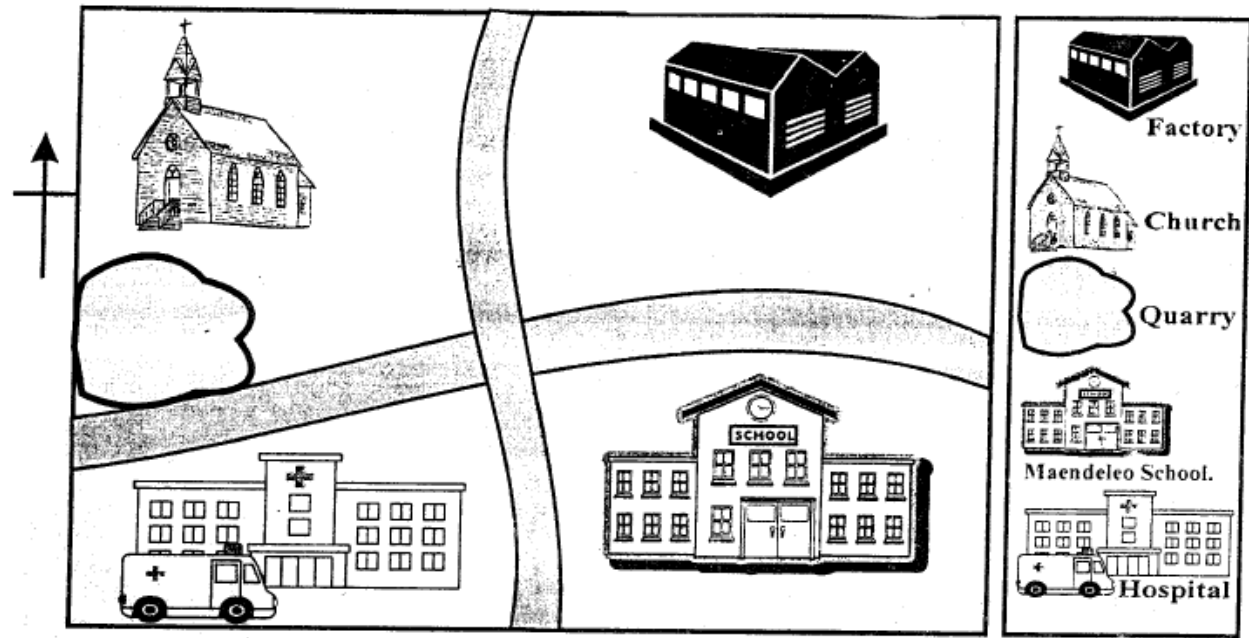


# GRADE 4 ENDTERM 1 HOLIDAY ASSIGNMENT

## Social Studies/R.E - Grade 4 Term 1 2023

### QUESTIONS


#### JUMBO AREA



#### Study the map and answer the questions

1. What is the direction of the school from the church?.....
2. The students learn in a school called? .....
3. The people in Jumbo area worship in a .....
4. Name two economic activities carried out in Jumbo area
  - a. ....
  - b. ....
5. What is a compass direction? .....

6. Draw a compass and name it (4mks)



7. Name the physical features



8. We plant crops during ..... season


9. Name three animals kept at home

- a. ....
- b. ....
- c. ....

10. Our country has : ..... counties

**C.R. E**

- 1. Name two activities that you like doing
  - a. ....
  - b. ....
- 2. ....created everything in six days.
- 3. "You created every part of me.  
You put me together in my mother's womb." This verse. is from the book  
of .....
- 4. Write three bad thought and feelings.
  - a. ....
  - b. ....
  - c. ....
- 5. Draw God's creation



- 6. Write three good choices
  - a. ....
  - b. ....
  - c. ....
- 7. Jesus had .....disciples.
- 8. The wife of Abraham was called? .....
- 9. Name two members of nuclear family
  - a. ....
  - b. ....