


GRD 5 ENDTERM 1 EXAM

ALL SUBJECTS

SERIES 1



**FOR MARKING SCHEMES AND
MORE RESOURCES :**

CONTACT:

MR MACHUKI - 0724333200

OR

ORDER ONLINE AT:

www.kenyaeducators.co.ke

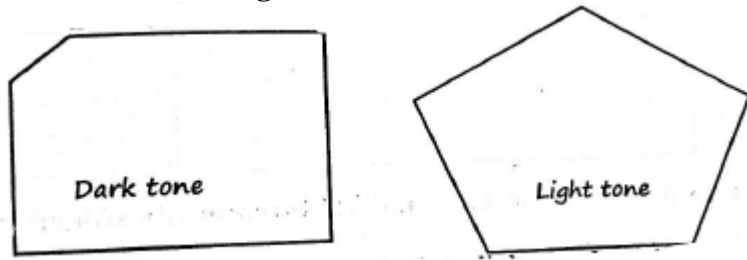
KENYA EDUCATORS CONSULTANCY

TISMA 003 ENDTERM 1 EXAM

GRADE 5-2023

ART & CRAFT

1. Which methods can be used to decorate modeled clay articles?
.....
2. The technique of Picture making which involve cutting and pasting different pictures together to make a pictorial composition is called drawing
3. Drawing objects when looking at them is referred to as
4. The smearing of colour onto a surface is called
5. What material can we use to create different tones in drawing?
 - a.
 - b.
 - c.
 - d.
6. Use a pencil to colour the following



7. The change of tone from either dark to light or from light to dark is called(toning, gradation, smudging)
8. Name four examples of dry media that can be used to create a value gradation strip
 - a.
 - b.
 - c.
 - d.
9. Name three materials which are used to shade using smudge technique
 - a.
 - b.
 - c.
10. The areas that appear dark are those parts hidden from
11. Draw and colour or shade the following from a memory

A jug with half full of water	A goat eating grass

12. Which colour is used to show the following

- a. plants
- b. Night
- c. Blood
- d. Water
- e. Sun

13. Create a tonal variation strip in the boxes below by shading using a pencil

14. Use smudging technique to show dark and light area in the still life composition shown below



15. Drawing objects when looking at them is called

(drawing from memory, drawing from observation, drawing from imagination)


16. Which one of the materials below is not needed when drawing a still life composition?

(pencil, paint brush, drawing book, rubber)

17. Write any 4 materials used for crayon etching

- a.
- b.

- c.
 - d.
18. The best colour of the ink/ paint to use in crayon etching should be(white, black, red)
19. Why is soap used when applying the paint over the crayon rubbings?.....
20. Write two tools that you can use for scratching the paint during crayon etching
- a.
 - b.
21. Make a good pictorial composition of your choice in the space provided below using crayon etching technique.



22. The picture making technique that involves cutting and pasting different pictures together to make one pictorial composition is known as
23. Write four materials required when creating a pictorial composition
- a.
 - b.
 - c.
 - d.
24. Write the use of the following items when creating a montage pictorial composition

	Item	Use in montage work
a		
b		

25. Activity

Collect old magazines, books, newspapers and calendars. Cut out pictures of the different foods you like and create a montage composition in a manila piece of paper.

26. What is painting?

Name there tripes of surfaces on which painting can be done

a.

b.

c.

27. is a long and narrow piece of paper (brush, strip, cover)

28. The lightness or darkness of a colour on an object is called Tonal(level, value, amount)

29. When you add black to another colour, the colour becomes(light, darker, brighter)

30. Adding white to another colour makes that colour to become

TISMA 003 ENDTERM 1 EXAM

GRADE 5-2023

HOME SCIENCE & PHYSICAL EDUCATION

HOME SCIENCE

1. List **three** physical changes that take place in both boys and girls during pre-teen stage.
 - a. _____
 - b. _____
2. State **three** healthy eating habits practiced by pre-teens.
 - a. _____
 - b. _____
3. Write the importance of dressing well by pre-teens.
 - a. _____
 - b. _____
4. State **three** types of media used in advertisement.
 - a. _____
 - b. _____
5. Name **two** diseases that can be caused by lack of exercise.
 - a. _____
 - b. _____
6. Write **two** causes of communicable diseases.
 - a. _____
 - b. _____
7. Write **two** reasons why we cook food.
 - a. _____
 - b. _____
8. Factors to consider when buying a button for a garment.
 - a. _____
 - b. _____
9. To break the mucus in a handkerchief when washing we soak it in _____ water.
10. The process of washing, ironing and storing clothes is called _____ work.
11. Write health measures that prevent common communicable diseases.
 - a. _____
 - b. _____

PHYSICAL EDUCATION

1. Rounders game is played between how many teams? _____
2. Name **four** safety measures to observe when throwing, catching and stamping when playing rounders.
 - a. _____
 - b. _____
 - c. _____
 - d. _____
3. State **two** types of throwing skills in rounders.
 - a. _____
 - b. _____
4. Write **three** importances of sliding in soft ball.
 - a. _____
 - b. _____
 - c. _____
5. Name **four** soft ball equipment.
 - a. _____
 - b. _____
 - c. _____
 - d. _____
6. Draw **the** following. Softball bat



TISMA 003 ENDTERM 1 EXAM

GRADE 5-2023

KISWAHILI

MASWALI

SEHEMU A: KUSIKILIZA NA KUZUNGUMZA

Mwalimu amuulize mwanafunzi maswali yafuatavo.

1. Wewe na wenzako mna zamu yakulisha mifugo wa nyumbani?
(Mwanafunzi ajibu)
2. Taja wanyama wawili wa nyumbani mtakaolisha.
(Mwanafunzi ajibu)
3. Taja viakula viwili ambavyo hawa mifugo watakula.
(Mwanafunzi ajibu)
4. Toa maelezo mafupi kuhusu jiinsi mtakavyo watunza hawa mifugo kado na kuwapa chakula.
(Mwanafunzi ajibu)
5. Eleza umuhimu wa kuwafuga wanyama wa nyumbani.
(Mwanafunzi ajibu)
6. Taja mahali ambapo wanyama hawa hulala.
(Mwanafunzi ajibu)

Musa anafuga wanyama shambani mwake. Wanyama hawa ni ng'ombe, kondoo, mbuzi na samaki. Musa pia hufuga ndege. Kuna kuku, bata, bata mzinga na kasuku. Ng ' ombe wa Musa ni wa maziwa. Kuna ng'ombe watano ambao hutoa maziwa. Kila Ijumaa Juma huvua samaki watatu. Musa humpa mkewe samaki hawa. Mkewe anaitwa Mario hutengenezea familia yake mchuzi wa samaki. Mchuzi huo huwa mtamu sana.

Kuku wa Musa si wengi. Wanapotaga mayai yeye huchukua machache. Kisha anampa mkewe awakipie watoto.

Maswali

1. Taja wanyama wawili wanaofugwa na musa. _____
2. Musa ono ng'ombe wangapi? _____
3. Musa huvua samaki siku gani? _____
4. Mario ni nani katika hadithi? _____
5. Musa hufuga na _____

SEHEMU 2: KUSOMA KWA SAUTI

Mwanafunzi asome kifun hiki kwa sauti. _

Compiled and Distributed by Kenya Educators Consultancy, P.O.BOX 15400-00500, Nairobi.

Tel 0724333200 E-mail kenyaeducators@gmail.com. ORDER COMPLETE NOTES & SIMILAR RESOURCES AT

www.kenyaeducators.co.ke or Contact 0724333200/0768321553/0795491185

Kasuku wangu anaitwa Pendo. Nilipewa Pendo kama zawadi na mwalimu wangu baada ya kuupita mtihani. Mwalimu wangu alinifunza jinsi ya kumtunza Pendo ili awe mwenye afya na furaha. Koko yangu alimjengea Pendo tundu lenye nafasi ya kutosha ili Pendo aweze kucheza akiwa humo ndani. Mara kwa mara mimi humtoa Pendo tunduni na kucheza naye. Pendo hupenda sana kula majani mabichi, viazi vitamu, karoti na matunda. Pendo hufurahi sana kila ninapomwosha. Yeye hurukaruku kwa furaha huku akicheza na maji. Baada ya kumwosha Pendo mimi huvisafisha vyombo anavyotumia kuoga kwa maji safe kisha kuvianika juani. Daktari wa mifugo huja kumchunguza na kumtibu Pendo kila anapougua. Nampenda sana Pendo wangu.

SEHEMU 3: UFAMMU

Soma hadithi hii kisha ujibu maswali.

Kadoti alikuwa anasafiri pamoj a na familia yake. Walikuwa wanatembea mbuga ya wanyama ya Nakuru. Walikuwa wamebeba chakula na matunda. Kadoti alikuwa ameketi katika kiti cha nyuma ya gari lao. Mara alipohisi njaa, alichukua nyama ya kuku na kuila. Mifupa alitupa nje kupitia kwenye dirisha la gari. Alikuwa anateremsha kioo kisha anatupa uchafu nje. Mamake alimwonya dhidi ya kufanya hivyo. Alimwambia kuwa uchafuzi wa mazingira haukubaliwi na sheria za nchi. Walipokuwa wanapita mji wa Nakuru, Kadoti alitoa ndizi mbili. Akatoa maganda akala, kisha akatupa hayo maganda nje. Baada ya mita chache gari lao lilisimamishwa na askari wa baraza la mji. Mamake Kadoti alistakiwa kwa kuruhusu mtoto kutupa taka katika barabara za mji. Alijitetea lakini askari hakumsikiliza. Alitozwa faini. Hapo ndipo Kadoti alijifunza kuhusu umuhimu wa kutunza mazingira.

Maswali.

1. Kadoti na familia yake walitembea wapi?
2. Mama Kadoti alimwonya dhidi ya kufanya nini?
3. Mamake Kadoti alistakiwa kwa kosa gani?
4. Kadoti na familia yake walibeba nini?
5. Kisa hiki kinatufunza nini?

SARUFI

Andika kinyume cha neno lililopigwa mstari.

1. Mtoto alifunga mlango.
2. Mzee alipanda mlima.
3. Mama alianika nguo.
4. Mwashali alijenga nyumba

Kamilisha sentensi.

5. Tunatumia kulima. (jembe, shoka)
6. _____ hutumiwa kukata muwa. (shoka, panga)

Tumia -ake.

- 7. Kichwa
- 8. Kalamu

Andika kwa maneno.

- 9. 56
- 10. 71

Andika wingi wa sentensi hizi.

- 11. Kijiko kilioshwa na kaka.
- 12. Chakula kilikuwa juu ya meza.

Tegua vitendawili.

- 13. Akitolewa nje ya maji hufa.
- 14. Babu asemaye
- 15. Mwaka huwa na miezi

SEHEMU 4: KUANDIKA
KUANDIKA BARUA YA KIRAFIKI

Mwaandikie rafiki yako barua ukimweleza jinsi unavyoendelea masomoni katika nafasi uliyopewa.

.....

.....

.....

.....

.....

.....

.....

.....

.....

.....

.....

TISMA 003 ENDTERM 1 EXAM

GRADE 5-2023

ENGLISH

TASK 1

1. **Write the words the teacher will read aloud**

- a. _____
- b. _____
- c. _____
- d. _____
- e. _____

2. **Answer the following questions in your own words.**

- a. What do you do every year on the day you were born?

- b. Name one family celebration?

- c. When is christmas celebrated?

- d. Did you receive any gifts on Christmas day?

- e. What is a wedding celebration?

TASK 2

1. **Read the following story aloud.** (10 marks)

The villagers had followed the witchdoctor' s advice. Most of them avoided the baby and his parents. The family was left out of the daily activities in the village. The women frequently plaited each other' s hair. But very few of them would touch Mrs Banda' s hair. The men often played bao in the evening, but whenever Mr Banda joined them, the game ended within a few mlnutes.

2. **Use the words in the box to complete the following.**

soil	tractor	works	tired	plough
------	---------	-------	-------	--------

3.

Odi is a farmer. He _____ on his farm from morning till evening. He is always very _____ after a day' s work. When it is almost time for planting, Odi hires a _____ to prepare his field. It pulls a _____ that cuts and turns the _____.

Compiled and Distributed by Kenya Educators Consultancy, P.O.BOX 15400-00500, Nairobi.

Tel 0724333200 E-mail kenyaeducators@gmail.com. ORDER COMPLETE NOTES & SIMILAR RESOURCES AT

www.kenyaeducators.co.ke or Contact 0724333200/0768321553/0795491185

TASK 3

1. **Use the words: because of , and , but to complete the sentences below.**
 - a. My sister stays strong _____ she is sick.
 - b. His uncle fell sick _____ being rained on.
 - c. The goalkeeper is limping _____ he appears okay.
 - d. He was punished _____ coming late.
 - e. It rained heavily _____ I was not late for school.
2. **Use the words below to construct simple sentences.**
 - a. home

 - b. destroy

 - c. strong

 - d. Christmas

 - e. Birthday

TASK 4

Read the passage below to answer the following questions.

Once upon a time, all birds and other animals lived in the same community. They were very different, but they usually worked together happily. They all decided to dig a well because they wanted to get clean water. The water available at that time was from a dirty muddy pool.

Elephant, Hare, Rhino, Giraffe and Rat went to dig on Mondays, Wednesday and Fridays. On the first Monday they told Bat, ‘ Come and dig the well with us.’

Bat was lazy and selfish. She did not want to join in the work her neighbours were doing. “ I won’ t come, Bat said. ‘ I am not like you. Can’ t you see you walk on four legs while I have wings that I use to fly?’ She laughed as she flew away. The same thing happened on Wednesday and Friday.

Cock, Ostrich, Hawk, Crow and Dove dug on Tuesdays, Thursdays and Saturdays. On the first Tuesday they called Bat. ‘ It’ s now the turn for all birds to dig the well. Come, let’ s go and do it.’

‘ Get lost!’ said Bat proudly. ‘ I am not like you. I give birth to real bats, unlike you who only lay eggs. Leave me alone.’

1. Birds and other animals were leaving in the same _____.
2. Why did they decide to dig a well? _____.

Compiled and Distributed by Kenya Educators Consultancy, P.O.BOX 15400-00500, Nairobi.

Tel 0724333200 E-mail kenyaeducators@gmail.com. ORDER COMPLETE NOTES & SIMILAR RESOURCES AT

www.kenyaeducators.co.ke or Contact 0724333200/0768321553/0795491185

3. How many animals went to work on Mondays? _____.
4. How many days in a week were the animals not digging?
_____.
5. Why did Bat not want to dig?
_____.
6. How many times was Bat asked to help in digging the well?
_____.
7. How many animals are mentioned in the story? _____.
8. Why is Bat not like other
birds? _____.
9. Bat was lazy and _____.
10. Do you think Bat was allowed to drink the water?
_____.


TISMA 003 ENDTERM 1 EXAM

GRADE 5-2023

MATHEMATICS

1. Write the place value of 9 in the number 903456. _____
2. Write in figures. Eight hundred and eighty thousand eight hundred and eight. _____
3. The number of pupils in four schools was as follows. Arrange the numbers from the largest to the smallest. 3033, 3003, 3303, 3330. _____
4. Write $13/5$ as a mixed fraction. _____
5. 48 is a multiple of 8. Write the next two multiples of 8. _____
6. Round off 809763 to the nearest thousand. _____
7. A class has 42 pupils. Each pupil received sh 425 for buying stationery during the term. How much money did the class receive altogether?


8. Identify the angle drawn below.



9. Circle all the numbers divisible by 2, 5 and 10.
(725, 130, 924, 880, 470, 433) _____
10. Find the HCF of 24 and 36. _____

-
11. A farmer sold 3550 eggs in the month of June, 6252 in July and 2042 in August. How many eggs altogether were sold during the three months? _____

12. Calculate area by counting the square.



13. Work out:

$$\begin{array}{r} 834527 \\ - 763756 \\ \hline \end{array}$$

14. Sheila was depositing sh 4000 everytime she visited the bank. She has sh 16000 in the bank. Write the total amount in the book after every deposit fo five visits.

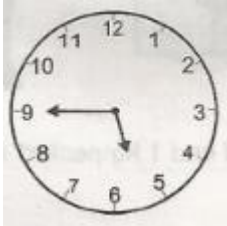
16000, _____, _____, _____, _____, _____

15. Work out;

$$\frac{8}{10} - \frac{5}{10} =$$

16. Work out; $12 - 8 \div 4 =$

17. What is the time on the clockface? _____



18. How many $\frac{1}{4}$ kg are in $5\frac{1}{4}$ kg of sugar? _____

19. Find the LCM of 10 and 15. _____

20. Work out;

$$\begin{array}{r} \text{sh} \quad \text{cts} \\ 8 \quad 56 \\ \times \quad 5 \\ \hline \end{array}$$

21. Convert $5\frac{1}{2}$ hours into minutes. _____

22. Convert 0.33 into a fraction. _____

23. What is the quotient of 72 and 9 _____

24. A chair costs sh 820. What is the cost of 5 such chairs? _____

25. Allan has $3n$ apples and Mary has $4f$ apples. What is the total number of apples they have altogether? _____

26. A piece of wood 31m 38 cm long was cut into 6 equal pieces. How long was each piece?

27. Write the next number in the pattern below:


5, 7, 11, 17, 25, _____

TISMA 003 ENDTERM 1 EXAM

GRADE 5-2023

SCIENCE AND TECHNOLOGY & AGRICULTURE

1. Grade five pupils had put water in different containers as shown below.



They concluded that liquids do not have a _____

2. List **two** poor conductors of heat.
- _____
 - _____
3. Materials which do not allow any light to pass through them are called _____ materials.
4. Write three diseases that affect the breathing system.
- _____
 - _____
 - _____
5. List **two** green non-flowering plants.
- _____
 - _____
6. Importance of flowering plants.
- _____
 - _____
7. Name **four** water borne diseases.
- _____
 - _____
 - _____
 - _____
8. Write **two** laying mammals.
- _____
 - _____
9. Animals with varying body temperature are called _____
10. Write **three** signs and symptoms of cholera.
- _____
 - _____
 - _____
11. Muscles that hold the head up and move it in all directions are called _____

12. The 3Rs means:

- a. _____
- b. _____
- c. _____

13. Name **three** internal body parasites.

- a. _____
- b. _____
- c. _____

AGRICULTURE

1. A _____ is a place where mature plants grow and are taken care

2. Write **two** reasons for using tools properly.

- a. _____
- b. _____

3. List three materials which can be re-used for gardening in places with little space.

- a. _____
- b. _____

4. Write down **three** importances of compost manure in the farm.

- a. _____
- b. _____
- c. _____


5. List **three** examples of climbing fruits.

- a. _____
- b. _____

6. Why is a nursery bed raised above the ground?

7. The process of collecting the deposited top fertile soil from deposition sites is called

8. Identify the type of soil erosion below



9. List **two** organic wastes used in making compost manure.

- a. _____
- b. _____

10. Write **two** farming practices that help to conserve water.

- a. _____
- b. _____

11. Write the small animal controlled using the repellent crop below. Onions

12. Grade five pupils grouped the following crops in the table below.

Compiled and Distributed by Kenya Educators Consultancy, P.O.BOX 15400-00500, Nairobi.

Tel 0724333200 E-mail kenyaeducators@gmail.com. ORDER COMPLETE NOTES & SIMILAR RESOURCES AT

www.kenyaeducators.co.ke or Contact 0724333200/0768321553/0795491185

- maize
- rice
- cowpeas
- sukuma wiki
- beans
- pumpkin

Cereals	Vegetables

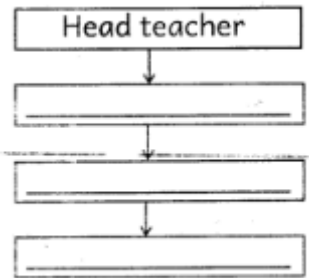
TISMA 003 ENDTERM 1 EXAM

GRADE 5-2023

SOCIAL STUDIES & CRE

SOCIAL STUDIES

1. _____ is the people's way of life. (1mk)
2. **Complete the hierarchy of school administration below.** (3mks)



3. **Write the origin of the following language groups** (3mks)


Language group	Origin
----------------	--------

- | | |
|-------------|-------|
| a. Nilotes | _____ |
| b. Cushites | _____ |
| c. Bantu | _____ |
4. What do you call the growing of crops and rearing of animals
_____ (1mk)
 5. List three resources found in Kenya. (3mks)
 - a. _____
 - b. _____
 - c. _____
 6. Define the following terms (2mks)
 - a. Densely populated areas

 - b. Sparsely populated areas

 7. _____ is the weather condition of a place that is recorded for a long period of time. (1mk)
 8. Name the following physical features. (3mks)

a.



b.



c.



(Total 30 marks)

9. Draw a compass and indicate eight points (8mks)



10. Name the neighbours of Kenya to the (4mks)

- a. South _____
- b. North _____
- c. East _____
- d. West _____

11. Study the following pictures and write man-made or natural environment (4mks)

a.



b.



c.



d.



12. My school is in _____ county. (1mk)

CHRISTIAN RELIGIOUS EDUCATION ASSESSMENT

1. Grade five learners at Jipe Moyo Academy were told to arrange the following events that took place during the baptism of Jesus in order from the first one to the last (4mks)
 - a. Holy spirit came down in form of a dove.
 - b. Heaven opened
 - c. A voice was heard from heaven saying "This is my dear with whom I am pleased"
 - d. Jesus was baptised

How do you think they wrote the events?

- a. _____
- b. _____
- c. _____
- d. _____

2. Jesus fed _____ people with seven loaves of bread and a few fish (1mk)
3. What was the name of Moses' father in-law? (1mk) _____
4. God used _____ to rescue baby Moses and keep him free from danger (1m)
5. Use the words in the box to complete the paragraph.(5mks)

diligently, courageous, honest, faithfully, Daniel

Compiled and Distributed by Kenya Educators Consultancy, P.O.BOX 15400-00500, Nairobi.

Tel 0724333200 E-mail kenyaeducators@gmail.com. ORDER COMPLETE NOTES & SIMILAR RESOURCES AT

www.kenyaeducators.co.ke or Contact 0724333200/0768321553/0795491185

6. _____ served king Belshazzar _____.
He was _____ since he did not fear to tell the king God's message.
Daniel was an _____ servant of God. We should work
_____ to serve God.
7. List three sons of Noah (3mks)
- a. _____
 - b. _____
 - c. _____
8. **Write true or false after the statements.** (5mks)
- a. Adam and Eve were placed in the garden of Gethsemane by God

 - b. God told Adam and Eve not to eat the fruits of the tree of knowledge

 - c. The snake tricked Adam _____
 - d. Adam and Eve disobeyed God.

(Total 20marks)