

TISMA 003 ENDTERM 1 EXAM

GRADE 2-2023

MATHEMATICS

NAME	
SCHOOL	
GRADE	

1. $98 =$ _____ tens _____ ones

2. $54 =$ _____ tens _____ ones

3. $6 =$ _____ tens _____ ones

4. $356 =$ _____ hundreds _____ tens
_____ ones

Write the numbers in figures

5. Two hundred and fifty six

6. Three hundred and thirty three

7. Eighty six _____


Fill the missing numbers

8. $0, 5, 10, 15,$ _____

9. $2, 4, 6,$ _____, $10, 12$

10. $3, 6, 9, 12, 15,$ _____

11. Shade $\frac{1}{2}$



12. A quarter is written as _____

13. $4 + 4 + 3 =$ _____

14. $26 + 13 =$ _____

15. 50

$+ 30$

16. 40
+20

17. Tens Ones
 7 4
 - 2

18. Tens Ones
 6 9
 - 4 4

19. Kamau bought 17 books and 10 pencils. How many items did he buy altogether? _____

20. Add 7 to 8 =

21. Subtract 25 from 50 = _____

22.22. _____ + 7 = 12

23. 10 + _____ = 19

24. 2+2+2+2= _____ x _____ = _____

25. 3+3+3= _____ x _____ = _____

26. 

_____ x _____ = _____

27.



_____ x _____ = _____

28. Share 20 mangoes among 4 boys .Each will get _____

29. The month of March has _____ days.

30. 1 hundreds 4 tens 6 ones = _____

31. 0 hundreds 3 tens 2 ones = _____

32. How many legs do 4 cows have _____

33. Which number is big? 55 or 25

Arrange from the largest to the smallest

34. 38 , 53 ,89 ,98 23 ,65 ,16

35. 123 ,156 ,103 ,189 ,127

36. 2 weeks = _____ days

37. _____ is the 6th month of the year.

38. Put together 34 and 23 = _____

39. Draw a curved line

Write the place value of 2 in

40. 27 _____

41. 234 _____

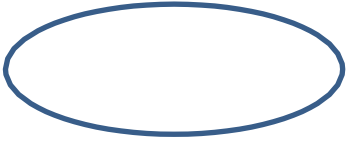
42. 72 _____

43. 521 _____

44. A football ball has _____ shape.

45. 15 - 10 = _____

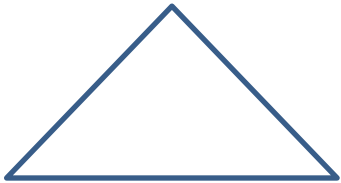
Name the shapes



46. _____



47. _____



48. _____

49. A year has _____ months.

50. _____ is the second day of the week.