



GRADE 2 ENDTERM 1 HOLIDAY ASSIGNMENT

Mathematics Activities - CBC Grade 2 Term 1 2023

QUESTIONS

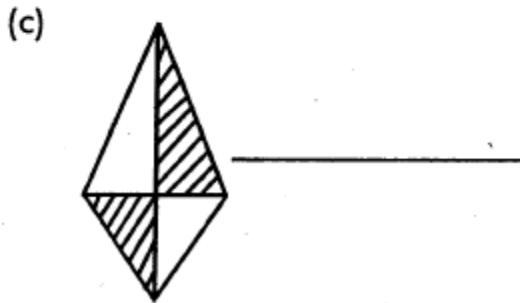
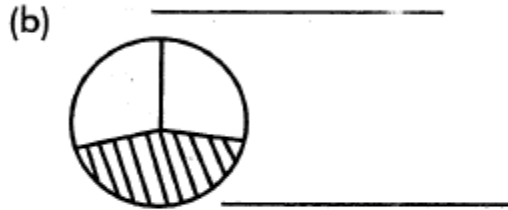
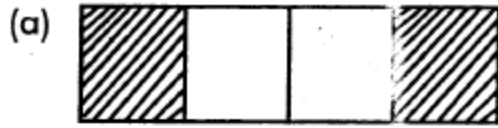
1. Work out



2. Write in words

- a. 200
- b. 43
- c. 104
- d. 16

3. What fraction is shaded?



4. Work out

a.
$$\begin{array}{r} 124 \\ +26 \\ \hline \end{array}$$

b.
$$\begin{array}{r} 624 \\ +123 \\ \hline \end{array}$$

c.
$$\begin{array}{r} 414 \\ +565 \\ \hline \end{array}$$

d.
$$\begin{array}{r} 506 \\ +603 \\ \hline \end{array}$$

5.

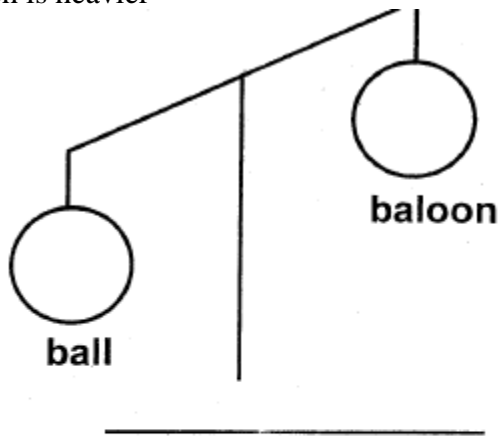
a. $730 = \underline{\quad}$ hundreds $\underline{\quad}$ tens $\underline{\quad}$ ones

b. $934 = \underline{\quad}$ hundreds $\underline{\quad}$ tens $\underline{\quad}$ ones


c. $20 = \underline{\quad}$ hundreds $\underline{\quad}$ tens $\underline{\quad}$ ones

6. Which is heavier

(a)



(b)



7. Work out

a.
$$\begin{array}{r} 97 \\ - 68 \\ \hline \end{array}$$

b.
$$\begin{array}{r} 178 \\ - 16 \\ \hline \end{array}$$

c.
$$\begin{array}{r} 965 \\ - 569 \\ \hline \end{array}$$

d.
$$\begin{array}{r} 888 \\ - 624 \\ \hline \end{array}$$

8. Arrange the numbers from smallest to the largest

a. 97, 111, 56, 105

b. 28, 18, 8, 38

c. 74, 24, 14, 99

9. Three sheep have _____ legs.

10. There are _____ days in a week.

11. Divide

a. $8 \div 2 =$

b. $9 \div 3 =$

c. $6 \div 1 =$

d. $4 \div 2 =$

12. Multiply

a. $3 \times 2 =$

b. $4 \times 4 =$

c. $2 \times 2 =$