


KENYA EDUCATORS CONSULTANCY EXAMS



JUNIOR SECONDARY SCHOOL GRADE 7 END TERM 1 EXAM- 2023 SOCIAL STUDIES

Time: 2 hours

Name..... School.....

INSTRUCTIONS TO CANDIDATES:

.Do not open the booklet until you are told to do so.

.Read each question carefully.

.Answer ALL the questions.

.Write your answers, in either blue or black ink, in the spaces provided in the booklet

FOR EXAMINERS ONLY

| Questions 1-29 Out of 100 marks | Candidate Score | Candidate performance level |
|---|------------------------|------------------------------------|
|---|------------------------|------------------------------------|

1. Define the term career. (2mks)

.....
.....
.....

2. What is entrepreneurship? (2mks)

.....
.....
.....

3. Explain the importance of social studies. (6mks)

.....
.....
.....
.....
.....
.....
.....
.....
.....

4. Identify one career option related to History, Geography and Citizenship respectively. (3mks)

.....
.....
.....

5. State 3 ways of addressing gender stereotypes in career and entrepreneurial opportunities related to social studies. (3mks)

.....
.....
.....
.....
.....
.....

6. List 2 biological differences between males and females. (2mks)

.....
.....
.....
.....
.....
.....
.....

7. Identify 3 ways on how social studies promotes social cohesion. (3mks)

.....
.....
.....

8. Identify 4 natural environment features in Africa. (4mks)

.....
.....
.....

9. Define the term map. (2mks)

.....
.....

10. State 4 elements of a map. (4mks)

.....
.....
.....

11. Name 5 continents in the world. (5mks)

.....
.....
.....
.....

12. Which continent is found in the; (4mks)

- i. North of Africa
- ii. South of west Africa
- iii. South of Africa
- iv. North east of Africa

13. List down 5 countries in Africa. (5mks)

.....
.....
.....

14. State 2 rivers found in Africa. (2mks)

.....
.....
.....

15. List 2 countries in Eastern Africa and their capital cities. (2mks)

.....
.....
.....

16. Name 3 types of maps. (3mks)

.....
.....
.....
.....

17. Define the term plan as used in map work. (2mks)

.....
.....
.....

18. State 2 theories that explain the origin of the earth and the solar system. (2mks)

.....
.....
.....

19. What is the measure of the circumference of the earth? (1mk)

.....
.....

20. Who was the first prime minister of Kenya. (1mk)

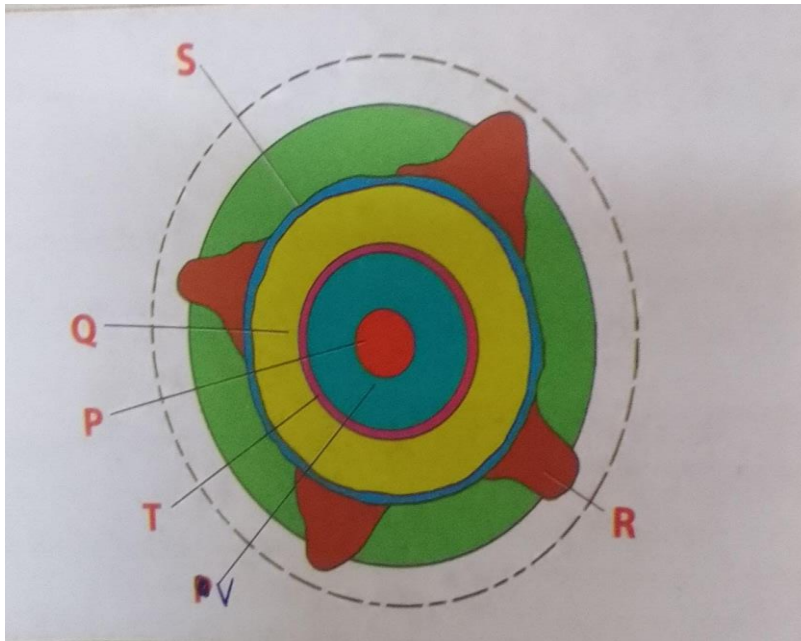
.....
.....

SECTION B: (Answer all the questions in this section)

21. List the 9 planets of the solar system. (9mks)

.....
.....
.....
.....
.....
.....
.....
.....
.....
.....

22. Use the diagram of the internal structure of the earth below to answer the questions.



Identify the layers labelled (5mks)

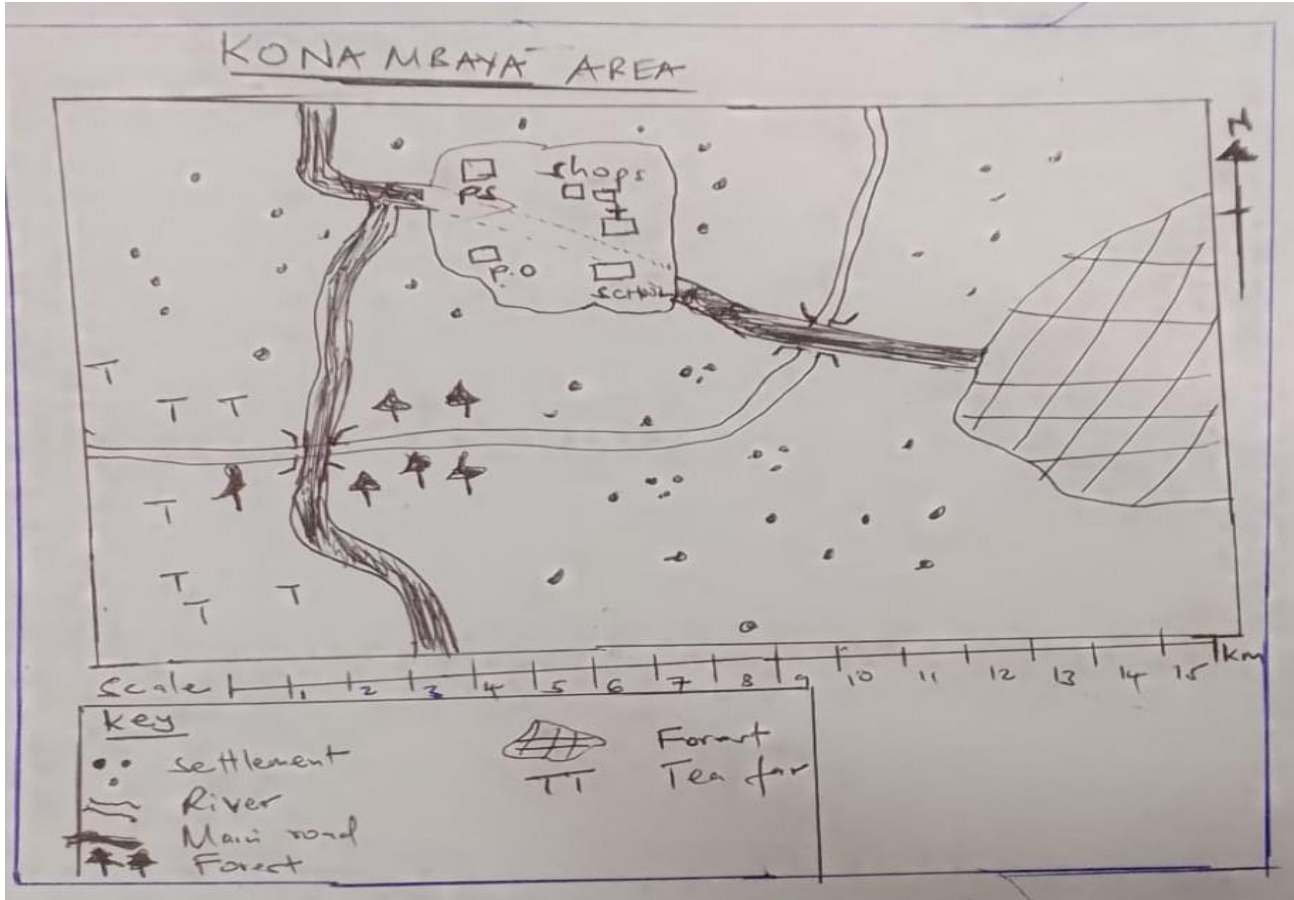
P.....
R.....
V.....
S.....
Q.....

23. If the time in Tunis, Tunisia at 10⁰E is 8:00 am, what will be the time in Alexandria, Egypt, 30⁰E? (4mks)

24. Define the term weather. (2mks)

.....
.....
.....

SECTION C:



25. Identify elements shown on the map. (4mks)

.....

.....

.....

.....

.....

26. What is the title of the map? (2mks)

.....

.....

27. What is the main economic activity of area covered by the map? Give reason for your answer. (4mks)

.....

.....

.....

28. What is the direction of the school from the forest. (2mks)

.....
.....

29. State 3 roles of Kona Mbaya centre. (3mks)

.....
.....
.....
.....

THIS IS THE LAST PRINTED PAGE.