

GRD 5 MID-TERM 2 EXAM

ALL SUBJECTS

SERIES 1

KENYA EDUCATORS CONSULTANCY EXAMS



FOR MARKING SCHEMES:

CONTACT:

MR MACHUKI - 0724333200

OR

ORDER ONLINE AT:

www.kenyaeducators.co.ke

KENYA EDUCATORS CONSULTANCY

KENYA EDUCATORS CONSULTANCY EXAMS

GRADE 5 MIDTERM 2 EXAM 2023

ART & CRAFT AND MUSIC

Learner's Name.....

Learner's Number

Gender: Boy Girl

County Name..... County Code.....

Sub-county Name.....Sub-county code.....

School Name.....School Code.....

TEACHER'S SCORING GUIDE

Learning Area	
Scores Achieved	
Performance Level	

Section A: Music (25marks)

Instructions:

This section contains 10 questions. Answer as per the instructions provided

1. Name two types of songs. (2marks)


2. A song sung during worship is called _____. (2marks)

3. When singing the national anthem every one should _____. (2marks)

4. One uses facial expressions while singing to express _____ and _____. (2marks)

5. What is a trio? _____ (2marks)

6. Draw one indigenous instrument. (2marks)




7. Make a wind instrument using locally available materials such as hollowed out wood, bamboo stem, straight or coiled animal horns and guards. (4marks)

8. Make a folk song costume using locally available materials such as old newspapers, sisal fibres, old blankets and clothes. (4marks)

9. What is structure in music? _____ (2marks)

10. Draw a semi-breve and write its French Rythm name. (3marks)





Section B: Art & Craft (25marks)

Instructions:

This section contains 10 questions. Answer as per the instructions provided

1. A three-dimension figure has _____, width and _____
(2marks)
2. What is a book jacket? _____ **(2marks)**
3. What is a still-life drawing? _____ **(2marks)**
4. Draw two tools used in carving. **(4marks)**




5. Name the technique used in decorating the indigenous pot below. **(2marks)**




6. Skins are used to make items such as _____
_____. **(2marks)**
7. State two materials that can be used for weaving. **(2marks)**

8. Name the weaving tool in the picture below. _____ (2marks)



9. Draw the National Flag and colour it appropriately. (4marks)



10. Write name of your school in 3D and colour it. (3marks)



KENYA EDUCATORS CONSULTANCY EXAMS
GRADE 5 MIDTERM 2 EXAM 2023

ENGLISH

Learner's Name.....

Learner's Number

Gender: Boy Girl

County Name..... County Code.....

Sub-county Name.....Sub-county code.....

School Name.....School Code.....

TEACHER'S SCORING GUIDE

Learning Area	
Scores Achieved	
Performance Level	

Task 1: Listening and Speaking

Look at the picture below and respond to the questions.

Murua's father was sick. He was then taken to the hospital for treatment. On a Saturday, Murua and his younger siblings went to visit their father in the hospital.



- How will Murua greet their sickly father?
- What is the name of the room that Murua's father was put in?
- Name three items found in the room where the father is?
- Explain your experience when dealing with a patient?
- How can one avoid getting sick due to poor hygiene?
- Who was taking care of the sick father in the hospital?

TASK 2: READING ALOUD

Read the following story aloud as instructed by the teacher.

I turned 9 years old today! Mom picked me up from school and we went to the store. There were dolls, games and fun things to play with everywhere. Mom let me choose three new things to buy. When we got home, ten of my friends were there. I walked in and they jumped up and yelled, "Surprise!" Then we had the cake and ice cream. After that, we opened the presents that my friends had brought to me. That night, my grandmother arrived. She had driven for almost three hours just to come and see me. What a great day!

TASK 3: COMPREHENSION

Read the stories below and answer the questions that follow.

Bramwell's father is a doctor. His name is Dr. Goodman. Everyone in our community thinks that he is a great doctor. I think so, too. Whenever I feel unwell my mother calls Dr Goodman. When we get to his office, he checks my temperature and asks me what is wrong. He always gives me something that makes me feel much better. It is easy to see that Dr. Goodman really cares about his patients. He always calls later on in the day to make sure that am feeling much better.

Sometimes Bramwell and I talk to Dr. Goodman about his work. He tells us that he had to study for a long time to become a doctor. He says that he is glad that he did because he loves to make people feel better. He has shown us some of his books and that we want to be doctors too when we get older.

Questions

- What does Dr Goodman do? _____
- After treating his patient what does the doctor do? _____
- What is the name of Goodman's son? _____
- Who took the narrator to the hospital? _____
- To become a doctor, one must _____
- Where do we find doctors? _____
- Which is the nearest hospital to your school? _____

h) When you are sick at school you should first tell your? _____

TASK 4: GRAMMAR

1. Complete the following sentences using the words in the box (enough, a lot of, a little, each) (4marks)

- a) Her mother gave her _____ fare.
- b) _____ Kenyans were affected by the pandemic.
- c) _____ energy is needed while riding a bicycle.
- d) The children were _____ given a pencil by the principal.

2. Use 'will' or 'shall' to complete the sentences. (2marks)

- a) Wabuke _____ contest for Mwambia ward seat.
- b) I _____ be the first student to arrive on Monday.
- c) They _____ go to church tomorrow.
- d) We _____ practise for the football match

3. Complete the following sayings. (3marks)

- a) Better late _____
- b) As fast as _____
- c) Once bitten _____

4. Circle determiners that show. (4marks)
(That, this, those, these)

- a) Things are near _____
- b) Things are far _____

5. Make sentences using the following collective nouns. (3marks)
(flock class crowd)

6. Write false or true (3marks)

- It's a must to walk while raining? _____
- You should respect elderly people? _____
- Every one must wear masks? _____

7. Circle pronouns from the word search below. (5marks)

H	O	U	S	E
I	H	M	H	H
M	I	N	E	O

KENYA EDUCATORS CONSULTANCY EXAMS
GRADE 5 MIDTERM 2 EXAM 2023

KISWAHILI

Learner's Name.....

Learner's Number

Gender: Boy Girl

County Name..... County Code.....

Sub-county Name.....Sub-county code.....

School Name.....School Code.....

TEACHER'S SCORING GUIDE

Learning Area	
Scores Achieved	
Performance Level	

SEHEMU 1: Mazungumzo ya ana kwa ana (Alama 5)

Ni asubuhi na mapema unaelekea shuleni, kisha unamkuta mzee mgongwe barabarani akididema.

1. Ni kitu kipi utakachokifanya unapokutana na mzee huyu?
2. Eleza salamu utakazomuamkia mzee?
3. Mzee atajibu vupi?
4. Utamsaidiaje mzee ili afike alipokuwa akienda?
5. Taja watu katika jamii wanaohitaji msaada wetu?

SEHEMU 2: Ufahamu wa Kusikiliza (Alama 4)

Msikilize mwalimu akisoma kifungu kifuatacho kisha ujibu maswali yanayofuata.

Siku moja Mwanasiti alipokuwa akichanja kuni alijikata kisigino chake na shoka. Damu ilianza kububujika kwa kasi. Mamake alichukua gari lao na kumpeleka hospitalini. Alipofika hospitalini alibebwa na kupelekwa kwa daktari. Daktari alimdunga sindano ya kuzima kutoka kwa damu, kisha akashona kile kidonda na kutia bendeji. Mwanasiti alipomaliziwa alionywa na daktari kuwa awe makini anapotumia shoka au vitu vyenye makali.

1. Unadhani mwanasiti alipofika hospitalini alibebwa kwa _____?
2. Jina jingine la daktari ni _____.
3. Taja vifaa vingine viwili ambavyo daktari alitumia kumtibu Mwanasiti?
4. Ni onyo lipi alilopewa Mwanasiti?

SEHEMU 3: Kusoma kwa sauti (Alama 15)

Soma kifungu kifuatacho kwa sauti.

Sikukuu ya Madaraka nchini Kenya huwa tarehe moja, Juni. Siku hii ni ya muhimu sana katika nchi yetu. Wananchi hujumuika katika maeneo mbalimbali kusherehekea ukombozi wetu kutoka kwa wakoloni. Nchi yetu ilikuwa imetawaliwa na wakoloni na mabeberu miaka hamsini na minane iliyopita.

Wengi wa wale waliopigania uhuru katika nchi yetu hu kumbukwa siku hii. Wengine hutajwa na kupewa zawadi na raisi wa jamhuri ya Kenya. Wengine hupewa makao. Wale waliopoteza maisha wakati wa ukombozi mabango hujengwa ili kuwakumbuka.

Sisi kama wananchi wazalendo ni lazima tutimize amani. Tu hakikishe kila mmoja wetu ana uhuru wake. Kila jimbo limepewa siku yake ya kuadhi, misha sherehe hizi eneo lao. Lengo kuu ni kuwaleta Wakenya pamoja.

SEHEMU 4: Ufahamu wa kusoma

Soma kifungu kifuatacho kisha ujibu maswali.

Chausiku ni msichana mrembo na mwenye umbo la kuvutia. Ni kitinda mimba katika familia ya Mzee Sonu na Bibi Washuka. Msichana huyu ana tabia ya kupendeza. Huwaheshimu wakubwa na wadogo. Akitumwa na mamake yeye huenda bila kupinga. Katika familia yake yeye ndiye mtoto ndiye amesoma hadi darasa la tano. Wengine wote walikwambia madarasa ya chini na wengine ya chekechea.

Wazazi wake wanampenda sana. Kila mara wanamhimiza awe mwenye hekima na kufanya bidii masomoni. Shuleni Chausiku anaboea katika masomo na michezo mbalimbali. Mwalimu wake wa darasa anajivunia kuwa na mwanafunzi ambaye hulika yake inatamaniwa na wengine shuleni.

Chausiku alichaguliwa kuwa kiranja wa darasa la tano. Kila Ijumaa hukutana na wenzake na kupanga mikakati ya kufaulu masomoni. Kwa kweli mtoto umleavyo ndivyo akuavyo. Chausiku anapendwa na wanafunzi si wa darasa lake tu bali shule nzima na hata walimu wanampenda.

Maswali

1. Taja sifa mbili za Chausiku? _____
2. Ndugu zake Chausiku walifika madarasa gani? _____
3. Ni kitu gani wazazi wake Chausiku walikuwa wakimuhiza kila mara? _____
4. Chausiku alichaguliwa kama? _____
5. Andika methali ingine yenye maana sawa na mtoto umleavyo ndivyo akuavyo? _____
6. Ipe hadithi mada inayoifaa? _____

SEHEMU 5: Sarufi (Alama 20)

Andika wingi wa nomino hizi.

1. upishi _____
2. uwele _____
3. uzi _____

Kamilisha methali hizi.

4. Mchumia juani _____
5. Mvurmilivu hula _____
6. Subira huvuta _____

Tunga sentensi ukitumia maneno haya.

7. Barabara _____
8. sketi _____
9. kofia _____

Andika katika umoja.

10. Vyandarua vimeraruka _____
11. Vyakula vimeiva _____
12. Vyungu vimepasuka _____

Akifisha sentensi zifuatazo.

13. mama alijipamba kwa herini mkufu na bangili
14. je mtafungua shule siku gani
15. nampenda paka wangu niliyemnua nchini burundi

Pigilia msitari nomino za dhania.


16. mwalimu, bidii, kimbia, safi, mlango, uhodari

Tazama picha kisha utaje nomino ya kundi hilo.

17.



18.




19.



SEHEMU 6: Kuandika(Alama 10)

Tazama picha hii kisha uandike insha fupi kuihusu.



A series of horizontal lines provided for writing a short response to the image above.

KENYA EDUCATORS CONSULTANCY EXAMS

GRADE 5 MIDTERM 2 EXAM 2023

**HOME SCIENCE & PHYSICAL
HEALTH EDUCATION**

Learner's Name.....

Learner's Number

Gender: Boy Girl

County Name..... County Code.....

Sub-county Name.....Sub-county code.....

School Name.....School Code.....

TEACHER'S SCORING GUIDE

Learning Area	
Scores Achieved	
Performance Level	

Section A: Home science (30marks)

Instructions

This section contains 11 questions. Answer as per the instructions provided

1. What is a permanent stitch? _____
2. Match the picture with the type of nutrients



Carbohydrates



Vitamins



Proteins

3. Leonida was asked by her parents to make a menu for their dinner. Which was the best menu?
A. Ugali, fish and cabbage
B. Meat, rice and potatoes
C. Chapati, chips and chicken
4. State three nutritional deficiency diseases.


5. The picture below shows a child suffering from a certain nutritional deficiency disease. Which one is it? _____



6. What is the cause of goitre? _____

7. Name two pulses we get from plants.

8. Draw two tools found in the kitchen.



9. State two improvised cleaning materials.

10. **Cleaning kitchen tools made of melamine**

Materials needed: melamine plate or cup, warm water, soap, soft cloth or sponge.
Follow the right steps to clean your tool of choice.

11. **Making a menu for dinner**

Make a balanced menu for dinner that can be used at home on a weekend.
Use food that have a variety of nutrients..

SECTION B: PHYSICAL AND HEALTH EDUCATION ACTIVITIES (20MRKS)

TASK 1

Answer all the questions by writing the correct answer in the spaces provided.

1. Write the first two hurdling stages or steps. (2 marks)

- a) _____
- b) _____

2. What is the use of a measuring tape in a standing discus? (1 marks)

3. Name three items we can use for juggling. (3 marks)

- a) _____
- b) _____
- c) _____

4. Write two duties or responsibilities of an infield players in the game of softball. (2 marks)

- a) _____
- b) _____

5. Name two passes used in soccer. (2 marks)

a) _____

b) _____

TASK 2 AND 3 PRACTICALS

6. TASK 2: Push pass in soccer (5 marks)

Instructions to the teacher:

a) prepare the field well.

b) The ground should be flat and free from dangerous objects.

c) Learners to wear sports kits.

d) Observe each learner and record his/her performance in the grid below.

Steps	Skill description	Scores	Learner's scores
Ball approach	Approaching the ball straight.	1	
Ready position	Shoulders lean slightly back and hips or waist forward, placing the non-kicking foot firmly on the ground about 15cm besides the ball. Toes pointing to the direction you want the ball to go.	1	
Kicking foot position	Kicking foot be behind the ball pointing outwards at an angle of 90°.	1	
Kicking leg swinging	Swinging the leg behind to strike the ball with the middle part of the inside foot. Making follow through by moving the kicking foot straight all through the ball.	2	

7. TASK 3 : Outside of the foot pass in soccer (5 marks)

Instructions to the teacher:

a) The field should be free from any dangerous objects.

b) Ensure learners perform warm activities.

c) Learners should have the correct sports attire.

d) Observe each learner and record his performance in the grid below.

Steps	Skill description	Scores	Learner's scores
Ball approach	Approaching the ball with the upper body slightly bent.	1	
Non-kicking leg position	Bringing the non-kicking leg to same level with the ball but slightly away from the kicking foot.	1	
Body shifting position	Shifting the body weight to the supporting leg and slightly bending it. Turning the toes of the kicking foot inwards facing the non-kicking leg.	1	
Kicking leg position, and ball kicking on target	Swinging the kicking leg, striking the ball with the middle of the outside foot, ensuring the pass is directed at the intended target or teammates, or to the receiving person.	2	

KENYA EDUCATORS CONSULTANCY EXAMS

GRADE 5 MIDTERM 2 EXAM 2023

MATHEMATICS

Learner's Name.....

Learner's Number

Gender: Boy Girl

County Name..... County Code.....

Sub-county Name.....Sub-county code.....

School Name.....School Code.....

TEACHER'S SCORING GUIDE

Learning Area	
Scores Achieved	
Performance Level	

1. What is the place value of digit 5 in the number 749519? (2 marks)

2. What is 60339 in words? (2 marks)

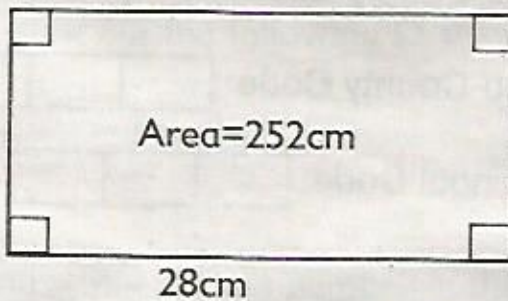
3. Work out (2 marks)

a)
$$\begin{array}{r} 749 \\ \times 69 \\ \hline \\ \hline \end{array}$$

b)
$$18 \overline{)936}$$

4. A cyclist covered 624km from his home to town. Convert the distance into metres. (2 marks)

5. Find the width of the figure below (2 marks)



6. Work out $23.652m + 72.12m$ (2 marks)

7. Fill in the table below. (4 marks)

	Length	Width	Height	Volume
a)	7cm	6cm	_____	210cm ³
b)	9cm	4cm	3cm	_____

8. Work out (4 marks)


a)
$$\begin{array}{r} \text{L} \quad \text{ml} \\ 25 \quad 605 \\ - 12 \quad 532 \\ \hline \\ \hline \end{array}$$

b)
$$\begin{array}{r} \text{L} \quad \text{ml} \\ 40 \quad 554 \\ \times \quad 5 \\ \hline \\ \hline \end{array}$$

9. A meeting took 960 seconds. How many minutes did the meeting take? (2 marks)

10. Mwikali bought 25000 grams of ripe bananas. How many kilograms did she buy? (2 marks)

11. How many cubes are in the stack below? (2 marks)



12. If I want to measure a distance of 39m using a 1m rode, how many strokes will I make? (2 marks)

13. What is the difference between 27 minutes 16 seconds and 21 minutes 43 seconds? (2 marks)

14. Work out. (2 marks)

a) minutes	seconds
37	57
+ 18	44
<hr/>	
<hr/>	

b) 9	<hr/>	58mins	39 seconds
------	-------	--------	------------

15. How many 100g sachets of downy can balance a 1 kg mass? (2 marks)

16. Arrange the numbers on the card from the largest to the smallest. (2 marks)

0.542

0.702

0.352

0.452

0.245

0.152

17. Jesse measured different items and recorded them down. Which of the following were units of masses by Jesse? 0.45, 1m, 51, 45g, 50kg, 30km (3 marks)

18. A square tile has a length of 30cm. What is the area of 3 such tiles? (2 marks)

19. Work out the following (3 marks)

a) $\frac{3}{4} - \frac{7}{12}$

b) $\frac{11}{12} - \frac{1}{3}$

c) $\frac{10}{12} - \frac{1}{4}$

20. Fill in the missing number in the boxes (4 marks)

a) $\frac{1}{2} = \frac{\square}{4} = \frac{3}{\square}$

b) $\frac{3}{\square} = \frac{\square}{16} = \frac{9}{12}$

KENYA EDUCATORS CONSULTANCY EXAMS

GRADE 5 MIDTERM 2 EXAM 2023

**SCIENCE & TECHNOLOGY AND
AGRICULTURE**

Learner's Name.....

Learner's Number

Gender: Boy Girl

County Name..... County Code.....

Sub-county Name.....Sub-county code.....

School Name.....School Code.....

TEACHER'S SCORING GUIDE

Learning Area	
Scores Achieved	
Performance Level	

SECTION A: SCIENCE AND TECHNOLOGY (35 MARKS)

1. Plants can be divided into flowering and _____ plants. (1 mark)
2. Write two benefits of flowering plants to human beings. (2 marks)

3. Name two examples of fungi. (2 marks)

4. State two economic importance of fungi. (2 marks)

5. Write TRUE or FALSE. (3 marks)

- a) Some mushrooms can be eaten. _____
b) Birds are cold-blooded animals. _____
c) Fungi adds nutrients to compost manure. _____

6. Complete the blank spaces in the table below. (3 marks)

Type of vertebrate	Example
Amphibians	_____
_____	Crocodile
_____	Spiny ant eater

7. Name one mammal that lives in water. (1 mark)

_____ is a flying mammal. (1 mark)

9. Write the meaning of the following words. (2 marks)

- a) Carnivores _____
b) Warm-blooded animals _____

10. Identify the type of vertebrate with the following characteristics. (1 mark)

- i) The body is covered with moist skin.
ii) They lay eggs which hatch into young ones.
iii) They breathe through gills.
iv) They are cold-blooded.

11. How can we take care of our ears? (1 mark)

12. State two examples of body muscles. (2 marks)

13. Identify the parts of the breathing system with the following functions. (3 marks)

- a) It is where gaseous exchange takes place. _____
b) It allows lungs to contract and expand during breathing. _____
c) It allows air to pass into the lungs. _____

14. State one way that can be used to reduce the spread of COVID – 19. (1 mark)

15. Name any two signs and symptoms of dysentery. (2 marks)

16. A patient can use _____ to manage asthma. (1 mark)

17. How can someone know that he or she has jiggers? (1 mark)

18. Write two examples of solid wastes found in your school. (2 marks)

19. Write the functions of the following parts of a computer. (2 marks)

a) Mouse _____

b) C.P.U. _____

20. Name two effects of heating on matter. (2 marks)

SECTION B: AGRICULTURE (35 MARKS)

1. What is the meaning of 'soil recovery'? (1 mark)

2. Name two areas where eroded soil may be deposited. (1 mark)

3. Why is it important to recover eroded soil? (1 mark)

4. Use YES or NO. (3 marks)

a) Climbing fruit plants have a strong stem. _____

b) Eroded soil has nutrients. _____

c) Fruits of climbing fruit plants are all harvested at once. _____

5. Learners from Kileleshwa Academy were advised to use organic materials only in their waste pit. What is the meaning of 'organic materials'? (1 mark) _____

6. What is the meaning of 'water conservation' on the farm? (1 mark)

7. Give two reasons why we conserve water on the farm. (2 marks)

8. Use the diagrams below to answer the following questions.



Picture A



Picture B

a) Identify what you can see in picture A and B. (2 marks)

Picture A _____

Picture B _____

b) Which of the above methods conserves water when used for irrigation? (1 mark)

9. Mzee Ojwang has planted many fruit climbing plants on his farm.

a) Write two benefits that Mzee Ojwang can get from climbing fruit plants.

(2 marks)

b) State two ways that Mzee Ojwang can use to know mature fruits before harvesting them. (1 mark)

10. Write two practices that can be carried out when taking care of climbing plants. (2 marks)

11. What is the colour of blackberries that are ready for harvesting? (1 mark)

12. A shade preserves water by reducing _____. (irrigation, evaporation) (1 mark)

13. How can the following animals be controlled from damaging crops? (3 marks)

a) A mole _____

b) Birds _____

c) Mongoose _____

14. Write two safety precautions to be considered when handling small wild animals. (2 marks)

15. Write the names of two domestic animals that are kept in your locality. (2 marks)

16. Fill in the following table correctly. (3 marks)

Domestic animal	Use
Horse	_____
_____	Honey
Cat	_____

17. State any cultural use of domestic animals. (1 mark)

18. Identify the domestic animal described below. (1 mark)

i) Can be used to provide meat.

ii) They are used for ploughing.

iii) They provide hides when slaughtered.

19. What is the meaning of indigenous food crops? (1 mark)

20. Name two examples of indigenous foods crops that you know. (2 marks)

KENYA EDUCATORS CONSULTANCY EXAMS
GRADE 5 MIDTERM 2 EXAM 2023
SOCIAL STUDIES AND RELIGIOUS
EDUCATION

Learner's Name.....

Learner's Number

Gender: Boy Girl

County Name..... County Code.....

Sub-county Name.....Sub-county code.....

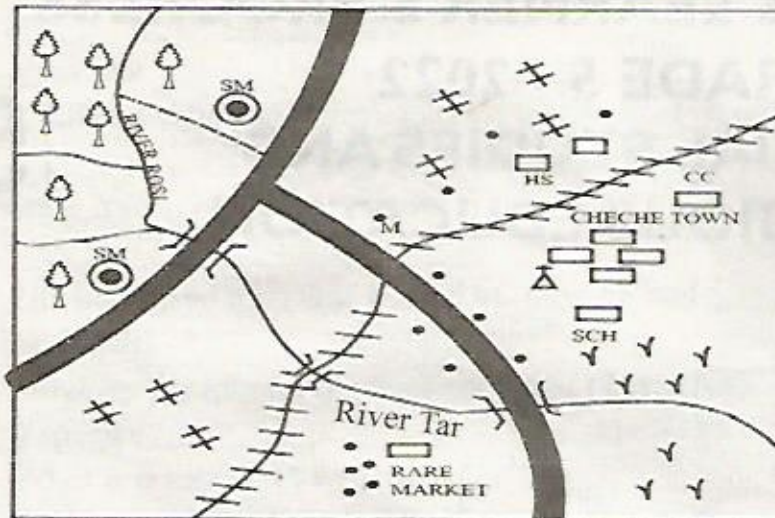
School Name.....School Code.....

TEACHER'S SCORING GUIDE

Learning Area	Social Studies & Religious Education
Scores Achieved	
Performance Level	

SECTION A: SOCIAL STUDIES

The map below shows CHEFE AREA. Use it to answer questions 1-7. (8 marks)



	Forest
	River
	Railway line
	Tarmac Road
	Buildings
	Mosque
	Houses
	Foot path
HS	Hospital
CC	Chiefs Camp
	Coffee
	Grass
SCH	School

- River Tar has _____ tributaries.
- People in CHEFE Area worship on _____.
- CHEFE Area is headed by a _____ (police, chief, governor)
- People of CHEFE Area transport their things mainly by _____.
- Name any two economic activities in the area shown on the map.
_____ and _____
- What is the direction of Rare Market from the mosque? _____
- Name any social amenity in CHEFE Area. _____
- Kenya lies to the _____ of Tanzania. (1 mark)
- The following is a description of a certain climate condition
 - temperatures are between 20°C and 25°C
 - Rainfall is 1100 mm - 2400 mm per year.
 - It is cool and wet throughout the year.
 - Which climatic region of Kenya is described above? (Cool and wet climatic region, tropical climatic region) (1mark)
 - Name two towns experiencing the above climatic conditions. (2 marks)
 - _____
 - _____
- List two ways in which vegetation is important. (2 marks)
 - _____
 - _____
- Name two factors influencing population distribution. (2 marks)
 - _____
 - _____
- Complete the table below. (4 marks)

Language group	Community that make up the language group
Nilotes	
	Agikuyu, Wadawida
Cushites	
Semite	


13. Give two reasons dairy farming is practiced in the highlands. (2 marks)

- i. _____
 ii. _____

14. In the puzzle below identify and circle the 4 modes of transport. (4 marks)

R	R	I	L	W	Y
O	A	T	U	V	Z
A	I	G	Y	X	L
D	L	O	P	R	S
L	W	A	T	E	R
W	A	I	U	P	T
A	Y	R	N	O	M
C	A	B	L	E	S

15. The diagram below shows the administration structure of school. (3 marks)



a. Name the administrative leader represented by letter Z. _____

b. State two roles of the administrative leader marked Z.

- i. _____
 ii. _____

16. Road transport is well developed in Kenya. It is also common and very convenience. State two causes of road accidents in Kenya. (2 marks)

- i. _____ ii. _____

17. List two methods of traditional fishing. (2 marks)

- i. _____ ii. _____

18. Executive is one of the arms of the government. Name any two members of the executive. (2 marks)

- a) _____ b) _____

19. Floriculture is the growing of flowers. Name any two types of flower grown in Kenya. (2 marks)

20. Name where the following minerals are mined in Kenya. (3 marks)

- i. diatomite _____ ii. Limestone _____ iii. Soda ash _____

21. What is tourism? (1 mark) _____

Use the map below to answer questions 22-24. (3 marks)



22. The large water body to the south east of this map is called _____.

23. The national park marked x is called _____.

24. The country neighbouring the country to the west is likely to be _____.

SECTION B: Christian Religious Education

1. State one instruction that John the Baptist gave to the crowd. (1 mark) _____
2. Jesus was baptised in which river? _____ (1 mark) (Nile, Jordan, Galilee)
3. A difficult situation that requires a lot of effort to overcome is called (1 mark) _____
(a challenge, a success, a task)
4. State a way of showing kindness to the needy. (1 mark)

5. The paralysed man was healed because he had _____. (1 mark) (faith, wisdom, honesty)
6. Re-write the following values correctly. (2 marks)
i) spectre _____ ii) eapec _____
7. What is a talent? (1 mark) _____
8. Write two roles you perform at home. (2 marks)

9. Write one gift of the Holy Spirit (1 mark) _____
10. Who was the first man to be created by God? (1 mark) _____
11. Who among the following is not a nuclear family member? (1 mark) _____
(Father, uncle, sister)
12. Name one king mentioned in the Bible. (1 mark)

13. Write one way of showing respect to elders. (1 mark) _____

SECTION B: ISLAMIC RELIGIOUS ACTIVITIES

Answer all the questions below.

1. Which Surah of the Holy Quran describes the episode of elephant? _____
2. The year the prophet was born was termed as _____.
3. Al-waahid means _____.
4. Which angel is in charge of the gates of Jannah? _____
5. Name two attributes or qualities of the prophets of Allah (S.W.T)
a) _____ b) _____
6. Which prophet had a miracle of building an ark? _____
7. Name nullifiers of saum.
a) _____ b) _____
8. We use _____ when taking wudhu.
9. The sunnah prayer performed before a faradh prayer is called _____.
10. The word taraweh means _____.
11. Name one example of social media platform. _____
12. Which is the first surah of the Holy Quran? _____
13. Angels were created from _____.