

GRD 7 MIDTERM 2 EXAM

ALL SUBJECTS

SERIES 2

JUNIOR SECONDARY SCHOOLS (JSS)



FOR MARKING SCHEMES:

CONTACT:

MR MACHUKI - 0724333200

OR


ORDER ONLINE AT:

www.kenyaeducators.co.ke

KENYA EDUCATORS CONSULTANCY

KENYA EDUCATORS CONSULTANCY EXAMS

GRADE 7 MID TERM 2 SET 2 EXAM



GRADE 7 2ND ASSESSMENT TERM 2 2023

AGRICULTURE



NAME: _____ CODE: _____ DATE: _____

INSTRUCTIONS TO CANDIDATES:

- .Do not open the booklet until you are told to do so.*
- .Read each question carefully.*
- .Answer ALL the questions.*
- .Write your answers, in either blue or black ink, in the spaces provided in the booklet*

GRADE 7 ASSESSMENT RUBRIC.

Strand/Sub strand	Questions	Total marks	Score	Performance Level
TOTAL				

PERFORMANCE LEVEL GUIDELINES

Strand 1

10 - 12 scores = level 4

7 - 9 scores = level 3

4-6 scores = level 2

0-3 score = level 1

Strand 2

6-7 scores = level 4

4-5 scores = level 3

2-3 scores = level 2

0-1 score = level 1

Strand 3

12-17 scores = level 4

8-11 scores = level 3

5-7 scores = level 2

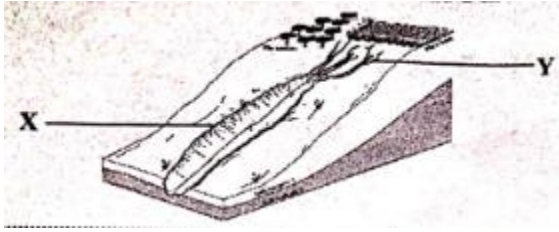
0-4 score = level 1

FOR EXAMINERS ONLY

Questions 1-13 Out of 100 marks	Candidate Score	Candidate performance level
	-----	-----

KENYA EDUCATORS CONSULTANCY

1. Name the types of soil erosion marked X and Y in the diagram below. (2mks)




X.....

Y.....

2. Identify two agents of soil erosion. (2mrks)
3. State two activities that increase the rate of soil erosion. (2mrks)
4. List two safety precautions that should be observed while carrying out an experiment demonstrating how soil erosion occurs. (2mks)
5. State two functions of the cut-off drains? (2mks)
6. Explain two importance of soil conservation. (2mks)

7. What is a seedbed? (2mks)

8. Name the types of seedbeds shown below. (2mks)



9. Name two types of crops that can be grown in a seedbed? (2mks)

10. What are deterrents? (1mks)

11. Identify three types of deterrents that can be used to keep off wild animals. (3mks)

12. List two safety precautions to be observed while fencing using dry thorny branches? (2mks)

13. Name two materials which are required when fencing using wire mesh. (2mks)
14. Name three animals that can be prevented by use of a safe trap? (3mks)
15. State two ways by which innovative lights are used to scare birds. (2mks)
16. Name three small wild animals that you have ever seen in your locality? (3mks)
17. List three importance of the small wild animals you have listed in question 16 above?
(3mks)

18. Anita, a grade 7 student keeps some poultry at home as shown below.



State three routine practices she most likely use? (2mks)

19. What is a creeping crop. (3mks)

20. The diagram below shows a creeping crop.




Name two examples of such crops (2mks)

21. State three soil pollutants. (3mks)

22. Discuss three farming practices that pollute soil? (3mks)

KENYA EDUCATORS CONSULTANCY EXAMS

GRADE 7 MID TERM 2 SET 2 EXAM



GRADE 7 2ND ASSESSMENT TERM 2 2023

BUSINESS STUDIES



NAME: _____ CODE: _____ DATE: _____

INSTRUCTIONS TO CANDIDATES:

- .Do not open the booklet until you are told to do so.*
- .Read each question carefully.*
- .Answer ALL the questions.*
- .Write your answers, in either blue or black ink, in the spaces provided in the booklet*

GRADE 7 ASSESSMENT RUBRIC.

Strand/Sub strand	Questions	Total marks	Score	Performance Level
TOTAL				

PERFORMANCE LEVEL GUIDELINES

Strand 1

10 - 12 scores = level 4

7 - 9 scores = level 3

4-6 scores = level 2

0-3 score = level 1

Strand 2

6-7 scores = level 4

4-5 scores = level 3

2-3 scores = level 2

0-1 score = level 1

Strand 3

12-17 scores = level 4

8-11 scores = level 3

5-7 scores = level 2

0-4 score = level 1

FOR EXAMINERS ONLY

Questions 1-19 Out of 100 marks	Candidate Score -----	Candidate performance level -----
--	---	---

KENYA EDUCATORS CONSULTANCY

Define the following terms. (2mks)

1. Business
2. Business studies

For questions 3 to 7, state the term given to each of the following component of business studies. (5mks)

3. Study of activities involved in the process of identifying a business opportunity and acquiring resources to start and run a business.
4. Ability to understand and effectively use various financial skills, including personal financial, management, budgeting and investing.
5. Study of trade and aids to trade
6. The study of how human beings strive to satisfy endless wants using the available scarce resources
7. The study of recording business activities which are used in decision making.

8. Explain four importance of business studies. (4mks)

9. From the list given below, tick all the career opportunities related to business studies. (4mks)

<i>Banker</i>	<input type="checkbox"/>	<i>doctor</i>	<input type="checkbox"/>	<i>engineer</i>	<input type="checkbox"/>
<i>economist</i>	<input type="checkbox"/>	<i>accountant</i>	<input type="checkbox"/>	<i>mechanic</i>	<input type="checkbox"/>
<i>carpentry</i>	<input type="checkbox"/>	<i>entrepreneur</i>	<input type="checkbox"/>		

10. Define the term "money". (1mk)

11. State and explain three uses of money in a day-to day life. (6mks)

12. Stella went to a Safaricom shop to withdraw some cash. State and explain three features in the Kenyan currency she should be keen to observe. (6mks)

13. State and explain the theme and symbol in each of the following Kenyan currency. (6mks)



Define the meaning of the following terms. (2mks)

14. Goals

15. Personal goals

16. Study the diagram below.

PERSONAL GOALS TEMPLATE	
NAME: Brian Onyango	Date: 24th February 2023
Goals	
1. To improve in academic performance	
2. To learn how to play guitar	
3. To loose weight from 70kg to 50kgs	
ACTION PLAN	
1. Waking up a 5:00 am to do my studies and utilizing any prep time during the day adequately	
2. Practice playing guitar 30 minutes everyday	
3. Exercising for one hour everyday	
TIME FRAME	
1. Improve academic performance in the end term assessment	
2. Learn how to play guitar by the end of the year 2023	
3. Loose weight each month 3kg and achieve goal weight by March 2023.	

What are Brian's goals? (3mks)

17. Highlight three importance of setting personal goals. (3mks)

18. State and explain two factors to consider when setting personal goals. (4mks)

19. Name any four ICT devices that one can use to set personal goals. (4mks)

KENYA EDUCATORS CONSULTANCY EXAMS

GRADE 7 MID TERM 2 SET 2 EXAM



GRADE 7 2ND ASSESSMENT TERM 2 2023

COMPUTER SCIENCE



NAME: _____ CODE: _____ DATE: _____

INSTRUCTIONS TO CANDIDATES:

- .Do not open the booklet until you are told to do so.*
- .Read each question carefully.*
- .Answer ALL the questions.*
- .Write your answers, in either blue or black ink, in the spaces provided in the booklet*

GRADE 7 ASSESSMENT RUBRIC.

Strand/Sub strand	Questions	Total marks	Score	Performance Level
TOTAL				

PERFORMANCE LEVEL GUIDELINES

Strand 1

10 - 12 scores = level 4

7 - 9 scores = level 3

4-6 scores = level 2

0-3 score = level 1

Strand 2

6-7 scores = level 4

4-5 scores = level 3

2-3 scores = level 2

0-1 score = level 1

Strand 3

12-17 scores = level 4

8-11 scores = level 3

5-7 scores = level 2

0-4 score = level 1

FOR EXAMINERS ONLY

Questions 1-15 Out of 100 marks	Candidate Score -----	Candidate performance level -----
--	---	---

KENYA EDUCATORS CONSULTANCY

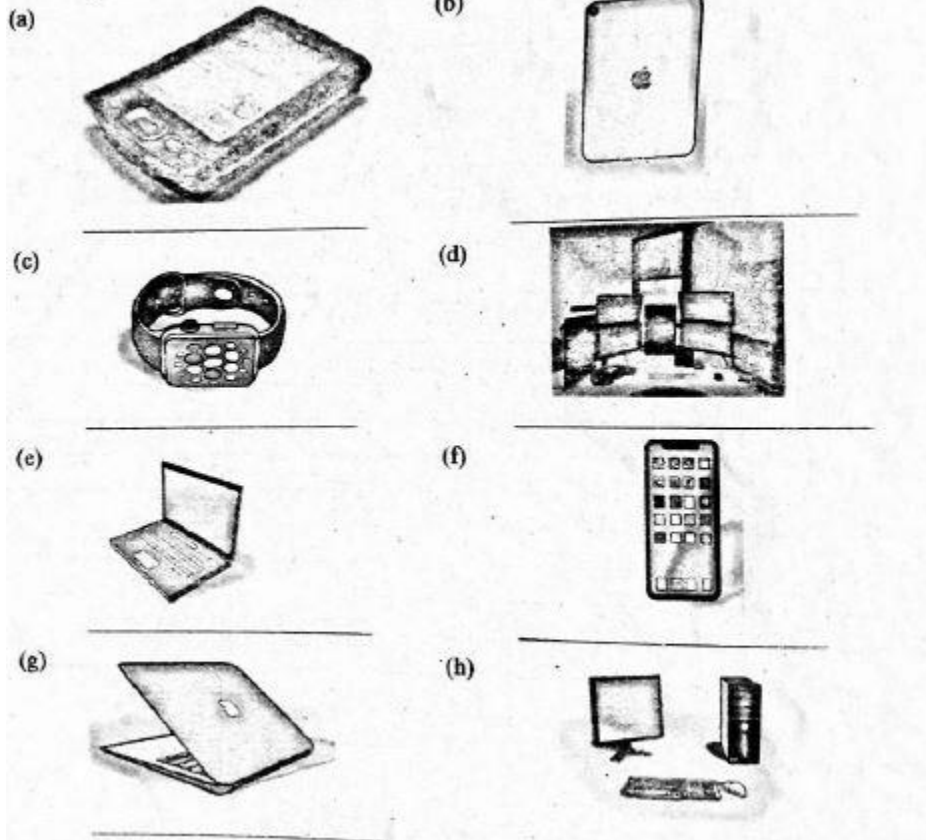
1. Patel was asked by his father to give the meaning of the term 'computer'. What meaning was he likely to give? (1mk)

.....
.....

2. Identify five places where computers are used. (5mks)

- a.
- b.
- c.
- d.

3. The diagrams below show different examples of computers. Name them. (8mks)



4. Timothy and Caroline were discussing the difference between data and information. Give the definition of data and information to show their differences. (2mks)


- a.
- b.

5. Grade 7 learners were asked to name characteristics of computers. List 6 characteristics of computers they were likely to give. (6 mks)

- a.
- b.
- c.
- d.
- e.

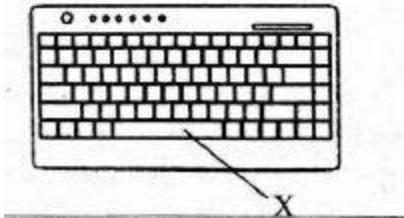
- f.
6. We can use computers to perform different activities in our daily life. State three uses of the computers. (3 mks)
- a.
- b.
- c.
7. There are advantages and disadvantages of using computers in data processing. Outline four disadvantages of using computers. (4 mks)
- a.
- b.
- c.
- d.
8. State four stages involved in data processing cycle in a computer. (4mks)
- a.
- b.
- c.
- d.
9. At home we can use computers for different purposes. Write five purposes of computers at home. (5mks)
- a.
- b.
- c.
- d.
10. Grade 7 learners visited a computer resource person to learn about evolution of computers. They were taught about evolution stages of computers. Name 4 devices at different evolution stages of computers. (4mks)
- a.
- b.
- c.
- d.
11. Grade 6 learners visited a computer laboratory. The computer technician asked the learners to mention safety precautions they should observe when using computers. State three precautions. (3 mks)
- a.
- b.
- c.
12. Grade 6 learners created an excel spreadsheet document. Which button would they use to insert, delete or format sheets, columns and rows? (1 mk)
- a.

13. Identify the button marked X on the computer monitor below.



14. What is the function of the desktop icons when creating a word document in a computer?
.....(1mk)

15. The diagram below shows a keyboard. Name the key marked X and state its use. (2mks)




Name.....

Use.....

KENYA EDUCATORS CONSULTANCY EXAMS

GRADE 7 MID TERM 2 SET 2 EXAM



GRADE 7 2ND ASSESSMENT TERM 2 2023

CRE



NAME: _____ CODE: _____ DATE: _____

INSTRUCTIONS TO CANDIDATES:

- .Do not open the booklet until you are told to do so.*
- .Read each question carefully.*
- .Answer ALL the questions.*
- .Write your answers, in either blue or black ink, in the spaces provided in the booklet*

GRADE 7 ASSESSMENT RUBRIC.

Strand/Sub strand	Questions	Total marks	Score	Performance Level
TOTAL				

PERFORMANCE LEVEL GUIDELINES

Strand 1

10 - 12 scores = level 4

7 - 9 scores = level 3

4-6 scores = level 2

0-3 score = level 1

Strand 2

6-7 scores = level 4

4-5 scores = level 3

2-3 scores = level 2

0-1 score = level 1

Strand 3

12-17 scores = level 4

8-11 scores = level 3

5-7 scores = level 2

0-4 score = level 1

FOR EXAMINERS ONLY

Questions 1-20 Out of 100 marks	Candidate Score -----	Candidate performance level -----
--	---	---

KENYA EDUCATORS CONSULTANCY

1. Identify the **three** persons in the Holy trinity. (3mks)
2. The Apostles Creed outlines the truths of the Christian faith. Write the first four lines of the Apostles Creed. (4mks)
3. Unity in church is very important. Identify three things that members can do to promote unity in their church? (3mks)
4. Many youths nowadays have engaged in use of drugs. Use of drugs is harmful to our bodies. Identify three reasons why young people are using drugs today? (3mks)

5. The bible is a holy book for Christians. Give **two** reasons why the bible is the inspired word of God? (4mks)
6. The first **four** commandments explain how we should relate with God. Write the first four commandments in order. (4mks)
7. When we have faith in God, we are able to conquer many challenges. Write the people who were able to accomplish the following. (3mks)
- a. Wrestled with an Angel of God.....
 - b. Killed a Philistine with a jawbone.....
 - c. Recovered the axe-head.....
8. God calls us to serve him through different ways. Jesus called the disciples to assist him in his mission. Who were the first **two** disciples called by Jesus? (2mks)

9. Jesus was tempted by the devil three times. Write the responses that he gave to the following temptations. (4mks)
- a. "I will give you all this power and all this wealth if you worship me.

 - b. "If you are God's son, order this stone to turn into bread" _____
10. What is the meaning of Christian Religious Education? (2mks).
11. List **three** importance of studying CRE. (3mks)
12. Grade seven learners of Hope Junior Secondary School were asked by their teacher to discuss the biblical accounts of creation. Identify **two** similarities between the two biblical accounts discussed. (2mks)
13. Identify three attributes of God from creation accounts. (3mks)

KENYA EDUCATORS CONSULTANCY EXAMS

GRADE 7 MID TERM 2 SET 2 EXAM



GRADE 7 2ND ASSESSMENT TERM 2 2023

ENGLISH



NAME: _____ CODE: _____ DATE: _____

INSTRUCTIONS TO CANDIDATES:

- .Do not open the booklet until you are told to do so.*
- .Read each question carefully.*
- .Answer ALL the questions.*
- .Write your answers, in either blue or black ink, in the spaces provided in the booklet*

GRADE 7 ASSESSMENT RUBRIC.

Strand/Sub strand	Questions	Total marks	Score	Performance Level
TOTAL				

PERFORMANCE LEVEL GUIDELINES

Strand 1

10 - 12 scores = level 4

7 - 9 scores = level 3

4-6 scores = level 2

0-3 score = level 1

Strand 2

6-7 scores = level 4

4-5 scores = level 3

2-3 scores = level 2

0-1 score = level 1

Strand 3

12-17 scores = level 4

8-11 scores = level 3

5-7 scores = level 2

0-4 score = level 1

FOR EXAMINERS ONLY

Questions 1-15 Out of 100 marks	Candidate Score -----	Candidate performance level -----
--	---	---

KENYA EDUCATORS CONSULTANCY

Read the dialogue below and then answer question 1-6. (6 Marks)

Betty: I really love my occupation in the call centre. Helping people solve their problems builds my own self-esteem.

Brian: I also enjoy this occupation. When I give people honest answers, I feel a sense of reward in my heart.

Betty: Do you know why Sharon has not come to work?

Brian: I need to be honest with you. I understand she has been suspended.

Betty: What could have happened?

Brian: I am not sure but Sharon often arrives at work late.

Betty: Oh, lateness can make one lose a job?

Brian: Yes, if it becomes a habit and one does not apologise.

Betty: Being late is one way of stealing your employer's time, isn't it?

Brian: Yes, it is. We could even say that lateness is one way of being corrupt. It shows lack of integrity. That is very different from what

I have observed about you. You are a bee in this office. You are always busy and you excel in what you do.

Betty: Thank you, It is quite rewarding to hear such words from a co-worker.

Brian: You know, Sharon is also fond of leaving the office without permission.

Betty: Is it possible Sharon is in an occupation she doesn't like?

Brian: I think she lacks the passion. She does not go the extra mile to make customers happy. She has even been found leaking company secrets several times. That is unethical, don't you think?

Betty: Sure. Did the manager say anything?

Brian: Yes, but Sharon replied rudely. Her colleagues received awards for hard work. Sharon was given a warning letter instead.

Betty: Is she likely to be allowed to come back to work?

Brian: Only if she changes for the better. The company can lay her off for being unethical and for not following the code of conduct.

Betty: Employees should be responsible. Good work ethics like honesty and integrity should always be practised.

- a. What does Brian get by giving honest answers to callers?

- b. According to the conversation, what can make one to be relieved of his or her duties?

- c. State the most likely outcome of getting into an occupation without serious consideration.

- d. The words laid off cannot be replaced by (Choose among the following: sacked, fired, retrenched, relieved of your duties.)
- e. Whenever one apologizes, he or she
- f. The conversation above addresses

Read the passage below and then answer question 7-12. (6 Marks)

At a very young age, I started helping on our family farm. I remember feeding the chickens and collecting eggs. I was later trusted to bottle-feed the young ones of animals and milk the cows. I learnt the hard way that a cow should have a tether on its hind legs when being milked. One time, I was in danger. I missed the kick of a cow by a whisker. Thankfully, father pulled me out of the way in time and saved me.

My father always wants us to keep the farm environment clean, "Cleanliness is next to godliness," he often says. I learnt early how to clean the pigsties and cow pens. I always join my father in feeding the animals during school holidays. Every Saturday, I also inspect the water pipes in the poultry houses to ensure water is getting into the drinking containers. Father says that I am a star. I do my work very well. My father keeps neat records of the health of our livestock. A local veterinary doctor visits frequently to do routine check-ups.

Perhaps my most touching duty was raising orphaned baby animals. I still remember bottle-feeding a goat's kid. The mother had died when giving birth. Every feeding time, I would warm some milk and put it in the feeding bottle then let the kid suckle from the bottle in my hand. The kid, which I named Lucky, became so attached to me. Even after it had been weaned, it still came to look for me. One day, I adopted a kitten we found abandoned in the rain. We nurtured it until it was a fully grown cat.

Taking good care of animals is my passion. I want to study veterinary medicine at the university. I shall teach farmers to treat their animals with care and respect. It is my dream to set up an animal sanctuary that would care for neglected or abandoned animals. I shall name one of the animals Lucky.

1. Why did the writer miss the kick of a cow by a whisker?

2. According to the passage, the writer's father keeps the records of his livestock in order to

3. What is the passion of the writer?

4. Goat is to kid as horse is to

5. What course does the writer want to take at the university?

6. The best title for the passage above would be

Read the poem below and then answer question 13-18. (6 Marks)

Be kind and fair to them every day,
They too deserve the best in life,
Those living with HIV and AIDS,
Love and understanding is what they need.

Do not blame them for tomorrow it could be you,
It is not their fault they are the way they are,
The old and the young all can get infected,
So, let us unite and fight, and victory will come.

Their eyes are begging not to be left out,
Share meals with them and a hearty laugh too,
They are your brothers and sisters, do not forget,
God's own creation, just like me and you.

Dear friends, remember chastity is the way.
Whatever anyone says, do not backslide,
Sharing razor blades and other sharp objects, do not attempt,
This way, you will keep HIV at bay.

If the worst happens and you fall victim,
Do not begin to weep and question,

Instructions on drugs, exercises and healthy eating,
Follow them to the letter and you will be fine.

13. According to the first stanza, the victims of HIV/AIDS

14. Why shouldn't we blame all those infected by HIV/AIDS from the second stanza?

15. What do we learn about HIV and AIDS from the poem?

16. State three ways through which HIV cannot be spread

17. The words keeping HIV at bay have been used to mean

18. State three sure ways of keeping HIV at bay.

Read the passage below and then answer question 19-24. (6 marks)

Our last school holiday was my best ever! When it started, my sister and I spent many hours watching television. The problem was, my mother is hawk-eyed. She notices everything. She and my father felt we were so idle that it could lead to misconduct. They arranged for us to attend a mentorship picnic. From there on, everything changed. We did not want to waste more time and talent.

The first thing we learnt was to reduce the time we spent watching television. We started going for lessons every Tuesday and Thursday. I learnt to play the guitar and found out that I am really good at it.

Exploring a hobby like music is a great way to spend one's free time. My father asked us to help decorate our home with flowers. We learnt how to create flowerpots from old jerricans and discarded buckets. We painted them with new colours. Sometimes we would join him in his favourite pastime of repairing things around the house.

I really enjoy sports. On some days, we would wake up early to wash clothes and clean the house. Later, my mother would take us for swimming lessons. In the afternoon, we often played table tennis. All these are good for health and recreation. Every afternoon, my siblings and I would accompany our mother for a long walk. It started one afternoon when she invited us for a stroll. Now, I do not want to give up this tradition. It is a special time to relax and delight in one another's company.

I believe the best is yet to come. In our next vacation, I would like to learn how to draw using the computer. My father has promised to buy me a digital drawing touch pad. I also want to continue reading books. My parents have saved many digital children's books on our tablet. hope after reading several of them, I shall be able to improve my writing skills. I aspire to write stories that will be read all over the world.

19. Why did the parents arrange a mentorship programme for their children?

20. State two things that the father of the writer asked them to do

21. According to the passage, what did the children frequently do in the afternoon?

22. The word stroll has been used to mean

23. What is the greatest desire of the writer of the story?

24. What do we learn about sports according to the passage?

Read the passage below, it contains blank spaces numbered 25-29. For each blank space, use the best words from the brackets. (5 marks)

Tonkei ___25___ with his parents Mr and Mrs Lemayan and his sister Nasieku in Ngong Town. Every Saturday morning Tonkei___26___ and helps his mother prepare breakfast. His father and sister clean the compound and the house. ___27___ breakfast is ready, they all sit ___28___ the dining table and enjoy it. Tonkei's parents ___29___ appreciate their children for being responsible.

(stays, gets up, where, always, by, lives, once, never, wakes up, on)

Use phrasal verbs with the word look to fill in the blank spaces numbered 30-34. (5 mks)

During the last English Activities lesson, we used online dictionaries. We ___30___ several words to get their meaning and usage. Some learners laughed and ___31___ others who had difficulties in reading. The teacher did not approve of such behaviour. When you ___32___, at one point we all experienced this problem but we were helped by our teachers to overcome. To date, we ___33___ such teachers as heroes and keep praying for them to nurture more. For the hard copies of the dictionaries that we borrowed from the library, everybody has the responsibility of ___34___ them well.

For question 35-37, choose the best word from the brackets to complete the sentence given. (3 marks)

35. It is now twenty minutes _____ eight o'clock.
36. She _____ a lot to safeguard the environment already.
37. You need _____ to learn a new language.
(past, has done, intelligence, patience, passed, is doing)

For question 38 and 39, write the correct question tag (2 marks)

38. Harry walks slowly, _____?
39. William rarely goes to the market, _____?

For question 40-42, replace the underlined word with the one that is similar in meaning. (3 marks)

40. Wamboi is trustworthy because of the way she behaves.
41. I should begin a sentence with a capital letter.
42. Those who are arrogant usually fail to Succeed in life.

For question 43 and 44. Identify the type of word underlined in the given sentence. (2mks)

43. Faith can move a mountain.

Faith

Mountain

44. Juma played well during the tournament.

Juma

Tournament

For question 45-47, use the correct preposition to complete the given sentences. (2 marks)

45. The two children shared the sweets _____ themselves.

46. We sat _____ the table for the evening meal.

47. Our football team players were ashamed _____ their actions after the loss.

For question 48, write with the plural form of the underlined words (1 marks)

48. The piano in the room belongs to the chief.

For question 49 and 50, punctuate sentences correctly. (2 marks)

49. my three year old brother plays hockey very well

50. i arrived a few minutes late said omar

KENYA EDUCATORS CONSULTANCY EXAMS

GRADE 7 MID TERM 2 SET 2 EXAM



GRADE 7 2ND ASSESSMENT TERM 2 2023

HEALTH EDUCATION



NAME: _____ CODE: _____ DATE: _____

INSTRUCTIONS TO CANDIDATES:

- .Do not open the booklet until you are told to do so.*
- .Read each question carefully.*
- .Answer ALL the questions.*
- .Write your answers, in either blue or black ink, in the spaces provided in the booklet*

GRADE 7 ASSESSMENT RUBRIC.

Strand/Sub strand	Questions	Total marks	Score	Performance Level
TOTAL				

PERFORMANCE LEVEL GUIDELINES

Strand 1

10 - 12 scores = level 4

7 - 9 scores = level 3

4-6 scores = level 2

0-3 score = level 1

Strand 2

6-7 scores = level 4

4-5 scores = level 3

2-3 scores = level 2

0-1 score = level 1

Strand 3

12-17 scores = level 4

8-11 scores = level 3

5-7 scores = level 2

0-4 score = level 1

FOR EXAMINERS ONLY

Questions 1-15 Out of 100 marks	Candidate Score -----	Candidate performance level -----
--	---	---

KENYA EDUCATORS CONSULTANCY

1. What is health? (1mark)
2. What is the meaning of nutrition? (1mark)
3. State two activities that can be carried out to observe health either at home or in. school. (2marks)
4. Describe what health education is. (1mark)
5. Give two examples of plants that are sources of foods. (2marks)
6. State four food items we can get from animals. (4marks)
7. Outline three common nutrient deficiency diseases. (3marks)
8. What causes kwashiorkor? (1mark)

The diagram below shows a health activity. Use it to answer questions 9 and 10.



9. Which activity is taking place in the picture? (1mark)

10. What is the importance of the activity taking place in the above picture? (2marks)

11. To which health education related profession would you refer a person with a stomachache? (1mark)

12. Outline two health concerns in your community. (2marks)

13. Name two measures that can be used to prevent common illnesses in your community? (2marks)

14. State the importance of a healthy diet? (1mark)

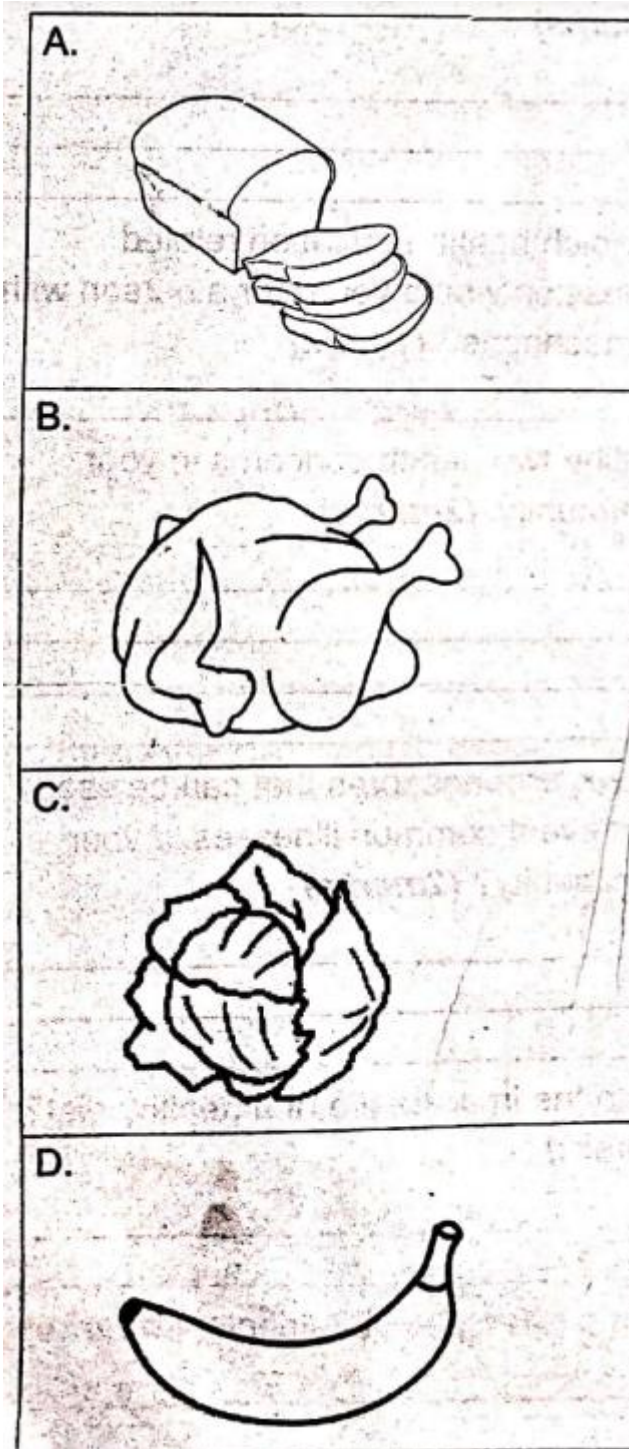
15. Name two types of nutrients. (2marks)

16. Name two component of a varied diet?

17. Differentiate macronutrients from micronutrients. (2marks)

18. What are the sources of macronutrients? (2marks)

Study the pictures below and use them to answers questions 19-21,



19. Identify the food items labeled A, B, C and (2marks)

20. Which nutrients do we obtain from each of the foods in the above pictures? (4marks)

21. Which of the foods in the pictures provide us with macronutrients? (2marks)

22. Outline the importance of health education. (1mark)

23. List three career opportunities that need knowledge in health education. (3marks)

24. What are the roles of the following career people involved in health;

1. nutritionist (1mark)

2. nurses (1mark)

3. doctors (1mark)

25. Which condition is prevented by intake of water and fibre? (1mark)

KENYA EDUCATORS CONSULTANCY EXAMS

GRADE 7 MID TERM 2 SET 2 EXAM



GRADE 7 2ND ASSESSMENT TERM 2 2023

HOME SCIENCE



NAME: _____ CODE: _____ DATE: _____

INSTRUCTIONS TO CANDIDATES:

- .Do not open the booklet until you are told to do so.*
- .Read each question carefully.*
- .Answer ALL the questions.*
- .Write your answers, in either blue or black ink, in the spaces provided in the booklet*

GRADE 7 ASSESSMENT RUBRIC.

Strand/Sub strand	Questions	Total marks	Score	Performance Level
TOTAL				

PERFORMANCE LEVEL GUIDELINES

Strand 1

10 - 12 scores = level 4

7 - 9 scores = level 3

4-6 scores = level 2

0-3 score = level 1

Strand 2

6-7 scores = level 4

4-5 scores = level 3

2-3 scores = level 2

0-1 score = level 1

Strand 3

12-17 scores = level 4

8-11 scores = level 3

5-7 scores = level 2

0-4 score = level 1

FOR EXAMINERS ONLY

<p>Questions 1-15 Out of 100 marks</p>	<p>Candidate Score</p> <p>-----</p>	<p>Candidate performance level</p> <p>-----</p>
--	---	--

KENYA EDUCATORS CONSULTANCY

1. Grade **seven** learners defined the term Home Science as a subject. Write the correct answer. (1mks)
2. Grade **seven** Home Science teacher wrote the importance of studying Home Science. Outline five (5mks)
3. Linet listed career opportunities in Home Science. Give four career opportunities she listed. (4mks)
4. Suggest **five** income generating activities in Home Science. (5mks)

3. Supplementation of nutrients
-
9. Give two examples of each of the following types of vegetables. (12mk)
 1. Stem vegetables

 2. Seed vegetables

 3. Flower vegetables

 4. Fruit vegetables


 5. Leafy vegetables

 6. Root vegetables

 10. You want to cook kales. Outline **five** safely precautions that you should observe during preparation and cooking of the vegetable. (5mks)

11. Home Science teacher brought some vegetables that can be eaten raw. List two vegetables that he might have carried. (2mks)

12. Caren carried the tool below to school.



Name the tool she carried _____ (1mk)

13. Suggest **one** method that you can use to educate other learners in the school health club on various methods of conserving nutrients in vegetables. (1mk)

14. Give a reason why reheating vegetables should be avoided. (1mk)

15. Identify **one** nutrient that is always added to table salt so as to enrich it. (1mk)

KENYA EDUCATORS CONSULTANCY EXAMS

GRADE 7 MID TERM 2 SET 2 EXAM



GRADE 7 2ND ASSESSMENT TERM 2 2023

INTEGRATED SCIENCE



NAME: _____ CODE: _____ DATE: _____

INSTRUCTIONS TO CANDIDATES:

- .Do not open the booklet until you are told to do so.*
- .Read each question carefully.*
- .Answer ALL the questions.*
- .Write your answers, in either blue or black ink, in the spaces provided in the booklet*

GRADE 7 ASSESSMENT RUBRIC.

Strand/Sub strand	Questions	Total marks	Score	Performance Level
TOTAL				

PERFORMANCE LEVEL GUIDELINES

Strand 1

10 - 12 scores = level 4

7 - 9 scores = level 3

4-6 scores = level 2

0-3 score = level 1

Strand 2

6-7 scores = level 4

4-5 scores = level 3

2-3 scores = level 2

0-1 score = level 1

Strand 3

12-17 scores = level 4

8-11 scores = level 3

5-7 scores = level 2

0-4 score = level 1

FOR EXAMINERS ONLY

Questions 1-9 Out of 100 marks	Candidate Score -----	Candidate performance level -----
---	---	---

KENYA EDUCATORS CONSULTANCY

1.

a. Name four common accidents in the laboratory. (4mks)

b. List two causes of common accidents in the laboratory. (2mks)

2.

c. What is integrated Science? (1mk)

d. List three components of integrated science. (3mks)

3. List three importance of Integrated Science in daily life? (3mks)

9. Name two career opportunities related to knowledge and skills acquired in Integrated Science. (2mks)


KENYA EDUCATORS CONSULTANCY EXAMS

GRADE 7 MID TERM 2 SET 2 EXAM



GRADE 7 2ND ASSESSMENT TERM 2 2023

IRE



NAME: _____ CODE: _____ DATE: _____

INSTRUCTIONS TO CANDIDATES:

- .Do not open the booklet until you are told to do so.*
- .Read each question carefully.*
- .Answer ALL the questions.*
- .Write your answers, in either blue or black ink, in the spaces provided in the booklet*

GRADE 7 ASSESSMENT RUBRIC.

Strand/Sub strand	Questions	Total marks	Score	Performance Level
TOTAL				

PERFORMANCE LEVEL GUIDELINES

Strand 1

10 - 12 scores = level 4

7 - 9 scores = level 3

4-6 scores = level 2

0-3 score = level 1

Strand 2

6-7 scores = level 4

4-5 scores = level 3

2-3 scores = level 2

0-1 score = level 1

Strand 3

12-17 scores = level 4

8-11 scores = level 3

5-7 scores = level 2

0-4 score = level 1

FOR EXAMINERS ONLY

Questions 1-10 Out of 100 marks	Candidate Score -----	Candidate performance level -----
--	---	---

KENYA EDUCATORS CONSULTANCY

1. Identify the following chapters in the Holy Qur'an. (3mks)
 - A. The first chapter in the Holy Qur'an Surah _____
 - B. The last chapter in the Holy Qur'an Surah _____
 - C. Al-Muawidhatein chapters Surah _____ and Surah _____

2. List down any **two** projects that a muslim can do and they earn him rewards of continuous charity. (2mks)

3. Complete the following hadith of the prophet (p.b.u.h) (2mks)
 Take advantage of five matters before five matters:-
 - A. Your youth before you become old.
 - B. Your health before you fall sick.
 - C. Your wealth before you become poor.
 - D. Your _____ before _____
 - E. Your _____ before _____
4. Write down the **six** pillars of Iman in their correct order. (3mks)
 - A. Belief in _____
 - B. Belief in _____
 - C. Belief in _____
 - D. Belief in _____
 - E. Belief in _____
 - F. Belief in _____
5. List down the three main classes of Najis in the Islamic Sharia. (3mks)
 - A. Najis _____
 - B. Najis _____
 - C. Najis _____
6. What is the meaning of these virtues in Islam. (3mks)
 - A. Taqwa


 - B. Tawakkul

 - C. Tawba

7. Narrate a short story of Prophet Ibrahim (A.S) and his son Ismail, that makes muslims to sacrifice animals every year during Idd-ul-Adh-ha. (5mks)
8. List down three things that a muslim should not do while in a state of Hadath Akbar. (3mks)
9. Name the three types of Hajji. (3mks)
10. During the conquest of Makkah, the prophet sited three areas where the Qureish in Makka would stay to be safe from the attack of the muslim army. Name those places. (3mks)

KENYA EDUCATORS CONSULTANCY EXAMS

GRADE 7 MID TERM 2 SET 2 EXAM



GRADE 7 2ND ASSESSMENT TERM 2 2023

KISWAHILI



NAME: _____ CODE: _____ DATE: _____

INSTRUCTIONS TO CANDIDATES:

- .Do not open the booklet until you are told to do so.*
- .Read each question carefully.*
- .Answer ALL the questions.*
- .Write your answers, in either blue or black ink, in the spaces provided in the booklet*

GRADE 7 ASSESSMENT RUBRIC.

Strand/Sub strand	Questions	Total marks	Score	Performance Level
TOTAL				

PERFORMANCE LEVEL GUIDELINES

Strand 1

10 - 12 scores = level 4

7 - 9 scores = level 3

4-6 scores = level 2

0-3 score = level 1

Strand 2

6-7 scores = level 4

4-5 scores = level 3

2-3 scores = level 2

0-1 score = level 1

Strand 3

12-17 scores = level 4

8-11 scores = level 3

5-7 scores = level 2

0-4 score = level 1

FOR EXAMINERS ONLY

Questions 1-30 Out of 100 marks	Candidate Score	Candidate performance level
	-----	-----

KENYA EDUCATORS CONSULTANCY

Soma mazungumzo yafuatayo kisha ujibu maswali 1-5

Hakimu: Wewe jina lako kamili ni Mboko, sio?

Mboko: Ndiyo, Mheshimiwa

Hakimu: Unakiri mashtaka haya mawili, yaliyoelezwa na kiongozi wa mashtaka?

Mboko: La, sikiri, Mheshimiwa.

Hakimu: Kiongozi wa mashtaka, unaweza kuendelea na maelezo zaidi kuhusu kesi hii.

Kiongozi wa mashtaka: Mheshimiwa, huyu mshtakiwa alikamatwa amekaa ndani ya gari la Bi. Cheupe. Maelezo ya alama ya _____ usoni pa Mboko tuliyopewa na Bi. Cheupe yalitusaidia kumkamata.

Karani wa korti: Mheshimiwa huyu shahidi ni mfanyi kazi katika kituo cha petroli. Jina lake ni Mwema. Ana alama ya kovu usoni _____ pake.

Hakimu: Unaweza kuionyesha korti huyo uliyemwona akiwacha gari la Benz na kuchukua la Toyota?

Mwema: Ni yule mle kizimbani aliye na pingu Mheshimiwa.

Mboko: Mheshimiwa ningependa kumuuliza Kiongozi wa mashtaka swali moja. Polisi aliyenikamata alinikuta mimi nimeketi kiti _____ cha mbele cha dereva au cha abiria?

Kiongozi wa mashtaka: Mheshimiwa huyu ni mhalifu sana. Tuna ripoti kuwa huyu ni mwizi sugu wa magari.

Hakimu: (*Akimwelekea Mashtaka*) Una lolote la kusema ili kujitetea?

Mboko: Mimi sina hatia, Mheshimiwa. Mimi nilikuwa abiria tu niliyekuwa nikipelekwanya nyumbani. Mwizi wa gari ni huyo aliyekuwa _____ ameketi kiti cha dereva.

Hakimu: Mimi nitatoa uamuzi wiki ijayo. Kwa hivyo mshtakiwa atabaki korokoroni na kuletwa tena hapa kortini siku nitakayo toa _____ hukumu

- Aliyeulizwa jina lake na hakimu ni _____
- Je, mshtakiwa alikubali mashtaka yake? (Ndio, la) _____
- Ni watu wangapi wametajwa katika mazungumzo haya?
- Neno kukiri limetumika katika mazungumzo maana yake ni _____
- Unafikiria ni nani hakusema ukweli kati ya watu waliotajwa kwenye mazungumzo?

Soma kifungu kifuatacho kisha ujibu maswali 6-9

Watu wa Afrika mashariki hutumia ala za muziki ambazo zinafanana sana. Kuna ala za nyuzi kama vile gita, zeze, kinubi na udi. Piano pia ni aina ya ala ya nyuzi ingawa nyuzi zake zimefichika ndani.

Ala nyingine hutoa sauti kwa kupuliziwa upepo. Ala hizi ni kama vile kipenga ambacho pia hutumiwa na refa, yaani mwamuzi katika michezo. Zumari na parapanda vile vile ni miongoni mwa ala za kupulizia upepo. Ala nyingine hutoa sauti kwa kutikiswa. Mfano wa ala hizi ni njuga, kayamba, tari na manyanga.

Kuna ngoma ambazo huchezwa uwanjani na kuangaliwa na watu wote, wake kwa waume. Mfano wa ngoma hizo ni kama zile ngoma za kusherehekea mavuno au sikukuu za taifa au za kutumbuiza wageni.

Ngoma na muziki ni njia ya watu kujipatia ajira. Hoteli nyingi huajiri wanamuziki na wachezaji ngoma za kienyeji ili kuwavutia wateja katika hoteli hizo. Inapasa kuhakikisha kuwa hatuwashirikishi wasichana na wavulana wadogo katika ngoma hizi za kutumbuiza watalii katika hoteli.

6. Ala za muziki zinazofanana mara nyingi hutumiwa na
7. Taja aina mbili za ala zinazo chezwa kwa kupulizwa.
8. Ni aina ngapi za ala zimetajwa katika kifungu hiki?
9. Chora na utaje ala moja ya muziki iliyotajwa.

Soma kifungu kifuatacho kisha ujibu maswali 10 - 12

Mfalme alikuwa na jozi kumi na mbili za soksi. Jozi sita zilikuwa nyeusi na sita zilikuwa rangi ya kahawia. Alimtuma mtumishi wake kumchukulia jozi moja ya soksi kabatini. Alipofika kabatini, taa zote za umeme katika chumba zilizima.

14. Mfalme alikuwa na jumla ya soksi ngapi?
15. Neno **jozi** limetumika lina maana ya
16. Unafikiria mtumishi atapeleka soksi ngapi kwa mfalme ili apate jozi moja?

Soma kifungu kifuatacho kisha uyajibu maswali 13 - 15

Ni wajibu wa kila mwanafunzi kufanya kazi kwa bidii na kwa dhati. Tukumbuke kuwa Wahenga hawakukosea waliposema **ajizi ni nyumba ya njaa**. Hivyo basi haifai kulaza damu darasani.

Ni sharti tufanye juu chini kuwa na adabu na juhudi. Taifa letu linahitaji watu walioelimika, kwani bila elimu itakuwa vigumu sana kutekeleza mipango mbalimbali ya maendeleo.

Wakulima nao kwa upande ule mwingine kuzidisha mazao mashambani kwa sababu idadi ya watu inazidi kuongezeka.

Isitoshe, wanabiashara ni lazima kama ibada wajishughulishe na biashara ambapo kwa sasa ni Wakenya wachache sana ambao wanatambua umuhimu wa biashara. Wengi wa wananchi ni wale ambao wana mawazo kuwa ni sharti kila mtu aajiriwe maishani.
nchi

Hivyo basi ni lazima tujitoe mhanga na kuona kuwa nchi yetu imeimarika kiuchumi. Kila mzalendo anafaa kujikaza kisabuni kuona amefanya jukumu lake ili kuona maendeleo ya yamepatikana.

1. Kulaza damu ni sawa na kusema kuwa
2. Unadhani ni kwa nini biashara haijaimarika nchini?
3. 'Ajizi ni nyumba ya njaa' ni aina gani ya tamathali ya lugha?

Soma kifungu kifuatacho. Kina nafasi 16 mpaka 20. Kwa kila nafasi umepewa majibu manne hapo. Chagua jibu lifaalo zaidi kati ya yale uliyopewa.

Idadi kubwa ya mashabiki ___16___ mchuano wa soka ___17___ Man City na Man United. Nchi yetu, Kenya, ___18___ kushiriki katika mashindano haya ___19___ si mwanachama wa kombe la Uropa. ___20___ mashabiki wa Kenya, walitazama mechi hiyo moja kwa moja kwenye runinga zao.

	A	B	C	D
16.	yalihudhuria	walihudhuria	ilihudhuria	ilihuthuria
17.	baina ya	dhidi ya	badala ya	katikati ya
18.	haiwezi	inaweza	haiezi	hawawezi
19.	endapo	sembuse	almuradi	maadamu
20.	Licha ya	Kwa hivyo	Hata hivyo	Minghairi ya

Kutoka swali la 21 hadi la 30, chagua jibu lifaalo zaidi kulingana na maagizo uliyopewa.

21. Binuru ni jibu la maamkuzi gani?
22. Kanusha:
 Angeniita kwa sauti ningeitika.
23. Ni nini maana ya nahau '**kupiga deki**'?
24. Tunasema baraza la wazee. Tutasema _____ ya watu. (**umati, halaiki**)
25. Chagua sentensi sahihi.
 A. Hapa ndiko kwenye hospitali itajengwa.
 B. Huku ndiko penye hospitali itajengwa.
 C. Humu ndimo kwenye hospital itajengwa.
 D. Huku ndiko kwenye hospitali itajengwa.

Katika maneno yafuatayo, chagua nomino mbili za dhahania.

kucheza	Kenya
wema	thureya
daftari	nyota
maji	utulivu
ndege	uzalendo

26. _____
27. _____
28. Dereva _____ gari barabarani vizuri. (**dhibiti, thibiti**)
29. Barua ya kirafiki ina anwani ngapi?
30. Kinyume cha mtu mwangalifu ni mtu _____

KENYA EDUCATORS CONSULTANCY EXAMS

GRADE 7 MID TERM 2 SET 2 EXAM



GRADE 7 2ND ASSESSMENT TERM 2 2023

LIFE SKILLS



NAME: _____ CODE: _____ DATE: _____

INSTRUCTIONS TO CANDIDATES:

- .Do not open the booklet until you are told to do so.*
- .Read each question carefully.*
- .Answer ALL the questions.*
- .Write your answers, in either blue or black ink, in the spaces provided in the booklet*

GRADE 7 ASSESSMENT RUBRIC.

Strand/Sub strand	Questions	Total marks	Score	Performance Level
TOTAL				

PERFORMANCE LEVEL GUIDELINES

Strand 1

10 - 12 scores = level 4

7 - 9 scores = level 3

4-6 scores = level 2

0-3 score = level 1

Strand 2

6-7 scores = level 4

4-5 scores = level 3

2-3 scores = level 2

0-1 score = level 1

Strand 3

12-17 scores = level 4

8-11 scores = level 3

5-7 scores = level 2

0-4 score = level 1

FOR EXAMINERS ONLY

Questions 1-20 Out of 100 marks	Candidate Score -----	Candidate performance level -----
--	---	---

KENYA EDUCATORS CONSULTANCY

1. Name **three** ways in which a learner can handle peer pressure. (3mks)

2. List **three** factors that influence self-esteem (3mks)

3. State **four** hormonal changes during adolescence which have an impact on emotional well-being. (4mks)

4. During a classroom lesson on life skills, Mr. Bahati asked the learners to define self awareness (2mks)

5. List **two** causes of stress. (2mks)

6. A grade seven teacher asked the learners to outline three effects of stress. What answer did they give? (3mks)

13. Grade 7 learners during a debate were asked to define negative emotions. What answer did they give? (1mk)
14. It is very important to manage emotions. What is the importance of this action? (1mk)
15. Name **two** lifestyle diseases that can result from failing to manage our emotions positively. (2mks)
16. Give **two** roles of guidance and counseling services in stress management. (2mks)
17. Identify ways of dealing with contemporary/current challenges in school. (4mks)
18. Give **three** characteristics of a high esteemed person. (3mks)
19. Who is a 'talented' learner.(2mks)
20. Grade 7 learners failed in their life skill exam. They had a lot of stress because they were told they will be punished. What is stress? (2mks)

KENYA EDUCATORS CONSULTANCY EXAMS

GRADE 7 MID TERM 2 SET 2 EXAM



GRADE 7 2ND ASSESSMENT TERM 2 2023

MATHEMATICS



NAME: _____ CODE: _____ DATE: _____

INSTRUCTIONS TO CANDIDATES:

- .Do not open the booklet until you are told to do so.*
- .Read each question carefully.*
- .Answer ALL the questions.*
- .Write your answers, in either blue or black ink, in the spaces provided in the booklet*

GRADE 7 ASSESSMENT RUBRIC.

Strand/Sub strand	Questions	Total marks	Score	Performance Level
TOTAL				

PERFORMANCE LEVEL GUIDELINES

Strand 1

10 - 12 scores = level 4

7 - 9 scores = level 3

4-6 scores = level 2

0-3 score = level 1

Strand 2

6-7 scores = level 4

4-5 scores = level 3

2-3 scores = level 2

0-1 score = level 1

Strand 3

12-17 scores = level 4

8-11 scores = level 3

5-7 scores = level 2

0-4 score = level 1

FOR EXAMINERS ONLY

Questions 1-18 Out of 100 marks	Candidate Score -----	Candidate performance level -----
--	---	---

KENYA EDUCATORS CONSULTANCY

1. Grade 7 learners were asked by their teacher to list the prime numbers between 40 and 60. They listed as with a follows:

Amani	41, 43, 45, 47, 49, 51, 53, 55, 57, 59
Zawadi	41, 43, 47, 51, 53, 57, 59
Pendo	42, 44, 46, 48, 50, 52, 54, 56, 58, 60
Maria	41, 43, 47, 53, 59

Who among the four learners was correct? (2mks)

2. What is the product of 285 and 119? (2mks)

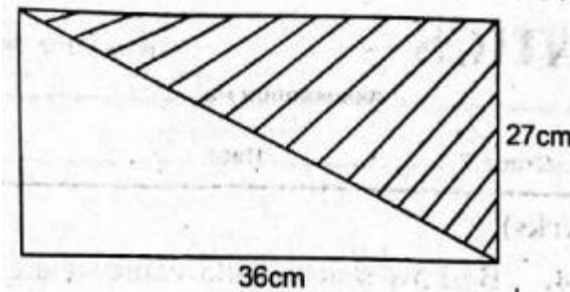
3. Arrange the following numbers in ascending order. 30 480, 31 480, 24 480, 36 480 (2mks)

4. By how much is the value of digit 4 greater than the value of digit 8 in the number 3425869? (2mks)

5. During a certain year, the government allocated sh.154 538 294 toward the purchase of school textbooks. Write the amount in words. (2mks)

6. What is the place value of digit 7 in the number 27 894 891? (2mks)
7. What is the difference between the largest four digit number and the smallest three digit number? (2mks)

8. Grade 6 learner made the figure below. What is the area of the shaded part? (2mks)



9. Mr. John's piece of land is in form of a square of area 8100m². What is the 4 measure of each side of the farm? (2mks)
10. A school has 586 boys and 384 girls. The school bought 1160 face masks. If each learner was given a mask, how many masks remained? (2mks)

11. 3 bells ring at intervals of 30 minutes, 48 minutes and 1 hour, if they rang together at 9.00am, at what time will they ring together again? (2mks)

12. Lemayan bought $12\frac{7}{8}$ m of a string. He used $9\frac{5}{6}$ m. How many metres of the string remained? (2mks)

13. Express $\frac{3}{4}$ as a percentage. (2mks)

14. Kioko jumps 3.5784 metres during a competition. Round off the distance to the nearest thousandth. (2 mks)

15. Which of the following fractions is equivalent to $\frac{7}{9}$? (2mks)

A. $\frac{14}{27}$

B. $\frac{28}{45}$

C. $\frac{63}{81}$

D. $\frac{21}{36}$

16. Subtract 8.496 from 12 (2 mks)

A. 3.504

B. 4.496

C. 4.504

D. 3.496

17. A motorist covered 8km 750m and another 6km 830m. What was the total distance covered in kilometers? (1mk)

18. Simplify the inequality (2mks)

$$3y - 4 > 14$$

KENYA EDUCATORS CONSULTANCY EXAMS

GRADE 7 MID TERM 2 SET 2 EXAM



GRADE 7 2ND ASSESSMENT TERM 2 2023

PERFORMING ARTS



NAME: _____ CODE: _____ DATE: _____

INSTRUCTIONS TO CANDIDATES:

- .Do not open the booklet until you are told to do so.*
- .Read each question carefully.*
- .Answer ALL the questions.*
- .Write your answers, in either blue or black ink, in the spaces provided in the booklet*

GRADE 7 ASSESSMENT RUBRIC.

Strand/Sub strand	Questions	Total marks	Score	Performance Level
TOTAL				

PERFORMANCE LEVEL GUIDELINES

Strand 1

10 - 12 scores = level 4

7 - 9 scores = level 3

4-6 scores = level 2

0-3 score = level 1

Strand 2

6-7 scores = level 4

4-5 scores = level 3

2-3 scores = level 2

0-1 score = level 1

Strand 3

12-17 scores = level 4

8-11 scores = level 3

5-7 scores = level 2


0-4 score = level 1

FOR EXAMINERS ONLY

Questions 1-10 Out of 100 marks	Candidate Score -----	Candidate performance level -----
--	---	---

KENYA EDUCATORS CONSULTANCY

8. Name the following musical symbols. (6mks)



9. What is the French rhythm name for the following notes? (2mks)



10. Write out the French rhythm name of the following rhythm. (2mks)



KENYA EDUCATORS CONSULTANCY EXAMS

GRADE 7 MID TERM 2 SET 2 EXAM



GRADE 7 2ND ASSESSMENT TERM 2 2023

PHYSICAL EDUCATION



NAME: _____ CODE: _____ DATE: _____

INSTRUCTIONS TO CANDIDATES:

- .Do not open the booklet until you are told to do so.*
- .Read each question carefully.*
- .Answer ALL the questions.*
- .Write your answers, in either blue or black ink, in the spaces provided in the booklet*

GRADE 7 ASSESSMENT RUBRIC.

Strand/Sub strand	Questions	Total marks	Score	Performance Level
TOTAL				

PERFORMANCE LEVEL GUIDELINES

Strand 1

10 - 12 scores = level 4

7 - 9 scores = level 3

4-6 scores = level 2

0-3 score = level 1

Strand 2

6-7 scores = level 4

4-5 scores = level 3

2-3 scores = level 2

0-1 score = level 1

Strand 3

12-17 scores = level 4

8-11 scores = level 3

5-7 scores = level 2

0-4 score = level 1

FOR EXAMINERS ONLY

<p>Questions 1-20 Out of 100 marks</p>	<p>Candidate Score</p> <p>-----</p>	<p>Candidate performance level</p> <p>-----</p>
--	---	--

KENYA EDUCATORS CONSULTANCY

6. Draw an athletics track and label; starting line for 100 and 200m races as well as the finishing line. (4mks)

7. A game of soccer lasts for _____ minutes. It consists of _____ halves with a _____ minutes half time break. (3mks)

8. Which type of pass is used to throw the ball back to the field in a game of soccer? (1mk)


9. Identify each of the following passes. (3mks)



10. Outline 2 types of traps in a game of soccer. (2mks)

11. List two types of serves in a game of volleyball. (2mks)

12. Which type of volleyball serve is illustrated below? (1mk)



13. List 2 equipments necessary in a game of tag rugby. (2mks)

14. A score in the game of tag rugby is called a _____ and is awarded _____ points. (2mks)



15. _____ The above activity is a _____ sequence which involves _____ activities. (2mks)

16. Name two types of landing in the game of netball. (2mks)

17. Name two types of leadership in sports. (2mks)

Define the following terms in relation to PE and sports. (2mks)

13. Speed

14. Power

15. Grade seven student from a certain school went for a camp. Name two most appropriate materials they needed to light a camp fire (2mks)

16. State two sports related injuries. (2mks)

17. During games, Wafula developed the following signs. (1mk)

- a. dizziness
- b. his vision changes
- c. cold skin and sweating
- d. breathing faster and deeply.

From which sports related injuries was Wafula most likely suffering from?


18. Name two types of snakes found in the locality. (2mks)

19. State two signs and symptoms of snake bites. (2mks)

20. The picture below shows an injured person. The triangular bandage has been used to (2mks)

KENYA EDUCATORS CONSULTANCY EXAMS

GRADE 7 MID TERM 2 SET 2 EXAM



GRADE 7 2ND ASSESSMENT TERM 2 2023

SOCIAL STUDIES



NAME: _____ **CODE:** _____ **DATE:** _____

INSTRUCTIONS TO CANDIDATES:

- .Do not open the booklet until you are told to do so.*
- .Read each question carefully.*
- .Answer ALL the questions.*
- .Write your answers, in either blue or black ink, in the spaces provided in the booklet*

GRADE 7 ASSESSMENT RUBRIC.

Strand/Sub strand	Questions	Total marks	Score	Performance Level
TOTAL				

PERFORMANCE LEVEL GUIDELINES

Strand 1

10 - 12 scores = level 4

7 - 9 scores = level 3

4-6 scores = level 2

0-3 score = level 1

Strand 2

6-7 scores = level 4

4-5 scores = level 3

2-3 scores = level 2

0-1 score = level 1

Strand 3

12-17 scores = level 4

8-11 scores = level 3

5-7 scores = level 2

0-4 score = level 1

FOR EXAMINERS ONLY

Questions 1-12 Out of 100 marks	Candidate Score -----	Candidate performance level -----
--	---	---

KENYA EDUCATORS CONSULTANCY

1. Define the word climate. (1mk)
2. Briefly describe the term culture. (1mk)
3. Identify **four** benefits of Social Studies for personal development and service to humanity. (4mks)
4. Grade **seven** learners were learning about continents. Name the seven continents of the World.(7mks)

10. Distinguish pictures, plans and maps as used in Social Studies. (6mks)

- i. Pictures
- ii. Plans
- iii. Maps

11. Social Studies teacher told grade seven learners to name **five** elements of a map. List the answers that they gave. (5mks)

12. Landlocked countries are those without sea coast. List **five** countries in Africa that are landlocked. (5mks)

KENYA EDUCATORS CONSULTANCY EXAMS

GRADE 7 MID TERM 2 SET 2 EXAM



GRADE 7 2ND ASSESSMENT TERM 2 2023

VISUAL ARTS



NAME: _____ CODE: _____ DATE: _____

INSTRUCTIONS TO CANDIDATES:

- .Do not open the booklet until you are told to do so.*
- .Read each question carefully.*
- .Answer ALL the questions.*
- .Write your answers, in either blue or black ink, in the spaces provided in the booklet*

GRADE 7 ASSESSMENT RUBRIC.

Strand/Sub strand	Questions	Total marks	Score	Performance Level
TOTAL				

PERFORMANCE LEVEL GUIDELINES

Strand 1

10 - 12 scores = level 4

7 - 9 scores = level 3

4-6 scores = level 2

0-3 score = level 1

Strand 2

6-7 scores = level 4

4-5 scores = level 3

2-3 scores = level 2

0-1 score = level 1

Strand 3

12-17 scores = level 4

8-11 scores = level 3

5-7 scores = level 2

0-4 score = level 1

FOR EXAMINERS ONLY


<p>Questions 1-8 Out of 100 marks</p>	<p>Candidate Score</p> <p>-----</p>	<p>Candidate performance level</p> <p>-----</p>
---	---	--

KENYA EDUCATORS CONSULTANCY

1. Draw and name any two drawing instruments in technical drawing (2mks)

2. Drawing can be applied in many different careers. Name any two career field where geometrical construction is applied. (2mks)

3. The following shapes below can be generally described as (2mks)



4. Name any two ways in which we care for drawing instruments. (2mks)

5. In the space below, draw **three** overlapped forms and shade them using stippling or method to show light and dark effects. (10mks)

