

KENYAPLEX EXAMS 2020
COMPETENCE BASED ASSESMENT
GRADE 3 YEAR 2020
(MONITORING LEARNERS PROGRESS)

MATHEMATICS ACTIVITIES

TIME: _____

NAME:

LEARNER UPI:

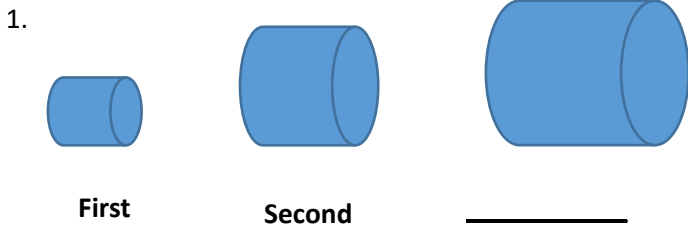
--	--	--	--	--	--

GENDER: BOY GIRL

SCHOOL NAME

Answer all questions in the spaces provided

Fill in the position



2. There are _____ months in a year?

(11, 12)

3. fill in the missing number

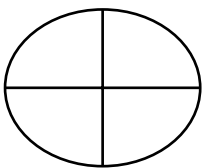
101, 106, 111, 116, _____

4. What is the place value of digit 7 in the number 507?

5. **465** = _____ hundreds _____ tens _____ ones

6. Write the number 19 in words.

7. **Shade 1/4 of the whole**



8. Which is bigger $\frac{1}{8}$ or $\frac{1}{4}$? _____

9. Koros bought 496 bags of maize. He again bought 10 more bags. How many bags did he have now?

10. Subtract $\begin{array}{r} 124 \\ -35 \\ \hline \\ \hline \end{array}$

11. Otieno has 50 children. 35 are girls. How many are boys?

12. Subtract $\begin{array}{r} 242 \\ -44 \\ \hline \\ \hline \end{array}$

13. Divide $100 \div 5 =$

14. Work out

$45 \div 9 =$

15. Kevin had 20 oranges. He wanted to give each of his daughters 5 oranges. How many daughters does he have?

16. Mary had 6 litres of milk. He used 4 litres to make tea. How many litres did he remain with?

17. Pendo was sent to the market with Sh. 100. He bought tomatoes of Sh. 70. How much change did she remain with?

18. We raise our flag on Monday at what time?

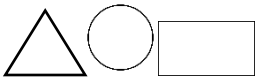
19. Work out

$$\begin{array}{r} 325 \\ - 200 \\ \hline \\ \hline \end{array}$$

20.

$$\begin{array}{r} 226 \\ - 23 \\ \hline \end{array}$$

21. Complete the pattern below.



22. Teacher Marwa walked from the staffroom to the class covering a distance of 10 metres. He then went to the dining hall a distance of 6 metres. What is the total length he walked?

23. What is 11 kg take away 7 kg

24. Draw an oval shape

