

KENYA EDUCATORS CONSULTANCY EXAMS 2023

TISMA 004

COMPETENCE BASED ASSESMENT

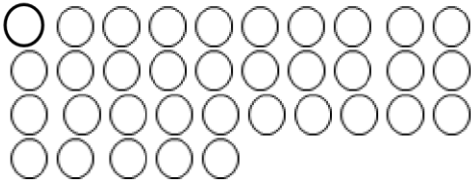
GRADE 2 YEAR 2023

(MONITORING LEARNERS PROGRESS)

MATHEMATICS ACTIVITIES

NAME: _____

1. Count and write the number.



2. 25 is ___ hundreds ___ tens and ___ ones.

3. 100 is ___ hundred ___ tens and ___ ones.

Write the numbers in words

4. 9 _____

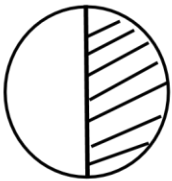
5. 15 _____

Fill in the missing number


6. 24, 26, 28, 30, _____ 34

7. 85, 80, 75, 70, _____ 60

8. Which one is a quarter



A



B

9. $70 - 50 =$

10. $19 -$ $= 12$

11. Daniel planted 19 lemon trees last week. He planted 24 lemon trees this week. How many trees has Daniel planted altogether

12.
$$\begin{array}{r} 28 \\ + 29 \\ \hline \end{array}$$

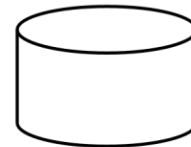
13.
$$\begin{array}{r} 37 \\ + 6 \\ \hline \end{array}$$

14. $4 + 6 + 5 =$

15. Which one holds more



A



B

16. Draw an oval shape

17. $5 \times 7 =$


18. $10 \times 4 =$

TIME: _____


19. Ben has 5 pencils. He gave peter 2 pencils.
How many pencils was Ben left with?

20. $22 - 5 = \square$

21. Draw a rectangle



27. What is the time?



28. Complete the pattern



29.

30. There are _____ in a year.

31. 0 hundreds 9 tens and 7 ones is _____

32. 4 hundreds 2 tens and 5 ones is _____

33. Hellen bought a school bag at Sh. 70.
Joash bought the same type of bag at sh. 90.
How much money did Hellen save?

$20 \div 4 =$

22. September has how many days

23. $15 + \boxed{} = 20$

24. $8 \div 4 =$

25. Ruth shared 15 bananas equally among 3 children. How many bananas did each child get

26. Which one is heavier?

A
