

KENYA EDUCATORS CONSULTANCY EXAMS

TISMA 004

TERM 2 OPENER

SOCIAL STUDIES











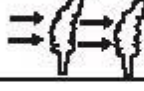



GRADE 4

1. An instrument used to show direction is called _____ (2mrks)

2. The sun sets in the _____ (1mk)

3. A high flat land is called a _____ (2mrks)

Study the diagram below and answer the questions (10marks)

| DAY | MORNING | AFTERNOON |
|-----------|---|---|
| MONDAY |  |  |
| TUESDAY |  |  |
| WEDNESDAY |  |  |
| THURSDAY |  |  |
| FRIDAY |  |  |
| SATURDAY |  |  |
| SUNDAY |  |  |

4. The above diagram is called a _____

5. Which day did the pupils wear gumboots in the morning? _____

6. The weather on Thursday was _____

7. Which day was sunny throughout? _____

8. The best day for winnowing was _____

9. A representation of a large area on a small flat surface is called _____ (1mark)

10. Name **two** social insects (4marks)

11. Identify and name any three physical features (6marks)

12. Your social studies teacher has asked you to draw a map. Name any three important elements that are supposed to be in your map (6marks)

13. Kenya is made up 47 counties. Name any 3 counties you know (6marks)

14. The head of a given country is called a _____ (1mk)

15. I live in _____ county (1mk)

16. The green color found in the national flag represents _____ (1mk)

17. People who kill our wild animals are called _____ (1mk)

18. Draw a compass direction and show the 4 main cardinal points (8marks)

