



GEAIDE 3 END OF TERM II

HOLIDAY HOMEWORK

KENYA EDUCATORS CONSULTANCY ASSESSMENTS

*A Compilation of Assessment & Revision Questions
Covering the syllabus upto the End of term 2 as per the
curriculum design*

ALL SUBJECTS TESTED

*All the learners should attempt the questions at the back
of their exercise books and revise the questions by the use
of the marking schemes provided during the August 2023
Holidays!*



For Marking Schemes Contact
0724333200 / 0768321553 or

Order online at:

www.kenyaeducators.co.ke

HYGIENE & NUTRITION GRADE 3

HOLIDAY ASSIGNMENT BOOKLET

(Volume 1)

1. **Write five things you can observe in the picture.**



- a. _____
- b. _____
- c. _____
- d. _____
- e. _____
2. **Write the correct answer**
- a. Smoking can cause our fingers and clothes to smell _____ (nice, bad)
- b. We should wash our hands _____ handling food. (before, middle, after)
- c. Dirty surfaces can be made to shine using _____ (sponge, steel wool, wire)
- d. We use _____ in the toilet. (tissue paper, towel)
- e. Oil spilled in water _____ it. (contaminates, cleans)
3. **Colour these pictures.** (5 marks)

a.



b.



4. Name two foods that are good for your teeth

a. _____

b. _____

5. Holes that form on a tooth are called

_____ (cavities, bad breath)

6. Biscuits and chocolates are good for our teeth _____
(true or false)

ENVIRONMENTAL ACTIVITIES
GRADE 3 HOLIDAY ASSIGNMENT
BOOKLET (Volume 1)

1. **Name five useful animals**

a. _____

b. _____

c. _____

d. _____

e. _____

2. **Write the correct answer**

- a. We feel texture of soil using our _____
(fingers, hair, eyes)
- b. Areas with less rain experience _____ conditions
(rainy, flood, drought)
- c. When animal droppings are collected and stored they can be used as
_____ (manure, water, food)
- d. Water is transported over long distance by use of
_____ (pipes, pots, jerricans)
- e. Which one of the following can be seen in the sky, during the day?
? _____ (moon, sun, stars)
- f. We get honey from _____ (sheep, bees)

3. **Match the sources of heat energy with the fuel used.**

Gas cooker	kerosene
Charcoal burner	Electricity
Electric cooker	charcoal
stove	Gas

4. **Name five wild animals**

- a. _____
- b. _____
- c. _____
- d. _____
- e. _____

RELIGIOUS EDUCATION GRADE 3
HOLIDAY ASSIGNMENT BOOKLET
(Volume 1)

1. Who are these people?



2. Write the correct answer

- a. We should always trust in _____ (**God, satan, people**)
- b. Jesus Christ taught his disciples how to _____ (**sing, pray, dance**)
- c. Who was healed of a bad skin disease?
_____ (**Elisha, Moses, Naaman**)
- d. Abraham's son was called _____ (**Noah, isaac, Adam**)

3. **Name any five books of the Bible.**

- a. _____
- b. _____
- c. _____
- d. _____
- e. _____

4. The wife of Adam was _____ (**Sarah, Hannah, Eve**)

5. The brother of my mother is my _____ (**cousin, uncle, father**)

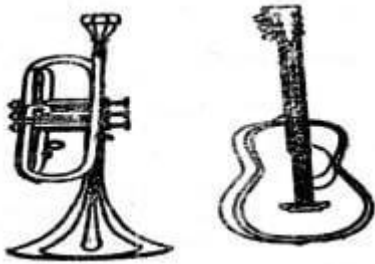
6. God made human beings in his _____ and likenes. (**image, shape, colour**)

7. God is _____ wwhen we obey our parents and teachers. (**unhappy, pleased, annoyed**)

MUSIC GRADE 3 HOLIDAY

ASSIGNMENT BOOKLET (Volume 1)

8. Percussion instruments cannot be played by
(shaking, plucking, hitting)
9. Colour a musical instrument that can be played by blowing.



10. A.....produces a "moo" sound.
(cow, dog, cat)
11. Raha tupate na ustawi. In which verse of the Kenya National Anthem is this line found?
(first, second, third)
12. A performance by a group of people is called
aperformance.
(solo, choral, crowd)
- 13.....are songs sung to soothe babies to sleep.
(sacred songs, lullabies, patriotic songs)

CREATIVE ARTS GRADE 3 HOLIDAY **ASSIGNMENT BOOKLET (Volume 1)**

1. **Colour this ship**

2. Write down five things we use during drawing

- a. _____
- b. _____
- c. _____
- d. _____
- e. _____

KISWAHILI GRADE 3 HOLIDAY

ASSIGNMENT BOOKLET (Volume 1)

1. **Soma kifungu hiki kwa sauti**

Juma alitumwa sokoni na mama yake. Alipewa shilingi mia nane. Alitumwa kununua samaki wawili, mboga na mkate. Pia Juma alitumwa kununua mayai manne na pakiti mbili za maziwa.

2. **Tumia "ao" katika sentensi hizi**

- a. Watoto _____ wamekunywa chai.
- b. Magari _____ yamekwama matopeni.
- c. Vyoo _____ vimejengwa.
- d. Vitabu _____ vimeibiwa.
- e. Wazazi _____ wamefika.

3. **Andika kinyume cha maneno haya.**

- a. Keti _____
- b. Enda _____
- c. Lia _____
- d. Simama _____
- e. Mzee _____

4. **Onyesha silabi za maneno haya**

- a. kiganja _____
- b. makwapa _____
- c. kipupwe _____
- d. malezi _____
- e. mwamba _____

5. **Jaza nafasi ukitumia "juu ya", "nje ya", "chini ya" au "ndani ya".**

- a. Bendera inapepea _____ ya ofisi.
- b. Ulimi umo _____ ya kinywa.
- c. Babu anapumzika _____ kivuli.
- d. Njiwa ametua _____ mti.
- e. Nyoka anaishi _____ pango.

LANGUAGE ACTIVITIES GRADE 3

HOLIDAY ASSIGNMENT BOOKLET

(Volume 1)

SECTION A

Read this story loudly



There is a football field near Katana's home. Katana and John were playing football. Accidentally Katana stepped on John's toe and John started crying. Katana ran off to their house leaving John in tears. A while later John limped off to Katana's home and reported the matter to Katana's parents.

SECTION B

1. **Look at the pictures below. What do these people do?**

a.



b.



c.



2. **Rearrange these words to make correct sentences.**

a. Blue sky the is

b. new Banja pen a has

c. my I and like sweets sister

d. Voi by travelled bus we to

e. takes John books of care his good

3. **Write the odd one out in these groups of words.**

a. pencil, rubber, plate, book _____

b. brown, yellow, mat, red _____

c. table, bucket, bed, cupboard _____

d. although, and, but, Susan _____

e. eyes, nose, ears, walk, head _____

4. **Write the plural of these words.**

a. duck _____

b. egg _____

c. man _____

d. woman _____

e. van _____

5.

Use the picture to write five sentences.

- a. _____
- b. _____
- c. _____
- d. _____
- e. _____

6. **Make words using these sounds**

- a. oo _____
- b. ra _____
- c. fo _____
- d. ea _____
- e. sh _____

7. **Fill in the gaps**

- a. sh__pk__ __per
- b. sch__ __l
- c. ri__ers
- d. l__nch
- e. b__by

8. **Match th words in A with their opposite in B.**

- | A | B |
|-------------|------------|
| a. laugh | disrespect |
| b. plant | exit |
| c. rude | harvest |
| d. respect | polite |
| e. entrance | cry |

9. **Write sentences using theses words**

- a. baby

- b. mother

- c. man

- d. thief

e. doctor

10. **Write the days of the week**

- a. _____
- b. _____
- c. _____
- d. _____
- e. _____

11. **Name the young one of.**

- a. a dog _____
- b. a cat _____
(puppy, kitten)

MATHEMATICS GRADE 3 HOLIDAY

ASSIGNMENT BOOKLET (Volume 1)

1. **Fill in the place value chart**

	Hundreds	Tens	Ones
(a) 146	_____	_____	_____
(b) 213	_____	_____	_____
(c) 500	_____	_____	_____
(d) 92	_____	_____	_____

2. **Write the ordinal numbers.**

- a. March is the _____ month of the year.
b. Sunday is the _____ day of the week.
c. There are _____ months in a year.

3. **Circle the greater number**

- a. 216 213
b. 406 510
c. 918 920

4. **Work out**

What is half of


- a. 18 _____
b. 10 _____
c. 6 _____
d. 4 _____

5. **Which number comes after**

- a. 92 _____
b. 86 _____
c. 49 _____

6. **Colour a $\frac{1}{2}$**

- a.



b.



c.



7. **Add**

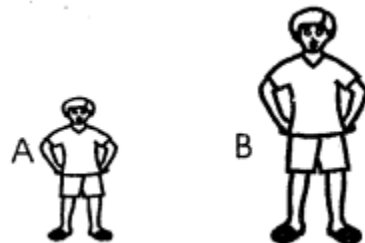
- a. $100 + 206 =$ _____
- b. $92 + 7 =$ _____
- c. $13 + 42 =$ _____
- d. $328 + 11 =$ _____
- e. $428 + 40 =$ _____

8. **Who is taller?**

a.



b.



9. **Subtract**

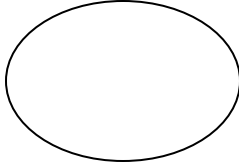
- a. $705 - 5 =$ _____
- b. $406 - 50 =$ _____
- c. $97 - 90 =$ _____

d. $18 - 9 =$ _____

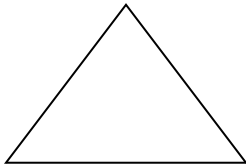
e. $120 - 20 =$ _____

10. **Name these figures**

a.




b.



c.



d.



e.



11. Ouma had 400 sweets, while his sister Janet had 202 sweets. How many sweets did they have altogether? _____

12. Caleb had 186 biscuits, he gave 80 biscuits to his son Job. How many sweets was he left with? _____

Two boys have

_____ legs

_____ heads
_____ hands
_____ mouths

13. **Multiply**

- a. $2 \times 2 =$ _____
b. $2 \times 4 =$ _____