

GRD 4 ENDTERM 2 EXAM

ALL SUBJECTS

Series 1

THE KENYA INTERCOUNTY EXAMS {SERIES 1}

A Compilation of Assessment Questions Covering the Syllabus upto End of term 2 as per the Curriculum Design

Note: Contact Mr Machuki 0724333200 for Playgroup to Grade 3 exams as well



For Marking Schemes Contact
0724333200 / 0768321553 or

Order online at:

www.kenyaeducators.co.ke

KENYA EDUCATORS CONSULTANCY

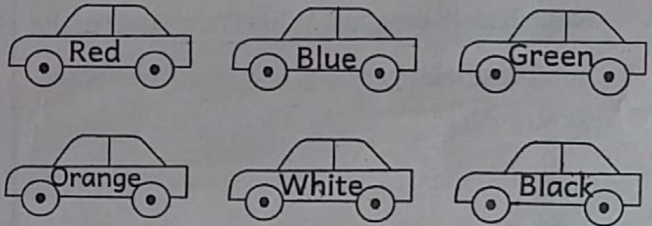
KENYA INTER-COUNTY EXAMINATION



MATHEMATICS

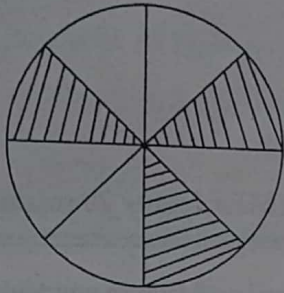
GRADE 4- 2023

TIME: 1 hour 20 minutes

- Adero bought animal feeds at a cost of sh 9375. What is the place value of digit 3?
 - Three hundred
 - Hundreds
 - Thousands
 - Tens
- A farmer planted 4966 kale seedlings. What is the total value of digit 4 in the number?
 - 4
 - 40
 - 400
 - 4000
- There are 399 pupils in a school. What is the number in words?
 - Three hundred and ninety nine
 - Three ninety nine
 - Three nine nine
 - Three thousand and ninety nine
- Use digits 7, 3 and 8 to form the smallest three digit number. Which number was formed?
 - 873
 - 378
 - 387
 - 373
- What is five hundred and five in symbols?
 - 550
 - 505
 - 555
 - 55
- The positions of cars during a safari rally were as follows:


If the position of the red and orange cars is first and fourth respectively, what is the position of the blue and black cars respectively?
 - Third and sixth
 - Second and fifth
 - Second and sixth
 - Sixth and second
- What is the missing number in the pattern 365, 361, 357, _____?
 - 349
 - 350
 - 353
 - 347

Caro cut a circular paper cut-out and shaded some parts.



What fraction is unshaded?

- A. $\frac{3}{8}$
 B. $\frac{6}{8}$
 C. $\frac{5}{8}$
 D. $\frac{7}{8}$
9. Rono had 48 oranges. What is a quarter of the number of oranges?
 A. 24
 B. 12
 C. 6
 D. 16
10. Peter had 246 bottles of soda in his shop. He bought another 70 bottles. How many bottles of soda does he have altogether?
 A. 306
 B. 326
 C. 146
 D. 316
11. A school had planted 346 trees. If 88 trees dried up, how many trees remained?
 A. 258
 B. 434
 C. 268
 D. 424

12. Kaunda eats 5 bananas each day. How many bananas will he eat in 6 days?

- A. 11
 B. 1
 C. 30
 D. 24

13. A mother shared 12 oranges equally among 4 children. How many oranges did each child get?

- A. 8
 B. 3
 C. 16
 D. 11

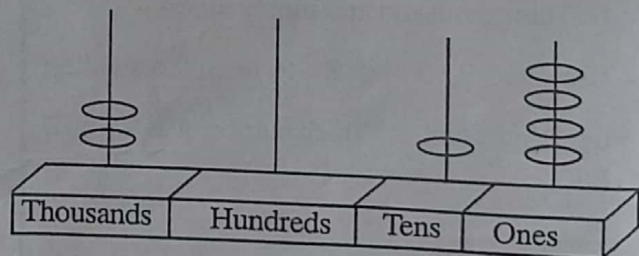
14. A forester had 638 seedlings. He gave out 475 seedlings. How many seedlings was he left with?

- A. 163
 B. 1113
 C. 263
 D. 233

15. Which of the fractions below is the biggest?

- A. $\frac{1}{4}$ of 24
 B. $\frac{1}{2}$ of 24
 C. $\frac{1}{8}$ of 24
 D. $\frac{1}{3}$ of 24

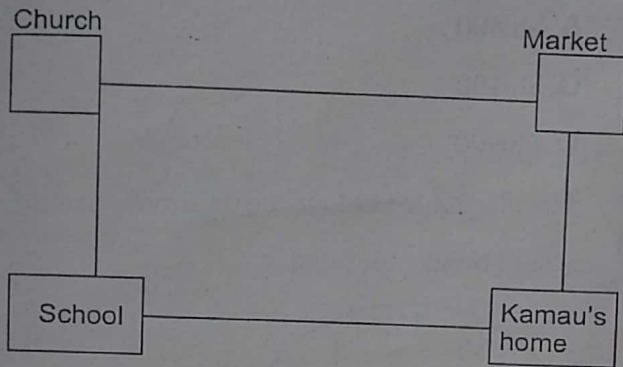
16. A certain number was represented on an abacus as shown.



Which number is represented?


- A. 214
 B. 2114
 C. 2014
 D. 25

The position of Kamau's home, school, market and church is as shown below. Use it to answer questions 17 and 18.



17. To walk to the church Kamau moves straight to the market then turns
 - A. left
 - B. right
 - C. backward
 - D. downward
18. From school Kamau walks straight to the church and then turns _____ to go to the market.
 - A. right
 - B. backward
 - C. upward
 - D. left
19. The distance from grade three to grade four is 5 metres. The distance from grade four to the staffroom is 8 metres. What is the distance from grade three to the staffroom?
 - A. 3m
 - B. 5m
 - C. 13m
 - D. 16m

20. A piece of timber is 27m long. 7m is cut from it. How long is the remaining timber?
 - A. 20m
 - B. 34m
 - C. 19m
 - D. 21m
21. Maina has 4kg of beans and 18kg of maize. How many kilograms of beans and maize does he have altogether?
 - A. 14kg
 - B. 22kg
 - C. 20kg
 - D. 21kg
22. Cyprine had 56kg of peas. She cooked 6kg. How many kilograms were left?
 - A. 44kg
 - B. 52kg
 - C. 50kg
 - D. 60kg
23. You have been provided with a two-litre container and a twenty-litre jerrycan.



Bottle



Jerrycan

- How many bottles full of water will fill the jerrycan?
- A. 20
 - B. 8
 - C. 2
 - D. 10

24. A bus took 4 hours and 51 minutes to move to Nairobi. A lorry took 5 hours and 4 minutes to move to Nairobi. How many hours and minutes did the bus and the lorry take altogether?

- A. 9 hours 55 minutes
- B. 1 hour 47 minutes
- C. 8 hours 55 minutes
- D. 9 hours 50 minutes

25. Larry went to a shopping center to find out the types of services and goods offered. Which of the following is one of the services offered?

- A. Pencil
- B. Cloth repair
- C. Flask
- D. School sweater

26. Angela went to the market and bought goods worth sh 400. If she had sh 500, how much did she save?

- A. Sh 500
- B. Sh 900
- C. Sh 100
- D. Sh 400


27. Abdi had sh 1000 note. How many sh 200 notes will he get as a change?

- A. 4
- B. 6
- C. 3
- D. 5

28. Martin had a sh 500 note. He bought a stool for sh 300. What balance did he get?

- A. Sh 200
- B. Sh 800
- C. Sh 100
- D. Sh 900


29. The clock face below shows time when the school breaks for lunch.



What is the time?

- A. A quarter to one
- B. A quarter past one
- C. Half past twelve
- D. Half to twelve

30. How many squares are in the figure below?



- A. 4
- B. 5
- C. 6
- D. 7


KENYA INTER-COUNTY EXAMINATION



ENGLISH: LANGUAGE GRADE 4 - 2023

TIME: 1hour

Read the following story carefully then answer questions 1 to 6



Okutambuti told his audience, the one true God has great power. God made the world. He loves us very much. God is perfect. He wants us to live with Him in heaven. He made everything in six days and on the seventh day He took a rest. The problem we have is that, we are all sinners, wanting to do the wrong things, including telling lies, stealing, disrespecting others and disobeying God and our elders. However out of His rich kindness, God cannot let us continue being sinners. He punishes sinners by denying them eternal life. This is the reason why he sent his only son to die on the cross to redeem us from sin.

1. The word **perfect** has been underlined in the passage. What is its opposite?
A. Perfection
B. Unperfect
C. Imperfect
D. Perfectless
2. Wrong things include all the following **except** _____ as from the given story.
A. stealing
B. fighting
C. disobeying God
D. Lying
3. God created everything in _____ days.
A. four
B. seven
C. eight
D. six

4. What does God do with sinners?
- | | |
|---------------|------------------|
| A. Hates them | B. Ignores them |
| C. Kills them | D. Punishes them |
5. Jesus resurrected on the third day. To **resurrect** is to ____
- | | |
|----------------------|-----------------------|
| A. die on the cross | B. rise from the dead |
| C. have eternal life | D. save human beings |
6. Jesus died on the cross to _____
- | | |
|----------------------|-------------------------|
| A. save us from sins | B. take us up to heaven |
| C. pay for his sins | D. to go to his father |

Read the passage below and fill in the blank spaces with the correct option from the choices provided.

My mother looked as happy as a lark. ___7___ could not stop smiling. I asked ___8___ why and she explained. On Saturday, it will be your uncle Okwenda's wedding day. This is our ___9___ card to the wedding. We have waited for this wedding for a long time but as they say, "better late than ___10___." The day is near. Your uncle is getting ___11___ to a girl who is as beautiful as the ___12___.

- | | | | |
|-----------------|----------------|---------------|------------|
| 7. A. He | B. She | C. It | D. You |
| 8. A. him | B. them | C. she | D. her |
| 9. A. calling | B. celebration | C. invitation | D. success |
| 10. A. never | B. going | C. attending | D. apology |
| 11. A. divorced | B. linked | C. introduced | D. married |
| 12. A. peacock | B. sunset | C. king | D. dove |

Read the passage below then answer questions 13 to 19.

Once upon a time in the great village of Katambo, there lived an old man who had three cows, three goats and a horse. He loved his horse very much. One day the horse fell into a deep hole. Everyone tried to pull it out but they were unable. The old man therefore decided to painfully bury it alive. They started pouring soil from above right into the hole. The wise horse shoot off the soil and stepped on it. The more soil was poured the more the horse moved up. Finally the horse was able to stand on the soil and jumped out of the hole.

13. How many animals did the old man have?
- A. Three
B. Five
C. Seven
D. Six
14. A lion roars while a horse _____
- A. brays
B. neighs
C. barks
D. moos
15. The horse was as wise as _____
- A. a bat
B. an eagle
C. an owl
D. an elephant
16. How did the horse manage to get out of the hole?
- A. People removed it.
B. It shook off the soil
C. The old man removed it
D. It jumped out at once
17. The past tense of the word **bury** is
- A. buried
B. burried
C. burying
D. bury
18. The opposite of the word **wise** is
- A. stupid
B. clever
C. foolish
D. wisdom
19. The best title for the above story is
- A. Foolish horse
B. The old man
C. The wise horse
D. Soil helps the poor old man

Choose the correct spelt word

20. A. Suprise
B. Surprice
C. Surplise
D. Surprise
21. A. Tomorow
B. Tomorrow
C. Tommorrow
D. Tommorow
22. A. Receive
B. Recieve
C. Resive
D. Rissive

23. A. Writeing
C. Writteing
B. Writting
D. Writing

Choose the past tense of the underlined word

24. The butcher cut the meat.
A. cut
C. cuted
B. cutted
D. cutting
25. The thief steal from the supermarket down town.
A. stealing
C. stole
B. steals
D. stolen
26. I will drink a packet of milk.
A. drunk
C. drinks
B. drank
D. dranked

Give one word for the following.

27. Cows, goats, sheep _____
A. animals
C. cattle
B. wild animals
D. farm
28. Cabbage, spinach, kales _____
A. plants
C. food
B. vegetables
D. greens
29. Tables, chairs, cupboards _____
A. furnitures
C. tools
B. equipment
D. furniture
30. Books, pens, pencils, ruler _____
A. stationery
C. school items
B. stationary
D. bookshop

KENYA INTER-COUNTY EXAMINATION



ENGLISH:
COMPOSITION
GRADE 4 - 2023

Name: _____ Date: _____ TIME: 40mins

Write an interesting composition about:

MY NEW CLASS TEACHER

KENYA INTER-COUNTY EXAMINATION




KISWAHILI: LUGHA

GREDI YA NNE - 2023

MUDA: SAA 1

Soma mazungumzo yafuatayo kisha ujibu swali la 1 hadi la 5.



- Mwanafunzi:** Shikamoo mwalimu. Umeamkaje?
Mwalimu: Marhaba. Hujambo?
Mwanafunzi: Sijambo. Nimechelewa kufika shuleni.
Mwalimu: Kwa nini ukachelewa?
Mwanafunzi: Nilikuwa nikimsaidia mzee mmoja kuvuka barabara.
Mwalimu: Asante sana kwa hayo. Sasa mzee yuko wapi?
Mwanafunzi: Pale langoni. Ameketi pale..... (*Akionyesha kwa kidole*)
Mwalimu: (*Akianza mwendo*) Twende unionyeshe. (*Wote wanaelekea langoni*)
Mwalimu: Shikamoo mzee wangu.
Mzee: Marhabaa.....
Mwalimu: Tukusaidie vipi mzee wangu?
Mzee: Mnionyeshe njia ya kwenda mjini.
Mwalimu: Hujapotea. Utaelekea kaskazini mzee.
Mzee: Asante. (*Anainuka na kuelekea kaskazini*)

1. Jibu la **shikamoo** ni
A. asante
B. marhaba
C. shikamoo
D. sijambo
2. Ni nani alichelewa kufika shuleni?
A. Mwanafunzi
B. Mwalimu
C. Mzee
D. Hakuna
3. Ni kwa nini mwanafunzi hakufika shuleni mapema?
A. Alichelewa kuamka
B. Aliogopa mwalimu
C. Hakupenda shule
D. Alimsaidia mzee

4. Mzee alikuwa akifanya nini langoni?
 A. Kutazama
 B. Kuketi
 C. Kulinda
 D. Kusimama
5. Mjini kulikuwa upande gani?
 A. Kusini
 B. Magharibi
 C. Kaskazini
 D. Mashariki

Soma kifungu kifuatacho kisha ujibu swali la 6 hadi la 9

Hapo zamani fisi na mwewe walikuwa marafiki. Walipendana kama chanda na pete. Walitafuta mlo pamoja na kula pamoja. Siku moja kukawa na kiangazi. Walipata njaa sana. Wakakonda kama ng'onda. Hawakujua la kufanya. Walitembea msituni na kuona mzoga wa punda. Fisi alitokwa na mate na kuanza kula.

Mwewe alimwalia tu bila kula. Mwewe hakuzoea kula mizoga. Alilia sana na kusokotwa na tumbo. Fisi aliposhiba, alitoka mbio na kuingia kichakani. Muda haukupita akarudi akiwa na sungura. Alimwua sungura naye mwewe akafurahia chakula kile.

6. Fisi alikuwa rafiki wa nani?
 A. Mwewe
 B. Punda
 C. Tai
 D. Sungura
7. Neno mlo lina maana sawa na
 A. kinywaji
 B. maji
 C. mzoga
 D. chakula
8. Tunasema kukonda kama
 A. mwiba
 B. ng'onda
 C. fisi
 D. sindano
9. Ni wanyama wangapi wametajwa?
 A. Wanne
 B. Wawili
 C. Watatu
 D. Watano

Soma kifungu kifuatacho kisha ujibu swali la 10 hadi la 12

Wanafunzi wa gredi ya nne hupenda mimea. Soma jedwali hili kisha ujibu maswali.

Mwanafunzi	Mmea aupendao
Roda	Mpera
Asha	Mchungwa
Juma	Mpera
Limo	Mhindi
Yona	Mnanasi
Rehema	Mparachichi

10. Ni mmea upi unapendwa na watu wawili?
 A. Mchungwa
 B. Mhindi
 C. Mpera
 D. Mparachichi

11. Yona anapenda tunda lipi?

A. Hindi

C. Parachichi

B. Nanasi

D. Pera

12. Ni mmea gani hauwezi kutupa matunda?

A. Mpera

C. Mnanasi

B. Mchungwa

D. Mhindi

Soma kijangu kifuatacho kisha ujibu swali la 13 hadi la 15.

Je, unajua kufua nguo? Nguo chafu hunuka na huwa hazipendezi. Kila mtu anafaa kuwa safi wakati wote. Tunapotaka kufua nguo, huwa tunahitaji maji safi, sabuni na beseni. Baada ya kufua nguo ile, huwa tunasuuza kwa maji safi kuondoa sabuni.

Baada ya kusuuza tunafaa kuianika ili ikauke kisha kupiga pasi.

13. Ni nguo gani hunuka?

A. Chafu

C. Safi

B. Mpya

D. Mbaya

14. Ni nini hatuhitaji tunapofua nguo?

A. Nguo safi

C. Maji safi

B. Beseni

D. Sabuni

15. Chagua kitendo cha mwisho baada ya kufua nguo?

A. Kusuuza

C. Kufua

B. Kuanika juani

D. Kupiga pasi

Kutoka swali la 16 hadi la 20, chagua jibu bora zaidi kujaza mapengo.

Chui na Duma ___16___ katika kijiji ___17___. Wote waliogopana sana. Waliogopana kwa sababu walikuwa ___18___ watoto wengi. Chui na Duma hawakutaka watoto ___19___ kucheza nje. Kila mmoja aliogopa watoto wake wasiliwe. Siku ___20___ mtoto wa chui alitoka nje na kuliwa na Duma.

16. A. yaliishi

B. aliishi

C. waliishi

D. viliishi

17. A. moja

B. kimoja

C. mamoja

D. mbili

18. A. na

B. ni

C. wa

D. cha

19. A. chao

B. yao

C. wao

D. lao

20. A. ya moja

B. mmoja

C. kimoja

D. moja

Kutoka swali la 21 hadi la 30, jibu kulingana na maagizo

21. Chagua kinyume cha ingia?
A. Toka
B. Enda
C. Rudi
D. Ndani
22. Chagua neno lenye maana sawa na ziara.
A. njia
B. shamba
C. safari
D. wageni
23. Tumia alama ya kuakifisha kujaza pengo.
Ala ___ mti umeanguka.
A. ,
B. !
C. .
D. ?
24. Ni neno gani litapatikana kwanza ukifuata alfabeti?
A. Dakika
B. Pesa
C. Habari
D. Chakula
25. Chagua wingi wa: Mtoto anacheza.
A. Watoto wanacheza
B. Mtoto anacheza
C. Mtoto wanacheza
D. Watoto anacheza.
26. Mtu akikuambia paukwa! Utajibu vipi?
A. Sawa
B. Kiza
C. Pakawa
D. Maziwa
27. Chagua chombo cha teknolojia.
A. paka
B. rununu
C. kikombe
D. kondoo
28. Ni nini maana ya pacha?
A. Ndugu waliozaliwa siku moja.
B. Kaka au dada wa mzazi mmoja
C. Watoto wa ndugu yako
D. Watu ambao hufanana
29. Tumia kiunganishi kujaza pengo.
Masi alioga _____ hakuchana nywele.
A. kama
B. ni
C. lakini
D. sababu
30. Ni nini maana ya msemu: Kukata tamaa?
A. Kufanya bidii
B. Kufa moyo
C. Kuwa na njaa
D. Kushiba sana

KENYA INTER-COUNTY EXAMINATION INTEGRATED SCIENCE



GRADE 4 - 2023

Time: 1hr 40mins

SECTION A:

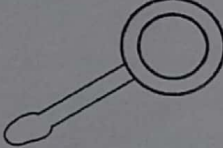



SCIENCE & TECHNOLOGY (15mks)

1. Andy listed what can be observed in the sky in both the day and night. Which one was correct?
A. The sun B. The clouds
C. The moon D. The stars
2. I am the king of the jungle. I roar very loudly. Who am I?
A. Lion B. Elephant
C. Buffalo D. Cheetah
3. A grade four learner wrote the examples of sounds that warn people. Which one among the sounds below do **not** warn people?
A. Fire engine alarm B. Ambulance siren
C. Whistle D. Laughing
4. The following are signs and symptoms of teeth problems. Which one is **not**?
A. Cavities B. Bad breath
C. Tooth decay D. Uneven teeth
5. Boni was asked to state ways that can be used to manage waste in the school environment. He mentioned all the following **except**
A. reusing waste B. recycling waste
C. keeping waste D. reducing waste
6. Grade three learners were discussing about how energy can be conserved. Which pair was correct?
A. Using renewable sources of energy and sparingly
B. Using energy efficiently and wastefully
C. Using energy wastefully and sparingly
D. Using energy excessively and efficiently

7. The following are renewable sources of energy. Which one is **not**?
A. Wind B. Petroleum
C. Solar D. Biogas
8. During Science and Technology nature walk, Koki took a picture of a plant growing in the school compound as shown below.



- Which characteristic of plants is shown in the picture above?
- A. Plants grow B. Plants breathe
 - C. Plants reproduce D. Plants feed
9. Below are examples of things collected during nature walk.
-stones -butterfly -grass
-logs of wood -lizard -weeds
From the list above, which one is a non-living thing?
A. Lizard B. Grass
C. Weeds D. Stones
 10. When collecting plant samples during Science lesson, learners were to take safety measures when handling the plants. Which one is **not** one of the safety measures?
A. Wash your hands after handling plants
B. Wear gloves
C. Wear news dress
D. Wear gumboots

11. Pupils were advised **not** to use plastic bags when collecting plant samples. What is likely to be the main reason for this?
- They pollute the environment
 - They are cheap
 - They easily rot
 - They carry few samples
12. When going to study plants in the environment, you need the following items **except**
- digital device
 - dustbin
 - notebook
 - dust coat
13. Choose from the diagrams below an item that can be used to protect your eyes during nature study.
- 
 - 
 - 
 - 
14. Daniel wanted a digital device that would help him take photos of plants in the school compound. Which one is it?
- Camera
 - Calculator
 - Speaker
 - Remote control
15. A cow and maize plant are examples of
- non-living things
 - invertebrates
 - vertebrates
 - living things

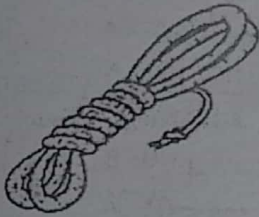
SECTION B:

HOME SCIENCE (10mks)

16. All the things we use when preparing and eating food are called
- sufuria
 - spoons
 - utensils
 - cups
17. Boiling water kills
- diseases
 - dirt
 - germs
 - animals
18. We sprinkle a little water on the floor before sweeping to prevent
- mud
 - dust
 - germs
 - air
19. After sweeping the house, we throw the rubbish in a
- dust bin
 - kitchen
 - toilet
 - road
20. Which of the following games is **not** played in your locality?
- Rope skipping
 - Football
 - Computer games
 - Fighting
21. What do we use to clean our nose?
- Sponge
 - Towel
 - Handkerchief
 - Duster
22. Gloria likes eating dirty food. She can get
- stomachache
 - chest pain
 - headache
 - corona

23. Choose an item that is **not** used when playing games at school.

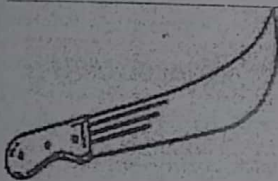
A.




B.



C.



D.



24. What should you do when you feel sick at school?

A. Go home

B. Sleep

C. Cry

D. Tell the teacher

25. Jacob was playing football in the field. Playing the game is a way of

A. exercising

B. resting

C. sleeping

D. eating

SECTION C:

AGRICULTURE (10mks)

26. Residents of a certain county wanted to keep safe from drought. What would they **not** do?

A. Practise irrigation

B. Plant drought resistant crops

C. Conserve water

D. Cut down trees

27. The following are the main types of soil. Which one is **not**?

A. Silt

B. Sand

C. Clay

D. Loam

28. Domestic animals give us different types of food. Which one is **wrongly** matched with the food it gives?

	Animal	Food
A.	Cow	Milk
B.	Pig	Mutton
C.	Chicken	Eggs
D.	Goat	Meat

29. Grade four learners were taking care of plants in their school compound. They used all the methods below **except**

A. watering

B. pruning

C. burning

D. weeding

30. One of the following crops can be established in the kitchen garden. Which one is it?

A. Cabbages

B. Tea

C. Avocado

D. Rice

31. The type of soil that is sticky when wet and used in modelling is called

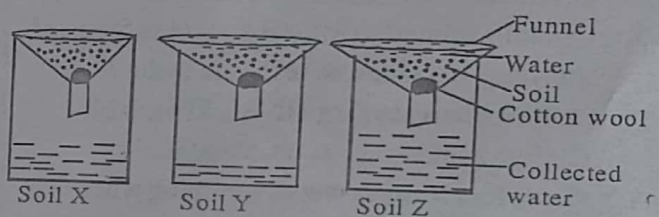
A. sand

B. loam

C. alluvial

D. clay

32. The set-up below was used to find out the ability of soil to hold water.



Which soil type is likely to be sand soil?

A. Soil X

B. Soil Z

C. Soil X and Y

D. Soil Y

33. I am a type of soil. I am good for growing crops. Who am I?

A. Silt

B. Clay

C. Loam

D. Sand

34. In which of the soil types below would it take longer for water to drain through?

A. Clay

B. Loam

C. Sand

D. Red volcanic soil

35. Which of the following birds is an enemy to a farmer?

A. Ostrich

B. Eagle

C. Swan

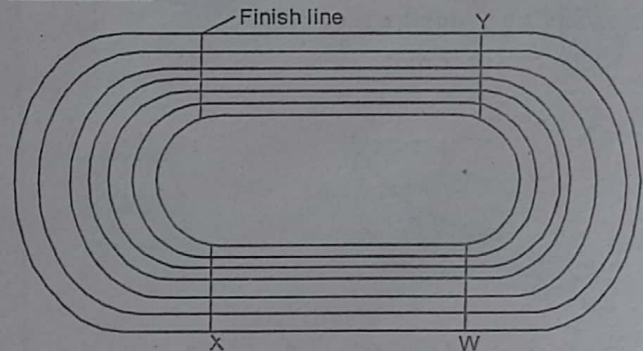
D. Vulture

PHYSICAL & HEALTH EDUCATION (15mks)

36. Grade three learners are practising dodging. Which of the following games do **not** require dodging skills?
A. Soccer B. Handball
C. Swimming D. Tag rugby
37. You are dribbling a ball with your partner. In which direction can you dribble easily?
A. Backward B. Forward
C. Sideways D. Upwards
38. The acronym 'H.E.L.P' is used in water safety. What does the initial 'E' represent?
A. Escape B. End
C. Endure D. Except
39. The following are basic swimming skills. Which one is **not**?
A. Kicking B. Running
C. Arm action in water D. Starfish float
40. Opondo wanted to practise various types of dynamic balances. Which one is **not**?
A. Beam balance B. Backward roll
C. Crab walk D. V-balance
41. Grade four learners were swimming when one of them started drowning. What should they do?
A. Call for immediate help
B. Run away
C. Celebrate
D. Continue swimming
42. The following are non-locomotor skills **except**
A. jumping for a distance
B. pulling
C. pushing
D. turning
43. What is an example of a game that uses an overarm throw?
A. Volleyball B. Rounders
C. Handball D. Rugby
44. Your school has organised a sporting day. Which of the following is **not** a safety measure to observe when playing during the event?

- A. Remove obstacles from the field
B. Push others as you play
C. Wear the correct clothes as you play
D. Observe rules of the games

Use the athletic track below to answer questions 45 and 46.



45. Where would be the starting point for 1500m?
A. Finishing line B. W
C. Y D. X
46. Koech was participating in 200m race. Where should he go for the start?
A. W B. X
C. Z D. Finishing line
47. The following are ways of taking care of athletic tracks in your community. Which one is **not**?
A. Using as dumpsite
B. Clearing bushes
C. Collecting wastes from it
D. Marking track lines frequently
48. The two commands in standing start in order are
A. 'Go' and 'On your marks'
B. 'Set and 'Go'
C. 'On your marks' and 'Go'
D. 'Go' and 'Set'
49. Fair competition, equality, respect for rules and players in games is called
A. safety rules B. fair play
C. team work D. role play
50. What is the shape of an athletic track?
A. Oval B. Circle
C. Rectangle D. Square

KENYA INTER-COUNTY EXAMINATION



CREATIVE ARTS & SOCIAL STUDIES

GRADE 4 - 2023

Time: 1hr 40mins

PART I: ART AND CRAFT (10mks)

1. Some learners in a group observed the image below




They observed that the hair was drawn using _____ lines.

- A. straight B. wavy
C. zigzag D. vertical
2. The value gradation strip below was made by grade four learners.



Some boxes are lighter and others are darker to show different

- A. values B. colours
C. forms D. papers
3. Falin drew an image as a gift to his small sister. He used a pencil to shade and a small piece of tissue to smear. This technique is known as
- A. painting B. pencil work
C. smudging D. drawing
4. The image below shows still life objects shaded by Art and Craft teacher.

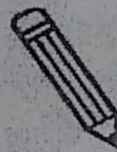


Some parts are bright because

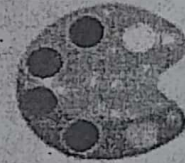
- A. they show where the light source is
B. they look nice that way
C. they are black and white pots
D. they need shadows
5. Which one of the dry media below can be used in shading?
- A. Paint B. Dye colour
C. Water D. Charcoal
6. Your teacher instructed you to draw and shade some images using dry media only. Which one of the following materials did you use?
- A. B.



C.



D.



7. You saw a fabric printed using a leaf and paint.



The type of print above is called

- A. fabric print B. paint print
C. leaf print D. stamp print

8. Grade four learners made the ornament below.


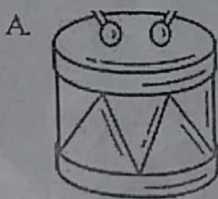


The ornament is called

- A. beads B. necklace
C. bracelet D. belt
9. Which one of the materials can be used to make necklace ornament if there are no beads or pearls?
A. Seeds B. Tissue paper
C. Fruits D. Tooth picks
10. Amani was very excited about her new crayon etching project. She took her items to start the task. Her first task was to
A. paint black paint on the surface
B. colour using bright coloured crayons
C. clean the brush off the black paint
D. scratch out the art

PART 2: MUSIC (10mks)

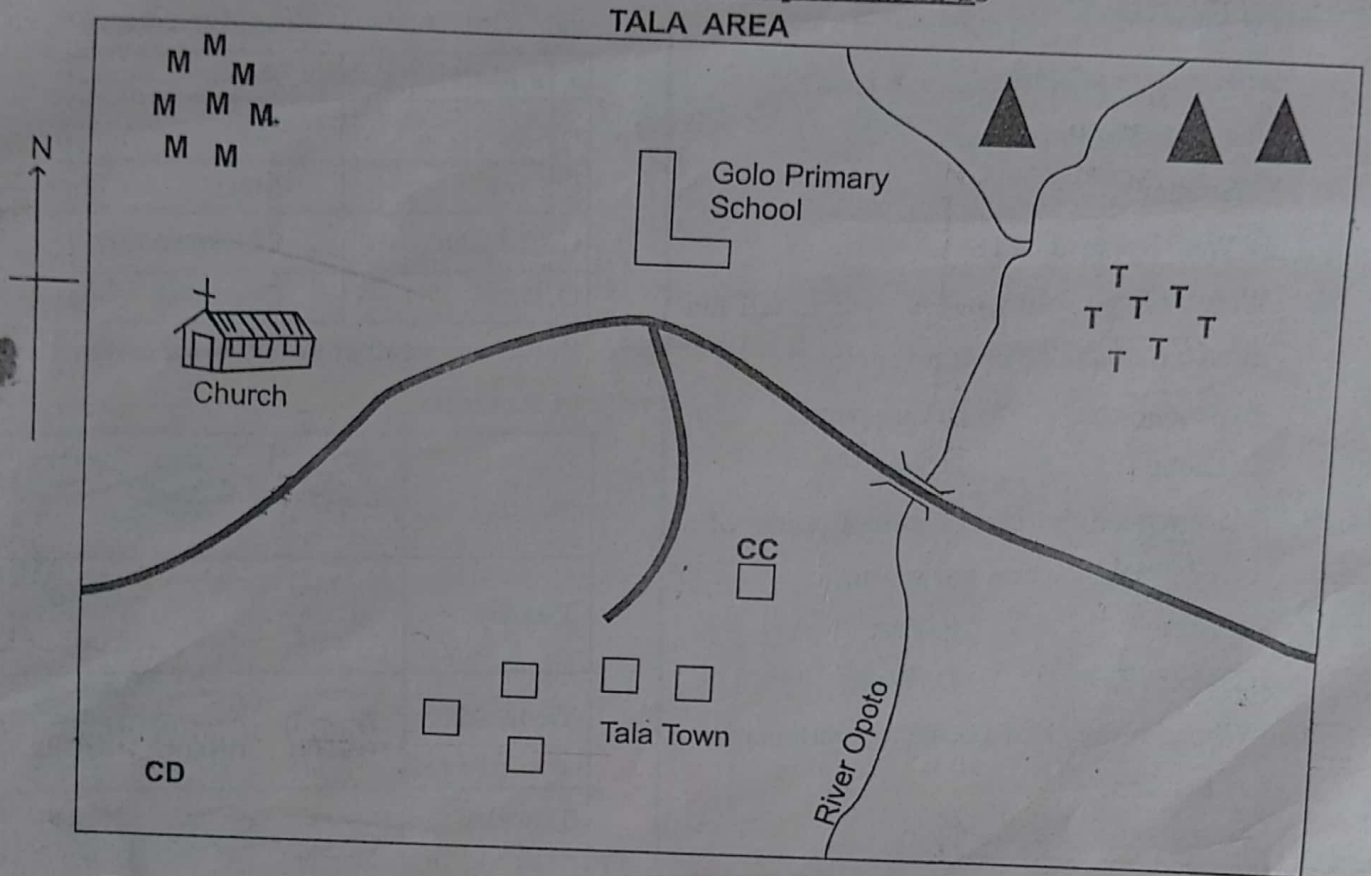
11. We stand attention when raising the flag to show _____ for our country.
A. love B. joy
C. respect D. peace
12. Mothers sing a _____ song for the baby to sleep.
A. singing game B. topical
C. patriotic D. lullaby
13. Which of the following is **not** a musical instrument?



14. When we go to church on Sunday we sing _____ songs to praise God.
A. sacred B. action
C. good D. topical
15. Young children sing singing games as they
A. pray B. play
C. sleep D. eat
16. Which one is a sacred song?
A. Mungu yu mwema
B. Mabata madogo
C. Tushangilie Kenya
D. Lala mtoto lala
17. On Madaraka day people sing patriotic songs to praise their
A. God B. country
C. home D. baby
18. Songs that we sing as we show actions like sweeping are called
A. action songs
B. sacred songs
C. singing games
D. lullay songs
19. Mary likes singing alone. This is called
A. loud singing
B. solo singing
C. choral singing
D. soft singing
20. The white colour on our national flag stands for
A. blood
B. people
C. vegetation
D. peace

PART 3: SOCIAL STUDIES (35mks)

Study the map of Tala Area below and use it to answer questions 21-25



KEY

MMM	Maize farms	CC	Chief's Camp	T	Tarmac road
CD	Cattle Dip	▲ ▲	Hills	TTT	Tea plantations

21. The main religion of people in Tala Area is
 - A. Hinduism
 - B. Christianity
 - C. Islam
 - D. Judaism
22. Who is the main local administrator in Tala area?
 - A. Chief
 - B. Village elder
 - C. Assistant chief
 - D. Governor
23. The main food crop grown in Tala area is
 - A. tea
 - B. coffee
 - C. maize
 - D. millet
24. People in Tala area need water for their domestic use. Where would they get the water from?
 - A. Boreholes
 - B. Lakes
 - C. Springs
 - D. River Opoto
25. What is the direction of Golo primary school from Tala town?
 - A. East
 - B. North
 - C. South
 - D. West
26. How many governors are there in Kenya?
 - A. 47
 - B. 67
 - C. 1
 - D. 290

27. Who among the following is an elected leader from a ward?

- A. Member of County Assembly
- B. Member of Parliament
- C. Senator
- D. Ward Representative

28. Which of the following is used to tell the direction of one place from another?

- A. Roads
- B. Compass
- C. Globe
- D. Sun

29. Mary named the main cardinal points of a compass. Which one was **wrong**?

- A. North
- B. East
- C. North East
- D. West

30. Who is the head of a county government?

- A. Senator
- B. President
- C. Member of County Assembly
- D. Governor

31. Which of the following is **not** a child right?

- A. Right to work
- B. Right to name
- C. Right to food
- D. Right to healthcare

32. Pat's father wanted to find what to do to make money. Which one was **not** the best way to get money?

- A. Be a teacher
- B. Be a robber
- C. Be a nurse
- D. Be a shopkeeper





33. Learners can use the following to water flower beds in their school compound. Which one is odd one out?

- A. Watering can
- B. Sprinkler
- C. Sufuria
- D. Hose pipe

34. Brian matched the animals and the foods they eat. Which one was **wrongly** matched?

	Animal	Food
A.	Cat	Milk
B.	Cow	Meat
C.	Chicken	Chicken marsh
D.	Dog	Dog meal

35. Below are weather symbols for certain days of the week.

Monday	
Tuesday	
Wednesday	
Thursday	

Which day would be the best to wash clothes?

- A. Tuesday
- B. Thursday
- C. Monday
- D. Wednesday

36. Grade four learners listed down sources of water. Which one was **incorrect**?

- A. Rivers
- B. Taps
- C. Lakes
- D. Rain

37. What can we add to soil to make it wet?

- A. Water
- B. Salt
- C. Sugar
- D. Ash

38. The following are wild animals. Which one is **not**?

- A. Snake
- B. Monkey
- C. Lion
- D. Cow

39. Which of the animals below live in water?

- A. Sparrow
- B. Tilapia
- C. Hawk
- D. Tortoise

40. The two main unfavourable weather conditions are

- A. floods and rain
- B. wind and rain
- C. drought and floods
- D. drought and rain

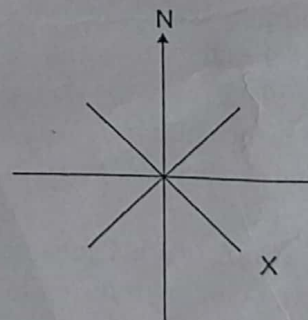
41. The following are ways of keeping safe from unfavourable weather conditions. Which one is **not**?
- Wear gunboots when in floods
 - Carry umbrella when it rains
 - Wear vest when it is too cold
 - Wear rain coats when it rains
42. After long drought is a certain county, people were advised to find ways of preventing drought in future. Which one is **not** correct?
- Do afforestation
 - Do reafforestation
 - Do water harvesting
 - Do deforestation
43. A place where wild animals are kept is called
- zoo
 - home
 - orphanage
 - hotel
44. People who travel to see wild animals in a park are called
- teachers
 - students
 - tourists
 - parents
45. Fire has out broken in your school kitchen. Which of the following would be the worst to use to extinguish the fire?
- Fire extinguisher
 - Dry grass
 - Soil
 - Water
46. In the olden days, what did people use to cook food?
- Firewood
 - Electricity
 - Gas
 - Kerosene
47. Soila's school is near a market place. How can Soila help in keeping the market place clean?
- Throw wastes on the streets
 - Encourage people to use plastic bags
 - Direct sewage water to the market place
 - Sweep and collect garbage in the market
48. Angela met a stranger on her way home from school. Which of the following should she **not** do?
- Run away
 - Call for help
 - Accept ride on the stranger's motorbike
 - Refuse gifts from the stranger
49. A person you do not know is called a
- friend
 - stranger
 - Imam
 - priest

50. The following are unsafe places to be in the environment. Which one is **not**?
- Busy roads
 - Forests
 - Mining sites
 - Church
51. As Aaron was walking along the road, he noticed the road sign below.



What does it mean?

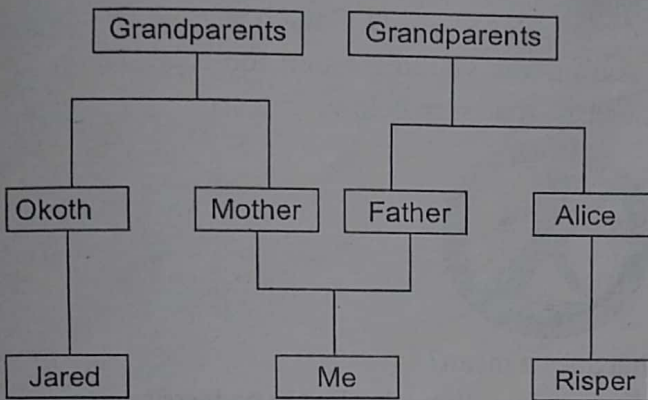
- Pedestrians allowed
 - No pedestrians
 - Stop
 - Danger ahead
52. The following are cultural activities that bring people together in the community. Which one is **not**?
- Cattle raiding
 - Wedding
 - Thanksgiving
 - Sporting events
53. Grade four learners were asked to suggest why we should protect plants. Which one was **wrong**?
- Source of food
 - Provides shade
 - Pollute environment
 - Brings rain
54. Who among the following is **not** a member of a nuclear family?
- Brother
 - Father
 - Mother
 - Uncle
55. What is the name of the direction in the compass point marked X?



- South
- South East
- East
- South West

SECTION A: CRE (15mks)

Use the family tree drawn below to answer questions 56 and 57.



56. Who are my cousins?
 A. Okoth and Jared B. Risper and Alice
 C. Risper and Okoth D. Jared and Risper
57. Who is my uncle?
 A. Okoth B. Alice
 C. Risper D. Jared
58. Who was the first woman to be created by God?
 A. Adam B. Eve
 C. Sarah D. Mary
59. Adam and Eve disobeyed God by
 A. walking naked
 B. wearing clothes
 C. eating the forbidden fruit
 D. eating the good fruits
60. A learner was asked to describe what the first four books of the New testament are called. What was his description?
 A. Gospel B. Golden
 C. Gossips D. Goliath
61. What lesson do we learn from the story of Moses and the burning bush?
 A. Make noise in the church
 B. Respect holy places
 C. Play football in the church.
 D. Wear high heel shoes when going to the church
62. According to the book of Jonah chapter 1:1-17, who disobeyed God by refusing to go to Nineveh?
 A. James B. John
 C. Jonah D. Joseph

63. Who healed Naaman of his leprosy?
 A. Prophet Elijah B. Prophet Isaiah
 C. Prophet Elkanah D. Prophet Elisha
64. Who were the three Hebrew men who were thrown into fire by the King?
 A. Meshack, Shadrack, Abednego
 B. Nathaniel, Daniel, Abednego
 C. Abednego, Shadrack, Samson
 D. Elijah, Elisha, Meshack
65. Match the number of boys who made fun of Elisha and the number of she-bears that killed them

Boys	She-bears
A. 2	42
B. 40	2
C. 42	2
D. 2	40

66. The home town where Jesus grew up as a child was
 A. Jericho B. Nazareth
 C. Bethlehem D. Jerusalem
67. What do Christians celebrate during Easter celebrations?
 A. The birth of Jesus Christ
 B. The baptism of Jesus Christ
 C. The transfiguration of Jesus Christ
 D. The resurrection of Jesus Christ
68. Who among the following people showed dishonesty to the Holy Spirit?
 A. James and John
 B. Mary and Martha
 C. Ananias and Saphira
 D. Adam and Eve
69. God made man in his own _____ and likeness.
 A. home B. image
 C. garden D. soil
70. Which of the faces drawn below is showing disappointment?

