

GRD 5 ENDTERM 2 EXAM

ALL SUBJECTS

Series 1

THE KENYA INTERCOUNTY EXAMS {SERIES 1}

A Compilation of Assessment Questions Covering the Syllabus upto End of term 2 as per the Curriculum Design

Note: Contact Mr Machuki 0724333200 for Playgroup to Grade 3 exams as well



For Marking Schemes Contact
0724333200 / 0768321553 or

Order online at:

www.kenyaeducators.co.ke

KENYA EDUCATORS CONSULTANCY

KENYA INTER-COUNTY EXAMINATION



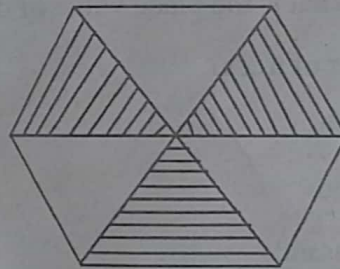
MATHEMATICS

GRADE 5- 2023

TIME: 1hour 20 minutes

1. A road building company used 39048 tonnes of ballast to repair a road. What is the total value of digit 9 in the number?
A. 90
B. 900
C. 9000
D. 90000
2. During tree planting day, 175920 trees were planted. What is the place value of digit 7 in the number of trees?
A. Hundreds
B. Thousands
C. Ten thousands
D. Hundred thousands
3. There are 344929 people in a constituency. What is the number of people in words?
A. Three forty four thousands nine hundred and twenty nine
B. Three hundred and forty four thousands nine hundred and twenty nine
C. Three thousand forty four thousand nine hundred and twenty nine
D. Three hundred and forty four thousand three two nine
4. There are 178 boys in a school. What is the number of boys rounded off to the nearest tens?
A. 180
B. 170
C. 200
D. 175
5. One of the pairs of factors of 48 is 6. What is the other number in the pair?
A. 7
B. 6
C. 8
D. 9
6. A fruit dealer sells apples in groups of 4. Which of the numbers of apples below can be arranged in groups of 4?
A. 18
B. 36
C. 42
D. 54

7. What are the two missing numbers in the number pattern?
81, 75, 69, 63, _____, _____, 45.
A. 57, 51
B. 57, 53
C. 57, 50
D. 51, 57
8. Tom was born in the year 2009. What is the digit 9 written in Roman numbers?
A. VIII
B. XI
C. X
D. IX
9. A meeting was attended by 1258 men and 1363 women. How many people attended the meeting altogether?
A. 2511
B. 2611
C. 2621
D. 2521
10. Runo had 1162 eggs. When transporting the them, 157 eggs got broken. How many eggs remained?
A. 1005
B. 1015
C. 1105
D. 1115
11. There are 28 benches in a hall. Each bench can accommodate 12 people. How many people can be seated in the hall?
A. 281
B. 336
C. 286
D. 226
12. There were 86 avocados in a basket. They were packed in paper bags each holding 6 avocados. How many avocados remained?
A. 6
B. 5
C. 2
D. 1
13. Seventy two bananas were shared among 8 children. How many bananas did each child get?
A. 80
B. 10
C. 7
D. 9
14. Daniel drew the figure below



What fraction did he shade?

- A. $\frac{3}{7}$
B. $\frac{1}{2}$
C. $\frac{3}{9}$
D. $\frac{3}{4}$
15. What is $3\frac{1}{7}$ converted into improper fraction?
A. $\frac{20}{7}$
B. $\frac{21}{7}$
C. $\frac{22}{7}$
D. $\frac{23}{7}$

16. Caren ate 5.74 of an orange. What is the place value of digit 4?


- A. Tenths
- B. Hundredths
- C. Tens
- D. Hundreds

17. Write the following numbers starting from the largest to the smallest.

3.51, 3.09, 3.25, 3.91

- A. 3.91, 3.09, 3.51, 3.25
- B. 3.09, 3.25, 3.51, 3.91
- C. 3.09, 3.51, 3.25, 3.91
- D. 3.91, 3.51, 3.25, 3.09

18. Using a ruler, measure the length of line PQ below.

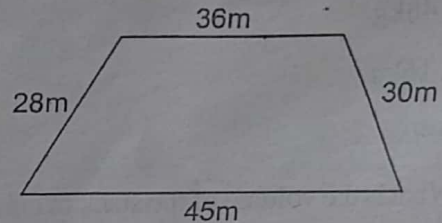


- A. 7cm
- B. 8cm
- C. 7.5cm
- D. 8.5cm

19. A tailor bought a cloth measuring 6m 80cm long. What is the length in centimetres?

- A. 68cm
- B. 6.8cm
- C. 680cm
- D. 6800cm

20. Njeri's farm is in the form of the shape drawn below.




What is the perimeter of the farm?

- A. 139m
- B. 129m
- C. 66m
- D. 73m

21. A toy car is made using a wire 1m 20cm long. What length of wire is required to make 6 such toys?

- A. 7m
- B. 72m
- C. 7m 20cm
- D. 720m

22. A classroom is in the shape of a rectangle as shown below.




What is the area of the classroom?

- A. 42m²
- B. 21m²
- C. 52m²
- D. 104m²

23. Mwilu had twelve $\frac{1}{4}$ kg packets of salt. How many kilograms of salt did he have?

- A. 3kg
- B. 48kg
- C. 16kg
- D. 8kg

24. What is the volume of the stack of cubes drawn below?



- A. 24
- B. 96
- C. 64
- D. 80

25. A meeting started 2 hours 30 minutes after mid-day. What is the time in **am** or **pm**?

- A. 2.30am
- B. 2.30pm
- C. 14.30pm
- D. 14.30am

26. Work out

Weeks	Days
17	3
- 9	6
<hr/>	

- A. 8 weeks 3 days
- B. 7 weeks 3 days
- C. 7 weeks 4 days
- D. 8 weeks 4 days

27. A teacher had w exercise books. She shared the exercise books equally among eight pupils. How many exercise books did each pupil get?


- A. $\frac{w}{8}$
- B. $w + 8$
- C. $8w$
- D. $w - 8$

28. How many lines of symmetry can be drawn in an equilateral triangle?

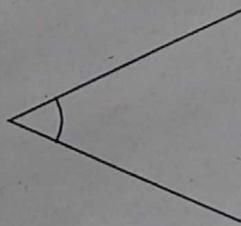
- A. 2
- B. 3
- C. 1
- D. 4

29. Which of the angles drawn below is an acute angle?


A.




C.



B.



D.



30. Among the following, which one is not a basic need?

- A. Air
- B. Water
- C. Sleep
- D. Mobile phone

KENYA INTER-COUNTY EXAMINATION



ENGLISH: LANGUAGE GRADE 5 - 2023

TIME: 1hour

Read the following conversation carefully then answer questions 1 to 5



Lion: Good afternoon to you all

Animals: Good afternoon your majesty our dear king.


Lion: Today I have called you all to this meeting ground for two very important issues. First and very important is the drought that has affected all of us for two years now. We need an urgent solution to it. Secondly is the theft among us that is on the increase. Let me invite the tortoise who is our Prime Minister to give us the way forward.

Tortoise: Thank you very much our majesty the king. On the first matter we are all going to join hands and drill a well that is going to give us water. Secondly a warning is here issued that anyone caught stealing will be sent away from this kingdom.

- Who is the king of the jungle?
A. Animals
B. Tortoise
C. Lion
D. The Prime Minister
- What was the most important matter that was addressed by the king?
A. The issue of theft in the kingdom
B. On how they should catch the thieves
C. How to live in harmony
D. Drought that had affected them
- The word **king** has been underlined in the passage. What is its opposite?
A. Princess
B. Queen
C. Kingdom
D. Prince
- Who was the Prime Minister in the animals' kingdom?
A. Lion
B. Elephant
C. Rhino
D. Tortoise

5. How will thieves be punished if caught?
- A. Punished by digging the well
 B. Sent away from the kingdom
 C. Being caned publicly
 D. Being killed

Read the passage below then answer questions 6 to 9



Now children, I will tell you about the programme for Saturday. The activities will start at 2.00pm. We will sing the National Anthem and raise the National flag. At five minutes past two o'clock grade one will be starting the programme with a poem. Ten minutes later, they will be followed by some short drama pieces by grades two, three and four. This will take a total of 25 minutes. Next grade five will come in with a traditional fork song to conclude up the entertainment.

6. On what day were the events to take place?
- A. Monday
 B. Friday
 C. Saturday
 D. Sunday
7. What were the grade ones presenting?
- A. Drama
 B. A fork song
 C. Poem
 D. A play and a traditional fork song
8. _____ will present a traditional fork song.
- A. Grade four
 B. Grade one
 C. Grade six
 D. Grade five
9. How many classes presented short drama pieces?
- A. Three
 B. Two
 C. Four
 D. One

Read the passage below then answer questions 10 to 12.



Butterflies have beautiful coloured wings. They usually dance happily, flying from one place to another. Sometimes they just fly without going anywhere until they come to a place where they can settle. There are many children who have a lot of fun chasing butterflies as they fly over grass and small bushes.

10. The above passage is about
- A. insects
B. grass
C. butterflies
D. children running around
11. The word **happily** has been underlined in the passage. What part of speech is it?
- A. Noun
B. Verb
C. Adverb
D. Adjective
12. After flying aimlessly, butterflies
- A. keep on following the wind throughout
B. lay eggs when they see learners
C. eat leaves, flowers and nectar
D. settle when they reach a suitable place

Read the passage below then answer questions 13 to 15.



At the age of six years, Lenku was allowed to graze cattle at a distance from their homestead. As a young moran he never went to school and his entire life revolved around his family's livestock. Once he met an angry lion that got him very scared. He quickly ran to the village and called other morans. He recalls the lion was killed but not before it had killed several cows and injured a moran.

13. Lenku's people were
- A. hunters
B. traders
C. pastoralists
D. gatherers
14. As a young moran, what role did Lenku play in the family?
- A. Hunting for food
B. Farming
C. Going to school
D. Taking care of family livestock
15. What got Lenku very scared at one given time of his life as a young moran? He
- A. went grazing the animals alone
B. met an angry lion
C. got attacked by a lion
D. lost some of the animals he was grazing

Read the passage below and fill in the blank spaces with the correct option from the choices provided.

"Stop that thief 16" the old woman 17." Arrest that man! He has 18 my handbag." The woman 19 on the ground where she had been pushed by the 20.

16. A. ? B. , C. . D. !
17. A. stated B. explained C. cried D. whispered
18. A. stealed B. stolen C. stollen D. stole
19. A. lied B. laid C. lain D. lay
20. A. thief B. theif C. thieves D. theef

Outline the plural form of the underlined word.

21. The governor is the head of the county.
A. County
B. Countyes
C. Counties
D. Countises
22. My mother sent me to buy a loaf of bread.
A. Loafs
B. Loaves
C. Loafes
D. Loaf
23. That carpenter makes very good furniture.
A. Furniture
B. Furnitures
C. Furnituroses
D. Furnitures

Complete the sentences with the correct question tags.

24. Kamau can play football, _____?
A. can he
B. can't he
C. will he
D. doesn't he
25. I am a good listener, _____?
A. am I
B. amn't I
C. aren't I
D. won't I
26. We should always respect our teachers, _____?
A. shouldn't we
B. shall we
C. should we
D. shalln't we

Complete the following sentences correctly.

27. Calf is to cow as _____ is to an elephant.
A. fowl
B. cub
C. gander
D. calf
28. Bird is to nest as bee is to _____.
A. tree
B. hive
C. box
D. hole

Outline the opposite of the following words.

29. Deep
A. deepest
B. near
C. shallow
D. undeeep
30. Beautiful
A. handsome
B. smart
C. bad looking
D. ugly

KENYA INTER-COUNTY EXAMINATION



**ENGLISH:
COMPOSITION
GRADE 5 - 2023**

Name: _____ Date: _____ TIME: 40mins

Write an interesting composition about :

MARKET DAY


KENYA INTER-COUNTY EXAMINATION



KISWAHILI: LUGHA GREDI YA TANO - 2023

MUDA: SAA 1

Soma mazungumzo yafuatayo kisha ujibu swali la 1 hadi la 5



Kaka: Hujambo dada. Umeamkaje?

Dada: Sijambo. Nimeamka vyema. Nashukuru Mola.

Kaka: Pia mimi sina neno ila usiku niliota ndoto ya ajabu.

Dada: (Akimkaribia kakaye) Ndoto ya ajabu? Nimekaa sana bila kuota.

Kaka: Nilikuwa ulimwengu mwingine. Nilikuwa mfalme wa watu wengi. Walinikuta katika kasri.

Dada: Aha! Ndoto nzuri kaka. Kuwa mfalme si mchezo. (Akichekacheka). Wewe utaongoza nani?

Kaka: Ninaweza kuwaongoza watu wa umri wangu. Unajifanya hujui mimi ni kiranja wa darasa letu. Mimi ni kiongozi.

Dada: Hiyo ndiyo sababu hapa nyumbani huniheshimu. Hujui mimi ni mkubwa wako? Nimekuzidi umri unafaa kuniheshimu.

Kaka: (Akianza kutafuta mkoba wake) Usijali. Mimi mtoto wa kiume. Umeuona mkoba wangu?

Dada: Haha! Mfalme kasahau alipoweka mkoba? Uangalie kochini.

Kaka: Tutaonana jioni. Ngoja nielekee uwanjani.

Dada: Inshallah! Tutaonana.

1. Mazungumzo haya ni ya wakati gani?

A. Jioni

B. Alasiri

C. Asubuhi

D. Usiku

2. Ni nani aliota ndoto ya ajabu?

A. Mtoto msichana

B. Watoto wote

C. Mtoto wa kike

D. Mtoto mvulana

3. Je, mfalme huishi wapi?

A. Kasri

B. Jumba

C. Ikulu

D. Mjini

4. Kulingana na mazungumzo haya, ni nani alikuwa kiongozi?
 A. Dada pekee
 B. Kaka pekee
 C. Kaka na dada
 D. Wanafunzi wote
5. Ni maagano gani yametumika katika mazungumzo haya?
 A. Tutaonana
 B. Inshallah
 C. Hujambo
 D. Nimeamka vyema

Soma kifungu kifuatacho kisha ujibu swali la 6 hadi la 9

Familia ya Mzee Omari huishi mjini. Bwana Omari huishi na mkewe na watoto wake wanne. Wao huishi raha mustarehe kwani wao ni matajiri. Bwana Omari ni daktari. Naye mkewe ni mwalimu. Watoto wa Bwana Omari wana adabu. Wao huelewa kuwa heshima si utumwa. Shuleni, wao hupendwa na walimu na pia wanafunzi. Wana bidii kama nyuki. Kila wakati wao hushika usukani wanapofanya mtihani.

Watoto wa bwana Omari hupenda mchezo. Omari na Karo hupenda soka. Naye Eliza na Roda hupenda mpira wa pete. Huwahimiza wenzao kucheza kwani michezo huimarisha afya ya mili yetu. Bwana Omari ana gari kubwa la kifahari. Alilinunua baada ya kuhifadhi pesa zake benkini. Yeye hufahamu kuwa haba na haba hujaza kibaba. Huwashauri wanawe kuiga wazazi wao.

6. Familia ya Bwana Omari ina watu wangapi?
 A. Wanne
 B. Watano
 C. Sita
 D. Wawili
7. Ni kweli kusema kuwa Bwana Omari ni
 A. maskini
 B. tajiri
 C. mwalimu
 D. fukara
8. Ni nini maana ya msemo **hushika usukani**?
 A. Huongoza darasani
 B. Huwa wakorofi
 C. Huwa wa mwisho
 D. Huwa katikati
9. Ni mwanafunzi yupi hupenda mpira wa miguu?
 A. Karo
 B. Roda
 C. Eliza
 D. Wote

Soma kifungu kifuatacho kisha ujibu swali la 10 hadi la 12

Wanafunzi wa darasa la tano waliletewa matunda aina mbalimbali. Kila mmoja alichagua matunda aliyopenda.

Tazama jedwali hili kisha ujibu maswali

Mwanafunzi	Aina ya matunda
Ruto	Parachichi, pea, chungwa
Oyugi	Pea, limau, parachichi
Wambui	Nanasi, ndizi, pea
Lomodoni	Karakara, pea, parachichi

10. Ni tunda lipi lilipendwa na wanafunzi wote?
 A. Ndizi
 B. Parachichi
 C. Chungwa
 D. Pea

11. Ni mwanafunzi yupi alipenda chungwa?

A. Ruto

C. Lomodoni

B. Oyugi

D. Wambui

12. Ni tunda lipi lilipendwa na wanafunzi watatu?

A. Pea

C. Parachichi

B. Nanasi

D. Limau

Soma kifungu kifuatacho kisha ujibu swali la 13 hadi la 15.

Je, unajua usafi ni maisha? Usafi huwa wa aina nyingi. Kuna usafi wa mazingira, usafi wa mwili, usafi wa mawazo na usafi wa nguo. Tunafaa kuwa safi kila wakati. Darasa linafaa kuwa safi. Kufagia darasa huwa jambo la lazima. Kabla ya kufagia, hatuna budi kunyunyizia maji kupunguza vumbi. Vumbi huleta maradhi ya mapafu.

Baada ya kufagia, tunafaa kuokota takataka na kupeleka katika jaa. Baada ya vumbi kutulia, tunafaa kupanga madawati na kuyapangusa uchafu.

13. Kuna aina ngapi za usafi kulingana na kifungu hiki?

A. Tatu

C. Tano

B. Nne

D. Mbili

14. Vumbi lina madhara gani?

A. Huharibu macho

C. Huharibu vitabu

B. Huumiza koo

D. Huleta magonjwa

15. Uchafu hutupwa wapi?

A. Chooni

C. Jaani

B. Kichakani

D. Shimoni

Kutoka swali la 16 hadi la 20, chagua jibu bora zaidi kujaza mapengo.

Ndege ___16___ alikuwa amesimama ___17___ mti mrefu. Punde alimwona mwewe ___18___ alikuwa mkubwa sana. Alipaa na kujificha katika kichaka ___19___ na matawi mengi. Mwewe alikata tamaa na kuelekea ___20___ ambapo jua lilikuwa linatua.

16. A. yule

17. A. ndani ya

18. A. ambae

19. A. iliyokuwa

20. A. magharibi

B. ule

B. nje ya

B. ambao

B. kilichokuwa

B. kusini

C. ile

C. baina ya

C. ambaye

C. kiliyokuwa

C. mashariki

D. yale

D. juu ya

D. ambalo

D. lililokuwa

D. kaskazini

Kutoka swali la 21 hadi la 30, jibu kulingana na maagizo

21. Chagua kielezi katika sentensi hii: **Mwanafunzi yule alitembea polepole.**
A. yule
B. polepole
C. alitembea
D. mwanafunzi
22. Nomino **kipepeo** ni katika ngeli gani?
A. LI-YA
B. KI-VI
C. U-I
D. A-WA
23. Jibu maagano haya: **Alamsiki**
A. Binuru
B. Asante
C. Nawe pia
D. Inshallah
24. Tegua kitendawili hiki: **Huku ng'o na kule ng'o.**
A. Jua
B. Giza
C. Hindi
D. Usingizi
25. Chagua wingi wa sentensi hii: **Kichwa changu ni chepesi.**
A. Vichwa vyangu ni vyepesi.
B. Vichwa vyenu ni vyepesi.
C. Vichwa vyao ni vyepesi.
D. Vichwa vyetu ni vyepesi.
26. Neno **chakula** lina silabi ngapi?
A. Mbili
B. Saba
C. Nne
D. Tatu
27. Ni nini udogo wa neno **mtoto**?
A. Jitoto
B. Kitoto
C. Kijitoto
D. Toto
28. Chagua sentensi inayoonyesha wakati ujao?
A. Nitaenda sokoni.
B. Nilienda sokoni.
C. Ninaenda sokoni.
D. Nimeenda sokoni.
29. Kamilisha tashbihi: **Yeye ni mnene kama** ____
A. nguruwe
B. nyundo
C. ndovu
D. mbingu
30. Chagua kinyume cha neno lililopigiwa mstari.
Baada ya kicheko sote tulitoka.
A. kutabasamu
B. kilio
C. kununa
D. kukaa

KENYA INTER-COUNTY EXAMINATION



**KISWAHILI:
INSHA
GREDI YA TANO - 2023**

Jina: _____

Tarehe: _____

MUDA: DAKIKA 40

Andika mtungo kuhusu

MWIZI KIJIJINI

Lined area for writing the response.

KENYA INTER-COUNTY EXAMINATION INTEGRATED SCIENCE GRADE 5 - 2023

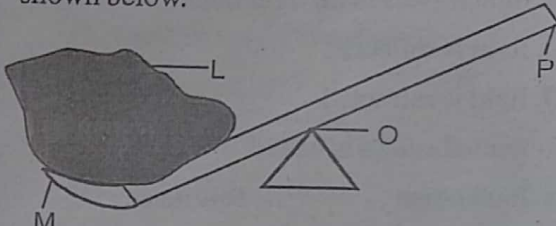


Time: 1hr 40mins

SECTION A:

SCIENCE & TECHNOLOGY (15mks)

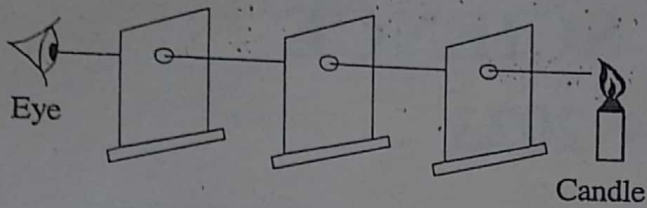
- Gordon collected the following samples of plants during nature walk. Which one was a non-flowering plant?
 - Mushroom
 - Pigweed
 - Aloe vera
 - Blackjack
- When handling harmful plants, learners were requested to observe the following safety precautions. Which one is not correct?
 - Wash your hands after handling plants
 - Taste some of the wild fruits
 - Use safety gloves
 - Wear dust mask
- Plants are classified into two main groups. Which one?
 - Non-flowering and flowering
 - Green and flowering
 - Green and non-green
 - Flowering and non-green
- Yusuf observed the sky one evening and saw clouds that were likely to bring rain. What type of clouds did he observed?

A. Cumulus	B. Stratus
C. Cirrus	D. Nimbus
- Neema drew and labelled parts of a lever as shown below.

Which part represent the effort?

 - L
 - M
 - P
 - O
- The following are examples of levers except
 - wheelbarrow
 - winch
 - beam balance
 - crowbar
- Tom explained why the handles of cooking spoons are made of wood or plastic. What reason did he give?
 - They are good conductors
 - They are metals
 - They conduct heat poorly
 - They lose heat fast

8. Grade four learners arranged three cardboards as shown below to investigate a certain property of light.



They wanted to show that

- A. light travels in a straight line
 B. light travels in all directions
 C. light is reflected
 D. light is refracted
9. Reflected sound is called
 A. loud noise B. soft noise
 C. high noise D. echo
10. A dry log of wood floats in water while a needle sinks in water. This is due to their difference in
 A. shape B. material
 C. size D. weight
11. Which of the following examples of matter has the following characteristics?
 i) has fixed volume
 ii) has indefinite shape
 iii) it is viscous
 A. Flour B. Dust
 C. Milk D. Water vapour

12. Below is a coded language

$$\text{Cup} + \text{Circle} + \text{Apple} = 45$$

$$\text{Circle} + \text{Circle} + \text{Apple} = 40$$

$$\text{Cup} + \text{Apple} = 30$$

What will be the value of

$$\text{Circle} + \text{Cup} = ?$$

- A. 35
 B. 30
 C. 20
 D. 15
13. The part of a computer that types into the computer is called a
 A. monitor B. keyboard
 C. mouse D. processor
14. The following are good ways of using digital devices **except**
 A. taking photographs
 B. playing games
 C. watching pornography
 D. recording videos
15. Aniko was using a phone to download learning materials. As he continued he realized the phone's battery was going low. What should Aniko do to the phone?
 A. Throw it away
 B. Buy another phone
 C. Borrow another phone
 D. Charge the phone

SECTION B:

HOME SCIENCE (10mks)

16. Pre-adolescent stage occurs between the age of
 A. 9 and 12 years
 B. 18 and 20 years
 C. 4 and 8 years
 D. 13 and 18 years

17. Eva is a pre-teen girl. She takes bath every morning, brushes her teeth and wears clean clothes everyday. This is known as

- A. dressing self
- B. good grooming
- C. daily routine
- D. keeping fit

18. On their way to school, Osongo and Nyako discussed about the changes that they had started experiencing in their bodies as follows.

- i) voice breaks
- ii) menstruation begins
- iii) pubic hair grows
- iv) wet dreams begin
- v) changes in body shape and size

Which of the changes discussed takes place in both boys and girls?

- A. i and iii
- B. iii and v
- C. iv and v
- D. ii and iii

19. Teacher Grace asked grade four girls to discuss reasons why buttons are used on clothes. They came up with the following observations.

Atieno - To close an opening

Kuria - To decorate clothes

Kazungu - To fasten clothes

Fatuma - To join two pieces of cloth

Who among the learners was **incorrect**?

- A. Kazungu
- B. Atieno
- C. Fatuma
- D. Kuria

20. Shakina was dressing her younger sister. She noticed that her sister had developed some white spots around her mouth. Shakina's sister is likely to be suffering from

- A. malaria
- B. anaemia
- C. flu
- D. measles

21. Etiquette means having good behaviour in a group. A pre-teen can show etiquette in the following ways **except**

- A. being polite
- B. maintaining personal hygiene
- C. bullying others
- D. using good table manners

22. Peter and Kelvin wanted to improvise good grooming items. They collected the following materials.

- i) twigs from herbal plants
- ii) knife
- ii) salt

Which item did they make?

- A. Soap dish
- B. Tooth brush
- C. Comb
- D. Scrubber

23. Grandmother preserves her milk in the item shown below.

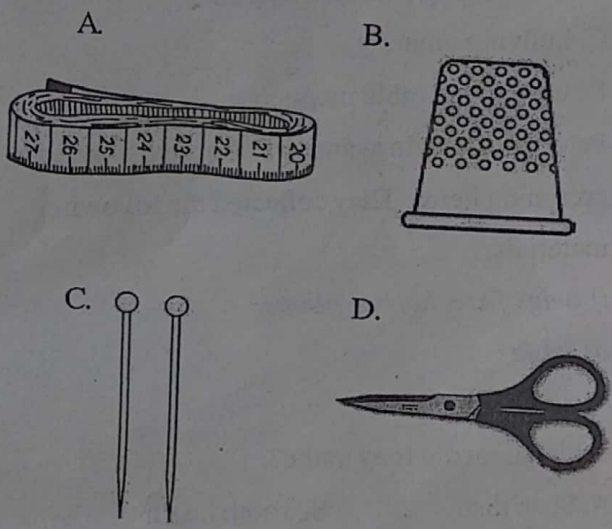


This method of preserving milk is known as

- A. boiling
- B. refrigeration
- C. fermentation
- D. sundrying

24. Gakii and Kibet drinks milk everyday before going to school. What does the milk do for them?
- A. It makes them fat
 - B. It makes their bones strong
 - C. It makes them smell well
 - D. It makes them happy

25. The diagrams shown below are needle work tools. Which is the best tool for protecting the finger when sewing?



SECTION C:
AGRICULTURE (10mks)

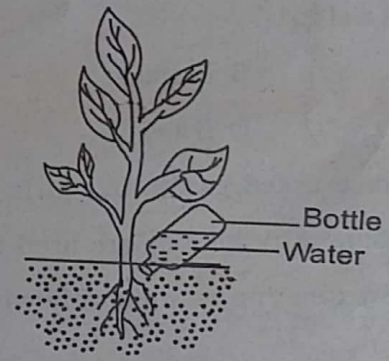
26. The excess water that flows on the ground surface is called
- A. soil erosion
 - B. run-off
 - C. soil pollution
 - D. soil deposition
27. Cornel wanted to collect soil from soil deposition site. He used the tools below except
- A. spade
 - B. wheelbarrow
 - C. buckets
 - D. rake

28. The process by which soil is moved by wind or water from one place to another is called
- A. soil recovery
 - B. soil erosion
 - C. soil sedimentation
 - D. soil conservation

29. A farmer in a certain farm used water in many ways. Which one is **not** one of the ways?
- A. Spraying animals
 - B. Watering crops
 - C. Swimming
 - D. Watering animals

30. Grade five learners visited a rice growing field. Which soil type are they likely to encounter?
- A. Clay
 - B. Sand
 - C. Silt
 - D. Loam

31. A farmer practised the following method of watering crops.



- Why is the method more efficient?
- A. It wastes a lot of water
 - B. It conserves water
 - C. It uses little space
 - D. It is difficult to instal
32. Opore wanted to collect fruit seeds for planting. He can get them from the following places **except**
- A. fruit farms
 - B. local nurseries
 - C. compost pits
 - D. local market


33. Below are characteristics of a certain type of soil

- i) good drainage
- ii) large air spaces
- iii) rough texture

Which crops are likely to be grown in the soil?

- A. Coconuts B. Rice
- C. Maize D. Coffee

34. Below is a picture of a domestic animal.



The domestic animal is important in the farm in the following ways **except**

- A. for beauty
 - B. provide manure
 - C. source of meat
 - D. source of milk
35. Grade five learners had vegetable garden project. How would they ensure effective management of the project?
- A. Leave duties to one person
 - B. Have a duty rota
 - C. Plant one type of crop only
 - D. Put the farm next to the office

PHYSICAL & HEALTH EDUCATION (15mks)

36. The following are importance of participating in running activities. Which one is **not**?
- A. Helps to control body weight
 - B. Helps in relieving stress
 - C. Improves mental health
 - D. Leads to breathing problems

37. Grade five learners were practising medium start in sprints. What should be the body position during the command "On your marks"?

- A. Crouch position B. Straight
- C. Elongated D. Hands together

38. Hope wanted to improvise relay batons. Which of the following items would be the best to improvise the batons?

- A. Plastic pipes
- B. Glass bottles
- C. Metal pipes
- D. Metal rods

39. How do you land when performing standing long jump?

- A. On the toes
- B. On the heels
- C. On the ball of the foot
- D. On the knees

40. A learner was seen performing the gymnastic skill below.



The gymnastic skill is called

- A. head stand
- B. hands stand
- C. elbow balance
- D. swan balance

41. Which of the passes below can be used to make a long pass?

- A. Bounce pass
- B. Chest pass
- C. Overhead pass
- D. Underarm pass

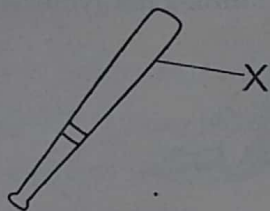
42. Grade five learners are practising passing in soccer. Which of the following parts of the foot is **not** used in passing the ball?

- A. Inside of the foot
- B. Instep
- C. Outside of the foot
- D. Toes

43. Rebecca was hand juggling. She was using all the following materials **except**

- A. handkerchief
- B. spoon
- C. scarfs
- D. balls

44. The diagram below represents a rounders bat.



The part labelled X is called

- A. knob
- B. handle
- C. barrel
- D. end cap

45. How many posts are used in rounders?

- A. Four
- B. Three
- C. Two
- D. One

46. Cherera wanted to improvise ropes for rope skipping. Which one of the following would she **not** use?

- A. Sisal fibre
- B. Old clothes
- C. Tissue bags
- D. Plastic bottles

47. Collins and Ahmed are playing one-handed rim catch in the game of frisbee. How should they catch the disc?

- A. With open arms
- B. Between the thumb and fingers
- C. With their fingers
- D. With both hands

48. Grade five learners were going for swimming lesson. They were to observe the following rules and regulations **except**

- A. use proper costumes
- B. take shower before swimming
- C. push each other into the pool
- D. have life savers

49. Moraa got a bruise as they played. She should have received the following first aid **except**

- A. apply cold press
- B. elevate the injured part
- C. clean the injured part
- D. apply heat treatment

50. Sportsmen are advised to take a lot of water. Why do you think so?

- A. To prevent dehydration
- B. To wash the body
- C. To prevent constipation
- D. To prevent fatigue

KENYA INTER-COUNTY EXAMINATION

CREATIVE ARTS & SOCIAL STUDIES

GRADE 5 - 2023



Time: 1hr 40mins


Part 1: ART AND CRAFT (10mks)

1. Some learners decorated their wet pot for a competition by sticking items. Below is the winning team's pot.



What do we call this type of decoration?

- A. Sticking
B. Pasting
C. Embedding
D. Beading
2. A team of learners decorated their pot by making shapes and patterns using a sharp object. This form of decoration is called
- A. embedding
B. incising
C. stamping
D. cutting
3. Marina made an expandable folder to keep all her artwork.



All the following are steps in making expandable folder **except**

- A. cut out outer covers
B. glue paper bags
C. pleat some papers
D. stitching papers with needle
4. The puppets below were made to make some money.



How can you earn money through puppetry?

- A. By painting the puppet

- B. By selling the puppet
C. By putting hair on the puppet
D. By sticking beautiful nose
5. Which one of the following pairs are types of puppets?

- A. Gloves and rod
B. Socks and tin
C. Clay and fabric
D. Finger and glass

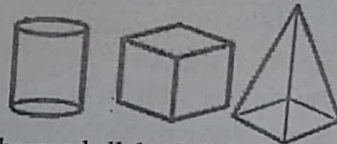
6. While doing a paper craft at home, you realize that you forgot to buy glue. You would make glue from the kitchen using _____ and water.

- A. sugar
B. maize flour
C. wheat flour
D. potato paste

7. A drawing of an arrangement of non-moving objects is called

- A. still life drawing
B. non-living drawing
C. arrangement drawing
D. pencil drawing

8. Wanda drew the diagrams below:



She used all the following elements of art **except**

- A. form
B. value
C. lines
D. shapes


9. Grade five learners drew the picture below in groups. They used many principles of art to make the picture perfect.



Which one of the following is **not** a principle of art?

- A. Balance
B. Overlapping
C. Proportions
D. Texture

10. We have different ways of shading. Some make images appear smooth and others rough.



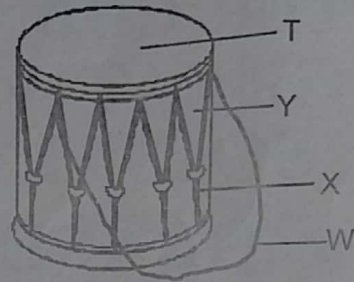
The images above have been shaded using _____ technique.

- A. cross-hatching
- B. smudging
- C. texture shade
- D. lines shade


Part 2: MUSIC (10mks)

11. The East African anthem is sang to show unity among the East African community members. It is sang in the following occasions **except**
- A. during national holidays
 - B. during school assembly
 - C. during East Africa regional meetings
 - D. during church festivals
12. While listening to recordings played by the teacher, grade five learners heard the song, "Wash your hands, "Wash your hands." This is a _____ song.
- A. patriotic
 - B. action
 - C. topical
 - D. religious
13. Learners from Chakol primary school wanted to perform a folk dance. They shared out the roles as follows:
- Lavender - Singer
 - Grace - Soloist
 - Donata - Instrumentalist
 - Shumeya - Dancer
- Who among the learners will lead the singing during the performance?
- A. Lavender
 - B. Shumeya
 - C. Donata
 - D. Grace
14. When performing a folk song, we use gestures and facial expressions to show the _____ of the song.
- A. tempo
 - B. mood
 - C. volume
 - D. beat

Use the diagram below to answer questions 15 and 16.



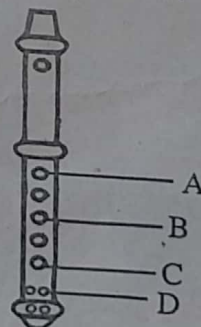
15. Which of the labelled parts is used for tuning the instrument?
- A. W
 - B. T
 - C. Y
 - D. X
16. What is the role of the part marked T? To
- A. make the sound louder
 - B. produce sound
 - C. carry the drum
 - D. make the sound tight
17. Choose a group that contains melodic percussion instruments only?
- A. Drum and kayamba
 - B. Marimba and Adongo
 - C. Mulele and Chivoti
 - D. Shaker and Olwika
18. Which french rhythm is used to show two short beats?
- A. Taa
 - B. Taa-aa
 - C. Ta-te
 - D. Taa-aa-aa-aa
19. The diagram below represents an instrument from a Kenyan community.



The instrument is played by

- A. bowing
- B. shaking
- C. blowing
- D. striking

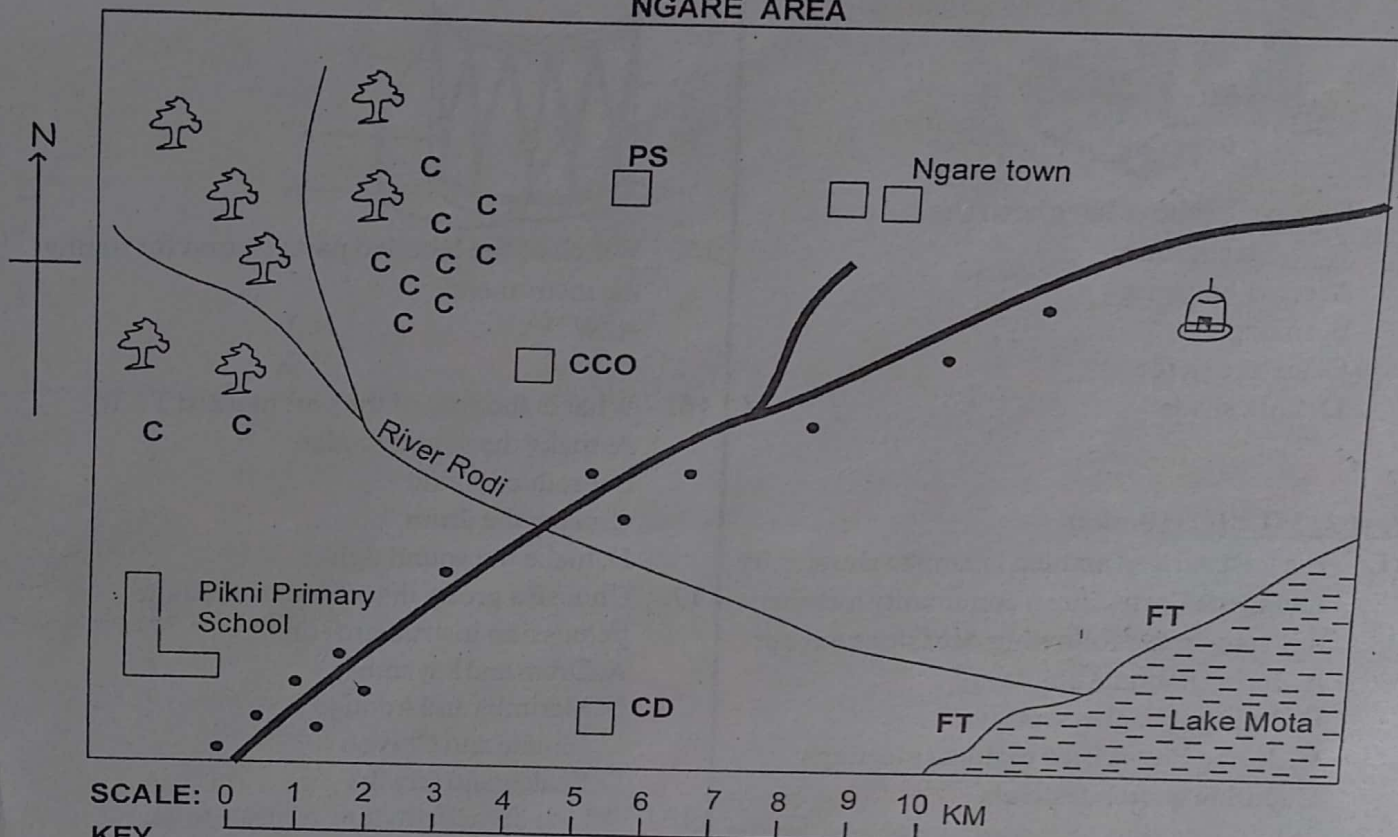
20. Aliso wants to play note B on the descant recorder below. Which hole should he cover to play note B.



PART 3: SOCIAL STUDIES (35mks)

Study the map of Ngare Area below and use it to answer questions 21-25

NGARE AREA



KEY			
CCC	Coffee farms	PS	Police Station
CCO	County Council Offices	FT	Fish Traps
CD	Cattle Dip		Forest
			Tarmac road
			Settlements
			Mosque

21. Which of the following is **not** an economic activity in Ngare area?
 - A. Fishing
 - B. Crop farming
 - C. Livestock farming
 - D. Trading
22. The main type of settlement in Ngare area is
 - A. nuclear settlement
 - B. linear settlement
 - C. scattered settlement
 - D. evenly distributed settlement
23. Lari lives in Ngare town. He wants to go for worship. Which is the main worship day of his religion?
 - A. Friday
 - B. Sunday
 - C. Saturday
 - D. Monday
24. What is the direction of the cattle dip from the mosque?
 - A. South West
 - B. North East
 - C. North West
 - D. South East
25. Who is likely to be the head of Ngare area?
 - A. Chief
 - B. County Commissioner
 - C. Governor
 - D. Assistant chief
26. How many counties are there in Kenya?
 - A. 290
 - B. 67
 - C. 47
 - D. 20

40. Grade five learners wanted to choose their class secretary. Which of the following qualities will they not look for?
- A. Organized B. Disrespectful
C. Committed D. Honest
41. An activity that one starts to get money is called
- A. voluntary work B. charity work
C. enterprise project D. donations
42. Which industry makes sculptures?
- A. Weaving industry
B. Clothing and textile industry
C. Wood work industry
D. Carving industry
43. Which of the following is an illegal trade?
- A. Selling clothes in a boutique
B. Selling foodstuffs in a restaurant
C. Selling cocaine
D. Selling fruits in a green grocery
44. Due to the long drought experience in the country, grade four learners wanted to conserve the forests around their school compound. They can do the following **except**
- A. deforestation
B. reafforestation
C. afforestation
D. watering the trees
45. The following are importances of hills and mountains. Which one is **not**?
- A. They attract tourists
B. They are hiding places for bandits
C. They attract rainfall
D. They are source of rivers
46. Important beliefs that guide the members of a school are called
- A. school motto
B. mission statement
C. core values
D. the school vision
47. Bondo matched the aspects of culture and their importance. Which one was **wrongly** matched?
- | Aspects | Importance |
|--------------------|-------------------|
| A. Housing | Cover nakedness |
| B. Food | Keep body healthy |
| C. Sports | Physical fitness |
| D. Songs and dance | Entertainment |
48. The way in which the population is spread in a given area is called
- A. population
B. population distribution
C. population density
D. settlement
49. People depend on _____ for treatment.
- A. nurse B. doctor
C. pastor D. priest
50. The following are historic built environment in Kenya. Which one is **not**?
- A. Fort Jesus
B. Vasco da Gama pillar
C. Koobi Fora
D. Parliament building
51. Grade four learners visited a historic built environment in their county. How can they take care of it? By
- A. clearing and washing the walls
B. throwing wastes around it
C. leaving tall grasses around it
D. defacing the walls
52. Which activities do you carry out during rainy season?
- A. Harvesting crops B. Weeding
C. Planting crops D. Drying crops
53. How should grade five learners take care during cold and wet weather?
- A. Wear vests
B. Play bare footed
C. Wear heavy clothes
D. Sit under trees

54. Agatha meets a stranger on her way to the church on Sunday morning. Which of the following should she **not** do?
- A. Accept gifts from the stranger
 B. Run away
 C. Call for help
 D. Raise alarm
55. Which one of the following countries borders Kenya to the South?
- A. Uganda B. Tanzania
 C. Ethiopia D. Sudan

PART 4:

SECTION A: CRE (15mks)

56. The reason for which something is done or created for is called
- A. importance B. purpose
 C. talent D. ability
57. The parable of the talent is also called the parable of
- A. mustard seed B. prodigal son
 C. three servants D. lost coin
58. Angela, a grade six girl is talented in singing. How best can she use her talent? To
- A. serve God B. boast
 C. make money D. hide the talent
59. Moses used his father's mobile phone to chat on social media. Which one of the following is **not** good moral when using social media?
- A. Inciting others
 B. Respecting others
 C. Treating others kindly
 D. Telling the truth
60. Hanna is in grade five. On Fridays all learners help in cleaning the school compound. When Hanna finishes her work, she goes to help young children in grade one. Which fruit of the Holy Spirit does Hanna have?
- A. Joy B. Peace
 C. Self control D. Love
61. What are the words of the first line of the Lord's prayer?
- A. May your kingdom come
 B. Our Father in heaven
 C. Do not put us on temptation
 D. Give us today our daily bread
62. Who among the following was stoned to death due to his faith in Jesus Christ?
- A. Paul B. John the baptist
 C. Stephen D. Peter
63. Believers were first called Christians in a town called
- A. Antioch B. Jerusalem
 C. Judea D. Bethlehem
64. Who among the disciples of Jesus were called the sons of thunder?
- A. John and Peter B. James and Andrew
 C. Andrew and Peter D. James and John
65. According to 1 Corinthians, 6:19-20, we learn that our bodies are the temple of the
- A. devil B. Holy Spirit
 C. satan D. evil
66. Your teacher always tells you to make sure you are smart. However, your shirt is always untucked. What do you think will happen to you?
- A. Be punished B. Be appreciated
 C. Be applauded D. Be cherished
67. Dina tried doing homework but she found it hard. She decided to sleep since there was no one to help her in the house. Dina went to school without doing her homework. What should Dina have done when asked why she did not do the homework?
- A. There was no light at home
 B. Her mother refused to help her
 C. Tell the teacher the truth
 D. Run and go home
68. Who among the following went to Jesus at night to find out more about who to be born again?
- A. Joseph B. Nicodemus
 C. Philip D. John
69. Who was the blind beggar who was healed by Jesus Christ?
- A. Barnabas B. Anania
 C. Nichodemus D. Bartimaeus
70. Which of the following is **not** true about Zacchaeus?
- A. He was a sinner
 B. He repented
 C. He was tall
 D. He was a tax collector