


**GRADE 7 JSS HEAD START EXAMS 2024  
COMPUTER SCIENCE**

1. Name the parts of a desktop computer (2mks)


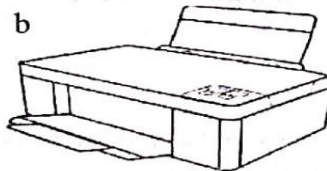


- (i) \_\_\_\_\_
- (ii) \_\_\_\_\_
- (iii) \_\_\_\_\_
- (iv) \_\_\_\_\_

2. Write the three main components of the computer system. (3mrks)

- (a) \_\_\_\_\_
- (b) \_\_\_\_\_
- (c) \_\_\_\_\_

3. Name the following computer parts. (6mks)



(Printer, Flash disk, Webcam)

Group the above devices into;

Output	input	storage
_____	_____	_____

4. Write the meaning of the following as used by the computer. (3mks)

- (i) G.U.I \_\_\_\_\_
- (ii) R.A.M \_\_\_\_\_
- (iii) C.P.U \_\_\_\_\_



5. A software created to detect, present and remove hardware is called \_\_\_\_\_

(1mk)

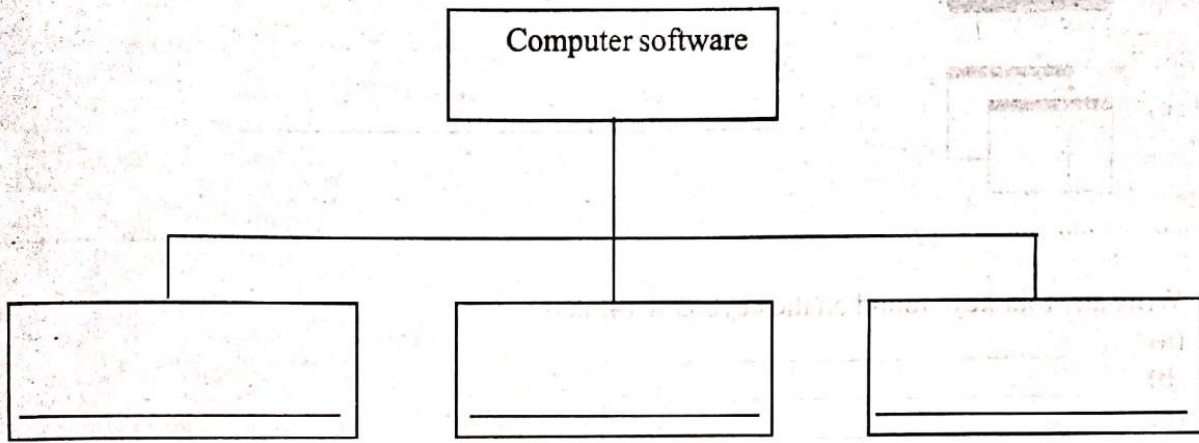
Name two examples of antivirus. (2mks)

(a) \_\_\_\_\_

(b) \_\_\_\_\_

6. Computer software is made up of three **main** types.

Complete the diagram below.



7. Name four examples of word processing data? (4mks)

(a) \_\_\_\_\_

(b) \_\_\_\_\_

(c) \_\_\_\_\_

(d) \_\_\_\_\_

Write four different versions of microsoft word process. (4mks)

(a) \_\_\_\_\_


(b) \_\_\_\_\_


(c) \_\_\_\_\_

(d) \_\_\_\_\_




8. In word document, write the name of the following symbols. (5mks)

(a)  \_\_\_\_\_

(b)  \_\_\_\_\_

(c)  \_\_\_\_\_

(d)  \_\_\_\_\_

(e)  \_\_\_\_\_

9. Write any four keys found on the keyboard. (4mks)

(a) \_\_\_\_\_  
(b) \_\_\_\_\_  
(c) \_\_\_\_\_  
(d) \_\_\_\_\_

10. A program used in computer for doing Maths is called \_\_\_\_\_ (1 mk)

11. Name four classification of computers by their size. (4mks)

(a) \_\_\_\_\_  
(b) \_\_\_\_\_  
(c) \_\_\_\_\_  
(d) \_\_\_\_\_

12. Write two games you can play on the computer. (2mks)

(a) \_\_\_\_\_  
(b) \_\_\_\_\_

13. State four safety measures to observe when using computing devices (4mks)

(i) \_\_\_\_\_  
(ii) \_\_\_\_\_  
(iii) \_\_\_\_\_  
(iv) \_\_\_\_\_